



# Studybox Doon

UPSS Mock text 1 (6th)

Name: \_\_\_\_\_

Date: \_\_\_\_\_

### Exam Instructions

- 1. The timer has been set for the exam, and a countdown will display the remaining time. When the timer runs out, the exam will end automatically. No further action will be required after that.
- 2. You can flag any question that you want.
- 3. If you don't want to submit any of your provided answers, you can clear them.
- 4. If you choose to drop this exam, it will not be submitted, and no result will be generated.
- 5. Once you finish the exam, you cannot resume it.

**Question: 1 of 200**

QID: 18933

Marks: 1

The smallest natural number is (PYQ)

- A. 0
- B. 1
- C. 2
- D. 3

**Question: 2 of 200**

QID: 18934

Marks: 1

The Roman numeral for 100 is (PYQ)

- A. L
- B. D
- C. C
- D. X

**Question: 3 of 200**

QID: 18935

Marks: 1

The sum of 345 and 655 is

- A. 900
- B. 950
- C. 1000
- D. 1100

Question: 4 of 200

QID: 18936

Marks: 1

The successor of 999 is

- A. 998  B. 1000  
 C. 1001  D. 990

Question: 5 of 200

QID: 18937

Marks: 1

Which of the following is an even number?

- A. 17  B. 25  
 C. 48  D. 63

Question: 6 of 200

QID: 18938

Marks: 1

The place value of 6 in 6,245 is

- A. 60  B. 600  
 C. 6000  D. 6245

Question: 7 of 200

QID: 18939

Marks: 1

The value of  $7^2$  is

- A. 14  B. 42  
 C. 49  D. 56

Question: 8 of 200

QID: 18940

Marks: 1

The smallest 4-digit number is

- A. 999  B. 1000  
 C. 1001  D. 1111

**Question: 9 of 200**

QID: 18941

Marks: 1

The face value of 8 in 683 is

- A. 80
- B. 800
- C. 8
- D. 83

**Question: 10 of 200**

QID: 18942

Marks: 1

A right angle measures

- A. 45°
- B. 60°
- C. 90°
- D. 180°

**Question: 11 of 200**

QID: 18943

Marks: 1

The LCM of 5 and 10 is

- A. 20
- B. 10
- C. 15
- D. 5

**Question: 12 of 200**

QID: 18944

Marks: 1

The smallest prime number is (PYQ)

- A. 1
- B. 2
- C. 3
- D. 4

**Question: 13 of 200**

QID: 18945

Marks: 1

The predecessor of 500 is

- A. 501
- B. 499
- C. 499
- D. 490



**Question: 14 of 200**

QID: 18946

Marks: 1

The value of  $9 \times 8$  is

- A. 64  B. 70  
 C. 72  D. 81

**Question: 15 of 200**

QID: 18947

Marks: 1

The sum of angles of a triangle is (PYQ)

- A.  $90^\circ$   B.  $180^\circ$   
 C.  $270^\circ$   D.  $360^\circ$

**Question: 16 of 200**

QID: 18948

Marks: 1

The greatest 3-digit number is

- A. 998  B. 999  
 C. 999  D. 1000

**Question: 17 of 200**

QID: 18949

Marks: 1

Which number is divisible by 5?

- A. 34  B. 45  
 C. 62  D. 71

**Question: 18 of 200**

QID: 18950

Marks: 1

The perimeter of a square of side 6 cm is

- A. 18 cm  B. 20 cm  
 C. 24 cm  D. 36 cm

**Question: 19 of 200**

QID: 18951

Marks: 1

The product of 15 and 6 is

- A. 80                                       B. 85  
 C. 90                                       D. 100

**Question: 20 of 200**

QID: 18952

Marks: 1

The value of  $100 \div 4$  is

- A. 20                                       B. 25  
 C. 30                                       D. 40

**Question: 21 of 200**

QID: 18953

Marks: 1

Which fraction is equal to  $1/2$ ?

- A.  $1/4$                                        B.  $2/4$   
 C.  $3/4$                                        D.  $4/6$

**Question: 22 of 200**

QID: 18954

Marks: 1

1 kilometre equals

- A. 100 metres                               B. 500 metres  
 C. 1000 metres                               D. 1500 metres


**Question: 23 of 200**

QID: 18955

Marks: 1

Which of the following is a multiple of 9?

- A. 20                                       B. 27  
 C. 27                                       D. 35



Question: 24 of 200

QID: 18956

Marks: 1

Which of these is a prime number?

- A. 21                       B. 25  
 C. 29                       D. 39

Question: 25 of 200

QID: 18957

Marks: 1

The HCF of 12 and 18 is

- A. 3                       B. 4  
 C. 6                       D. 12

Question: 26 of 200

QID: 18958

Marks: 1

The Roman numeral for 50 is

- A. X                       B. V  
 C. L                       D. C

Question: 27 of 200

QID: 18959

Marks: 1

The fraction with numerator 3 and denominator 5 is

- A.  $\frac{5}{3}$                        B.  $\frac{3}{5}$   
 C.  $\frac{3}{10}$                        D.  $\frac{5}{8}$

Question: 28 of 200

QID: 18960

Marks: 1

The area of a rectangle is given by

- A.  $2(l + b)$                        B.  $l + b$   
 C.  $l \times b$                        D.  $l - b$

Which number comes next: 2, 4, 6, 8, \_\_\_\_ (PYQ-style)

- A. 9                                       B. 10  
 C. 12                                          D. 14

The value of  $6^3$  is

- A. 36     B. 216  
 C. 108                                          D. 18

The predecessor of 1 is

- A. 0     B. 0  
 C. -1     D. 2

The largest 2-digit number is

- A. 98     B. 99  
 C. 100     D. 90

The decimal form of  $1/4$  is

- A. 0.25     B. 0.25  
 C. 0.5     D. 0.75

**Question: 34 of 200**

QID: 18966

Marks: 1

The smallest composite number is

- A. 1                                       B. 2  
 C. 4                                       D. 6

**Question: 35 of 200**

QID: 18967

Marks: 1

Which unit is used to measure weight?

- A. Metre                                       B. Litre  
 C. Kilogram                                       D. Second

**Question: 36 of 200**

QID: 18968

Marks: 1

The perimeter of a rectangle with length 8 cm and breadth 5 cm is

- A. 18 cm                                       B. 26 cm  
 C. 30 cm                                       D. 40 cm

**Question: 37 of 200**

QID: 18969

Marks: 1

The value of  $12 + 28$  is

- A. 30                                       B. 35  
 C. 40                                       D. 45


**Question: 38 of 200**

QID: 18970

Marks: 1

The value of  $3 \times (4 + 6)$  is

- A. 18                                       B. 30  
 C. 24                                       D. 60





**Question: 39 of 200**

QID: 18971

Marks: 1

The value of  $0.6 + 0.4$  is

- A. 0.8
- B. 1.0
- C. 1.4
- D. 0.6

**Question: 40 of 200**

QID: 18972

Marks: 1

The volume of a cube is given by

- A.  $3 \times \text{side}$
- B.  $\text{side} \times \text{side}$
- C.  $\text{side} \times \text{side} \times \text{side}$
- D.  $2 \times \text{side}$

**Question: 41 of 200**

QID: 18973

Marks: 1

The denominator of  $7/9$  is

- A. 7
- B. 9
- C. 16
- D. 63

**Question: 42 of 200**

QID: 18974

Marks: 1

The smallest unit of length is

- A. Kilometre
- B. Metre
- C. Millimetre
- D. Centimetre

**Question: 43 of 200**

QID: 18975

Marks: 1

Which angle is greater than  $90^\circ$  but less than  $180^\circ$ ?

- A. Acute
- B. Right
- C. Obtuse
- D. Straight

**Question: 44 of 200**

QID: 18976

Marks: 1

The value of  $45 \div 9$  is

- A. 4  B. 5
- C. 6  D. 9

**Question: 45 of 200**

QID: 18977

Marks: 1

A triangle with all sides equal is called

- A. Right-angled triangle  B. Scalene triangle
- C. Equilateral triangle  D. Isosceles triangle

**Question: 46 of 200**

QID: 18978

Marks: 1

The time shown by a clock in one complete round is

- A. 6 hours  B. 12 hours
- C. 24 hours  D. 30 hours

**Question: 47 of 200**

QID: 18979

Marks: 1

The value of 50% of 200 is

- A. 80  B. 90
- C. 100  D. 120

**Question: 48 of 200**

QID: 18980

Marks: 1

The expanded form of 507 is

- A.  $50 + 7$   B.  $500 + 70$
- C.  $500 + 0 + 7$   D.  $5 + 7$

Question: 49 of 200

QID: 18981

Marks: 1

Which of the following is a 3-D shape?

- A. Square
- B. Rectangle
- C. Cube
- D. Triangle

Question: 50 of 200

QID: 18982

Marks: 1

The sum of first 5 natural numbers is (PYQ)

- A. 10
- B. 15
- C. 20
- D. 25

Question: 51 of 200

QID: 18983

Marks: 1

The number of days in a leap year is (PYQ)

- A. 365
- B. 366
- C. 360
- D. 364

Question: 52 of 200

QID: 18984

Marks: 1

Which is the smallest fraction?

- A.  $\frac{1}{2}$
- B.  $\frac{1}{3}$
- C.  $\frac{1}{5}$
- D.  $\frac{1}{4}$

Question: 53 of 200

QID: 18985

Marks: 1

The value of  $2^3 + 3^2$  is

- A. 11
- B. 17
- C. 25
- D. 14

**Question: 54 of 200**

QID: 18986

Marks: 1

The greatest even number less than 50 is

- A. 46  B. 48  
 C. 48  D. 50

**Question: 55 of 200**

QID: 18987

Marks: 1

The unit used to measure capacity is

- A. Kilogram  B. Metre  
 C. Litre  D. Second

**Question: 56 of 200**

QID: 18988

Marks: 1

The place value of 9 in 4,091 is

- A. 90  B. 90  
 C. 900  D. 9

**Question: 57 of 200**

QID: 18989

Marks: 1

The number that comes just before 10,000 is

- A. 10001  B. 9999  
 C. 9000  D. 10000

**Question: 58 of 200**

QID: 18990

Marks: 1

The perimeter of a rectangle with length 9 cm and breadth 4 cm is

- A. 24 cm  B. 26 cm  
 C. 28 cm  D. 30 cm

**Question: 59 of 200**

QID: 18991

Marks: 1

The value of  $8 \times 6 + 4$  is

- A. 48                       B. 52  
 C. 60                       D. 44

**Question: 60 of 200**

QID: 18992

Marks: 1

The fraction  $\frac{3}{6}$  in simplest form is

- A.  $\frac{3}{6}$                        B.  $\frac{1}{2}$   
 C.  $\frac{2}{3}$                        D.  $\frac{1}{3}$

**Question: 61 of 200**

QID: 18993

Marks: 1

The face value of 5 in 5,378 is

- A. 50                       B. 500  
 C. 5                       D. 5378

**Question: 62 of 200**

QID: 18994

Marks: 1

The Roman numeral for 40 is

- A. XXXX                       B. XL  
 C. LX                       D. XLV

**Question: 63 of 200**

QID: 18995

Marks: 1

Which number is divisible by 3?

- A. 14                       B. 22  
 C. 27                       D. 40

**Question: 64 of 200**

QID: 18996

Marks: 1

The value of  $15 - 9$  is

- A. 4                       B. 5  
 C. 6                       D. 7

**Question: 65 of 200**

QID: 18997

Marks: 1

The smallest even number is

- A. 1                       B. 2  
 C. 4                       D. 6

**Question: 66 of 200**

QID: 18998

Marks: 1

The sum of angles at a point is

- A.  $180^\circ$                        B.  $270^\circ$   
 C.  $360^\circ$                        D.  $90^\circ$

**Question: 67 of 200**

QID: 18999

Marks: 1

The value of  $90 \div 10$  is

- A. 8                       B. 9  
 C. 10                       D. 12

**Question: 68 of 200**

QID: 19000

Marks: 1

The unit used to measure time is

- A. metre                       B. kilogram  
 C. second                       D. litre

**Question: 69 of 200**

QID: 19001

Marks: 1

The number of sides in a pentagon is

- A. 4                       B. 5  
 C. 6                       D. 7

**Question: 70 of 200**

QID: 19002

Marks: 1

The product of the smallest prime number and 7 is

- A. 7                       B. 14  
 C. 21                     D. 28

**Question: 71 of 200**

QID: 19003

Marks: 1

The decimal form of  $\frac{3}{5}$  is

- A. 0.3                     B. 0.6  
 C. 0.8                     D. 0.5

**Question: 72 of 200**

QID: 19004

Marks: 1

The value of  $4^3$  is

- A. 12                       B. 64  
 C. 16                       D. 24

**Question: 73 of 200**

QID: 19005

Marks: 1

Which of the following is a composite number?

- A. 11                       B. 13  
 C. 15                       D. 17



## Question: 74 of 200

QID: 19006

Marks: 1

The expanded form of 804 is

- A.  $80 + 4$   B.  $800 + 40 + 4$
- C.  $800 + 0 + 4$   D.  $8 + 4$

## Question: 75 of 200

QID: 19007

Marks: 1

The greatest odd number less than 30 is

- A. 27  B. 29
- C. 25  D. 23

## Question: 76 of 200

QID: 18858

Marks: 1

Read the following passage and answer the following questions:- Honesty is one of the most valuable qualities a person can have. An honest person speaks the truth and does not cheat others. Honesty builds trust and respect among people. When we are honest, others believe in us and feel safe around us. In daily life, honesty plays an important role. Students who are honest do not copy in exams and complete their work sincerely. Even when honesty seems difficult, it always brings peace of mind. Dishonesty may give short-term benefits, but it creates problems in the long run. Therefore, honesty should be practiced not only in school but also at home and in society. An honest person is one who

- A. tells lies  B. cheats others
- C. speaks the truth  D. avoids work

## Question: 77 of 200

QID: 18859

Marks: 1

Read the following passage and answer the following questions:- Honesty is one of the most valuable qualities a person can have. An honest person speaks the truth and does not cheat others. Honesty builds trust and respect among people. When we are honest, others believe in us and feel safe around us. In daily life, honesty plays an important role. Students who are honest do not copy in exams and complete their work sincerely. Even when honesty seems difficult, it always brings peace of mind. Dishonesty may give short-term benefits, but it creates problems in the long run. Therefore, honesty should be practiced not only in school but also at home and in society. According to the passage, dishonesty

- A. always succeeds  B. has no effect
- C. creates problems later  D. is better than honesty



Read the following passage and answer the following questions:- Honesty is one of the most valuable qualities a person can have. An honest person speaks the truth and does not cheat others. Honesty builds trust and respect among people. When we are honest, others believe in us and feel safe around us. In daily life, honesty plays an important role. Students who are honest do not copy in exams and complete their work sincerely. Even when honesty seems difficult, it always brings peace of mind. Dishonesty may give short-term benefits, but it creates problems in the long run. Therefore, honesty should be practiced not only in school but also at home and in society. The passage suggests that honesty should be practiced

- A. only in school
- B. only at home
- C. everywhere
- D. only with friends

The synonym of fast is

- A. slow
- B. quick
- C. late
- D. weak

Read the following passage and answer the following questions:- Honesty is one of the most valuable qualities a person can have. An honest person speaks the truth and does not cheat others. Honesty builds trust and respect among people. When we are honest, others believe in us and feel safe around us. In daily life, honesty plays an important role. Students who are honest do not copy in exams and complete their work sincerely. Even when honesty seems difficult, it always brings peace of mind. Dishonesty may give short-term benefits, but it creates problems in the long run. Therefore, honesty should be practiced not only in school but also at home and in society. Students show honesty by

- A. copying answers
- B. avoiding homework
- C. not cheating in exams
- D. arguing with teachers

Read the following passage and answer the following questions:- Honesty is one of the most valuable qualities a person can have. An honest person speaks the truth and does not cheat others. Honesty builds trust and respect among people. When we are honest, others believe in us and feel safe around us. In daily life, honesty plays an important role. Students who are honest do not copy in exams and complete their work sincerely. Even when honesty seems difficult, it always brings peace of mind. Dishonesty may give short-term benefits, but it creates problems in the long run. Therefore, honesty should be practiced not only in school but also at home and in society. Dishonesty gives benefits that are

- A. long-lasting
- B. permanent
- C. short-term
- D. useful

Read the following passage and answer the following questions:- Honesty is one of the most valuable qualities a person can have. An honest person speaks the truth and does not cheat others. Honesty builds trust and respect among people. When we are honest, others believe in us and feel safe around us. In daily life, honesty plays an important role. Students who are honest do not copy in exams and complete their work sincerely. Even when honesty seems difficult, it always brings peace of mind. Dishonesty may give short-term benefits, but it creates problems in the long run. Therefore, honesty should be practiced not only in school but also at home and in society. Honesty gives a person

- A. tension  B. fear  
 C. peace of mind  D. anger

Choose the correct sentence

- A. He like milk  B. He liking milk  
 C. He likes milk  D. He liked milk always

Read the following passage and answer the following questions:- Honesty is one of the most valuable qualities a person can have. An honest person speaks the truth and does not cheat others. Honesty builds trust and respect among people. When we are honest, others believe in us and feel safe around us. In daily life, honesty plays an important role. Students who are honest do not copy in exams and complete their work sincerely. Even when honesty seems difficult, it always brings peace of mind. Dishonesty may give short-term benefits, but it creates problems in the long run. Therefore, honesty should be practiced not only in school but also at home and in society. Honesty helps in building

- A. fear  B. money  
 C. trust and respect  D. competition

Read the following passage and answer the following questions:- Honesty is one of the most valuable qualities a person can have. An honest person speaks the truth and does not cheat others. Honesty builds trust and respect among people. When we are honest, others believe in us and feel safe around us. In daily life, honesty plays an important role. Students who are honest do not copy in exams and complete their work sincerely. Even when honesty seems difficult, it always brings peace of mind. Dishonesty may give short-term benefits, but it creates problems in the long run. Therefore, honesty should be practiced not only in school but also at home and in society. Honesty is described as

- A. a bad habit  B. a temporary quality  
 C. a valuable quality  D. a weakness

The opposite of clean is

- A. pure  B. white  
 C. dirty  D. clear

Choose the correct synonym of honest

- A. clever  B. truthful  
 C. lazy  D. angry

Read the following passage and answer the following questions:- Honesty is one of the most valuable qualities a person can have. An honest person speaks the truth and does not cheat others. Honesty builds trust and respect among people. When we are honest, others believe in us and feel safe around us. In daily life, honesty plays an important role. Students who are honest do not copy in exams and complete their work sincerely. Even when honesty seems difficult, it always brings peace of mind. Dishonesty may give short-term benefits, but it creates problems in the long run. Therefore, honesty should be practiced not only in school but also at home and in society. The main message of the passage is

- A. to earn money  B. to be clever  
 C. to be honest  D. to win exams

The opposite of happy is

- A. excited  B. sad  
 C. smiling  D. kind

Read the following passage and answer the following questions:- Honesty is one of the most valuable qualities a person can have. An honest person speaks the truth and does not cheat others. Honesty builds trust and respect among people. When we are honest, others believe in us and feel safe around us. In daily life, honesty plays an important role. Students who are honest do not copy in exams and complete their work sincerely. Even when honesty seems difficult, it always brings peace of mind. Dishonesty may give short-term benefits, but it creates problems in the long run. Therefore, honesty should be practiced not only in school but also at home and in society. People trust an honest person because he is

- A. clever  B. rich  
 C. truthful  D. silent

## Question: 91 of 200

QID: 18873

Marks: 1

Fill in the blank: They \_\_\_\_ playing in the park.

- A. was  B. are  
 C. is  D. be

## Question: 92 of 200

QID: 18874

Marks: 1

The past tense of eat is

- A. eaten  B. ate  
 C. eats  D. eating

## Question: 93 of 200

QID: 18875

Marks: 1

Which one is a verb?

- A. honest  B. run  
 C. beautiful  D. blue

## Question: 94 of 200

QID: 18876

Marks: 1

The synonym of big is

- A. small  B. large  
 C. tiny  D. short

Question: 95 of 200

QID: 18877

Marks: 1

Choose the correct preposition: The cat is \_\_\_ the table.

- A. on  B. in  
 C. under  D. from

Question: 96 of 200

QID: 18878

Marks: 1

Identify the noun in the sentence: "Honesty is the best policy."

- A. best  B. honesty  
 C. is  D. policy

Question: 97 of 200

QID: 18879

Marks: 1

Choose the correct article: He found \_\_\_ umbrella.

- A. a  B. the  
 C. an  D. no article

Question: 98 of 200

QID: 18880

Marks: 1

The plural of child is

- A. childs  B. children  
 C. childes  D. childrens

Question: 99 of 200

QID: 18881

Marks: 1

Fill in the blank: She \_\_\_ to school every day.

- A. go  B. goes  
 C. going  D. gone

Question: 100 of 200

QID: 18882

Marks: 1

Choose the correct spelling

- A. Honnest
- B. Honast
- C. Honest
- D. Honnast

Question: 101 of 200

QID: 18883

Marks: 1

The opposite of open is

- A. start
- B. close
- C. clear
- D. wide

Question: 102 of 200

QID: 18884

Marks: 1

Identify the adverb:

- A. He runs quickly.
- B. runs
- C. quickly
- D. he
- E. run

Question: 103 of 200

QID: 18885

Marks: 1

Fill in the blank with the correct word: The sun \_\_\_\_ in the east.

- A. set
- B. setting
- C. rises
- D. rose

Question: 104 of 200

QID: 18886

Marks: 1

The plural of tooth is

- A. tooths
- B. teeth
- C. toothes
- D. tooth

Question: 105 of 200

QID: 18887

Marks: 1

Fill in the blank: We \_\_\_ a picnic tomorrow.

- A. go  B. went  
 C. will go  D. going

Question: 106 of 200

QID: 18888

Marks: 1

Choose the correct sentence

- A. She don't like apples  B. She doesn't likes apples  
 C. She doesn't like apples  D. She not like apples

Question: 107 of 200

QID: 18889

Marks: 1

Choose the correct pronoun: \_\_\_ is my best friend.

- A. Book  B. Ravi  
 C. He  D. School

Question: 108 of 200

QID: 18890

Marks: 1

Choose the correct preposition: The train arrived \_\_\_ time.

- A. in  B. at  
 C. on  D. by

Question: 109 of 200

QID: 18891

Marks: 1

Choose the correct conjunction: I was tired \_\_\_ I slept early.

- A. but  B. and  
 C. so  D. because

**Question: 110 of 200**

QID: 18892

Marks: 1

The synonym of help is

- A. hurt                                       B. ignore  
 C. assist                                       D. delay

**Question: 111 of 200**

QID: 18893

Marks: 1

Identify the adjective She has a red ball.

- A. has     B. ball  
 C. red     D. she

**Question: 112 of 200**

QID: 18894

Marks: 1

Fill in the blank: I have \_\_\_ my homework.

- A. do     B. did  
 C. done     D. doing

**Question: 113 of 200**

QID: 18895

Marks: 1

The plural of mouse is

- A. mouses                                       B. mice  
 C. mouse                                       D. mices

**Question: 114 of 200**

QID: 18896

Marks: 1

Choose the correct form: She \_\_\_ a letter yesterday.

- A. write     B. writes  
 C. wrote     D. writing



**Question: 115 of 200**

QID: 18897

Marks: 1

Choose the correct option: The word "careless" means

- A. careful
- B. not careful
- C. very kind
- D. hard-working

**Question: 116 of 200**

QID: 18898

Marks: 1

Identify the noun: "Ravi plays football."

- A. plays
- B. Ravi
- C. football
- D. plays football

**Question: 117 of 200**

QID: 18899

Marks: 1

The opposite of early is

- A. soon
- B. quick
- C. late
- D. fast

**Question: 118 of 200**

QID: 18900

Marks: 1

Identify the verb in the sentence: "The bird flies high."

- A. bird
- B. high
- C. flies
- D. the

**Question: 119 of 200**

QID: 18901

Marks: 1

The feminine gender of king is

- A. queen
- B. queen
- C. princess
- D. lady

The opposite of tall is

- A. big  B. short  
 C. high  D. long

Fill in the blank: There \_\_\_ many books on the table.

- A. is  B. are  
 C. was  D. be

Choose the correct preposition: She is afraid \_\_\_ dogs.

- A. from  B. to  
 C. of  D. with

The synonym of small is

- A. big  B. tiny  
 C. large  D. huge

The synonym of begin is

- A. end  B. start  
 C. finish  D. stop

Question: 125 of 200

QID: 18907

Marks: 1

The opposite of hard is

- A. strong
- B. easy
- C. heavy
- D. rough

Question: 126 of 200

QID: 19008

Marks: 1

Which is the national animal of India?

- A. Elephant
- B. Lion
- C. Tiger
- D. Leopard

Question: 127 of 200

QID: 19009

Marks: 1

Which is the largest desert in the world?

- A. Gobi
- B. Thar
- C. Sahara
- D. Kalahari

Question: 128 of 200

QID: 19010

Marks: 1

Which planet is known as the Red Planet? (PYQ)

- A. Earth
- B. Venus
- C. Mars
- D. Jupiter

Question: 129 of 200

QID: 19011

Marks: 1

The currency of India is

- A. Dollar
- B. Euro
- C. Rupee
- D. Yen

Question: 130 of 200

QID: 19012

Marks: 1

Which ocean is the largest?

- A. Indian  B. Atlantic  
 C. Pacific  D. Arctic

Question: 131 of 200

QID: 19013

Marks: 1

The national bird of India is

- A. Crow  B. Sparrow  
 C. Peacock  D. Pigeon

Question: 132 of 200

QID: 19014

Marks: 1

What is the capital of India? (PYQ)

- A. Mumbai  B. Kolkata  
 C. New Delhi  D. Chennai

Question: 133 of 200

QID: 19015

Marks: 1

Which is the smallest planet in the solar system?

- A. Earth  B. Mars  
 C. Mercury  D. Venus

Question: 134 of 200

QID: 19016

Marks: 1

Who is the President of India? (PYQ)

- A. Ram Nath Kovind  B. Droupadi Murmu  
 C. Pranab Mukherjee  D. A.P.J. Abdul Kalam

Question: 135 of 200

QID: 19017

Marks: 1

Which festival is known as the Festival of Lights?

- A. Holi
- B. Eid
- C. Diwali
- D. Baisakhi

Question: 136 of 200

QID: 19018

Marks: 1

How many states are there in India?

- A. 27
- B. 28
- C. 29
- D. 30

Question: 137 of 200

QID: 19019

Marks: 1

Which country is known as the Land of the Rising Sun?

- A. China
- B. Korea
- C. Japan
- D. Thailand

Question: 138 of 200

QID: 19020

Marks: 1

Who is known as the Father of the Nation? (PYQ)

- A. Jawaharlal Nehru
- B. Mahatma Gandhi
- C. Subhas Chandra Bose
- D. Sardar Patel

Question: 139 of 200

QID: 19021

Marks: 1

Which is the national tree of India?

- A. Neem
- B. Mango
- C. Banyan
- D. Peepal

**Question: 140 of 200**

QID: 19022

Marks: 1

Which animal is known as the Ship of the Desert? (PYQ)

- A. Horse
- B. Elephant
- C. Camel
- D. Donkey

**Question: 141 of 200**

QID: 19023

Marks: 1

Who wrote the National Anthem of India? (PYQ)

- A. Bankim Chandra Chatterjee
- B. Rabindranath Tagore
- C. Sarojini Naidu
- D. Premchand

**Question: 142 of 200**

QID: 19024

Marks: 1

Who discovered India by sea route? (PYQ)

- A. Christopher Columbus
- B. Marco Polo
- C. Vasco da Gama
- D. Magellan

**Question: 143 of 200**

QID: 19025

Marks: 1

Which state is known as the Land of Rising Sun in India?

- A. Assam
- B. Sikkim
- C. Arunachal Pradesh
- D. Nagaland

**Question: 144 of 200**

QID: 19026

Marks: 1

The national flower of India is

- A. Rose
- B. Sunflower
- C. Lotus
- D. Jasmine

**Question: 145 of 200**

QID: 19027

Marks: 1

Which gas do humans breathe in?

- A. Carbon dioxide
- B. Nitrogen
- C. Oxygen
- D. Hydrogen

**Question: 146 of 200**

QID: 19028

Marks: 1

Which city is called the Pink City of India?

- A. Udaipur
- B. Jodhpur
- C. Jaipur
- D. Ajmer

**Question: 147 of 200**

QID: 19029

Marks: 1

Who was the first Prime Minister of India? (PYQ)

- A. Jawaharlal Nehru
- B. Lal Bahadur Shastri
- C. Rajendra Prasad
- D. Indira Gandhi

**Question: 148 of 200**

QID: 19030

Marks: 1

Which is the largest continent in the world?

- A. Africa
- B. Europe
- C. Australia
- D. Asia

**Question: 149 of 200**

QID: 19031

Marks: 1

Which river is the longest in India?

- A. Godavari
- B. Brahmaputra
- C. Ganga
- D. Yamuna

Which organ pumps blood in the human body?

- A. Lungs                       B. Brain  
 C. Heart                          D. Kidney

Which is the fastest land animal?

- A. Cheetah                       B. Horse  
 C. Lion                             D. Tiger

Which Indian city is known as the Silicon Valley of India?

- A. Bengaluru                     B. Hyderabad  
 C. Pune                             D. Chennai

The national aquatic animal of India is

- A. Shark                          B. Ganga Dolphin  
 C. Whale                          D. Crocodile

Which is the largest lake in India?

- A. Dal Lake                       B. Wular Lake  
 C. Chilika Lake                  D. Sambhar Lake



**Question: 155 of 200**

QID: 19037

Marks: 1

Which gas is used by plants for photosynthesis?

- A. Oxygen
- B. Carbon dioxide
- C. Nitrogen
- D. Hydrogen

**Question: 156 of 200**

QID: 19038

Marks: 1

Which is the national sport of India (commonly asked)?

- A. Cricket
- B. Hockey
- C. Football
- D. Kabaddi

**Question: 157 of 200**

QID: 19039

Marks: 1

Which Indian state has the longest coastline?

- A. Tamil Nadu
- B. Gujarat
- C. Maharashtra
- D. Andhra Pradesh

**Question: 158 of 200**

QID: 19040

Marks: 1

Which instrument is used to measure temperature?

- A. Barometer
- B. Thermometer
- C. Speedometer
- D. Altimeter

**Question: 159 of 200**

QID: 19041

Marks: 1

Which country gifted the Statue of Liberty to the USA?

- A. France
- B. Germany
- C. Canada
- D. England

**Question: 160 of 200**

QID: 19042

Marks: 1

Who is the Chief Minister of Uttar Pradesh?

- A. Yogi Adityanath
- B. Akhilesh Yadav
- C. Mayawati
- D. Rajnath Singh

**Question: 161 of 200**

QID: 19043

Marks: 1

Which planet has rings around it?

- A. Jupiter
- B. Saturn
- C. Uranus
- D. Mars

**Question: 162 of 200**

QID: 19044

Marks: 1

Which day is celebrated as Independence Day in India?

- A. 26 January
- B. 15 August
- C. 2 October
- D. 14 November

**Question: 163 of 200**

QID: 19045

Marks: 1

Which colour is in the middle of the Indian flag?

- A. Saffron
- B. White
- C. Green
- D. Blue

**Question: 164 of 200**

QID: 19046

Marks: 1

Which planet is closest to the Sun?

- A. Mercury
- B. Venus
- C. Earth
- D. Mars

**Question: 165 of 200**

QID: 19047

Marks: 1

Which river flows through the city of Varanasi?

- A. Yamuna
- B. Ganga
- C. Son
- D. Ghaghara

**Question: 166 of 200**

QID: 19048

Marks: 1

Which festival is known as the Festival of Lights?

- A. Holi
- B. Diwali
- C. Eid
- D. Christmas

**Question: 167 of 200**

QID: 19049

Marks: 1

Which planet is known as the Red Planet?

- A. Earth
- B. Mars
- C. Jupiter
- D. Venus

**Question: 168 of 200**

QID: 19050

Marks: 1

Which organ purifies blood in the human body?

- A. Heart
- B. Kidney
- C. Lungs
- D. Liver

**Question: 169 of 200**

QID: 19051

Marks: 1

Which is the national emblem of India taken from?

- A. Ajanta
- B. Ellora
- C. Sarnath
- D. Nalanda

**Question: 170 of 200**

QID: 19052

Marks: 1

Which metal is liquid at room temperature?

- A. Iron
- B. Mercury
- C. Aluminium
- D. Copper

**Question: 171 of 200**

QID: 19053

Marks: 1

Which is the highest mountain peak in the world?

- A. K2
- B. Mount Everest
- C. Nanda Devi
- D. Kanchenjunga

**Question: 172 of 200**

QID: 19054

Marks: 1

Which gas do humans breathe in?

- A. Oxygen
- B. Nitrogen
- C. Carbon dioxide
- D. Hydrogen

**Question: 173 of 200**

QID: 19055

Marks: 1

Which is the largest ocean in the world?

- A. Indian Ocean
- B. Atlantic Ocean
- C. Pacific Ocean
- D. Arctic Ocean

**Question: 174 of 200**

QID: 19056

Marks: 1

Who is known as the Father of the Indian Constitution?

- A. Jawaharlal Nehru
- B. Sardar Patel
- C. Rajendra Prasad
- D. Dr. B.R. Ambedkar

Which instrument is used to measure atmospheric pressure?

- A. Thermometer
- B. Hygrometer
- C. Barometer
- D. Anemometer

Which one is different from the rest?

- A. Apple
- B. Banana
- C. Carrot
- D. Mango

Which is a water animal?

- A. Lion
- B. Dog
- C. Fish
- D. Cow

2, 4, 6, 8, \_\_\_\_

- A. 9
- B. 10
- C. 12
- D. 14

Which shape comes next?

- A. Triangle, Square, Triangle, Square, \_\_\_\_
- B. Triangle
- C. Triangle
- D. Rectangle
- E. Circle

Question: 180 of 200

QID: 18912

Marks: 1

Father's sister is called

- A. Mother  B. Aunt  
 C. Aunt  D. Cousin

Question: 181 of 200

QID: 18913

Marks: 1

Which direction is opposite to East?

- A. North  B. South  
 C. West  D. North-East

Question: 182 of 200

QID: 18914

Marks: 1

If CAT is written as DBU, then BAT is written as

- A. CAU  B. CBU  
 C. DBT  D. BBU

Question: 183 of 200

QID: 18915

Marks: 1

Which one is related to Hand as Foot is related to

- A. Finger  B. Toe  
 C. Palm  D. Nail

Question: 184 of 200

QID: 18916

Marks: 1

If  $A = 1$ ,  $B = 2$ ,  $C = 3$ , then the value of DOG is

- A. 24  B. 26  
 C. 28  D. 30

Question: 185 of 200

QID: 18917

Marks: 1

Ravi is taller than Mohan but shorter than Aman. Who is the tallest?

- A. Ravi  B. Mohan  
 C. Aman  D. Cannot say

Question: 186 of 200

QID: 18918

Marks: 1

Find the missing number: 3, 6, 12, \_\_\_\_

- A. 15  B. 18  
 C. 24  D. 30

Question: 187 of 200

QID: 18919

Marks: 1

Which shape has no corners?

- A. Square  B. Triangle  
 C. Rectangle  D. Circle

Question: 188 of 200

QID: 18920

Marks: 1

Find the odd one out

- A. Pen  B. Pencil  
 C. Eraser  D. Table

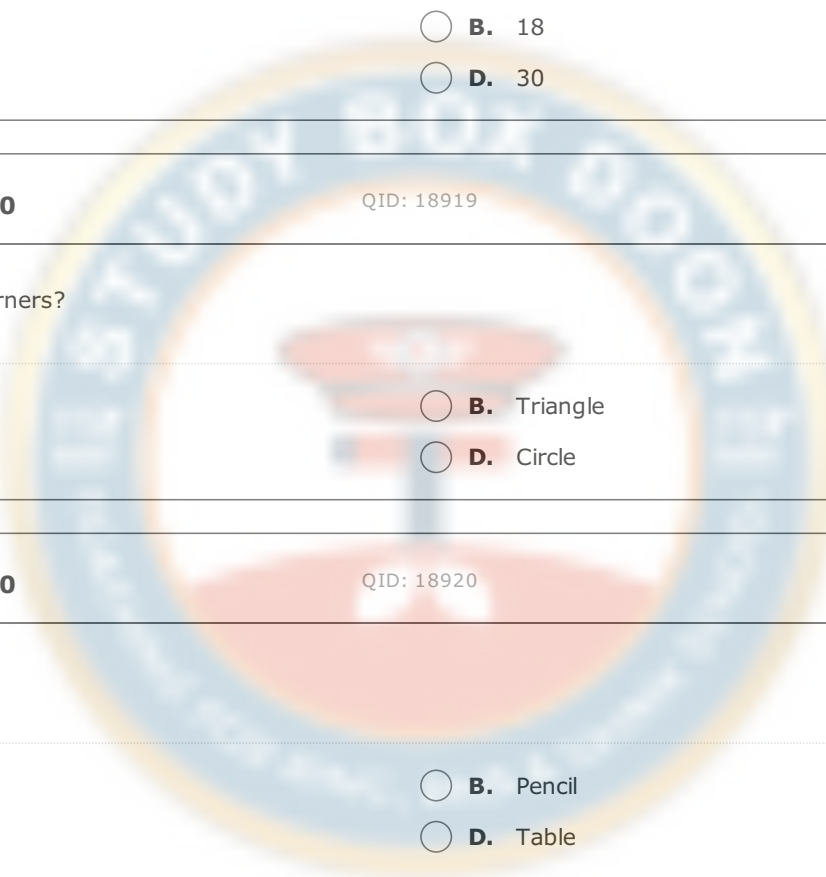
Question: 189 of 200

QID: 18921

Marks: 1

If  $5 + 3 = 16$  and  $6 + 4 = 20$ , then  $7 + 5 =$

- A. 22  B. 24  
 C. 26  D. 28



Question: 190 of 200

QID: 18922

Marks: 1

Find the next letter in the series: A, C, E, G, \_\_\_\_

- A. H                                       B. I  
 C. J                                       D. K

Question: 191 of 200

QID: 18923

Marks: 1

If today is Sunday, what day will it be after 9 days?

- A. Monday                                       B. Tuesday  
 C. Tuesday                                       D. Wednesday

Question: 192 of 200

QID: 18924

Marks: 1

Which number is the smallest?

- A. 18                                       B. 12  
 C. 9                                       D. 15

Question: 193 of 200

QID: 18925

Marks: 1

If 10 is written as TEN, how is 20 written?

- A. TWENT                                       B. TWENTY  
 C. TWENTIE                                       D. TENTY

Question: 194 of 200

QID: 18926

Marks: 1

Find the missing number:

- A. 4 : 16 :: 5 : \_\_\_\_                                       B. 20  
 C. 24                                       D. 25  
 E. 30



**Question: 195 of 200**

QID: 18927

Marks: 1

If 1 = A, 2 = B, 3 = C, then 5 =

- A. D
- B. E
- C. F
- D. G

**Question: 196 of 200**

QID: 18928

Marks: 1

Find the odd pair

- A. Eye : See
- B. Ear : Hear
- C. Nose : Smell
- D. Hand : Touch

**Question: 197 of 200**

QID: 18929

Marks: 1

Which comes next?

- A. Sun, Mon, Tue, \_\_\_\_\_
- B. Thu
- C. Wed
- D. Fri
- E. Sat

**Question: 198 of 200**

QID: 18930

Marks: 1

A man walks 5 km north and then 5 km south. How far is he from the starting point?

- A. 5 km
- B. 0 km
- C. 10 km
- D. 2 km

**Question: 199 of 200**

QID: 18931

Marks: 1

Pointing to a photograph, a boy says, "He is the son of my father." Who is he?

- A. Uncle
- B. Cousin
- C. Brother
- D. Father

Which one does not belong to the group?

A. Dog

B. Cat

C. Cow

D. Chair

--- END OF QUESTION PAPER ---



**Answer Key**

No	Question Type	QID	Correct Answer
Question - 1	Multiple Choice (Radiobutton)	18933	B
Question - 2	Multiple Choice (Radiobutton)	18934	C
Question - 3	Multiple Choice (Radiobutton)	18935	C
Question - 4	Multiple Choice (Radiobutton)	18936	B
Question - 5	Multiple Choice (Radiobutton)	18937	C
Question - 6	Multiple Choice (Radiobutton)	18938	C
Question - 7	Multiple Choice (Radiobutton)	18939	C
Question - 8	Multiple Choice (Radiobutton)	18940	B
Question - 9	Multiple Choice (Radiobutton)	18941	C
Question - 10	Multiple Choice (Radiobutton)	18942	C
Question - 11	Multiple Choice (Radiobutton)	18943	B
Question - 12	Multiple Choice (Radiobutton)	18944	B
Question - 13	Multiple Choice (Radiobutton)	18945	C
Question - 14	Multiple Choice (Radiobutton)	18946	C
Question - 15	Multiple Choice (Radiobutton)	18947	B
Question - 16	Multiple Choice (Radiobutton)	18948	C
Question - 17	Multiple Choice (Radiobutton)	18949	B
Question - 18	Multiple Choice (Radiobutton)	18950	C
Question - 19	Multiple Choice (Radiobutton)	18951	C
Question - 20	Multiple Choice (Radiobutton)	18952	B
Question - 21	Multiple Choice (Radiobutton)	18953	B
Question - 22	Multiple Choice (Radiobutton)	18954	C
Question - 23	Multiple Choice (Radiobutton)	18955	C
Question - 24	Multiple Choice (Radiobutton)	18956	C
Question - 25	Multiple Choice (Radiobutton)	18957	C
Question - 26	Multiple Choice (Radiobutton)	18958	C
Question - 27	Multiple Choice (Radiobutton)	18959	B
Question - 28	Multiple Choice (Radiobutton)	18960	C
Question - 29	Multiple Choice (Radiobutton)	18961	B
Question - 30	Multiple Choice (Radiobutton)	18962	B
Question - 31	Multiple Choice (Radiobutton)	18963	B
Question - 32	Multiple Choice (Radiobutton)	18964	B
Question - 33	Multiple Choice (Radiobutton)	18965	B
Question - 34	Multiple Choice (Radiobutton)	18966	C
Question - 35	Multiple Choice (Radiobutton)	18967	C
Question - 36	Multiple Choice (Radiobutton)	18968	B
Question - 37	Multiple Choice (Radiobutton)	18969	C
Question - 38	Multiple Choice (Radiobutton)	18970	B
Question - 39	Multiple Choice (Radiobutton)	18971	B
Question - 40	Multiple Choice (Radiobutton)	18972	C
Question - 41	Multiple Choice (Radiobutton)	18973	B
Question - 42	Multiple Choice (Radiobutton)	18974	C
Question - 43	Multiple Choice (Radiobutton)	18975	C

No	Question Type	QID	Correct Answer
Question - 44	Multiple Choice (Radiobutton)	18976	B
Question - 45	Multiple Choice (Radiobutton)	18977	C
Question - 46	Multiple Choice (Radiobutton)	18978	B
Question - 47	Multiple Choice (Radiobutton)	18979	C
Question - 48	Multiple Choice (Radiobutton)	18980	C
Question - 49	Multiple Choice (Radiobutton)	18981	C
Question - 50	Multiple Choice (Radiobutton)	18982	B
Question - 51	Multiple Choice (Radiobutton)	18983	B
Question - 52	Multiple Choice (Radiobutton)	18984	C
Question - 53	Multiple Choice (Radiobutton)	18985	B
Question - 54	Multiple Choice (Radiobutton)	18986	C
Question - 55	Multiple Choice (Radiobutton)	18987	C
Question - 56	Multiple Choice (Radiobutton)	18988	B
Question - 57	Multiple Choice (Radiobutton)	18989	B
Question - 58	Multiple Choice (Radiobutton)	18990	B
Question - 59	Multiple Choice (Radiobutton)	18991	B
Question - 60	Multiple Choice (Radiobutton)	18992	B
Question - 61	Multiple Choice (Radiobutton)	18993	C
Question - 62	Multiple Choice (Radiobutton)	18994	B
Question - 63	Multiple Choice (Radiobutton)	18995	C
Question - 64	Multiple Choice (Radiobutton)	18996	C
Question - 65	Multiple Choice (Radiobutton)	18997	B
Question - 66	Multiple Choice (Radiobutton)	18998	C
Question - 67	Multiple Choice (Radiobutton)	18999	B
Question - 68	Multiple Choice (Radiobutton)	19000	C
Question - 69	Multiple Choice (Radiobutton)	19001	B
Question - 70	Multiple Choice (Radiobutton)	19002	B
Question - 71	Multiple Choice (Radiobutton)	19003	B
Question - 72	Multiple Choice (Radiobutton)	19004	B
Question - 73	Multiple Choice (Radiobutton)	19005	C
Question - 74	Multiple Choice (Radiobutton)	19006	C
Question - 75	Multiple Choice (Radiobutton)	19007	B
Question - 76	Multiple Choice (Radiobutton)	18858	C
Question - 77	Multiple Choice (Radiobutton)	18859	C
Question - 78	Multiple Choice (Radiobutton)	18860	C
Question - 79	Multiple Choice (Radiobutton)	18861	B
Question - 80	Multiple Choice (Radiobutton)	18862	C
Question - 81	Multiple Choice (Radiobutton)	18863	C
Question - 82	Multiple Choice (Radiobutton)	18864	C
Question - 83	Multiple Choice (Radiobutton)	18865	C
Question - 84	Multiple Choice (Radiobutton)	18866	C
Question - 85	Multiple Choice (Radiobutton)	18867	C
Question - 86	Multiple Choice (Radiobutton)	18868	C
Question - 87	Multiple Choice (Radiobutton)	18869	B
Question - 88	Multiple Choice (Radiobutton)	18870	C
Question - 89	Multiple Choice (Radiobutton)	18871	B
Question - 90	Multiple Choice (Radiobutton)	18872	C
Question - 91	Multiple Choice (Radiobutton)	18873	B

No	Question Type	QID	Correct Answer
Question - 92	Multiple Choice (Radiobutton)	18874	B
Question - 93	Multiple Choice (Radiobutton)	18875	B
Question - 94	Multiple Choice (Radiobutton)	18876	B
Question - 95	Multiple Choice (Radiobutton)	18877	C
Question - 96	Multiple Choice (Radiobutton)	18878	B
Question - 97	Multiple Choice (Radiobutton)	18879	C
Question - 98	Multiple Choice (Radiobutton)	18880	B
Question - 99	Multiple Choice (Radiobutton)	18881	B
Question - 100	Multiple Choice (Radiobutton)	18882	C
Question - 101	Multiple Choice (Radiobutton)	18883	B
Question - 102	Multiple Choice (Radiobutton)	18884	C
Question - 103	Multiple Choice (Radiobutton)	18885	C
Question - 104	Multiple Choice (Radiobutton)	18886	B
Question - 105	Multiple Choice (Radiobutton)	18887	C
Question - 106	Multiple Choice (Radiobutton)	18888	C
Question - 107	Multiple Choice (Radiobutton)	18889	C
Question - 108	Multiple Choice (Radiobutton)	18890	C
Question - 109	Multiple Choice (Radiobutton)	18891	C
Question - 110	Multiple Choice (Radiobutton)	18892	C
Question - 111	Multiple Choice (Radiobutton)	18893	C
Question - 112	Multiple Choice (Radiobutton)	18894	C
Question - 113	Multiple Choice (Radiobutton)	18895	B
Question - 114	Multiple Choice (Radiobutton)	18896	C
Question - 115	Multiple Choice (Radiobutton)	18897	B
Question - 116	Multiple Choice (Radiobutton)	18898	B
Question - 117	Multiple Choice (Radiobutton)	18899	C
Question - 118	Multiple Choice (Radiobutton)	18900	C
Question - 119	Multiple Choice (Radiobutton)	18901	B
Question - 120	Multiple Choice (Radiobutton)	18902	B
Question - 121	Multiple Choice (Radiobutton)	18903	B
Question - 122	Multiple Choice (Radiobutton)	18904	C
Question - 123	Multiple Choice (Radiobutton)	18905	B
Question - 124	Multiple Choice (Radiobutton)	18906	B
Question - 125	Multiple Choice (Radiobutton)	18907	B
Question - 126	Multiple Choice (Radiobutton)	19008	C
Question - 127	Multiple Choice (Radiobutton)	19009	C
Question - 128	Multiple Choice (Radiobutton)	19010	C
Question - 129	Multiple Choice (Radiobutton)	19011	C
Question - 130	Multiple Choice (Radiobutton)	19012	C
Question - 131	Multiple Choice (Radiobutton)	19013	C
Question - 132	Multiple Choice (Radiobutton)	19014	C
Question - 133	Multiple Choice (Radiobutton)	19015	C
Question - 134	Multiple Choice (Radiobutton)	19016	B
Question - 135	Multiple Choice (Radiobutton)	19017	C
Question - 136	Multiple Choice (Radiobutton)	19018	B
Question - 137	Multiple Choice (Radiobutton)	19019	C
Question - 138	Multiple Choice (Radiobutton)	19020	B
Question - 139	Multiple Choice (Radiobutton)	19021	C
Question - 140	Multiple Choice (Radiobutton)	19022	C

No	Question Type	QID	Correct Answer
Question - 141	Multiple Choice (Radiobutton)	19023	B
Question - 142	Multiple Choice (Radiobutton)	19024	C
Question - 143	Multiple Choice (Radiobutton)	19025	C
Question - 144	Multiple Choice (Radiobutton)	19026	C
Question - 145	Multiple Choice (Radiobutton)	19027	C
Question - 146	Multiple Choice (Radiobutton)	19028	C
Question - 147	Multiple Choice (Radiobutton)	19029	A
Question - 148	Multiple Choice (Radiobutton)	19030	D
Question - 149	Multiple Choice (Radiobutton)	19031	C
Question - 150	Multiple Choice (Radiobutton)	19032	C
Question - 151	Multiple Choice (Radiobutton)	19033	A
Question - 152	Multiple Choice (Radiobutton)	19034	A
Question - 153	Multiple Choice (Radiobutton)	19035	B
Question - 154	Multiple Choice (Radiobutton)	19036	B
Question - 155	Multiple Choice (Radiobutton)	19037	B
Question - 156	Multiple Choice (Radiobutton)	19038	B
Question - 157	Multiple Choice (Radiobutton)	19039	B
Question - 158	Multiple Choice (Radiobutton)	19040	B
Question - 159	Multiple Choice (Radiobutton)	19041	A
Question - 160	Multiple Choice (Radiobutton)	19042	A
Question - 161	Multiple Choice (Radiobutton)	19043	B
Question - 162	Multiple Choice (Radiobutton)	19044	B
Question - 163	Multiple Choice (Radiobutton)	19045	B
Question - 164	Multiple Choice (Radiobutton)	19046	A
Question - 165	Multiple Choice (Radiobutton)	19047	B
Question - 166	Multiple Choice (Radiobutton)	19048	B
Question - 167	Multiple Choice (Radiobutton)	19049	B
Question - 168	Multiple Choice (Radiobutton)	19050	B
Question - 169	Multiple Choice (Radiobutton)	19051	C
Question - 170	Multiple Choice (Radiobutton)	19052	B
Question - 171	Multiple Choice (Radiobutton)	19053	B
Question - 172	Multiple Choice (Radiobutton)	19054	A
Question - 173	Multiple Choice (Radiobutton)	19055	C
Question - 174	Multiple Choice (Radiobutton)	19056	D
Question - 175	Multiple Choice (Radiobutton)	19057	C
Question - 176	Multiple Choice (Radiobutton)	18908	C
Question - 177	Multiple Choice (Radiobutton)	18909	C
Question - 178	Multiple Choice (Radiobutton)	18910	B
Question - 179	Multiple Choice (Radiobutton)	18911	C
Question - 180	Multiple Choice (Radiobutton)	18912	C
Question - 181	Multiple Choice (Radiobutton)	18913	C
Question - 182	Multiple Choice (Radiobutton)	18914	B
Question - 183	Multiple Choice (Radiobutton)	18915	B
Question - 184	Multiple Choice (Radiobutton)	18916	B
Question - 185	Multiple Choice (Radiobutton)	18917	C
Question - 186	Multiple Choice (Radiobutton)	18918	C
Question - 187	Multiple Choice (Radiobutton)	18919	D
Question - 188	Multiple Choice (Radiobutton)	18920	D

No	Question Type	QID	Correct Answer
Question - 189	Multiple Choice (Radiobutton)	18921	B
Question - 190	Multiple Choice (Radiobutton)	18922	B
Question - 191	Multiple Choice (Radiobutton)	18923	C
Question - 192	Multiple Choice (Radiobutton)	18924	C
Question - 193	Multiple Choice (Radiobutton)	18925	B
Question - 194	Multiple Choice (Radiobutton)	18926	D
Question - 195	Multiple Choice (Radiobutton)	18927	B
Question - 196	Multiple Choice (Radiobutton)	18928	D
Question - 197	Multiple Choice (Radiobutton)	18929	C
Question - 198	Multiple Choice (Radiobutton)	18930	B
Question - 199	Multiple Choice (Radiobutton)	18931	C
Question - 200	Multiple Choice (Radiobutton)	18932	D

--- END OF ANSWER KEY ---

