



**Studybox Doon**

AISSEE\_Class6th\_MT7\_studyboxdoon.com

Exam ID: 134

Name: \_\_\_\_\_

Date: \_\_\_\_\_

### Exam Instructions

1. The timer has been set for the exam, and a countdown will display the remaining time. When the timer runs out, the exam will end automatically. No further action will be required after that.
2. You can flag any question that you want.
3. If you don't want to submit any of your provided answers, you can clear them.
4. If you choose to drop this exam, it will not be submitted, and no result will be generated.
5. Once you finish the exam, you cannot resume it.

### Question: 1 of 125

QID: 4092

Marks: 2

**Read the following passage and answer the questions that follow.**

Trust me, you don't want to get caught under a tsunami! Tsunamis are one of the world's most powerful natural forces. They can swallow up islands in minutes. They can flood and destroy villages. They can create huge amounts of damage. But do you know exactly what a tsunami is? They are huge, mighty waves in the ocean that grow as they reach the shore. Most tsunamis are actually caused by earthquakes. When the ocean floor moves due to an earthquake, it creates big holes. The water floods in to fill these holes. When the water moves that quickly, it creates a huge wave. This is how tsunamis are born! Other natural disasters like landslides, volcanic eruptions, and glaciers breaking off can also cause tsunamis. Once the water starts moving because of the force of the disaster, large waves begin to ripple out. These waves can move very fast.

Though tsunamis can happen anywhere, they usually occur in specific areas like the Pacific Ocean. The countries along the coastline like Japan, Chile, or even the United States are more at risk. The biggest tsunami ever recorded happened in 1958, in Lituya Bay, Alaska. The massive wave was over 1720 feet tall and wiped out trees, vegetation, and everything else in its way.

**Find the word in the passage which means the opposite of weak:**

Please mark (✓) for the correct answer.

- ☐ A. Huge ☐ B. Powerful
- ☐ C. Natural ☐ D. Biggest

### Question: 2 of 125

QID: 4068

Marks: 2

**Choose the correct synonym for the word 'Accommodation'.**

Please mark (✓) for the correct answer.

- ☐ A. Glass ☐ B. Room
- ☐ C. Air condition ☐ D. Cinema

**Question: 3 of 125**

QID: 4069

Marks: 2

Choose the plural form of the word 'Commando'.

Please mark (✓) for the correct answer.

- ☐ A. Commandos
- ☐ B. Commandoes
- ☐ C. Commands
- ☐ D. Commando

**Question: 4 of 125**

QID: 4070

Marks: 2

Choose the opposite gender of 'Director'.

Please mark (✓) for the correct answer.

- ☐ A. Director
- ☐ B. Directress
- ☐ C. She-director
- ☐ D. Director-woman

**Question: 5 of 125**

QID: 4071

Marks: 2

Fill in the blank with correct question tag.

Mira is present today, \_\_\_\_\_.

Please mark (✓) for the correct answer.

- ☐ A. is she?
- ☐ B. was she?
- ☐ C. isn't she?
- ☐ D. wasn't she?

**Question: 6 of 125**

QID: 4072

Marks: 2

Choose the word with correct spelling.

Please mark (✓) for the correct answer.

- ☐ A. Accidentally
- ☐ B. Comfirtable
- ☐ C. Creture
- ☐ D. Disagreement

**Question: 7 of 125**

QID: 4073

Marks: 2

Choose one word for the given sentence.

A booklet which is published monthly or quarterly.

Please mark (✓) for the correct answer.

- ☐ A. Book
- ☐ B. Pamphlet
- ☐ C. Magazine
- ☐ D. Flyer

**Question: 8 of 125**

QID: 4074

Marks: 2

Fill in the blank with correct homophone.

My mother just wanted some \_\_\_\_\_ and quiet after the guests left.

Please mark (✓) for the correct answer.

- ☐ A. peace ☐ B. piece
- ☐ C. pieces ☐ D. None of these

**Question: 9 of 125**

QID: 4075

Marks: 2

Choose the correct meaning of the idiom given below.

Apple of one's eye

Please mark (✓) for the correct answer.

- ☐ A. To have own interest to serve ☐ B. Jealous
- ☐ C. Very beloved ☐ D. A cause of quarrel

**Question: 10 of 125**

QID: 4076

Marks: 2

Choose the correct meaning of the phrase underlined in the given sentence.

The deal fell through at the last moment.

Please mark (✓) for the correct answer.

- ☐ A. Completed successfully ☐ B. Got cancelled
- ☐ C. Got arranged ☐ D. Got approved

**Question: 11 of 125**

QID: 4077

Marks: 2

Choose the type of the given sentence.

What a clever girl you are!

Please mark (✓) for the correct answer.

- ☐ A. Declarative ☐ B. Negative
- ☐ C. Exclamatory ☐ D. Interrogative

**Question: 12 of 125**

QID: 4078

Marks: 2

Choose the correct order of the words to form a meaningful sentence.

You/tie/hair/can/your/?

A B C D E F

Please mark (✓) for the correct answer.

- ☐ A. ABCDEF ☐ B. DABECF
- ☐ C. BACFDE ☐ D. CEFDBA

**Question: 13 of 125**

QID: 4079

Marks: 2

Choose the correct order of the words to form a meaningful sentence.

**is an/sports/of life/essential part**

**A B C D**

Please mark (✓) for the correct answer.

☐ **A.** BCDA

☐ **B.** DCBA

☐ **C.** BADC

☐ **D.** ACBD

**Question: 14 of 125**

QID: 4080

Marks: 2

Choose the correct conjunction to fill the blank.

I like cooking and eating, \_\_\_\_\_. I don't like washing dishes afterward.

Please mark (✓) for the correct answer.

☐ **A.** or

☐ **B.** but

☐ **C.** and

☐ **D.** if

**Question: 15 of 125**

QID: 4081

Marks: 2

Choose the correct pair of rhyming words.

Please mark (✓) for the correct answer.

☐ **A.** Scheme - Team

☐ **B.** Wear - Tire

☐ **C.** Clip - Sleep

☐ **D.** Cease - Trees

**Question: 16 of 125**

QID: 4082

Marks: 2

Choose the option which uses the word 'fetch' correctly.

Please mark (✓) for the correct answer.

☐ **A.** Fetch me a glass of water.

☐ **B.** The waiter was fetched.

☐ **C.** Desperate times fetch for desperate measures.

☐ **D.** In the second trial, he fetched his own defence.

**Question: 17 of 125**

QID: 4083

Marks: 2

Fill in the blanks by choosing the correct option.

They \_\_\_\_\_ sentenced to life imprisonment.

Please mark (✓) for the correct answer.

☐ **A.** were

☐ **B.** is

☐ **C.** have

☐ **D.** had

**Question: 18 of 125**

QID: 4084

Marks: 2

\_\_\_\_\_ has \_\_\_\_\_ chocolates in her pocket.

Please mark (✓) for the correct answer.

- |                                      |                                       |
|--------------------------------------|---------------------------------------|
| <input type="radio"/> A. She; little | <input type="radio"/> B. He; a little |
| <input type="radio"/> C. She; many   | <input type="radio"/> D. They; many   |

**Question: 19 of 125**

QID: 4085

Marks: 2

That is \_\_\_\_\_ pencil.

Please mark (✓) for the correct answer.

- |                                       |  |
|---------------------------------------|--|
| <input type="radio"/> A. an excellent | <input type="radio"/> B. a excellent   |
| <input type="radio"/> C. an important | <input type="radio"/> D. the important |

**Question: 20 of 125**

QID: 4086

Marks: 2

We \_\_\_\_\_ at the Royal Hotel.

Please mark (✓) for the correct answer.

- |                                      |                                     |
|--------------------------------------|-------------------------------------|
| <input type="radio"/> A. are staying | <input type="radio"/> B. stays      |
| <input type="radio"/> C. will stays  | <input type="radio"/> D. are stayed |

**Question: 21 of 125**

QID: 4087

Marks: 2

He drove \_\_\_\_\_ the bridge.

Please mark (✓) for the correct answer.

- |                                |                               |
|--------------------------------|-------------------------------|
| <input type="radio"/> A. above | <input type="radio"/> B. over |
| <input type="radio"/> C. in    | <input type="radio"/> D. by   |

Read the following passage and answer the questions that follow.

Trust me, you don't want to get caught under a tsunami! Tsunamis are one of the world's most powerful natural forces. They can swallow up islands in minutes. They can flood and destroy villages. They can create huge amounts of damage. But do you know exactly what a tsunami is? They are huge, mighty waves in the ocean that grow as they reach the shore. Most tsunamis are actually caused by earthquakes. When the ocean floor moves due to an earthquake, it creates big holes. The water floods in to fill these holes. When the water moves that quickly, it creates a huge wave. This is how tsunamis are born! Other natural disasters like landslides, volcanic eruptions, and glaciers breaking off can also cause tsunamis. Once the water starts moving because of the force of the disaster, large waves begin to ripple out. These waves can move very fast.

Though tsunamis can happen anywhere, they usually occur in specific areas like the Pacific Ocean. The countries along the coastline like Japan, Chile, or even the United States are more at risk. The biggest tsunami ever recorded happened in 1958, in Lituya Bay, Alaska. The massive wave was over 1720 feet tall and wiped out trees, vegetation, and everything else in its way.

**What is a tsunami?**

Please mark (✓) for the correct answer.

- |   |  |
|---|--|
| <input type="radio"/> A. Huge ocean waves | <input type="radio"/> B. Earthquake caused waves |
| <input type="radio"/> C. Waves in the sea | <input type="radio"/> D. Forceful sea            |

Read the following passage and answer the questions that follow.

Trust me, you don't want to get caught under a tsunami! Tsunamis are one of the world's most powerful natural forces. They can swallow up islands in minutes. They can flood and destroy villages. They can create huge amounts of damage. But do you know exactly what a tsunami is? They are huge, mighty waves in the ocean that grow as they reach the shore. Most tsunamis are actually caused by earthquakes. When the ocean floor moves due to an earthquake, it creates big holes. The water floods in to fill these holes. When the water moves that quickly, it creates a huge wave. This is how tsunamis are born! Other natural disasters like landslides, volcanic eruptions, and glaciers breaking off can also cause tsunamis. Once the water starts moving because of the force of the disaster, large waves begin to ripple out. These waves can move very fast.

Though tsunamis can happen anywhere, they usually occur in specific areas like the Pacific Ocean. The countries along the coastline like Japan, Chile, or even the United States are more at risk. The biggest tsunami ever recorded happened in 1958, in Lituya Bay, Alaska. The massive wave was over 1720 feet tall and wiped out trees, vegetation, and everything else in its way.

**Based on the information in the article, which natural disaster is not responsible for causing a tsunami?**

Please mark (✓) for the correct answer.

- |                                     |  |
|-------------------------------------|--|
| <input type="radio"/> A. Tornado    | <input type="radio"/> B. Volcanic Eruption |
| <input type="radio"/> C. Earthquake | <input type="radio"/> D. Glacial Movement  |



Read the following passage and answer the questions that follow.

Trust me, you don't want to get caught under a tsunami! Tsunamis are one of the world's most powerful natural forces. They can swallow up islands in minutes. They can flood and destroy villages. They can create huge amounts of damage. But do you know exactly what a tsunami is? They are huge, mighty waves in the ocean that grow as they reach the shore. Most tsunamis are actually caused by earthquakes. When the ocean floor moves due to an earthquake, it creates big holes. The water floods in to fill these holes. When the water moves that quickly, it creates a huge wave. This is how tsunamis are born! Other natural disasters like landslides, volcanic eruptions, and glaciers breaking off can also cause tsunamis. Once the water starts moving because of the force of the disaster, large waves begin to ripple out. These waves can move very fast.

Though tsunamis can happen anywhere, they usually occur in specific areas like the Pacific Ocean. The countries along the coastline like Japan, Chile, or even the United States are more at risk. The biggest tsunami ever recorded happened in 1958, in Lituya Bay, Alaska. The massive wave was over 1720 feet tall and wiped out trees, vegetation, and everything else in its way.

Where would a tsunami be most likely to occur?

Please mark (✓) for the correct answer.

- ☐ A. Cuba ☐ B. New York City  
☐ C. Japan ☐ D. Africa

Read the following passage and answer the questions that follow.

Trust me, you don't want to get caught under a tsunami! Tsunamis are one of the world's most powerful natural forces. They can swallow up islands in minutes. They can flood and destroy villages. They can create huge amounts of damage. But do you know exactly what a tsunami is? They are huge, mighty waves in the ocean that grow as they reach the shore. Most tsunamis are actually caused by earthquakes. When the ocean floor moves due to an earthquake, it creates big holes. The water floods in to fill these holes. When the water moves that quickly, it creates a huge wave. This is how tsunamis are born! Other natural disasters like landslides, volcanic eruptions, and glaciers breaking off can also cause tsunamis. Once the water starts moving because of the force of the disaster, large waves begin to ripple out. These waves can move very fast.

Though tsunamis can happen anywhere, they usually occur in specific areas like the Pacific Ocean. The countries along the coastline like Japan, Chile, or even the United States are more at risk. The biggest tsunami ever recorded happened in 1958, in Lituya Bay, Alaska. The massive wave was over 1720 feet tall and wiped out trees, vegetation, and everything else in its way.

How tall was the wave during the biggest tsunami that happened in 1958?

Please mark (✓) for the correct answer.

- ☐ A. 1730 feet ☐ B. 1720 feet  
☐ C. 1625 feet ☐ D. 1865 feet

Which continent has the highest population density?

Please mark (✓) for the correct answer.

- ☐ A. Asia ☐ B. South America  
☐ C. Antarctica ☐ D. Europe

**Question: 27 of 125**

QID: 4052

Marks: 2

\_\_\_\_\_ is used in balloons as it is lighter than air.

Please mark (✓) for the correct answer.

- ☐ A. Helium
- ☐ B. Oxygen
- ☐ C. Nitrogen
- ☐ D. Argon

**Question: 28 of 125**

QID: 4053

Marks: 2

Which day is observed to commemorate the birth anniversary of Sardar Vallabhbhai Patel?

Please mark (✓) for the correct answer.

- ☐ A. National Education Day
- ☐ B. National Unity Day
- ☐ C. National Integration Day
- ☐ D. National Youth Day

**Question: 29 of 125**

QID: 4054

Marks: 2

Which of the following is not a part of the 'Char Dham Yatra' in North India?

Please mark (✓) for the correct answer.

- ☐ A. Kedarnath
- ☐ B. Gangotri
- ☐ C. Vaishno Devi
- ☐ D. Badrinath

**Question: 30 of 125**

QID: 4055

Marks: 2

What do the five rings of the Olympics represent?

Please mark (✓) for the correct answer.

- ☐ A. Five oceans
- ☐ B. Five continents
- ☐ C. Five languages
- ☐ D. Five games

**Question: 31 of 125**

QID: 4043

Marks: 2

What is the use of Hygrometer?

Please mark (✓) for the correct answer.

- ☐ A. Pressure of gases
- ☐ B. Purity of milk
- ☐ C. Humidity in air
- ☐ D. Sound under water



**Question: 32 of 125**

QID: 4044

Marks: 2

Who was hanged by the British government along with Bhagat Singh and Sukhdev Thapar?

Please mark (✓) for the correct answer.

- ☐ A. Chandra Shekhar Azad
- ☐ B. Mangal Pandey
- ☐ C. Udham Singh
- ☐ D. Shivram Rajguru

**Question: 33 of 125**

QID: 4045

Marks: 2

Which is the highest mountain peak in India?

Please mark (✓) for the correct answer.

- ☐ A. Nanda Devi
- ☐ B. Kangchenjunga
- ☐ C. Mount Everest
- ☐ D. K2

**Question: 34 of 125**

QID: 4046

Marks: 2

Lactometer is related to

Please mark (✓) for the correct answer.

- ☐ A. milk
- ☐ B. cold drink
- ☐ C. alcohol
- ☐ D. water

**Question: 35 of 125**

QID: 4047

Marks: 2

Hydrophobia or rabies is disease caused by

Please mark (✓) for the correct answer.

- ☐ A. protozoa
- ☐ B. nematode
- ☐ C. virus
- ☐ D. helminth

**Question: 36 of 125**

QID: 4048

Marks: 2

'HIV' virus causes

Please mark (✓) for the correct answer.

- ☐ A. AIDS
- ☐ B. Cancer
- ☐ C. Viral fever
- ☐ D. Tuberculosis

**Question: 37 of 125**

QID: 4049

Marks: 2

Our Solar System is a part of which Galaxy?

Please mark (✓) for the correct answer.

- ☐ A. Whirlpool Galaxy
- ☐ B. Black Eye Galaxy
- ☐ C. Andromeda Galaxy
- ☐ D. Milky Way Galaxy

**Question: 38 of 125**

QID: 4050

Marks: 2

Kimono is a traditional dress of

Please mark (✓) for the correct answer.

- ☐ A. China
- ☐ B. Germany
- ☐ C. Japan
- ☐ D. Myanmar

**Question: 39 of 125**

QID: 4056

Marks: 2

Dhyan Chand is an Indian Sports player of World renown in the sport of

Please mark (✓) for the correct answer.

- ☐ A. Cricket
- ☐ B. Athletics
- ☐ C. Hockey
- ☐ D. Badminton

**Question: 40 of 125**

QID: 4057

Marks: 2

Lunar Eclipse occurs when

Please mark (✓) for the correct answer.

- ☐ A. Sun is between Earth and Moon
- ☐ B. Earth is between Sun and other celestial bodies
- ☐ C. Moon is between Earth and Sun
- ☐ D. Earth is between Sun and Moon

**Question: 41 of 125**

QID: 4058

Marks: 2

In which state of India 'Bodo language' is primarily spoken?

Please mark (✓) for the correct answer.

- ☐ A. Rajasthan
- ☐ B. Jammu and Kashmir
- ☐ C. Assam
- ☐ D. Madhya Pradesh

**Question: 42 of 125**

QID: 4059

Marks: 2

What does the wheel in the National Flag represent?

Please mark (✓) for the correct answer.

- ☐ A. Courage ☐ B. Truth
- ☐ C. Non-violence ☐ D. Faith

**Question: 43 of 125**

QID: 4060

Marks: 2

Which Indian state shares its boundary with both Nepal and China?

Please mark (✓) for the correct answer.

- ☐ A. Uttarakhand ☐ B. Arunachal Pradesh
- ☐ C. Uttar Pradesh ☐ D. West Bengal

**Question: 44 of 125**

QID: 4061

Marks: 2

Name the young ones of camel.

Please mark (✓) for the correct answer.

- ☐ A. Calf ☐ B. Lamb
- ☐ C. Puppy ☐ D. Kitten

**Question: 45 of 125**

QID: 4062

Marks: 2

Who acts as the President of India in the absence of the President and the Vice-President?

Please mark (✓) for the correct answer.

- ☐ A. Prime Minister ☐ B. Chief Justice of India
- ☐ C. Attorney General of India ☐ D. Comptroller and Auditor General of India

**Question: 46 of 125**

QID: 4063

Marks: 2

Who invented the telescope?

Please mark (✓) for the correct answer.

- ☐ A. Galileo Galilei ☐ B. Isaac Newton
- ☐ C. Roger Bacon ☐ D. James Watt

**Question: 47 of 125**

QID: 4064

Marks: 2

The Gayatri Mantra is believed to be composed by which sage?

Please mark (✓) for the correct answer.

- ☐ A. Vishvamitra
- ☐ B. Vasishtha
- ☐ C. Indra
- ☐ D. Parikshit

**Question: 48 of 125**

QID: 4065

Marks: 2

Main function of leaf is

Please mark (✓) for the correct answer.

- ☐ A. Transpiration
- ☐ B. Exchange of gases
- ☐ C. Photosynthesis
- ☐ D. Cooling

**Question: 49 of 125**

QID: 4066

Marks: 2

Guru Gobind Singh, the 10th Guru of Sikhs, was the son of

Please mark (✓) for the correct answer.

- ☐ A. Guru Nanak Dev
- ☐ B. Guru Arjun Dev
- ☐ C. Guru Ramdas
- ☐ D. Guru Teg Bahadur

**Question: 50 of 125**

QID: 4067

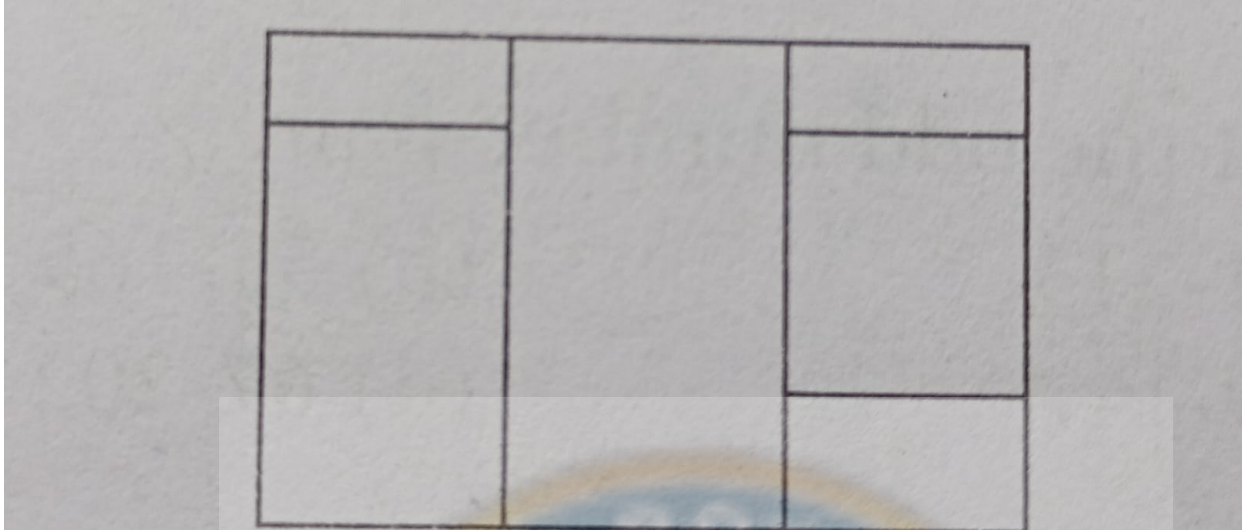
Marks: 2

Where is the Indian National Rail Museum situated?

Please mark (✓) for the correct answer.

- ☐ A. New Delhi
- ☐ B. Kolkata
- ☐ C. Hyderabad
- ☐ D. Indore

How many rectangles are there in the given figure?



Please mark (✓) for the correct answer.

- ☐ A. 8
- ☐ C. 10

- ☐ B. 9
- ☐ D. 11

## Question: 52 of 125

QID: 4095

Marks: 2

Select the odd word from the given alternative.

Please mark (✓) for the correct answer.

- ☐ A. Food
- ☐ C. Cup

- ☐ B. Plate
- ☐ D. Spoon

## Question: 53 of 125

QID: 4096

Marks: 2

Select the related number from the given alternative.

33 : 99 :: 111 : ?

Please mark (✓) for the correct answer.

- ☐ A. 123
- ☐ C. 444

- ☐ B. 333
- ☐ D. 532

## Question: 54 of 125

QID: 4097

Marks: 2

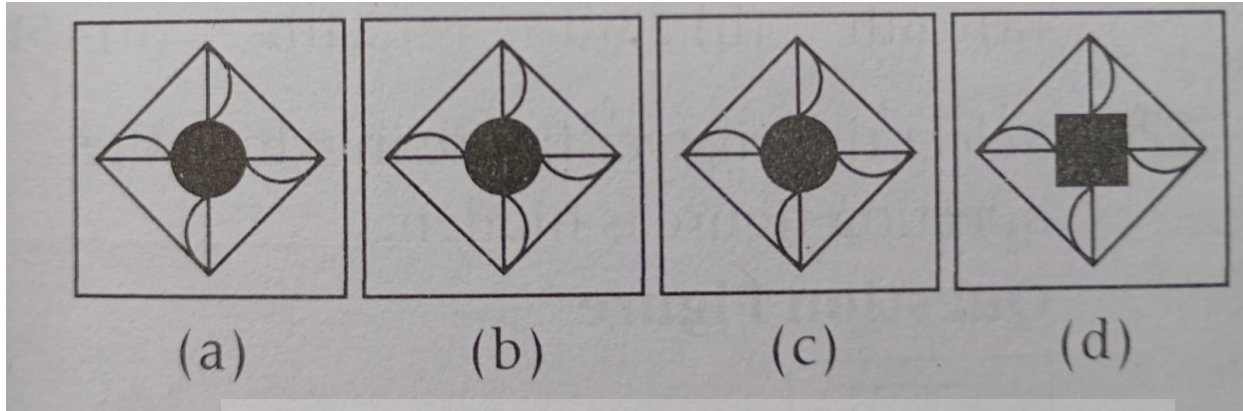
Abhishek is shorter than Piyush, but taller than Deepak. Vishal is shorter than Piyush but taller than Abhishek. Who is tallest?

Please mark (✓) for the correct answer.

- ☐ A. Abhishek
- ☐ C. Deepak

- ☐ B. Piyush
- ☐ D. Vishal

Find the odd figure from the given alternative.



Please mark (✓) for the correct answer.

☐ A. a

☐ B. b

☐ C. c

☐ D. d

Question: 56 of 125

QID: 4099

Marks: 2

Adhya walks 500 cm North and turns left and walks 250 cm. In which direction is she with respect to her initial position?

Please mark (✓) for the correct answer.

☐ A. North

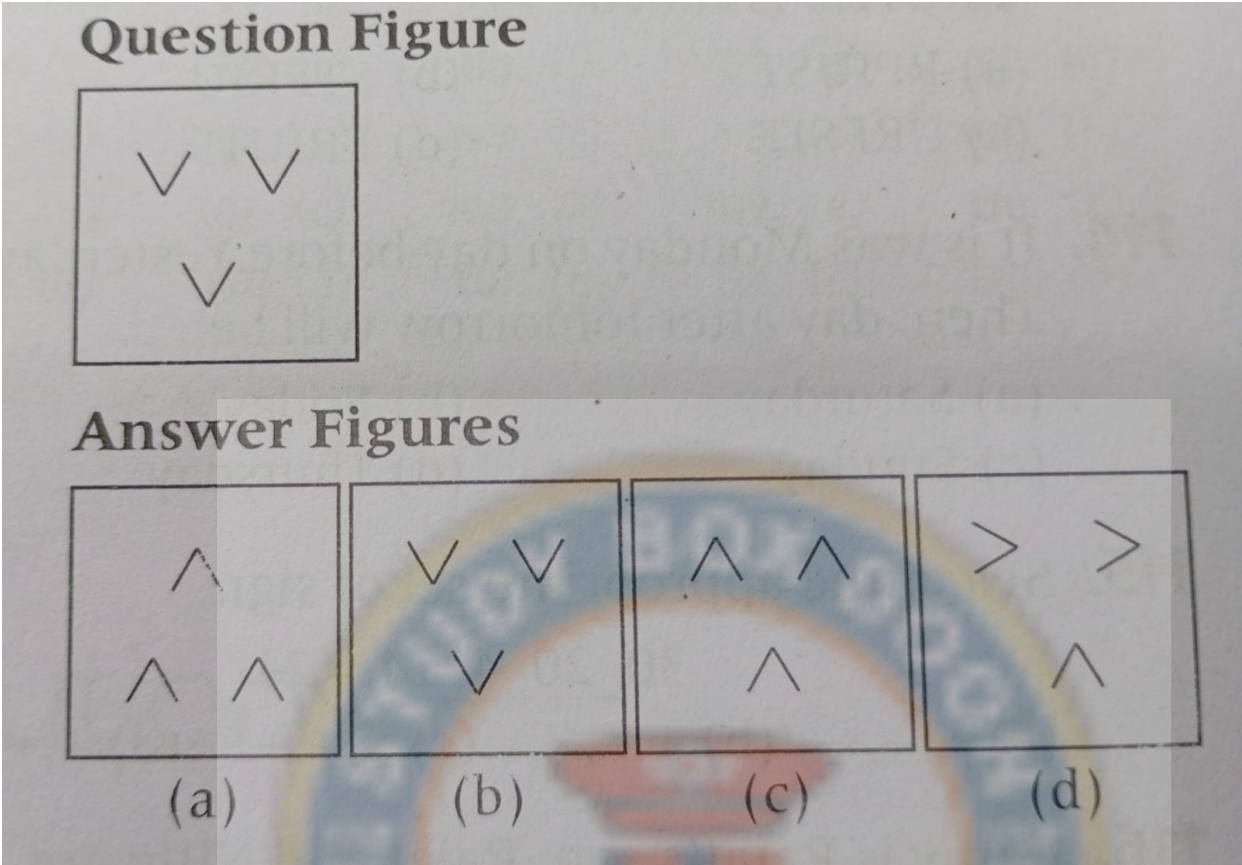
☐ B. South-East

☐ C. North-West

☐ D. South



Select the water image of the following figure.



Please mark (✓) for the correct answer.

- ☐ A. a
- ☐ B. b
- ☐ C. c
- ☐ D. d

Find the missing number in the series.  
2, 2, 4, 12, 48, ?

Please mark (✓) for the correct answer.

- ☐ A. 240
- ☐ B. 300
- ☐ C. 140
- ☐ D. 90

Complete the missing figure from the given alternative.

### Question Figure

?	

### Answer Figures

(a)

(b)

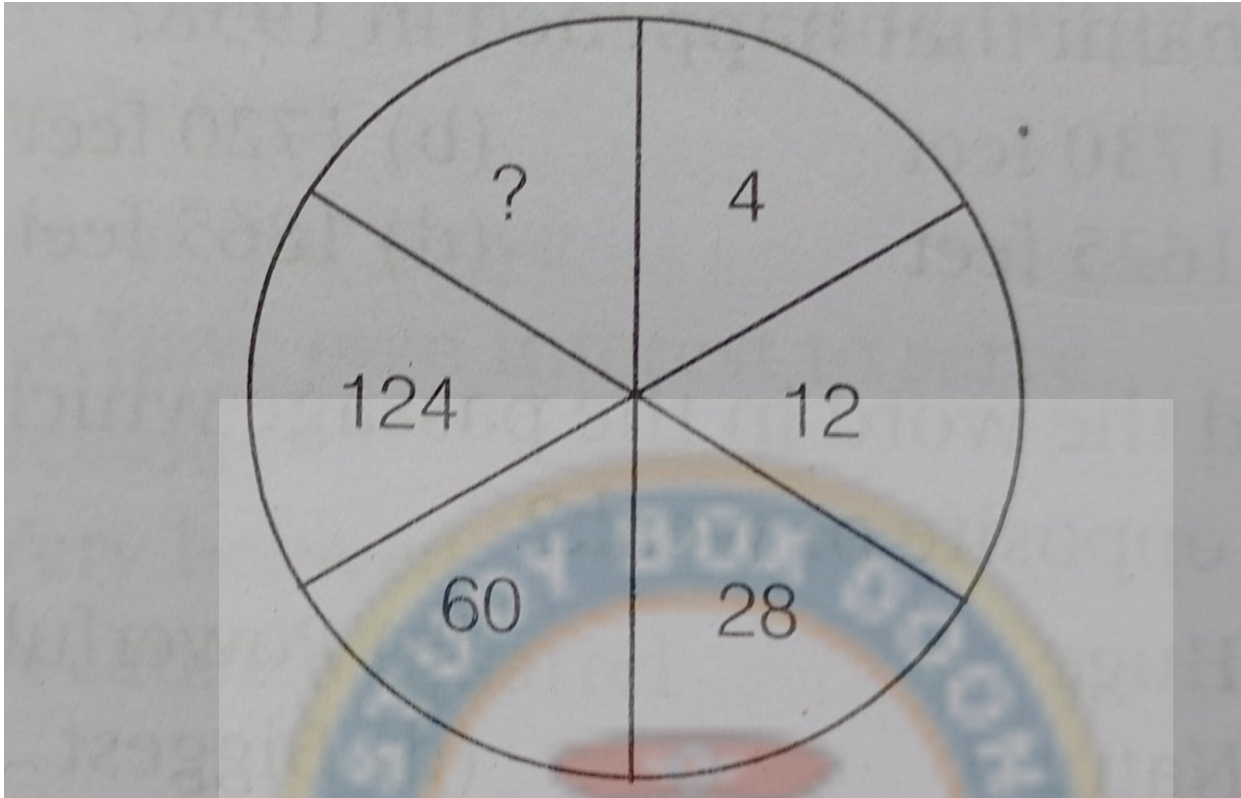
(c)

(d)

Please mark (✓) for the correct answer.

- ☐ A. a
- ☐ B. b
- ☐ C. c
- ☐ D. d

Which number replaces the question mark?



Please mark (✓) for the correct answer.

- ☐ A. 252
- ☐ B. 152
- ☐ C. 352
- ☐ D. 199

## Question: 61 of 125

QID: 4104

Marks: 2

Select the related word from the given alternative.  
Bus : Scooter :: Pen : ?

Please mark (✓) for the correct answer.

- ☐ A. Fruit
- ☐ B. Study
- ☐ C. Eraser
- ☐ D. None of these

## Question: 62 of 125

QID: 4105

Marks: 2

If 'REASON' is coded as 'ERSANO', then 'FRUITS' is coded as:

Please mark (✓) for the correct answer.

- ☐ A. RFIUST
- ☐ B. STFIRU
- ☐ C. URFSIT
- ☐ D. FRIUTS

It was Monday on the day before yesterday. Then, the day after tomorrow will be:

Please mark (✓) for the correct answer.

- ☐ A. Saturday
- ☐ B. Friday
- ☐ C. Sunday
- ☐ D. Thursday

Select the appropriate set of signs.

$$30\_20\_4\_14 = 21$$

Please mark (✓) for the correct answer.

- ☐ A. +, -, ÷
- ☐ B. +, ÷, ×
- ☐ C. ×, -, +
- ☐ D. +, ÷, -

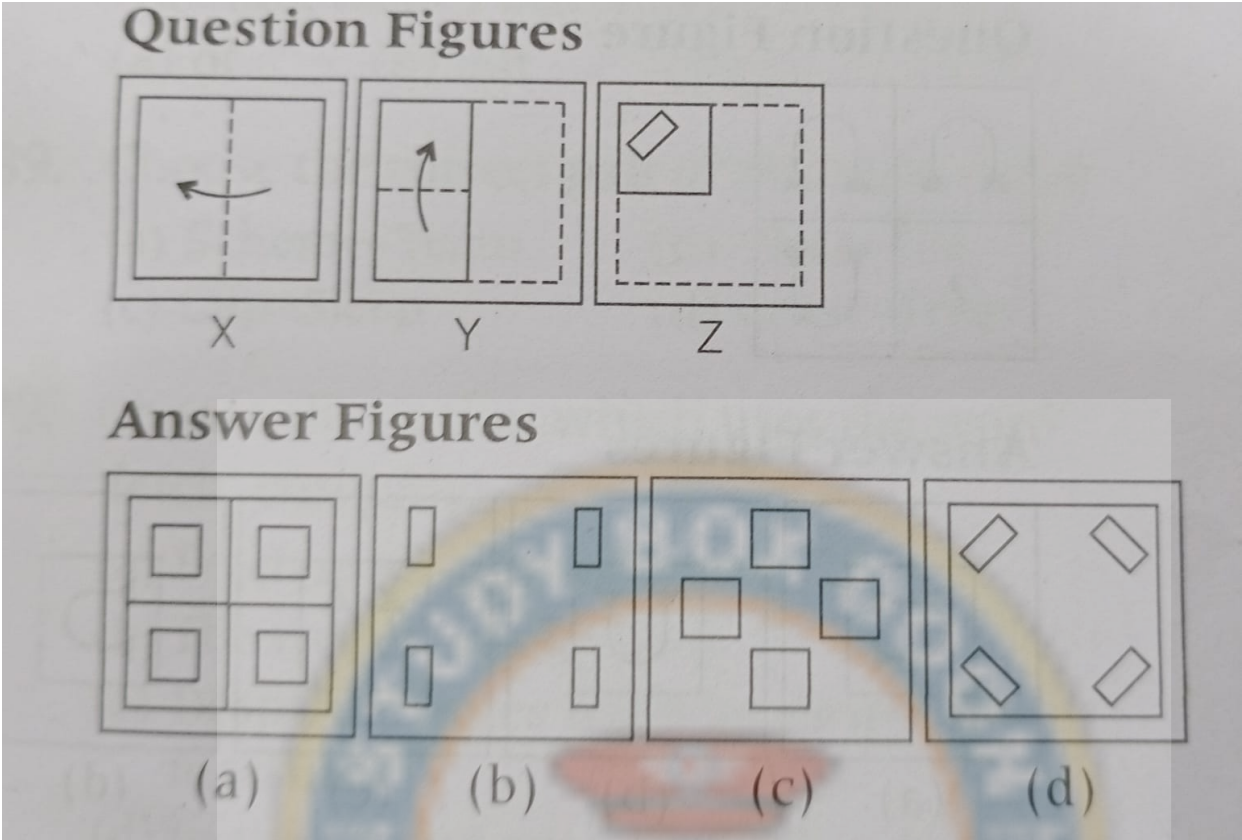
Aarav is Rajat's son. Rajat and Nitin are brothers. How is Nitin related to Aarav?

Please mark (✓) for the correct answer.

- ☐ A. Father
- ☐ B. Maternal uncle
- ☐ C. Brother
- ☐ D. Paternal uncle



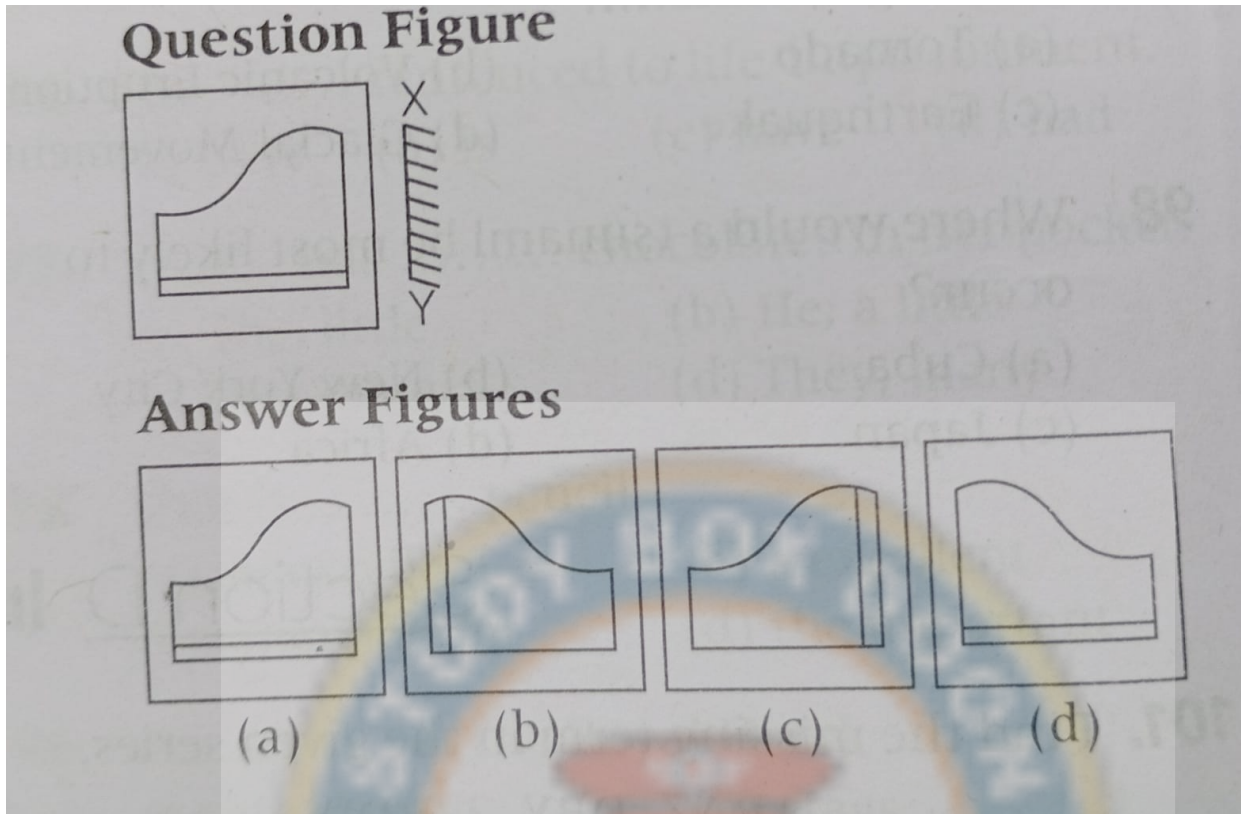
Select the answer figure which indicates how the paper will appear when opened.



Please mark (✓) for the correct answer.

- ☐ A. a
- ☐ B. b
- ☐ C. c
- ☐ D. d

Select the correct mirror image from the given alternative.



Please mark (✓) for the correct answer.

☐ A. a

☐ B. b

☐ C. c

☐ D. d

## Question: 68 of 125

QID: 4111

Marks: 2

If 'ROCK' is coded as 'SQFO', then 'LATE' is coded as:

Please mark (✓) for the correct answer.

☐ A. TWCM

☐ B. NXWM

☐ C. MCWI

☐ D. OPRZ

## Question: 69 of 125

QID: 4112

Marks: 2

Select the odd number-pair.

Please mark (✓) for the correct answer.

☐ A. 71 - 213

☐ B. 55 - 165

☐ C. 49 - 147

☐ D. 67 - 202




Identify the diagram that best represents the relationship among the given classes.

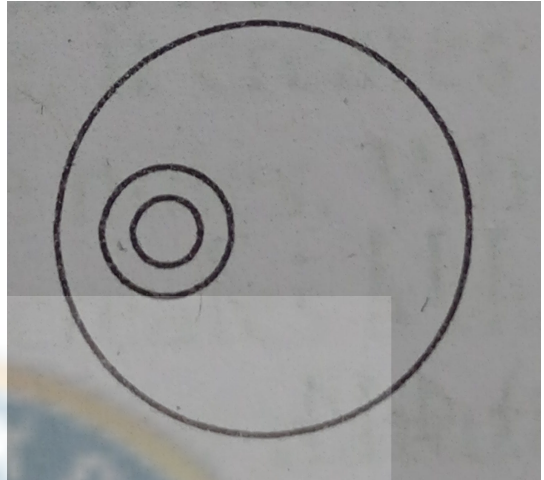
**Pen, Pencil, Stationary**

Please mark (✓) for the correct answer.

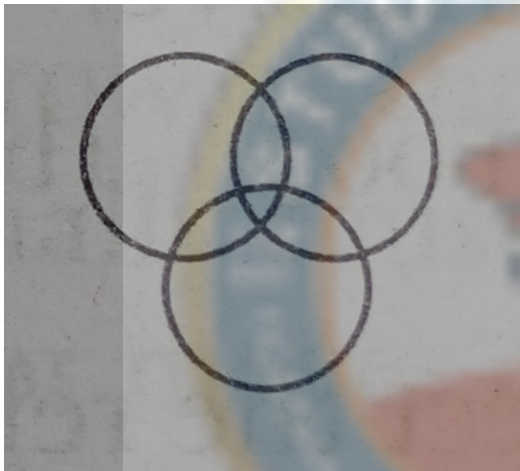
☐ A.




☐ B.



☐ C.



☐ D.



### Question: 71 of 125

QID: 4114

Marks: 2

**Bird is to nest in the same way as Man is to:**

Please mark (✓) for the correct answer.

☐ A. Shop

☐ B. Office

☐ C. Home

☐ D. School

### Question: 72 of 125

QID: 4115

Marks: 2

Akash is 7 ranks ahead of Sumit in a class of 39 students. If Sumit's rank is 17th from the last, what is Akash's rank from the start?

Please mark (✓) for the correct answer.


☐ A. 16th

☐ B. 23rd

☐ C. 24th

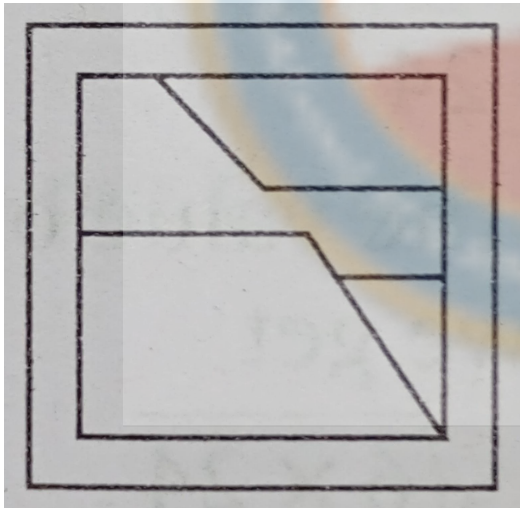
☐ D. 15th

Select the answer figure in which the question figure is hidden.

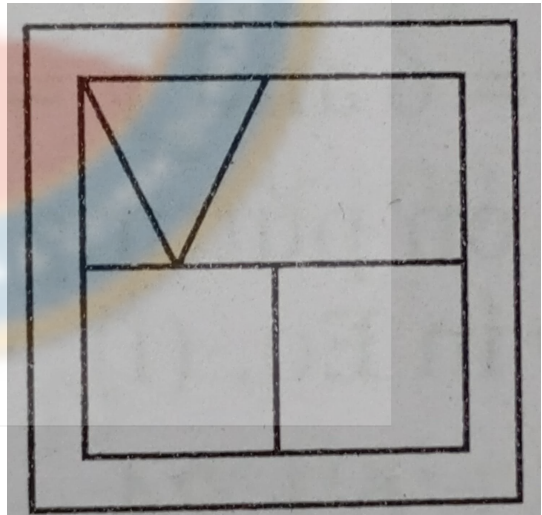


Please mark (✓) for the correct answer.

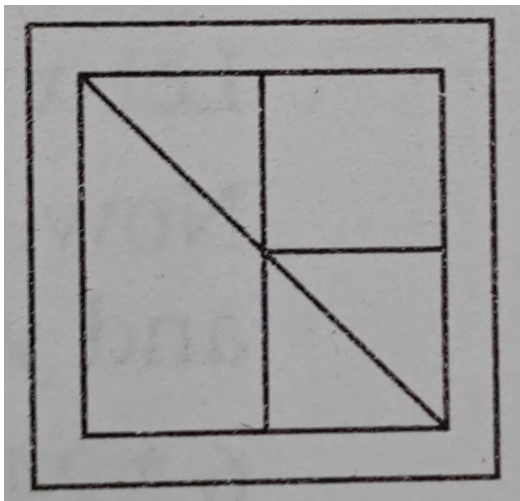
☐ A.



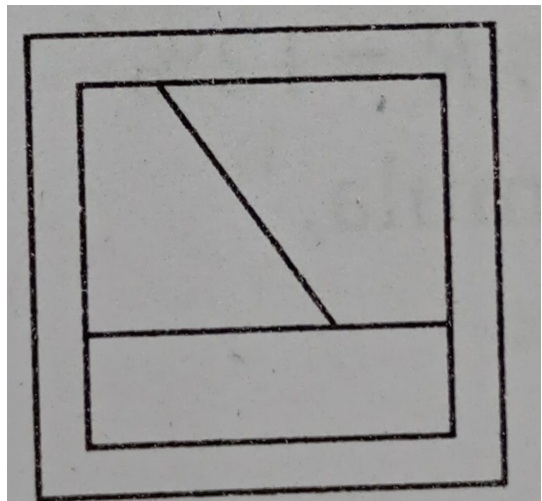
☐ B.



☐ C.



☐ D.



**Question: 74 of 125**

QID: 4117

Marks: 2

Arrange the given words in the sequence in which they occur in the English dictionary.

Theme

Thirst

Thing

Thames

Thurst

Please mark (✓) for the correct answer.

☐ A. 42351☐ B. 41235☐ C. 43251☐ D. 41325**Question: 75 of 125**

QID: 4093

Marks: 2

Find the missing term in the given series.

BAZ, DBY, ?, HDW

Please mark (✓) for the correct answer.

☐ A. FCX☐ B. MOQ☐ C. YTU☐ D. JKL**Question: 76 of 125**

QID: 4134

Marks: 3

If,  $1 + x/144 = 13/12$ , then x is equal to

Please mark (✓) for the correct answer.

☐ A. 1☐ B. 12☐ C. 13☐ D. 25**Question: 77 of 125**

QID: 4135

Marks: 3

Write the numeral for the following fifty four crore one lakh forty one.

Please mark (✓) for the correct answer.

☐ A. 540100041☐ B. 54010041☐ C. 5400110040☐ D. 540100410

**Question: 78 of 125**

QID: 4118

Marks: 3

There were two candidates in an election. The first candidate got 248312 votes. The second candidate got 143887 votes more than the first candidate. How many votes did the second candidate get? What is the total number of votes cast?

Please mark (✓) for the correct answer.

- ☐ A. 604510 ☐ B. 640511  
☐ C. 640501 ☐ D. 604501

**Question: 79 of 125**

QID: 4119

Marks: 3

Divide  $688.8 \div 41$

Please mark (✓) for the correct answer.

- ☐ A. 16.8 ☐ B. 15.4  
☐ C. 16.5 ☐ D. 15.8

**Question: 80 of 125**

QID: 4120

Marks: 3

Find the interest paid on ₹ 600 for 3  $\frac{1}{2}$  yr at 5% per annum.

Please mark (✓) for the correct answer.

- ☐ A. ₹ 108 ☐ B. ₹ 105  
☐ C. ₹ 107 ☐ D. ₹ 110

**Question: 81 of 125**

QID: 4121

Marks: 3

Find percentage :  $0.03 = \dots$

Please mark (✓) for the correct answer.

- ☐ A. 5% ☐ B. 9%  
☐ C. 3% ☐ D. 4%

**Question: 82 of 125**

QID: 4122

Marks: 3

Simplify the expression  $15abx - 8abx$ .

Please mark (✓) for the correct answer.

- ☐ A.  $8ab$  ☐ B.  $7ab$   
☐ C.  $8abx$  ☐ D.  $7abx$



**Question: 83 of 125**

QID: 4123

Marks: 3

An alloy contains 40% zinc and the rest silver. In 50 kg of alloy, what is the amount of silver?

Please mark (✓) for the correct answer.

- ☐ A. 30 kg
- ☐ B. 50 kg
- ☐ C. 35 kg
- ☐ D. 40 kg

**Question: 84 of 125**

QID: 4124

Marks: 3

Suresh bought 96 eggs for ₹ 56.00, out of them 16 were found broken. He sold the remaining eggs as such a price that he got a gain of ₹ 4.00. Find the selling price of an egg.

Please mark (✓) for the correct answer.

- ☐ A. ₹ 7.5
- ☐ B. ₹ 0.75
- ☐ C. ₹ 0.075
- ☐ D. ₹ 75

**Question: 85 of 125**

QID: 4125

Marks: 3

A number is reduced by 5 and then multiplied by 3. The result is 111. Find the number.

Please mark (✓) for the correct answer.

- ☐ A. 35
- ☐ B. 40
- ☐ C. 42
- ☐ D. 445

**Question: 86 of 125**

QID: 4126

Marks: 3

A boy runs a distance of 3 m in 1 sec. What is his speed in km/h?

Please mark (✓) for the correct answer.

- ☐ A. 11.8 km/h
- ☐ B. 11 km/h
- ☐ C. 10 km/h
- ☐ D. 10.8 km/h

**Question: 87 of 125**

QID: 4127

Marks: 3

Find the value of  $x - 2y + x/y + 1$ . If  $x = 2$  and  $y = -1$ .

Please mark (✓) for the correct answer.

- ☐ A. 2
- ☐ B. 3
- ☐ C. 1
- ☐ D. 5

**Question: 88 of 125**

QID: 4128

Marks: 3

Simplify the expression  $0.77 \div 7 - 0.005 + 5$

Please mark (✓) for the correct answer.

☐ A. 5.102☐ B. 10.9☐ C. 1.09☐ D. 0.0109**Question: 89 of 125**

QID: 4129

Marks: 3

What per cent of 50 is 20?

Please mark (✓) for the correct answer.

☐ A. 0.5%☐ B. 0.4%☐ C. 40%☐ D. 50%**Question: 90 of 125**

QID: 4130

Marks: 3

$\angle A$  and  $\angle B$  are supplementary angles. If  $\angle A$  is  $45^\circ$ . What will be  $\angle B$ ?

Please mark (✓) for the correct answer.

☐ A.  $145^\circ$ ☐ B.  $110^\circ$ ☐ C.  $125^\circ$ ☐ D.  $135^\circ$ **Question: 91 of 125**

QID: 4131

Marks: 3

A man spends 15% of his monthly income on clothes and 40% of the rest on food. He there by save ₹ 153. Find his monthly income.

Please mark (✓) for the correct answer.

☐ A. ₹ 340☐ B. ₹ 250☐ C. ₹ 300☐ D. ₹ 400**Question: 92 of 125**

QID: 4132

Marks: 3

The price of 12 chairs or 28 stools is ₹ 700. What is value of 9 chairs and 12 stools?

Please mark (✓) for the correct answer.

☐ A. ₹ 725☐ B. ₹ 825☐ C. ₹ 875☐ D. ₹ 800



**Question: 93 of 125**

QID: 4133

Marks: 3

The maximum marks in an examination are 450. A student gets 60% of this. How many marks does he get?

Please mark (✓) for the correct answer.

- ☐ A. 200 ☐ B. 250
- ☐ C. 270 ☐ D. 300

**Question: 94 of 125**

QID: 4136

Marks: 3

If the cost of 17 pens is ₹221. What is the cost of 13 pens?

Please mark (✓) for the correct answer.

- ☐ A. ₹ 170 ☐ B. ₹ 169
- ☐ C. ₹ 180 ☐ D. ₹ 160

**Question: 95 of 125**

QID: 4137

Marks: 3

A rectangular field is 120 m long and 90 m broad. Find the cost of leveling it at the cost of 15 paise per sq m.

Please mark (✓) for the correct answer.

- ☐ A. ₹ 1600 ☐ B. ₹ 1650
- ☐ C. ₹ 1500 ☐ D. ₹ 1620

**Question: 96 of 125**

QID: 4138

Marks: 3

48 boys do a work in 48 days. How many extra boys should be employed to complete it in 32 days?

Please mark (✓) for the correct answer.

- ☐ A. 24 ☐ B. 25
- ☐ C. 26 ☐ D. 30

**Question: 97 of 125**

QID: 4139

Marks: 3

The average age of 7 boys is 15 yr. Another boy joins them and the average age become 14 yr now. Find the age of the boy who join them in the end.

Please mark (✓) for the correct answer.

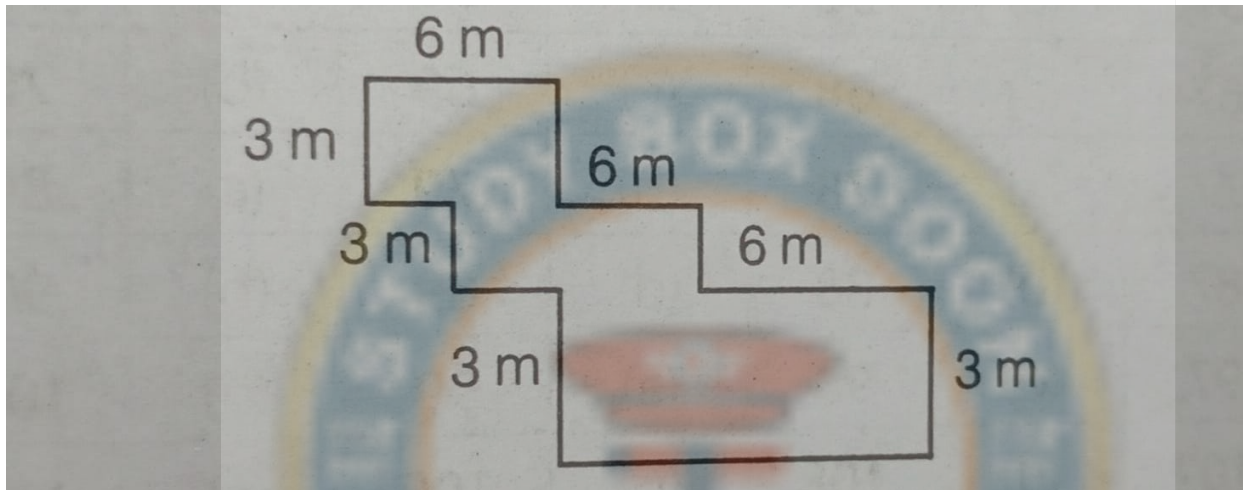
- ☐ A. 8 yr ☐ B. 7 yr
- ☐ C. 14 yr ☐ D. 10 yr

A mixture of 80 L contains 20% water and the rest is milk. How much milk is there in the mixture?

Please mark (✓) for the correct answer.

- ☐ A. 54 L
- ☐ B. 60 L
- ☐ C. 64 L
- ☐ D. 65 L

Find the area of the following figure:



Please mark (✓) for the correct answer.

- ☐ A. 81 m<sup>2</sup>
- ☐ B. 80 m<sup>2</sup>
- ☐ C. 85 m<sup>2</sup>
- ☐ D. 82 m<sup>2</sup>

There is a string measuring 50 m long. How much 2.34 m pieces can be cut from it?

Please mark (✓) for the correct answer.

- ☐ A. 20.30 pieces
- ☐ B. 21.36 pieces
- ☐ C. 22.36 pieces
- ☐ D. 25 pieces

Find the largest number which can be formed by 3, 8, 7, 9.

Please mark (✓) for the correct answer.

- ☐ A. 3789
- ☐ B. 9387
- ☐ C. 9873
- ☐ D. 9783

**Question: 102 of 125**

QID: 4144

Marks: 3

The number 4318 should be divided by which number so that the quotient is 17?

Please mark (✓) for the correct answer.

- ☐ A. 254 ☐ B. 250
- ☐ C. 255 ☐ D. 260

**Question: 103 of 125**

QID: 4145

Marks: 3

What is the least number of 4-digits which is a perfect square?

Please mark (✓) for the correct answer.

- ☐ A. 1125 ☐ B. 1225
- ☐ C. 1024 ☐ D. 1089

**Question: 104 of 125**

QID: 4146

Marks: 3

The HCF and the LCM of two numbers are 13 and 1989, respectively. If one of the numbers is 117. What is the other number?

Please mark (✓) for the correct answer.

- ☐ A. 260 ☐ B. 225
- ☐ C. 222 ☐ D. 221

**Question: 105 of 125**

QID: 4147

Marks: 3

Simplify the expression:  $5\frac{1}{3} - \left\{2\frac{1}{3} - \frac{1}{3}\right\}$

Please mark (✓) for the correct answer.

- ☐ A. 3 ☐ B. 4
- ☐ C. 5 ☐ D. 6

**Question: 106 of 125**

QID: 4152

Marks: 3

Find the average of  $\frac{1}{2}$ ,  $\frac{1}{3}$ ,  $\frac{1}{4}$ , and  $\frac{1}{6}$

Please mark (✓) for the correct answer.

- ☐ A.  $\frac{11}{16}$  ☐ B.  $\frac{5}{12}$
- ☐ C.  $\frac{3}{16}$  ☐ D.  $\frac{5}{16}$

**Question: 107 of 125**

QID: 4153

Marks: 3

Find the length of a wooden plank of width 2.5 m, thickness 0.025 m and volume  $0.25 \text{ m}^3$ .

Please mark (✓) for the correct answer.

- ☐ A. 5m ☐ B. 4m
- ☐ C. 6m ☐ D. 7m

**Question: 108 of 125**

QID: 4154

Marks: 3

If  $a = 18$ ,  $b = 10$  and  $c = 6$ . Find the value of  $abc$ .

Please mark (✓) for the correct answer.

- ☐ A. 1081 ☐ B. 1331
- ☐ C. 1080 ☐ D. 1024

**Question: 109 of 125**

QID: 4155

Marks: 3

Convert  $50^\circ \text{C}$  into fahrenheit.

Please mark (✓) for the correct answer.

- ☐ A.  $130^\circ \text{F}$  ☐ B.  $125^\circ \text{F}$
- ☐ C.  $120^\circ \text{F}$  ☐ D.  $122^\circ \text{F}$

**Question: 110 of 125**

QID: 4156

Marks: 3

Difference between two complementary angles is  $10^\circ$ . Calculate the value of both angles.

Please mark (✓) for the correct answer.

- ☐ A.  $50^\circ, 40^\circ$  ☐ B.  $45^\circ, 40^\circ$
- ☐ C.  $55^\circ, 45^\circ$  ☐ D.  $60^\circ, 40^\circ$

**Question: 111 of 125**

QID: 4157

Marks: 3

Find the LCM of 28, 35, 56, 84.

Please mark (✓) for the correct answer.

- ☐ A. 800 ☐ B. 840
- ☐ C. 740 ☐ D. 625

**Question: 112 of 125**

QID: 4158

Marks: 3

On simplifying:  $6 + 66/10 + 6/100 + 66/1000$ , we get

Please mark (✓) for the correct answer.

☐ A. 12.706☐ B. 12.026☐ C. 11.726☐ D. 12.726**Question: 113 of 125**

QID: 4159

Marks: 3

135% is equal to

Please mark (✓) for the correct answer.

☐ A. 13.5☐ B. 1.35☐ C. 0.135☐ D. 135**Question: 114 of 125**

QID: 4160

Marks: 3

6 Bananas are bought for ₹ 5 and 8 bananas sold for ₹ 11. Find the gain or loss percentage.

Please mark (✓) for the correct answer.

☐ A. 62%☐ B. 65%☐ C. 20%☐ D. 25%**Question: 115 of 125**

QID: 4161

Marks: 3

Which of the following numbers is divisible by 2, 3, 4 and 5?

Please mark (✓) for the correct answer.

☐ A. 36☐ B. 60☐ C. 120☐ D. 90

A typist types pages according to given graph. Study the graph carefully and answer the question.

Days	Pages
Monday	□□□
Tuesday	□□□□
Wednesday	□□
Thursday	□□□□□
Friday	□□□
Saturday	□□□□□□
Sunday	□

□ = 10 pages

What is the average number of pages typed by the typist during the day Monday, Thursday and Sunday?

Please mark (✓) for the correct answer.

- ☐ A. 30 pages
- ☐ B. 20 pages
- ☐ C. 40 pages
- ☐ D. 10 pages

35% of  $x = \frac{3}{4}$  of  $48 + 62$ , find the value of  $x$ .

Please mark (✓) for the correct answer.

- ☐ A. 200
- ☐ B. 280
- ☐ C. 290
- ☐ D. 300

Selling price of 6 pens is equal to the cost price of 7 pens. Find the gain percentage.

Please mark (✓) for the correct answer.

- ☐ A.  $13\frac{1}{5}\%$
- ☐ B.  $11\frac{3}{5}\%$
- ☐ C.  $16\frac{2}{3}\%$
- ☐ D.  $15\frac{3}{5}\%$

Find the value of question mark (?) in  $? + 25 + 12 = 52.45$

Please mark (✓) for the correct answer.

- ☐ A. 15.45
- ☐ B. 15625
- ☐ C. 15225
- ☐ D. 15000



**Question: 120 of 125**

QID: 4162

Marks: 3

A boy read  $\frac{3}{8}$ th of a book on one day and  $\frac{4}{5}$  th of the remainder on another day. If there were 45 pages unread, how many pages does the book contain?

Please mark (✓) for the correct answer.

- ☐ A. 362 pages
- ☐ B. 368 pages
- ☐ C. 360 pages
- ☐ D. 400 pages

**Question: 121 of 125**

QID: 4163

Marks: 3

10 minutes past 3, in the afternoon is written as

Please mark (✓) for the correct answer.

- ☐ A. 3:10 pm
- ☐ B. 3:10 am
- ☐ C. 3:01 pm
- ☐ D. 3:01 am

**Question: 122 of 125**

QID: 4164

Marks: 3

What is difference between the greatest number of five digits and the smallest number of five digits formed by the digit 0, 1, 5, 6, 9 without repetition is

Please mark (✓) for the correct answer.

- ☐ A. 89451
- ☐ B. 85941
- ☐ C. 66951
- ☐ D. 60840

**Question: 123 of 125**

QID: 4165

Marks: 3

The ascending order of 4.40, 0.04, 0.44, 0.004, 4.0004 is

Please mark (✓) for the correct answer.

- ☐ A.  $0.004 < 0.04 < 0.44 < 4.0004 < 4.40$
- ☐ B.  $4.40 < 4.0004 < 0.004 < 0.04 < 0.44$
- ☐ C.  $4.0004 < 4.40 < 0.44 < 0.04 < 0.004$
- ☐ D.  $0.04 < 0.004 < 0.44 < 4.40 < 4.0004$

**Question: 124 of 125**

QID: 4166

Marks: 3

Which of the following are not equivalent?

Please mark (✓) for the correct answer.

- ☐ A.  $\frac{2}{7}$  and  $\frac{8}{28}$
- ☐ B.  $\frac{21}{35}$  and  $\frac{3}{5}$
- ☐ C.  $\frac{3}{4}$  and  $\frac{15}{18}$
- ☐ D.  $\frac{5}{5}$  and  $\frac{25}{25}$

An obtuse angle measures

Please mark (✓) for the correct answer.

- ☐ A. more than  $90^\circ$  but less than  $180^\circ$
- ☐ B. more than  $180^\circ$  but less than  $180^\circ$
- ☐ C. more than  $180^\circ$  but less than  $360^\circ$
- ☐ D. less than  $180^\circ$

— END OF QUESTION PAPER —



## Answer Key

No	Question Type	QID	Correct Answer
Question - 1	Multiple Choice (Radiobutton)	4092	B
Question - 2	Multiple Choice (Radiobutton)	4068	B
Question - 3	Multiple Choice (Radiobutton)	4069	A
Question - 4	Multiple Choice (Radiobutton)	4070	B
Question - 5	Multiple Choice (Radiobutton)	4071	C
Question - 6	Multiple Choice (Radiobutton)	4072	D
Question - 7	Multiple Choice (Radiobutton)	4073	C
Question - 8	Multiple Choice (Radiobutton)	4074	A
Question - 9	Multiple Choice (Radiobutton)	4075	C
Question - 10	Multiple Choice (Radiobutton)	4076	B
Question - 11	Multiple Choice (Radiobutton)	4077	C
Question - 12	Multiple Choice (Radiobutton)	4078	B
Question - 13	Multiple Choice (Radiobutton)	4079	C
Question - 14	Multiple Choice (Radiobutton)	4080	B
Question - 15	Multiple Choice (Radiobutton)	4081	A
Question - 16	Multiple Choice (Radiobutton)	4082	A
Question - 17	Multiple Choice (Radiobutton)	4083	A
Question - 18	Multiple Choice (Radiobutton)	4084	C
Question - 19	Multiple Choice (Radiobutton)	4085	A
Question - 20	Multiple Choice (Radiobutton)	4086	A
Question - 21	Multiple Choice (Radiobutton)	4087	B
Question - 22	Multiple Choice (Radiobutton)	4088	A
Question - 23	Multiple Choice (Radiobutton)	4089	A
Question - 24	Multiple Choice (Radiobutton)	4090	C
Question - 25	Multiple Choice (Radiobutton)	4091	B
Question - 26	Multiple Choice (Radiobutton)	4051	A
Question - 27	Multiple Choice (Radiobutton)	4052	A
Question - 28	Multiple Choice (Radiobutton)	4053	B
Question - 29	Multiple Choice (Radiobutton)	4054	C
Question - 30	Multiple Choice (Radiobutton)	4055	B
Question - 31	Multiple Choice (Radiobutton)	4043	C
Question - 32	Multiple Choice (Radiobutton)	4044	D
Question - 33	Multiple Choice (Radiobutton)	4045	B
Question - 34	Multiple Choice (Radiobutton)	4046	A
Question - 35	Multiple Choice (Radiobutton)	4047	C
Question - 36	Multiple Choice (Radiobutton)	4048	A
Question - 37	Multiple Choice (Radiobutton)	4049	D
Question - 38	Multiple Choice (Radiobutton)	4050	C
Question - 39	Multiple Choice (Radiobutton)	4056	C
Question - 40	Multiple Choice (Radiobutton)	4057	D
Question - 41	Multiple Choice (Radiobutton)	4058	C
Question - 42	Multiple Choice (Radiobutton)	4059	B

No	Question Type	QID	Correct Answer
Question - 43	Multiple Choice (Radiobutton)	4060	A
Question - 44	Multiple Choice (Radiobutton)	4061	A
Question - 45	Multiple Choice (Radiobutton)	4062	B
Question - 46	Multiple Choice (Radiobutton)	4063	A
Question - 47	Multiple Choice (Radiobutton)	4064	A
Question - 48	Multiple Choice (Radiobutton)	4065	C
Question - 49	Multiple Choice (Radiobutton)	4066	D
Question - 50	Multiple Choice (Radiobutton)	4067	A
Question - 51	Multiple Choice (Radiobutton)	4094	D
Question - 52	Multiple Choice (Radiobutton)	4095	A
Question - 53	Multiple Choice (Radiobutton)	4096	B
Question - 54	Multiple Choice (Radiobutton)	4097	B
Question - 55	Multiple Choice (Radiobutton)	4098	D
Question - 56	Multiple Choice (Radiobutton)	4099	C
Question - 57	Multiple Choice (Radiobutton)	4100	A
Question - 58	Multiple Choice (Radiobutton)	4101	A
Question - 59	Multiple Choice (Radiobutton)	4102	B
Question - 60	Multiple Choice (Radiobutton)	4103	A
Question - 61	Multiple Choice (Radiobutton)	4104	C
Question - 62	Multiple Choice (Radiobutton)	4105	A
Question - 63	Multiple Choice (Radiobutton)	4106	B
Question - 64	Multiple Choice (Radiobutton)	4107	D
Question - 65	Multiple Choice (Radiobutton)	4108	D
Question - 66	Multiple Choice (Radiobutton)	4109	D
Question - 67	Multiple Choice (Radiobutton)	4110	D
Question - 68	Multiple Choice (Radiobutton)	4111	C
Question - 69	Multiple Choice (Radiobutton)	4112	D
Question - 70	Multiple Choice (Radiobutton)	4113	A
Question - 71	Multiple Choice (Radiobutton)	4114	C
Question - 72	Multiple Choice (Radiobutton)	4115	A
Question - 73	Multiple Choice (Radiobutton)	4116	D
Question - 74	Multiple Choice (Radiobutton)	4117	D
Question - 75	Multiple Choice (Radiobutton)	4093	A
Question - 76	Multiple Choice (Radiobutton)	4134	B
Question - 77	Multiple Choice (Radiobutton)	4135	A
Question - 78	Multiple Choice (Radiobutton)	4118	B
Question - 79	Multiple Choice (Radiobutton)	4119	A
Question - 80	Multiple Choice (Radiobutton)	4120	B
Question - 81	Multiple Choice (Radiobutton)	4121	C
Question - 82	Multiple Choice (Radiobutton)	4122	D
Question - 83	Multiple Choice (Radiobutton)	4123	A
Question - 84	Multiple Choice (Radiobutton)	4124	B
Question - 85	Multiple Choice (Radiobutton)	4125	C
Question - 86	Multiple Choice (Radiobutton)	4126	D
Question - 87	Multiple Choice (Radiobutton)	4127	B
Question - 88	Multiple Choice (Radiobutton)	4128	A

No	Question Type	QID	Correct Answer
Question - 89	Multiple Choice (Radiobutton)	4129	C
Question - 90	Multiple Choice (Radiobutton)	4130	D
Question - 91	Multiple Choice (Radiobutton)	4131	A
Question - 92	Multiple Choice (Radiobutton)	4132	B
Question - 93	Multiple Choice (Radiobutton)	4133	C
Question - 94	Multiple Choice (Radiobutton)	4136	B
Question - 95	Multiple Choice (Radiobutton)	4137	D
Question - 96	Multiple Choice (Radiobutton)	4138	A
Question - 97	Multiple Choice (Radiobutton)	4139	B
Question - 98	Multiple Choice (Radiobutton)	4140	C
Question - 99	Multiple Choice (Radiobutton)	4141	A
Question - 100	Multiple Choice (Radiobutton)	4142	B
Question - 101	Multiple Choice (Radiobutton)	4143	C
Question - 102	Multiple Choice (Radiobutton)	4144	A
Question - 103	Multiple Choice (Radiobutton)	4145	C
Question - 104	Multiple Choice (Radiobutton)	4146	D
Question - 105	Multiple Choice (Radiobutton)	4147	A
Question - 106	Multiple Choice (Radiobutton)	4152	D
Question - 107	Multiple Choice (Radiobutton)	4153	B
Question - 108	Multiple Choice (Radiobutton)	4154	C
Question - 109	Multiple Choice (Radiobutton)	4155	D
Question - 110	Multiple Choice (Radiobutton)	4156	A
Question - 111	Multiple Choice (Radiobutton)	4157	B
Question - 112	Multiple Choice (Radiobutton)	4158	D
Question - 113	Multiple Choice (Radiobutton)	4159	B
Question - 114	Multiple Choice (Radiobutton)	4160	B
Question - 115	Multiple Choice (Radiobutton)	4161	B
Question - 116	Multiple Choice (Radiobutton)	4148	A
Question - 117	Multiple Choice (Radiobutton)	4149	B
Question - 118	Multiple Choice (Radiobutton)	4150	C
Question - 119	Multiple Choice (Radiobutton)	4151	A
Question - 120	Multiple Choice (Radiobutton)	4162	C
Question - 121	Multiple Choice (Radiobutton)	4163	A
Question - 122	Multiple Choice (Radiobutton)	4164	B
Question - 123	Multiple Choice (Radiobutton)	4165	A
Question - 124	Multiple Choice (Radiobutton)	4166	C
Question - 125	Multiple Choice (Radiobutton)	4167	A

--- END OF ANSWER KEY ---