

**Exam ID: 137****Studybox Doon**

AISSEE\_Class6th\_MT6\_studyboxdoon.com

Name: \_\_\_\_\_

Date: \_\_\_\_\_

**Exam Instructions**

1. The timer has been set for the exam, and a countdown will display the remaining time. When the timer runs out, the exam will end automatically. No further action will be required after that.
2. You can flag any question that you want.
3. If you don't want to submit any of your provided answers, you can clear them.
4. If you choose to drop this exam, it will not be submitted, and no result will be generated.
5. Once you finish the exam, you cannot resume it.

**Question: 1 of 125**

QID: 4628

Marks: 3

Find the place value of 9 in the number 9063.

Please mark (✓) for the correct answer.

- ☐ A. 900                      ☐ B. 9000
- ☐ C. 90                        ☐ D. 9

**Question: 2 of 125**

QID: 4629

Marks: 3

Sum of smallest and greatest number formed by the digits 5, 0, 1, 8.

Please mark (✓) for the correct answer.

- ☐ A. 9568                      ☐ B. 6000
- ☐ C. 5869                      ☐ D. 5868

**Question: 3 of 125**

QID: 4630

Marks: 3

How many prime numbers between 1 and 20.

Please mark (✓) for the correct answer.

- ☐ A. 5                            ☐ B. 7
- ☐ C. 6                            ☐ D. 8

**Question: 4 of 125**

QID: 4631

Marks: 3

Cost price of 8 oranges is ₹ 400, then what is the cost price of 4 oranges?

Please mark (✓) for the correct answer.

☐ A. ₹ 400☐ B. ₹ 300☐ C. ₹ 200☐ D. ₹ 100**Question: 5 of 125**

QID: 4632

Marks: 3

On dividing 18270 by a certain number, the quotient is 186 and the remainder is 42. What will be the divisor?

Please mark (✓) for the correct answer.

☐ A. 99☐ B. 98☐ C. 100☐ D. 101**Question: 6 of 125**

QID: 4633

Marks: 3

Simplify the expression  $2\frac{1}{4} \times \frac{5}{12} \div \frac{1}{2}$

Please mark (✓) for the correct answer.

☐ A.  $1\frac{7}{8}$ ☐ B.  $5\frac{5}{2}$ ☐ C.  $4\frac{1}{3}$ ☐ D.  $3\frac{1}{5}$ **Question: 7 of 125**

QID: 4634

Marks: 3

How many days in 7 weeks?

Please mark (✓) for the correct answer.

☐ A. 48☐ B. 49☐ C. 50☐ D. 51**Question: 8 of 125**

QID: 4635

Marks: 3

If length of rectangle is 300 m and breadth is 50 m, then find the area of rectangle.

Please mark (✓) for the correct answer.

☐ A. 700 m<sup>2</sup>☐ B. 150 m<sup>2</sup>☐ C. 15000 m<sup>2</sup>☐ D. 1500 m<sup>2</sup>

**Question: 9 of 125**

QID: 4636

Marks: 3

A scooter was purchased for ₹ 50000 and sold for ₹ 35000. Find the loss per cent.

Please mark (✓) for the correct answer.

☐ A. 20%☐ B. 25%☐ C. 40%☐ D. 30%**Question: 10 of 125**

QID: 4637

Marks: 3

In a school, a student secure 60% marks out of 600 marks. If he passed 50 marks more than passing mark, then find the passing marks.

Please mark (✓) for the correct answer.

☐ A. 310☐ B. 300☐ C. 250☐ D. 200**Question: 11 of 125**

QID: 4638

Marks: 3

Change  $\frac{23}{184}$  into decimal fraction.

Please mark (✓) for the correct answer.

☐ A. 12.5☐ B. 0.125☐ C. .25☐ D. 0.0125**Question: 12 of 125**

QID: 4639

Marks: 3

The length and breadth of a rectangular ground are 90 m and 70 m, respectively. What is the cost of cultivating the ground, if rate is ₹ 0.50 per  $\text{m}^2$ ?

Please mark (✓) for the correct answer.

☐ A. ₹ 1125☐ B. ₹ 1050☐ C. ₹ 3050☐ D. ₹ 3150**Question: 13 of 125**

QID: 4640

Marks: 3

The surface area of a cube is  $486 \text{ cm}^2$ . Find its volume.

Please mark (✓) for the correct answer.

☐ A.  $1331 \text{ cm}^3$ ☐ B.  $1728 \text{ cm}^3$ ☐ C.  $729 \text{ cm}^3$ ☐ D.  $512 \text{ cm}^3$

**Question: 14 of 125**

QID: 4641

Marks: 3

Convert 50 m/s into km/h.

Please mark (✓) for the correct answer.

- ☐ A. 160 km/h ☐ B. 180 km/h
- ☐ C. 150 km/h ☐ D. 160 km/h

**Question: 15 of 125**

QID: 4642

Marks: 3

A train is running at the speed of 42 km/h. If it crosses a pole in 20 s. Find the length of the train.

Please mark (✓) for the correct answer.

- ☐ A. 233.33 m ☐ B. 230.33 m
- ☐ C. 230 m ☐ D. 231.33 m

**Question: 16 of 125**

QID: 4643

Marks: 3

Two angles of a triangle are  $50^\circ$  and  $50^\circ$ , then find the third angle of the triangle.

Please mark (✓) for the correct answer.

- ☐ A.  $100^\circ$  ☐ B.  $70^\circ$
- ☐ C.  $80^\circ$  ☐ D.  $110^\circ$

**Question: 17 of 125**

QID: 4644

Marks: 3

Cost price of 20 kg sugar is ₹ 250, then find the cost price of 15 kg sugar.

Please mark (✓) for the correct answer.

- ☐ A. ₹ 180 ☐ B. ₹ 187.5
- ☐ C. ₹ 186.5 ☐ D. ₹ 181.5

**Question: 18 of 125**

QID: 4645

Marks: 3

Difference between two supplementary angles is  $80^\circ$ . Find out the both angle.

Please mark (✓) for the correct answer.

- ☐ A.  $30^\circ$  and  $60^\circ$  ☐ B.  $40^\circ$  and  $120^\circ$
- ☐ C.  $45^\circ$  and  $135^\circ$  ☐ D.  $50^\circ$  and  $130^\circ$

**Question: 19 of 125**

QID: 4646

Marks: 3

0.225 when expressed as per cent is

Please mark (✓) for the correct answer.

- ☐ A. 2.25% ☐ B. 22.5%
- ☐ C. 225% ☐ D. 0.0225%

**Question: 20 of 125**

QID: 4647

Marks: 3

$5.2 + 2.5 + 3.2 - 4.5 = ?$

Please mark (✓) for the correct answer.

- ☐ A. 6.4 ☐ B. 5.4
- ☐ C. 4.5 ☐ D. 5.8

**Question: 21 of 125**

QID: 4648

Marks: 3

Find the value of  $0.1 + 0.11 + 0.111 + 0.1111$

Please mark (✓) for the correct answer.

- ☐ A. 1.234 ☐ B. 4.321
- ☐ C. 0.1234 ☐ D. 0.4321

**Question: 22 of 125**

QID: 4649

Marks: 3

The prices of 6 tables are ₹ 700, ₹ 750, ₹ 600, ₹ 500, ₹ 400 and ₹ 760. Find the average price of a table.

Please mark (✓) for the correct answer.

- ☐ A. ₹ 700 ☐ B. ₹ 618
- ☐ C. ₹ 800 ☐ D. ₹ 1200

**Question: 23 of 125**

QID: 4650

Marks: 3

Paul bought 4 L of milk in morning. During the day  $2\frac{1}{2}$  L milk was used. How much of milk is left in the evening?

Please mark (✓) for the correct answer.

- ☐ A. 0.2 L ☐ B. .125 L
- ☐ C. 1.5 L ☐ D. 2.75 L

**Question: 24 of 125**

QID: 4651

Marks: 3

15/4 of 240 – 3/2 of 300 = ?

Please mark (✓) for the correct answer.

☐ A. 500☐ B. 350☐ C. 400☐ D. 450**Question: 25 of 125**

QID: 4652

Marks: 3

Find the volume of a cube whose edge is 20 m.

Please mark (✓) for the correct answer.

☐ A. 4000 m<sup>3</sup>☐ B. 8000 m<sup>3</sup>☐ C. 400 m<sup>3</sup>☐ D. 800 m<sup>3</sup>**Question: 26 of 125**

QID: 4653

Marks: 3

If  $x = 0$  and  $y = 1$ , then find the value of  $x^3y^3$ .

Please mark (✓) for the correct answer.

☐ A. 0☐ B. 1☐ C. 2☐ D. 3**Question: 27 of 125**

QID: 4654

Marks: 3

If dividend is 100400, quotient is 392 and Remainder is 48, then what is divisor?

Please mark (✓) for the correct answer.

☐ A. 250☐ B. 225☐ C. 256☐ D. 265**Question: 28 of 125**

QID: 4655

Marks: 3

A does a work in 20 days and B does in 30 days respectively, then both of them start together. How many days they finished the work?

Please mark (✓) for the correct answer.

☐ A. 18 days☐ B. 16 days☐ C. 14 days☐ D. 12 days

What is the largest five digits number?

Please mark (✓) for the correct answer.

- ☐ A. 99999 ☐ B. 100000
- ☐ C. 10000 ☐ D. 9999

How many square plots of side 5 m can be cut from a square field of side 50 m?

Please mark (✓) for the correct answer.

- ☐ A. 200 ☐ B. 100
- ☐ C. 300 ☐ D. 400

90° angle is called

Please mark (✓) for the correct answer.

- ☐ A. Right angle ☐ B. Straight angle
- ☐ C. Acute angle ☐ D. Obtuse angle

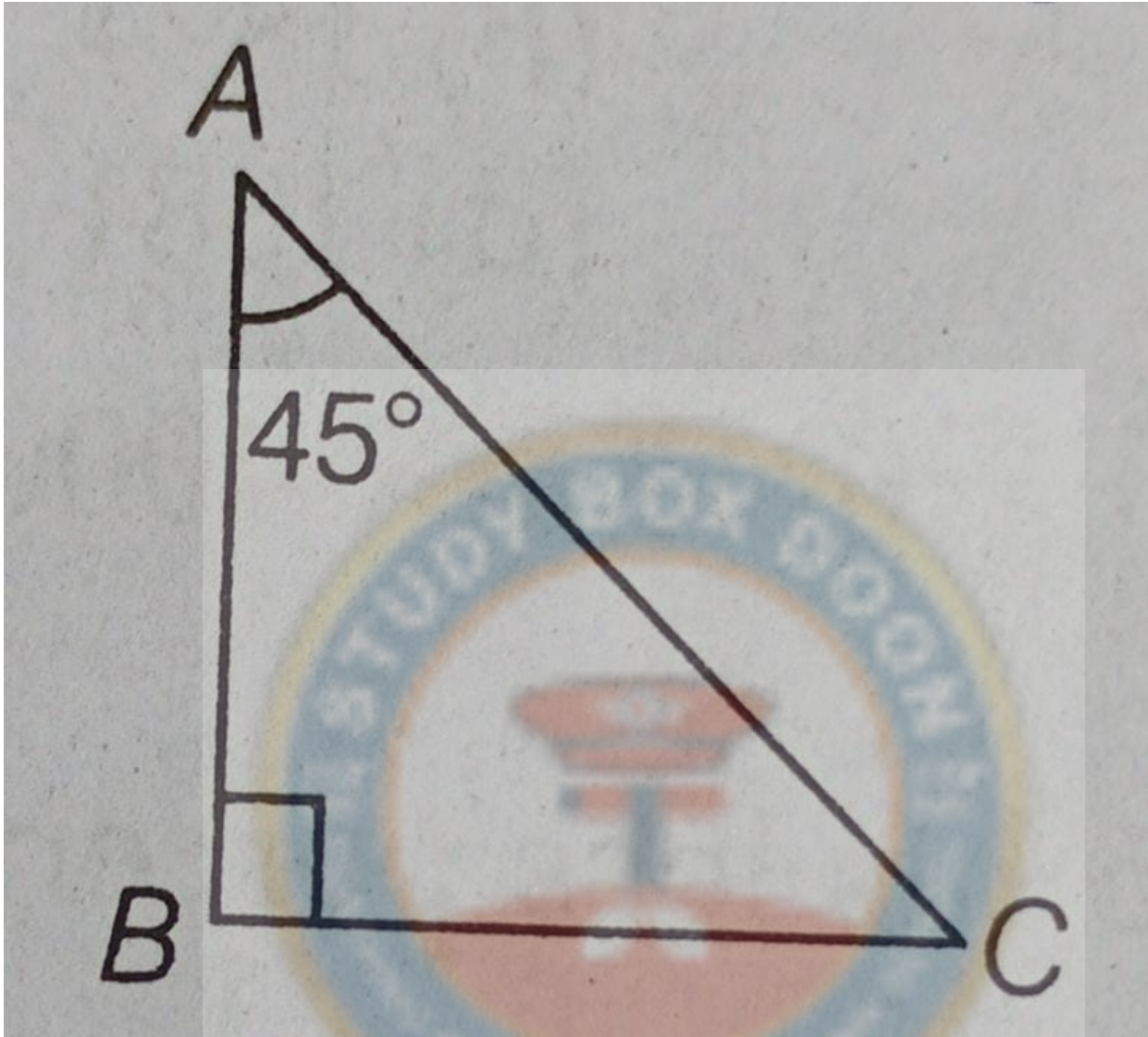
A sum of ₹ 200 is deposited in the post office at the rate of  $5\frac{1}{2}\%$  simple interest per annum. What will be the total amount after 2 yr?

Please mark (✓) for the correct answer.

- ☐ A. ₹ 50 ☐ B. ₹ 400
- ☐ C. ₹ 222 ☐ D. ₹ 300



Find  $\angle ACB$  from the given figure



Please mark (✓) for the correct answer.

- ☐ A.  $90^\circ$  ☐ B.  $60^\circ$
- ☐ C.  $40^\circ$  ☐ D.  $45^\circ$

Find the value of expression  $99 \times 65 + 99 \times 35 = ?$

Please mark (✓) for the correct answer.

- ☐ A. 9900 ☐ B. 990
- ☐ C. 900 ☐ D. 9009



**Question: 35 of 125**

QID: 4662

Marks: 3

Find the value of  $48a - 5a^2$ , if  $a = 2$ .

Please mark (✓) for the correct answer.

- ☐ A. 75                      ☐ B. 86
- ☐ C. 76                      ☐ D. 80

**Question: 36 of 125**

QID: 4663

Marks: 3

The population of a town is 5000. If 50% are males, 25% are females and rest are children. What is total number of children in town?

Please mark (✓) for the correct answer.

- ☐ A. 1350                      ☐ B. 1250
- ☐ C. 1000                      ☐ D. 1450

**Question: 37 of 125**

QID: 4664

Marks: 3

$1/2 + 3/4 + 5/8 = ?$

Please mark (✓) for the correct answer.

- ☐ A.  $15/8$                       ☐ B.  $15/4$
- ☐ C.  $12/5$                       ☐ D.  $20/8$

**Question: 38 of 125**

QID: 4665

Marks: 3

How much she will earn in 10 days, if a woman earn daily ₹ 50?

Please mark (✓) for the correct answer.

- ☐ A. ₹ 200                      ☐ B. ₹ 400
- ☐ C. ₹ 500                      ☐ D. ₹ 550

**Question: 39 of 125**

QID: 4666

Marks: 3

If  $0.75 : x :: 5 : 8$ , then what is the value of  $x$  ?

Please mark (✓) for the correct answer.

- ☐ A. 0.21                      ☐ B. 2.1
- ☐ C. 1                          ☐ D. 1.2

**Question: 40 of 125**

QID: 4667

Marks: 3

The ratio of two numbers is 3:8 and their difference is 115. What is the largest number?

Please mark (✓) for the correct answer.

- ☐ A. 184 ☐ B. 180
- ☐ C. 190 ☐ D. 200

**Question: 41 of 125**

QID: 4668

Marks: 3

The length of a rectangular plot of land is twice its breadth and its perimeter is 60 m. The area of the plot is

Please mark (✓) for the correct answer.

- ☐ A. 160 m<sup>2</sup> ☐ B. 180 m<sup>2</sup>
- ☐ C. 200 m<sup>2</sup> ☐ D. 22 m<sup>2</sup>

**Question: 42 of 125**

QID: 4669

Marks: 3

Find the difference between the place value and the face value of 8 in the numeral 9685432.

Please mark (✓) for the correct answer.

- ☐ A. 79992 ☐ B. 7992
- ☐ C. 7990 ☐ D. 792

**Question: 43 of 125**

QID: 4670

Marks: 3

Expand of 7.086.

Please mark (✓) for the correct answer.

- ☐ A.  $7 + 0/10 + 8/1000 + 6/100$  ☐ B.  $7 + 8/100 + 6/1000$
- ☐ C.  $7 + 8/10 + 6/100$  ☐ D.  $7 + 8/100 + 6/10$

**Question: 44 of 125**

QID: 4671

Marks: 3

170% of 1140 = ?

Please mark (✓) for the correct answer.

- ☐ A. 1938 ☐ B. 1824
- ☐ C. 1968 ☐ D. 1881

**Question: 45 of 125**

QID: 4672

Marks: 3

If a man sold an article at ₹ 4000, whose cost price is ₹ 4500, then find his loss percentage.

Please mark (✓) for the correct answer.

☐ A.  $11\frac{1}{9}\%$ ☐ B.  $9\frac{1}{9}\%$ ☐ C. 11%☐ D. 10%**Question: 46 of 125**

QID: 4673

Marks: 3

The highest score in a inning was  $\frac{3}{11}$  of the total and the next highest was  $\frac{3}{11}$  of the remainder. If these scores differed by 9, the total scores is

Please mark (✓) for the correct answer.

☐ A. 99☐ B. 110☐ C. 121☐ D. 132**Question: 47 of 125**

QID: 4674

Marks: 3

45 min past 4 in the afternoon is written as

Please mark (✓) for the correct answer.

☐ A. 5 : 45 am☐ B. 4 : 45 am☐ C. 4 : 45 pm☐ D. 5 : 45 pm**Question: 48 of 125**

QID: 4675

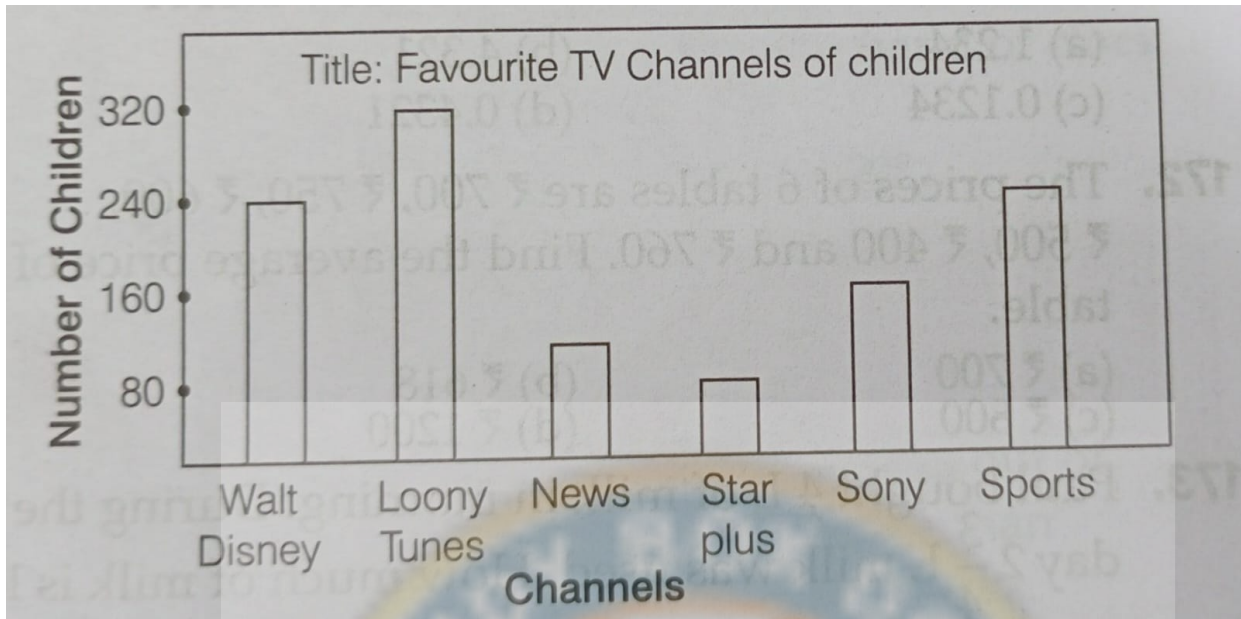
Marks: 3

The least square number which is divisible by 6, 8 and 15 is

Please mark (✓) for the correct answer.

☐ A. 2500☐ B. 4500☐ C. 3600☐ D. 4900

Study the following bar graph and answer the question that follow.



How many more children like Loony Tunes than Walt Disney?

Please mark (✓) for the correct answer.

- ☐ A. 80 ☒ B. 60
- ☐ C. 40 ☐ D. 20

Question: 50 of 125

QID: 4677

Marks: 3

If an items is sold at 20% loss, for which selling price was ₹ 240, then find the cost price of that item.

Please mark (✓) for the correct answer.

- ☐ A. ₹ 300 ☐ B. ₹ 350
- ☐ C. ₹ 360 ☐ D. ₹ 340

Question: 51 of 125

QID: 4544

Marks: 2

The Congo–Chambeshi River does not flow through which of the following countries?

Please mark (✓) for the correct answer.

- ☐ A. Russia ☐ B. DPR Congo
- ☐ C. Tanzania ☐ D. Zaire

**Question: 52 of 125**

QID: 4545

Marks: 2

Which of the following battles was won by Robert Clive commanding the forces of the East India Company?

Please mark (✓) for the correct answer.

- ☐ A. Second Battle of Panipat
- ☐ B. Third Battle of Panipat
- ☐ C. Battle of Plassey
- ☐ D. Battle of Buxar

**Question: 53 of 125**

QID: 4546

Marks: 2

What is the work that UNICEF does?

Please mark (✓) for the correct answer.

- ☐ A. It promotes collaboration among nations through education
- ☐ B. It promotes welfare of children all over the world
- ☐ C. It promotes achievement of the highest possible level of health
- ☐ D. All of these

**Question: 54 of 125**

QID: 4547

Marks: 2

Which of the following is the correct order from bottom to top of the colors in our national flag?

Please mark (✓) for the correct answer.

- ☐ A. Green, White, Saffron
- ☐ B. Saffron, White, Green
- ☐ C. Orange, White, Green
- ☐ D. Green, Orange, White

**Question: 55 of 125**

QID: 4548

Marks: 2

What is the national game of South Korea?

Please mark (✓) for the correct answer.

- ☐ A. Judo
- ☐ B. Taekwondo
- ☐ C. Sumo Wrestling
- ☐ D. Grease Wrestling

**Question: 56 of 125**

QID: 4549

Marks: 2

In which country is Mount Kosciuszko?

Please mark (✓) for the correct answer.

- ☐ A. The border of Nepal and China
- ☐ B. The border of Canada and USA
- ☐ C. Australia
- ☐ D. Japan

**Question: 57 of 125**

QID: 4550

Marks: 2

..... is a dance form popular in Gujarat.

Please mark (✓) for the correct answer.

- |                                       |                                    |
|---------------------------------------|------------------------------------|
| <input type="radio"/> A. Dandiya Raas | <input type="radio"/> B. Yakshagan |
| <input type="radio"/> C. Lavani       | <input type="radio"/> D. Rasilia   |

**Question: 58 of 125**

QID: 4551

Marks: 2

Which of the following did Leonardo da Vinci invent?

Please mark (✓) for the correct answer.

- |  |   |
|--|---|
| <input type="radio"/> A. Mechanical Calculator | <input type="radio"/> B. A Flying Machine |
| <input type="radio"/> C. Ball Bearings         | <input type="radio"/> D. All of these     |

**Question: 59 of 125**

QID: 4552

Marks: 2

Which Indian freedom fighter gave the slogan "Jai Hind"?

Please mark (✓) for the correct answer.

- |  |  |
|--|--|
| <input type="radio"/> A. Motilal Nehru       | <input type="radio"/> B. Jawaharlal Nehru    |
| <input type="radio"/> C. Bal Gangadhar Tilak | <input type="radio"/> D. Subhas Chandra Bose |

**Question: 60 of 125**

QID: 4528

Marks: 2

Which constitution is the longest written constitution of the world?

Please mark (✓) for the correct answer.

- |                                   |                                   |
|-----------------------------------|-----------------------------------|
| <input type="radio"/> A. Indian   | <input type="radio"/> B. American |
| <input type="radio"/> C. Canadian | <input type="radio"/> D. Japanese |



Match the names of the famous women with their achievements.

Name of Woman	Her achievement
A. Margaret Thatcher	1. Won two Nobel Prizes
B. Marie Curie	2. Won a Nobel Prize and is dead now
C. Mother Teresa	3. Was Prime Minister of the United Kingdom
D. Aung San Suu Kyi	4. Won a Nobel Prize and is alive now

Select the correct answer using the code given below.

Please mark (✓) for the correct answer.

- ☐ A. A-2, B-3, C-1, D-4
- ☐ B. A-1, B-2, C-3, D-4
- ☐ C. A-3, B-2, C-4, D-1
- ☐ D. A-3, B-1, C-2, D-4

## Question: 62 of 125

QID: 4530

Marks: 2

A person who manages the production of plants in agricultural companies is called...

Please mark (✓) for the correct answer.

- ☐ A. a farmer
- ☐ B. an agriculturist
- ☐ C. a plant producer
- ☐ D. an agronomist

## Question: 63 of 125

QID: 4531

Marks: 2

Who was known as "The Bard of Avon"?

Please mark (✓) for the correct answer.

- ☐ A. Robert Bacon
- ☐ B. William Shakespeare
- ☐ C. PB Shelley
- ☐ D. Mary Ann Evans

## Question: 64 of 125

QID: 4532

Marks: 2

Vardhman Mahavira held his first sermon at

Please mark (✓) for the correct answer.

- ☐ A. Sarnath, UP
- ☐ B. Bodh Gaya, Bihar
- ☐ C. Pavapuri, Bihar
- ☐ D. None of these

**Question: 65 of 125**

QID: 4533

Marks: 2

Which planet in our solar system is known as the 'Red Planet'?

Please mark (✓) for the correct answer.

- ☐ A. Mars ☐ B. Neptune  
☐ C. Saturn ☐ D. Mercury

**Question: 66 of 125**

QID: 4534

Marks: 2

First temple to be constructed from a single rock.

Please mark (✓) for the correct answer.

- ☐ A. Kailash ☐ B. Meenakshi  
☐ C. Khajuraho ☐ D. Somnath

**Question: 67 of 125**

QID: 4535

Marks: 2

How does Dengue spread?

Please mark (✓) for the correct answer.

- ☐ A. By infection ☐ B. Through the bite of an infected Aedes mosquito  
☐ C. Through the bite of an infected female Anopheles mosquito ☐ D. Through contaminated food and water

**Question: 68 of 125**

QID: 4536

Marks: 2

When is Teachers' Day celebrated every year in India?

Please mark (✓) for the correct answer.

- ☐ A. 29th August ☐ B. 26th November  
☐ C. 4th December ☐ D. 5th September

**Question: 69 of 125**

QID: 4537

Marks: 2

Who was selected for the Bharat Ratna Award posthumously in 2015?

Please mark (✓) for the correct answer.

- ☐ A. Madan Mohan Malaviya ☐ B. CN Rao  
☐ C. Jawaharlal Nehru ☐ D. Indira Gandhi

**Question: 70 of 125**

QID: 4538

Marks: 2

Relics of the Indus Valley Civilization have been found at .....

Please mark (✓) for the correct answer.

- ☐ A. Kalibangan
- ☐ B. Lumbini
- ☐ C. Vaishali
- ☐ D. All of these

**Question: 71 of 125**

QID: 4539

Marks: 2

Adolf Hitler, who ruled Germany from 1933 to 1945, wrote his autobiography titled .....

Please mark (✓) for the correct answer.

- ☐ A. Up from Slavery
- ☐ B. Childhood Days
- ☐ C. My Struggle
- ☐ D. Autobiography of a Successful Nazi

**Question: 72 of 125**

QID: 4540

Marks: 2

Solar energy can be used to .....

Please mark (✓) for the correct answer.

- ☐ A. Cook food
- ☐ B. Heat water
- ☐ C. Generate electrical energy
- ☐ D. All of the above

**Question: 73 of 125**

QID: 4541

Marks: 2

What achievement was Robert Walpole known for?

Please mark (✓) for the correct answer.

- ☐ A. Becoming the first President of Great Britain
- ☐ B. Becoming the first Prime Minister of USA
- ☐ C. Becoming the first Prime Minister of Great Britain
- ☐ D. Becoming the first President of the USA

**Question: 74 of 125**

QID: 4542

Marks: 2

Which one of the following is the highest rank of an officer in the Indian Navy?

Please mark (✓) for the correct answer.

- ☐ A. Commodore of the Fleet
- ☐ B. Admiral of the Fleet
- ☐ C. Admiral
- ☐ D. Commander

**Question: 75 of 125**

QID: 4543

Marks: 2

..... is the national symbol for Australia.

Please mark (✓) for the correct answer.

- ☐ A. Panda ☐ B. Platypus
- ☐ C. Kangaroo ☐ D. Boomerang

**Question: 76 of 125**

QID: 4587

Marks: 2

8 : 56 :: 9 : ?

Please mark (✓) for the correct answer.

- ☐ A. 10 ☐ B. 63
- ☐ C. 7 ☐ D. 9

**Question: 77 of 125**

QID: 4588

Marks: 2

Find the letters/words which are different from the group.

Please mark (✓) for the correct answer.

- ☐ A. Sky ☐ B. Star
- ☐ C. Moon ☐ D. Planet

**Question: 78 of 125**

QID: 4589

Marks: 2

Find the letters/words which are different from the group.

Please mark (✓) for the correct answer.

- ☐ A. Huge ☐ B. Tiny
- ☐ C. Small ☐ D. Heavy

**Question: 79 of 125**

QID: 4590

Marks: 2

Find the letters/words which are different from the group.

Please mark (✓) for the correct answer.

- ☐ A. Sparrow ☐ B. Crow
- ☐ C. Parrot ☐ D. Bat

Find the letters/words which are different from the group.

Please mark (✓) for the correct answer.

☐ A. Lemon

☐ B. Orange

☐ C. Lime

☐ D. Banana

Find the letters/words which are different from the group.

Please mark (✓) for the correct answer.

☐ A. EHG

☐ B. JML

☐ C. PSR

☐ D. UXX

Find out the relationship between two words.

Yen : Japan :: Lira : ?

Please mark (✓) for the correct answer.

☐ A. Italy

☐ B. Japan

☐ C. South Africa

☐ D. USA

Umpire : Match :: Judge : ?

Please mark (✓) for the correct answer.

☐ A. Bar council

☐ B. Lawyer

☐ C. Judgement

☐ D. Lawsuit

**Question: 84 of 125**

QID: 4595

Marks: 2

**Doctor : Nurse :: ? : follower**

Please mark (✓) for the correct answer.

- ☐ A. Worked ☐ B. Employer
- ☐ C. Union ☐ D. Leader

**Question: 85 of 125**

QID: 4596

Marks: 2

**6 : 35 :: 7 : ?**

Please mark (✓) for the correct answer.

- ☐ A. 48 ☐ B. 42
- ☐ C. 34 ☐ D. 13

**Question: 86 of 125**

QID: 4597

Marks: 2

**8 : 66 :: ? : 38**

Please mark (✓) for the correct answer.

- ☐ A. 2 ☐ B. 6
- ☐ C. 12 ☐ D. 9

**Question: 87 of 125**

QID: 4598

Marks: 2

Work out the code for each question and find the second missing word.

If 'SRQ' means 'HIJ', then 'KLM' means

Please mark (✓) for the correct answer.

- ☐ A. OPN ☐ B. ONP
- ☐ C. PON ☐ D. NOP

**Question: 88 of 125**

QID: 4599

Marks: 2

If 'BUT' means 'CVU', then 'BRE' means

Please mark (✓) for the correct answer.

- ☐ A. SFC ☐ B. FSC
- ☐ C. SCF ☐ D. CSF



If 'GMBN' means 'FLAM', then 'TOBS' means

Please mark (✓) for the correct answer.

- |                               |                               |
|-------------------------------|-------------------------------|
| <input type="radio"/> A. RAPS | <input type="radio"/> B. SNAR |
| <input type="radio"/> C. RPAS | <input type="radio"/> D. RASP |

If 'SIS' means 'RHR', then 'UNC' means

Please mark (✓) for the correct answer.

- |                              |                              |
|------------------------------|------------------------------|
| <input type="radio"/> A. TMB | <input type="radio"/> B. BTM |
| <input type="radio"/> C. TBM | <input type="radio"/> D. BMT |

If 'BET' means 'EHW', then 'FOR' means

Please mark (✓) for the correct answer.

- |                              |                              |
|------------------------------|------------------------------|
| <input type="radio"/> A. RU  | <input type="radio"/> B. RIU |
| <input type="radio"/> C. IRU | <input type="radio"/> D. URN |

In each of the following series, the order of the letter/letters, number/numbers, then find the given options select the one which will complete the given series.

**AZ, BY, CX, DW, ?**

Please mark (✓) for the correct answer.

- |                             |                             |
|-----------------------------|-----------------------------|
| <input type="radio"/> A. VE | <input type="radio"/> B. EV |
| <input type="radio"/> C. FU | <input type="radio"/> D. UF |

**EG, HJ, ?, NP**

Please mark (✓) for the correct answer.

- |                             |                             |
|-----------------------------|-----------------------------|
| <input type="radio"/> A. MK | <input type="radio"/> B. NK |
| <input type="radio"/> C. KM | <input type="radio"/> D. LK |

**Question: 94 of 125**

QID: 4580

Marks: 2

**A1, E5, I9, O15, ?**

Please mark (✓) for the correct answer.

☐ A. U21☐ B. V22☐ C. U20☐ D. V19**Question: 95 of 125**

QID: 4581

Marks: 2

**OA, OAAA, OOOAAA, ?**

Please mark (✓) for the correct answer.

☐ A. OOOOAAAA☐ B. OOOAAAA☐ C. OOOOAAA☐ D. OOOAAAAA**Question: 96 of 125**

QID: 4582

Marks: 2

**1, 3, 5, 7, 9, ?**

Please mark (✓) for the correct answer.

☐ A. 13☐ B. 8☐ C. 11☐ D. 12**Question: 97 of 125**

QID: 4583

Marks: 2

Which of the following will come in place of the question mark (?) in the given series.

**UVW : RST :: MNO : ?**

Please mark (✓) for the correct answer.

☐ A. JKL☐ B. LKJ☐ C. ILK☐ D. KJL**Question: 98 of 125**

QID: 4584

Marks: 2

**AB : FG :: RS : ?**

Please mark (✓) for the correct answer.

☐ A. XY☐ B. XV☐ C. XW☐ D. WX

LOVE : EVOL :: HARD : ?

Please mark (✓) for the correct answer.

- ☐ A. ARDH ☐ B. DRAH  
☐ C. HADR ☐ D. ARHD

Question: 100 of 125

QID: 4586

Marks: 2

U : 441 :: K : ?

Please mark (✓) for the correct answer.

- ☐ A. 144 ☐ B. 961  
☐ C. 121 ☐ D. 111

Question: 101 of 125

QID: 4478

Marks: 2

Spell the word correctly.

Relea .....

Please mark (✓) for the correct answer.

- ☐ A. se ☐ B. ce  
☐ C. see ☐ D. cee

Question: 102 of 125

QID: 4479

Marks: 2

Spell the word correctly.

Remem .....

Please mark (✓) for the correct answer.

- ☐ A. beir ☐ B. ber  
☐ C. bier ☐ D. bere

Question: 103 of 125

QID: 4480

Marks: 2

Spell the word correctly.

Purc .....

Please mark (✓) for the correct answer.

- ☐ A. hace ☐ B. hace  
☐ C. hase ☐ D. hase

Spell the word correctly.

Musi .....

Please mark (✓) for the correct answer.

☐ A. en

☐ B. ean

☐ C. aen

☐ D. cian

Spell the word correctly.

Ser .....

Please mark (✓) for the correct answer.

☐ A. vant

☐ B. vent

☐ C. vante

☐ D. vente

**Read the following passage and answer the questions.**

The National Cadet Corps (NCC) was launched in a small way in 1948 in India with a target of enrolling 167500 cadets. Today, it is the foremost voluntary youth organisation in the country, with its authorised strength numbering over 11 lakhs. The NCC has a four-tier administrative structure. The Directorate General NCC, situated in New Delhi, is the Headquarters of the NCC. This organisation, headed by a General Officer of the rank of Lt Gen, coordinates various activities of NCC throughout the country. The state-level administration of the NCC is coordinated by 16 directorates who look after the NCC activities in one or more states or Union Territory Administrations, depending upon the strength of the cadets. The directorates have 91 Group Headquarters and 756 Units providing NCC coverage to 6554 schools and 3658 colleges under the jurisdiction of 117 universities of the country. The NCC has three divisions, namely the Senior Division, the Junior Division and the Girls Division. The Senior and Junior Divisions have three wings namely the Army, the Navy and the Air Force.

**In which year was the NCC launched?**

Please mark (✓) for the correct answer.

☐ A. 1947

☐ B. 1948

☐ C. 1949

☐ D. 1950

**Read the following passage and answer the questions.**

The National Cadet Corps (NCC) was launched in a small way in 1948 in India with a target of enrolling 167500 cadets. Today, it is the foremost voluntary youth organisation in the country, with its authorised strength numbering over 11 lakhs. The NCC has a four-tier administrative structure. The Directorate General NCC, situated in New Delhi, is the Headquarters of the NCC. This organisation, headed by a General Officer of the rank of Lt Gen, coordinates various activities of NCC throughout the country. The state-level administration of the NCC is coordinated by 16 directorates who look after the NCC activities in one or more states or Union Territory Administrations, depending upon the strength of the cadets. The directorates have 91 Group Headquarters and 756 Units providing NCC coverage to 6554 schools and 3658 colleges under the jurisdiction of 117 universities of the country. The NCC has three divisions, namely the Senior Division, the Junior Division and the Girls Division. The Senior and Junior Divisions have three wings namely the Army, the Navy and the Air Force.

**What is the present strength of the NCC?**

Please mark (✓) for the correct answer.

- ☐ A. Over 9 Lakh ☐ B. Over 10 Lakh
- ☐ C. Over 11 Lakh ☐ D. Over 12 Lakh

**Question: 108 of 125**

QID: 4485

Marks: 2

**Read the following passage and answer the questions.**

The National Cadet Corps (NCC) was launched in a small way in 1948 in India with a target of enrolling 167500 cadets. Today, it is the foremost voluntary youth organisation in the country, with its authorised strength numbering over 11 lakhs. The NCC has a four-tier administrative structure. The Directorate General NCC, situated in New Delhi, is the Headquarters of the NCC. This organisation, headed by a General Officer of the rank of Lt Gen, coordinates various activities of NCC throughout the country. The state-level administration of the NCC is coordinated by 16 directorates who look after the NCC activities in one or more states or Union Territory Administrations, depending upon the strength of the cadets. The directorates have 91 Group Headquarters and 756 Units providing NCC coverage to 6554 schools and 3658 colleges under the jurisdiction of 117 universities of the country. The NCC has three divisions, namely the Senior Division, the Junior Division and the Girls Division. The Senior and Junior Divisions have three wings namely the Army, the Navy and the Air Force.

**Where is the Headquarters of the NCC located?**

Please mark (✓) for the correct answer.

- ☐ A. Kolkata ☐ B. Mumbai
- ☐ C. Chennai ☐ D. New Delhi

**Question: 109 of 125**

QID: 4486

Marks: 2

**Read the following passage and answer the questions.**

The National Cadet Corps (NCC) was launched in a small way in 1948 in India with a target of enrolling 167500 cadets. Today, it is the foremost voluntary youth organisation in the country, with its authorised strength numbering over 11 lakhs. The NCC has a four-tier administrative structure. The Directorate General NCC, situated in New Delhi, is the Headquarters of the NCC. This organisation, headed by a General Officer of the rank of Lt Gen, coordinates various activities of NCC throughout the country. The state-level administration of the NCC is coordinated by 16 directorates who look after the NCC activities in one or more states or Union Territory Administrations, depending upon the strength of the cadets. The directorates have 91 Group Headquarters and 756 Units providing NCC coverage to 6554 schools and 3658 colleges under the jurisdiction of 117 universities of the country. The NCC has three divisions, namely the Senior Division, the Junior Division and the Girls Division. The Senior and Junior Divisions have three wings namely the Army, the Navy and the Air Force.

**Which of these doesn't belong to NCC?**

Please mark (✓) for the correct answer.

- ☐ A. Senior Division ☐ B. Junior Division
- ☐ C. Girls Division ☐ D. None of these

**Read the following passage and answer the questions.**

The National Cadet Corps (NCC) was launched in a small way in 1948 in India with a target of enrolling 167500 cadets. Today, it is the foremost voluntary youth organisation in the country, with its authorised strength numbering over 11 lakhs. The NCC has a four-tier administrative structure. The Directorate General NCC, situated in New Delhi, is the Headquarters of the NCC. This organisation, headed by a General Officer of the rank of Lt Gen, coordinates various activities of NCC throughout the country. The state-level administration of the NCC is coordinated by 16 directorates who look after the NCC activities in one or more states or Union Territory Administrations, depending upon the strength of the cadets. The directorates have 91 Group Headquarters and 756 Units providing NCC coverage to 6554 schools and 3658 colleges under the jurisdiction of 117 universities of the country. The NCC has three divisions, namely the Senior Division, the Junior Division and the Girls Division. The Senior and Junior Divisions have three wings namely the Army, the Navy and the Air Force.

**NCC is**

Please mark (✓) for the correct answer.

- |   |  |
|---|--|
| <input type="radio"/> A. a voluntary youth organisation | <input type="radio"/> B. a sports group    |
| <input type="radio"/> C. a group for promoting health   | <input type="radio"/> D. None of the above |

**Question: 111 of 125**

QID: 4488

Marks: 2

The boy ..... playing football.

Please mark (✓) for the correct answer.

- |                               |                              |
|-------------------------------|------------------------------|
| <input type="radio"/> A. are  | <input type="radio"/> B. is  |
| <input type="radio"/> C. were | <input type="radio"/> D. has |

**Question: 112 of 125**

QID: 4489

Marks: 2

Students ..... working hard.

Please mark (✓) for the correct answer.

- |                              |                              |
|------------------------------|------------------------------|
| <input type="radio"/> A. is  | <input type="radio"/> B. was |
| <input type="radio"/> C. are | <input type="radio"/> D. has |

**Question: 113 of 125**

QID: 4490

Marks: 2

..... policeman ran after the thief.

Please mark (✓) for the correct answer.

- |                              |                                     |
|------------------------------|-------------------------------------|
| <input type="radio"/> A. The | <input type="radio"/> B. a          |
| <input type="radio"/> C. An  | <input type="radio"/> D. No article |



**Question: 114 of 125**

QID: 4491

Marks: 2

The teacher ..... punished him.

Please mark (✓) for the correct answer.

- ☐ A. was                      ☐ B. has
- ☐ C. is                         ☐ D. are

**Question: 115 of 125**

QID: 4492

Marks: 2

The ox has eaten the .....

Please mark (✓) for the correct answer.

- ☐ A. grasses                      ☐ B. many grass
- ☐ C. grass                        ☐ D. grazing

**Question: 116 of 125**

QID: 4493

Marks: 2

A light rain ..... last night.

Please mark (✓) for the correct answer.

- ☐ A. fall                         ☐ B. has fallen
- ☐ C. had fallen                ☐ D. fell

**Question: 117 of 125**

QID: 4494

Marks: 2

The clock stopped ..... morning.

Please mark (✓) for the correct answer.

- ☐ A. this                         ☐ B. these
- ☐ C. then                        ☐ D. thus

**Question: 118 of 125**

QID: 4495

Marks: 2

Donkeys ..... braying in the ground.

Please mark (✓) for the correct answer.

- ☐ A. are                         ☐ B. has
- ☐ C. have                       ☐ D. is

**Question: 119 of 125**

QID: 4496

Marks: 2

Some boys ..... helping the wounded man.

Please mark (✓) for the correct answer.

- ☐ A. have                      ☐ B. were
- ☐ C. was                        ☐ D. had

**Question: 120 of 125**

QID: 4497

Marks: 2

A boy ..... my shirt.

Please mark (✓) for the correct answer.

- ☐ A. has stole                      ☐ B. have stolen
- ☐ C. has stolen                    ☐ D. is stolen

**Question: 121 of 125**

QID: 4498

Marks: 2

He is a ..... servant.

Please mark (✓) for the correct answer.

- ☐ A. good                        ☐ B. better
- ☐ C. best                         ☐ D. more good

**Question: 122 of 125**

QID: 4499

Marks: 2

She loves me ..... much.

Please mark (✓) for the correct answer.

- ☐ A. too                         ☐ B. very
- ☐ C. little                      ☐ D. few

**Question: 123 of 125**

QID: 4500

Marks: 2

I ..... sold my TV.

Please mark (✓) for the correct answer.

- ☐ A. am                         ☐ B. was
- ☐ C. have                      ☐ D. can

People will forget .....

Please mark (✓) for the correct answer.


- ☐ A. she ☐ B. he
- ☐ C. they ☐ D. it

..... police arrested him.

Please mark (✓) for the correct answer.

- ☐ A. The ☐ B. A
- ☐ C. An ☐ D. Any

--- END OF QUESTION PAPER ---



## Answer Key

No	Question Type	QID	Correct Answer
Question - 1	Multiple Choice (Radiobutton)	4628	B
Question - 2	Multiple Choice (Radiobutton)	4629	A
Question - 3	Multiple Choice (Radiobutton)	4630	D
Question - 4	Multiple Choice (Radiobutton)	4631	C
Question - 5	Multiple Choice (Radiobutton)	4632	B
Question - 6	Multiple Choice (Radiobutton)	4633	A
Question - 7	Multiple Choice (Radiobutton)	4634	B
Question - 8	Multiple Choice (Radiobutton)	4635	C
Question - 9	Multiple Choice (Radiobutton)	4636	D
Question - 10	Multiple Choice (Radiobutton)	4637	A
Question - 11	Multiple Choice (Radiobutton)	4638	B
Question - 12	Multiple Choice (Radiobutton)	4639	D
Question - 13	Multiple Choice (Radiobutton)	4640	C
Question - 14	Multiple Choice (Radiobutton)	4641	B
Question - 15	Multiple Choice (Radiobutton)	4642	A
Question - 16	Multiple Choice (Radiobutton)	4643	C
Question - 17	Multiple Choice (Radiobutton)	4644	B
Question - 18	Multiple Choice (Radiobutton)	4645	D
Question - 19	Multiple Choice (Radiobutton)	4646	B
Question - 20	Multiple Choice (Radiobutton)	4647	A
Question - 21	Multiple Choice (Radiobutton)	4648	D
Question - 22	Multiple Choice (Radiobutton)	4649	B
Question - 23	Multiple Choice (Radiobutton)	4650	C
Question - 24	Multiple Choice (Radiobutton)	4651	D
Question - 25	Multiple Choice (Radiobutton)	4652	B
Question - 26	Multiple Choice (Radiobutton)	4653	A
Question - 27	Multiple Choice (Radiobutton)	4654	C
Question - 28	Multiple Choice (Radiobutton)	4655	D
Question - 29	Multiple Choice (Radiobutton)	4656	A
Question - 30	Multiple Choice (Radiobutton)	4657	B
Question - 31	Multiple Choice (Radiobutton)	4658	A
Question - 32	Multiple Choice (Radiobutton)	4659	C
Question - 33	Multiple Choice (Radiobutton)	4660	D
Question - 34	Multiple Choice (Radiobutton)	4661	A
Question - 35	Multiple Choice (Radiobutton)	4662	C
Question - 36	Multiple Choice (Radiobutton)	4663	B
Question - 37	Multiple Choice (Radiobutton)	4664	A
Question - 38	Multiple Choice (Radiobutton)	4665	C
Question - 39	Multiple Choice (Radiobutton)	4666	D
Question - 40	Multiple Choice (Radiobutton)	4667	A
Question - 41	Multiple Choice (Radiobutton)	4668	C
Question - 42	Multiple Choice (Radiobutton)	4669	A

No	Question Type	QID	Correct Answer
Question - 43	Multiple Choice (Radiobutton)	4670	B
Question - 44	Multiple Choice (Radiobutton)	4671	A
Question - 45	Multiple Choice (Radiobutton)	4672	A
Question - 46	Multiple Choice (Radiobutton)	4673	C
Question - 47	Multiple Choice (Radiobutton)	4674	C
Question - 48	Multiple Choice (Radiobutton)	4675	C
Question - 49	Multiple Choice (Radiobutton)	4676	A
Question - 50	Multiple Choice (Radiobutton)	4677	A
Question - 51	Multiple Choice (Radiobutton)	4544	A
Question - 52	Multiple Choice (Radiobutton)	4545	C
Question - 53	Multiple Choice (Radiobutton)	4546	B
Question - 54	Multiple Choice (Radiobutton)	4547	A
Question - 55	Multiple Choice (Radiobutton)	4548	B
Question - 56	Multiple Choice (Radiobutton)	4549	C
Question - 57	Multiple Choice (Radiobutton)	4550	A
Question - 58	Multiple Choice (Radiobutton)	4551	D
Question - 59	Multiple Choice (Radiobutton)	4552	D
Question - 60	Multiple Choice (Radiobutton)	4528	A
Question - 61	Multiple Choice (Radiobutton)	4529	D
Question - 62	Multiple Choice (Radiobutton)	4530	D
Question - 63	Multiple Choice (Radiobutton)	4531	B
Question - 64	Multiple Choice (Radiobutton)	4532	C
Question - 65	Multiple Choice (Radiobutton)	4533	A
Question - 66	Multiple Choice (Radiobutton)	4534	A
Question - 67	Multiple Choice (Radiobutton)	4535	B
Question - 68	Multiple Choice (Radiobutton)	4536	D
Question - 69	Multiple Choice (Radiobutton)	4537	A
Question - 70	Multiple Choice (Radiobutton)	4538	A
Question - 71	Multiple Choice (Radiobutton)	4539	C
Question - 72	Multiple Choice (Radiobutton)	4540	D
Question - 73	Multiple Choice (Radiobutton)	4541	C
Question - 74	Multiple Choice (Radiobutton)	4542	B
Question - 75	Multiple Choice (Radiobutton)	4543	C
Question - 76	Multiple Choice (Radiobutton)	4587	B
Question - 77	Multiple Choice (Radiobutton)	4588	A
Question - 78	Multiple Choice (Radiobutton)	4589	D
Question - 79	Multiple Choice (Radiobutton)	4590	D
Question - 80	Multiple Choice (Radiobutton)	4591	D
Question - 81	Multiple Choice (Radiobutton)	4592	D
Question - 82	Multiple Choice (Radiobutton)	4593	A
Question - 83	Multiple Choice (Radiobutton)	4594	D
Question - 84	Multiple Choice (Radiobutton)	4595	D
Question - 85	Multiple Choice (Radiobutton)	4596	A
Question - 86	Multiple Choice (Radiobutton)	4597	B
Question - 87	Multiple Choice (Radiobutton)	4598	C
Question - 88	Multiple Choice (Radiobutton)	4599	D



No	Question Type	QID	Correct Answer
Question - 89	Multiple Choice (Radiobutton)	4600	B
Question - 90	Multiple Choice (Radiobutton)	4601	A
Question - 91	Multiple Choice (Radiobutton)	4602	C
Question - 92	Multiple Choice (Radiobutton)	4578	B
Question - 93	Multiple Choice (Radiobutton)	4579	C
Question - 94	Multiple Choice (Radiobutton)	4580	A
Question - 95	Multiple Choice (Radiobutton)	4581	D
Question - 96	Multiple Choice (Radiobutton)	4582	C
Question - 97	Multiple Choice (Radiobutton)	4583	A
Question - 98	Multiple Choice (Radiobutton)	4584	D
Question - 99	Multiple Choice (Radiobutton)	4585	B
Question - 100	Multiple Choice (Radiobutton)	4586	C
Question - 101	Multiple Choice (Radiobutton)	4478	A
Question - 102	Multiple Choice (Radiobutton)	4479	B
Question - 103	Multiple Choice (Radiobutton)	4480	C
Question - 104	Multiple Choice (Radiobutton)	4481	D
Question - 105	Multiple Choice (Radiobutton)	4482	A
Question - 106	Multiple Choice (Radiobutton)	4483	B
Question - 107	Multiple Choice (Radiobutton)	4484	C
Question - 108	Multiple Choice (Radiobutton)	4485	D
Question - 109	Multiple Choice (Radiobutton)	4486	D
Question - 110	Multiple Choice (Radiobutton)	4487	A
Question - 111	Multiple Choice (Radiobutton)	4488	B
Question - 112	Multiple Choice (Radiobutton)	4489	C
Question - 113	Multiple Choice (Radiobutton)	4490	A
Question - 114	Multiple Choice (Radiobutton)	4491	B
Question - 115	Multiple Choice (Radiobutton)	4492	C
Question - 116	Multiple Choice (Radiobutton)	4493	D
Question - 117	Multiple Choice (Radiobutton)	4494	A
Question - 118	Multiple Choice (Radiobutton)	4495	A
Question - 119	Multiple Choice (Radiobutton)	4496	B
Question - 120	Multiple Choice (Radiobutton)	4497	C
Question - 121	Multiple Choice (Radiobutton)	4498	A
Question - 122	Multiple Choice (Radiobutton)	4499	B
Question - 123	Multiple Choice (Radiobutton)	4500	C
Question - 124	Multiple Choice (Radiobutton)	4501	D
Question - 125	Multiple Choice (Radiobutton)	4502	A

--- END OF ANSWER KEY ---