



Studybox Doon

AISSEE_Class6th_MT8_studyboxdoon.com

Exam ID: 151

Name: _____

Date: _____

Exam Instructions

1. The timer has been set for the exam, and a countdown will display the remaining time. When the timer runs out, the exam will end automatically. No further action will be required after that.
2. You can flag any question that you want.
3. If you don't want to submit any of your provided answers, you can clear them.
4. If you choose to drop this exam, it will not be submitted, and no result will be generated.
5. Once you finish the exam, you cannot resume it.

Question: 1 of 125

QID: 6045

Marks: 3

The simplification of $1 + \frac{1}{10} + \frac{1}{100} + \frac{1}{1000}$ in decimal form given:

Please mark (✓) for the correct answer.

- ☐ A. 1.001 ☐ B. 1.111
☐ C. 1.001 ☐ D. 0.111

Question: 2 of 125

QID: 6046

Marks: 3

If on selling an article for ₹ 264, there is a profit of ₹ 88, what is the profit per cent?

Please mark (✓) for the correct answer.

- ☐ A. 40% ☐ B. 45%
☐ C. 50% ☐ D. 25%

Question: 3 of 125

QID: 6047

Marks: 3

On selling 17 balls at ₹ 720, there is a loss equal to the cost price of 5 balls. The cost price of one ball is

Please mark (✓) for the correct answer.

- ☐ A. ₹ 50 ☐ B. ₹ 52
☐ C. ₹ 55 ☐ D. ₹ 60

Question: 4 of 125

QID: 6048

Marks: 3

If $A : B = \frac{1}{2} : \frac{3}{8}$ and $B : C = \frac{1}{3} : \frac{5}{9}$, then $A : C = ?$

Please mark (✓) for the correct answer.

- ☐ A. 4:5 ☐ B. 5:4
- ☐ C. 3:7 ☐ D. 7:3

Question: 5 of 125

QID: 6049

Marks: 3

The average age of 3 boys is 25 yr and their ages are in the ratio 3:5:7. The age of the youngest boy is

Please mark (✓) for the correct answer.

- ☐ A. 12 yr ☐ B. 15 yr
- ☐ C. 16 yr ☐ D. 17 yr

Question: 6 of 125

QID: 6050

Marks: 3

A can do a certain work in 20 days while B can do it in 30 days. What part of work will both together do in 4 days?

Please mark (✓) for the correct answer.

- ☐ A. 1/4 ☐ B. 1/2
- ☐ C. 1/3 ☐ D. 2/3

Question: 7 of 125

QID: 6051

Marks: 3

36 men together can build a bridge in 20 days. How many men will build the same bridge in 12 days?

Please mark (✓) for the correct answer.

- ☐ A. 40 ☐ B. 45
- ☐ C. 50 ☐ D. 60

Question: 8 of 125

QID: 6052

Marks: 3

A boy takes one round of a square field of side 27 m in 9 sec. His speed is

Please mark (✓) for the correct answer.

- ☐ A. 12 m/sec ☐ B. 8 m/sec
- ☐ C. 1.2 km/h ☐ D. 0.8 km/h

Question: 9 of 125

QID: 6053

Marks: 3

What will be the simple interest on a sum of ₹ 1600 at the rate of 5% p.a. in 4 yr?

Please mark (✓) for the correct answer.

- ☐ A. ₹ 300 ☐ B. ₹ 320
- ☐ C. ₹ 340 ☐ D. ₹ 280

Question: 10 of 125

QID: 6054

Marks: 3

What will be the area of a right-angled triangle whose base is 12 cm and height is 15 cm?

Please mark (✓) for the correct answer.

- ☐ A. 80 cm² ☐ B. 60 cm²
- ☐ C. 90 cm² ☐ D. 75 cm²

Question: 11 of 125

QID: 6055

Marks: 3

If the ratio of areas of two squares is 225: 256, then the ratio of their perimeters is

Please mark (✓) for the correct answer.

- ☐ A. 3/4 ☐ B. 15/17
- ☐ C. 12/16 ☐ D. 15/16

Question: 12 of 125

QID: 6056

Marks: 3

In a quadrilateral ABCD, $\angle A = 95^\circ$, $\angle B = 85^\circ$ and $\angle C = 115^\circ$, then $\angle D = ?$

Please mark (✓) for the correct answer.

- ☐ A. 65° ☐ B. 75°
- ☐ C. 60° ☐ D. 80°

Question: 13 of 125

QID: 6057

Marks: 3

A train leaves station A at 9:30 am and reaches the station B at 3:25 pm. The time taken by the train is

Please mark (✓) for the correct answer.

- ☐ A. 4 h 55 min ☐ B. 5 h 55 min
- ☐ C. 5 h 45 min ☐ D. 6 h 55 min

Question: 14 of 125

QID: 6008

Marks: 3

What will be the HCF of 48, 144 and 576?

Please mark (✓) for the correct answer.

- ☐ A. 576 ☐ B. 144
- ☐ C. 48 ☐ D. 1

Question: 15 of 125

QID: 6009

Marks: 3

Simplify $(0.50+0.15\div0.05) \times 2/7$

Please mark (✓) for the correct answer.

- ☐ A. 1 ☐ B. 0
- ☐ C. 3 ☐ D. 5

Question: 16 of 125

QID: 6010

Marks: 3

The speed of 2 km/h is equal to:

Please mark (✓) for the correct answer.

- ☐ A. $\frac{1000}{3600}m/sec$ ☐ B. $\frac{2000}{3600}m/sec$
- ☐ C. $3600m/sec$ ☐ D. $2000m/sec$

Question: 17 of 125

QID: 6011

Marks: 3

After buying a ceiling fan for ₹900, one sells it with a profit of 18%. Then find the selling price:

Please mark (✓) for the correct answer.

- ☐ A. ₹960 ☐ B. ₹1062
- ☐ C. ₹1080 ☐ D. ₹1100

Question: 18 of 125

QID: 6012

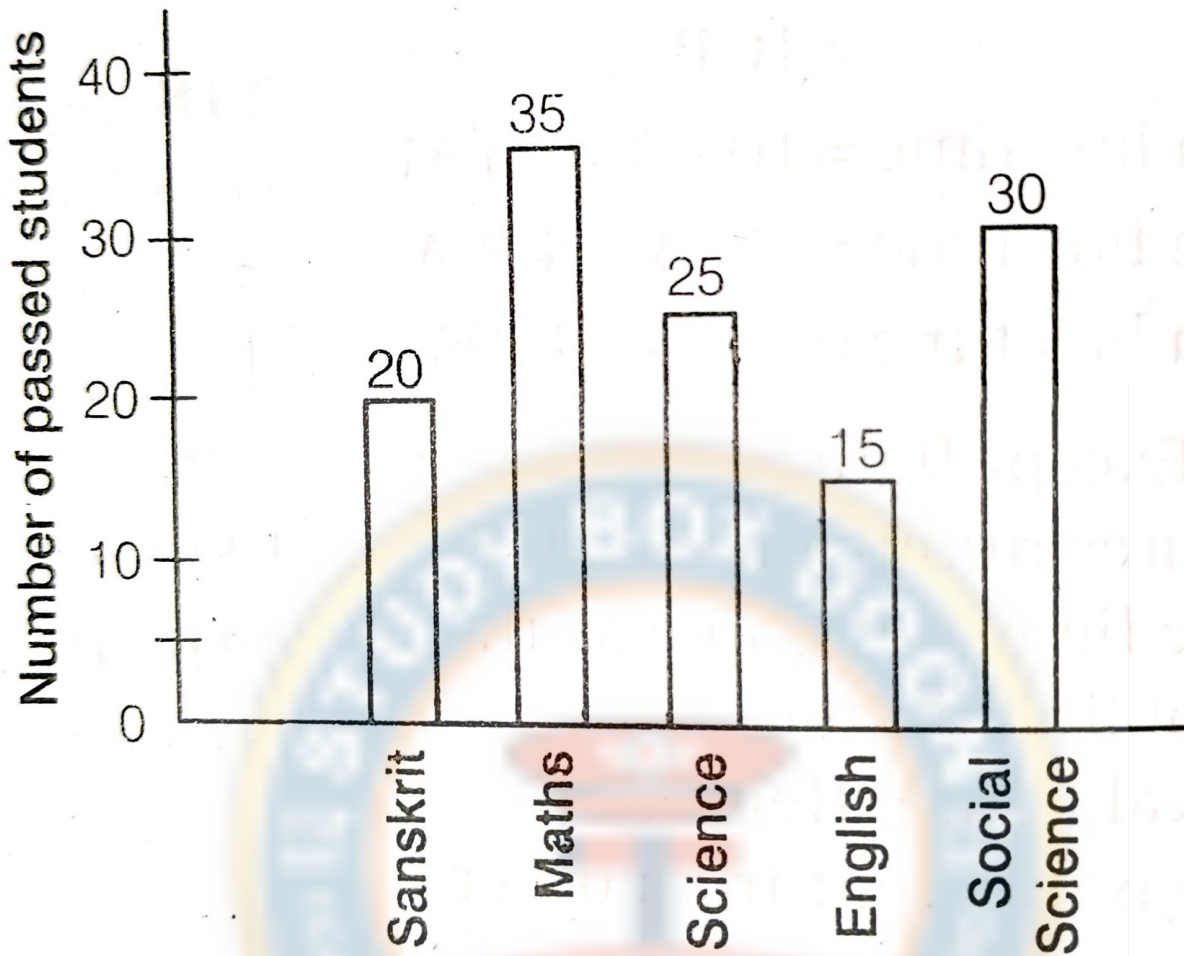
Marks: 3

Sampurna Kranti Express departs from Patna at 5:50 PM and arrives in New Delhi at 8:15 AM the next day. What is the total time of the journey?

Please mark (✓) for the correct answer.

- ☐ A. 12 h 25 min ☐ B. 14 h 35 min
- ☐ C. 14 h 25 min ☐ D. 12 h 35 min

In different subjects, the number of passed students in a class of 40 students:



To study the graph, say what percentage of students in English has passed?

Please mark (✓) for the correct answer.

- ☐ A. 36.5% ☐ B. 37.5%
☐ C. 36% ☐ D. 37%

Question: 20 of 125

QID: 6014

Marks: 3

The average age of a man and his son is 48 years. The ratio of their ages is 11 : 5 respectively. What will be the ratio of their ages after six years?

Please mark (✓) for the correct answer.

- ☐ A. 6 : 5 ☐ B. 5 : 3
☐ C. 4 : 3 ☐ D. 2 : 1

Question: 21 of 125

QID: 6015

Marks: 3

What will be the sum of 4006, 4055, 4400, and 4444?

Please mark (✓) for the correct answer.

☐ A. 52209☐ B. 52409☐ C. 16905☐ D. 52309**Question: 22 of 125**

QID: 6016

Marks: 3

In which number quotient is 23 and remainder is 7, when divided by 177?

Please mark (✓) for the correct answer.

☐ A. 368☐ B. 328☐ C. 358☐ D. 4078**Question: 23 of 125**

QID: 6017

Marks: 3

The value of $\frac{1}{125}$ is:

Please mark (✓) for the correct answer.

☐ A. 0.8☐ B. 0.08☐ C. 0.008☐ D. 0.0008**Question: 24 of 125**

QID: 6018

Marks: 3

Sita finishes a work in 20 days. Sita and Gita finish the same work in 15 days. In how many days will Gita alone complete the same work?

Please mark (✓) for the correct answer.

☐ A. 60☐ B. 50☐ C. 45☐ D. 40**Question: 25 of 125**

QID: 6019

Marks: 3

Which of the following is the biggest number?

8.4650, 8.6450, 8.5604, 8.0654

Please mark (✓) for the correct answer.

☐ A. 8.4650☐ B. 8.6450☐ C. 8.5604☐ D. 8.0654

Question: 26 of 125

QID: 6020

Marks: 3

What will be the sum of 40.06, 40.55, 440.04 and 4.44?

Please mark (✓) for the correct answer.

- ☐ A. 522.09 ☐ B. 524.09
- ☐ C. 525.09 ☐ D. 523.09

Question: 27 of 125

QID: 6021

Marks: 3

What must be added to the sum of 5618 and 3845, so that the resulting sum is 12850?

Please mark (✓) for the correct answer.

- ☐ A. 3387 ☐ B. 3247
- ☐ C. 3347 ☐ D. 3267

Question: 28 of 125

QID: 6022

Marks: 3

In a park, the total number of plants is 15 in a row and total number of rows is 25. Total number of plants will be:

Please mark (✓) for the correct answer.

- ☐ A. 275 ☐ B. 325
- ☐ C. 375 ☐ D. 400

Question: 29 of 125

QID: 6023

Marks: 3

$$18 - [15 - \{9 \div (27 \div 3 \times 2 - 15)\}] = ?$$

Please mark (✓) for the correct answer.

- ☐ A. 14 ☐ B. 9
- ☐ C. 6 ☐ D. 5

Question: 30 of 125

QID: 6024

Marks: 3

If the product of three numbers is 7980 and the product of any two numbers is 228, the third number will be

Please mark (✓) for the correct answer.

- ☐ A. 25 ☐ B. 15
- ☐ C. 16 ☐ D. 35

Question: 31 of 125

QID: 6025

Marks: 3

In a school 200 boys and 160 girls study. The percentage of girls will be

Please mark (✓) for the correct answer.

☐ A. $44\frac{4}{9}\%$ ☐ B. $44\frac{2}{9}\%$ ☐ C. $45\frac{2}{9}\%$ ☐ D. $45\frac{4}{9}\%$

Question: 32 of 125

QID: 6026

Marks: 3

Anuradha has some savings. She adds ₹60.65 to her savings and purchases 4 video games. If the cost of a video game is ₹42.25, her total saving equals to

Please mark (✓) for the correct answer.

☐ A. ₹ 109.35☐ B. ₹ 108.65☐ C. ₹ 110.35☐ D. ₹ 108.35

Question: 33 of 125

QID: 6027

Marks: 3

Mohan reaches his school in 75 min by cycling at the speed of 16 km/h. How far is his school from his home?

Please mark (✓) for the correct answer.

☐ A. 16 km☐ B. 20 km☐ C. 25 km☐ D. 26 km

Question: 34 of 125

QID: 6028

Marks: 3

The smallest natural number is

Please mark (✓) for the correct answer.

☐ A. 0☐ B. 1☐ C. 2☐ D. None of these

Question: 35 of 125

QID: 6029

Marks: 3

If the diagonal of a square is $7\sqrt{2}$ cm, what will be its perimeter?

Please mark (✓) for the correct answer.

☐ A. 49 cm☐ B. 45 cm☐ C. 28 cm☐ D. 32 cm

Question: 36 of 125

QID: 6030

Marks: 3

The length of a room is 14 m and its breadth is 10 m. How much will be the expenditure in putting mat on its floor at the rate of 40 paisa/m²?

Please mark (✓) for the correct answer.

- ☐ A. ₹ 28 ☐ B. ₹ 30
- ☐ C. ₹ 56 ☐ D. ₹ 40

Question: 37 of 125

QID: 6031

Marks: 3

The volume of a tank is 50000 m³. If its length is 10 m and width is 5 m, its depth will be

Please mark (✓) for the correct answer.

- ☐ A. 300 m ☐ B. 2000 m
- ☐ C. 1000 m ☐ D. 500 m

Question: 38 of 125

QID: 6032

Marks: 3

What will be the next term of the series? 5, 10, 30, 120 ...

Please mark (✓) for the correct answer.

- ☐ A. 600 ☐ B. 480
- ☐ C. 240 ☐ D. 150

Question: 39 of 125

QID: 6033

Marks: 3

The supplementary angle of 45° will be

Please mark (✓) for the correct answer.

- ☐ A. 45° ☐ B. 135°
- ☐ C. 145° ☐ D. 60°

Question: 40 of 125

QID: 6034

Marks: 3

The LCM of two numbers is 2225 and their HCF is 25. If one of the numbers is 625, the other number will be

Please mark (✓) for the correct answer.

- ☐ A. 81 ☐ B. 62
- ☐ C. 89 ☐ D. 79

Question: 41 of 125

QID: 6035

Marks: 3

A farmer plants 7396 trees in his garden. If he plants the number of trees in a row equal to the total number of rows, the number of trees in a row is equal to:

Please mark (✓) for the correct answer.

- ☐ A. 56 ☐ B. 66
☐ C. 76 ☐ D. 86

Question: 42 of 125

QID: 6036

Marks: 3

Five digits smallest number to be formed with the help of 7, 8, 2, 6 and 1 is:

Please mark (✓) for the correct answer.

- ☐ A. 12786 ☐ B. 12687
☐ C. 12678 ☐ D. 16278

Question: 43 of 125

QID: 6037

Marks: 3

$\sqrt{0.01} + \sqrt{0.09}$ is equal to:

Please mark (✓) for the correct answer.

- ☐ A. 1.03 ☐ B. 1
☐ C. 0 ☐ D. 0.4

Question: 44 of 125

QID: 6038

Marks: 3

11 ones + 11 tens + 11 hundred equals:

Please mark (✓) for the correct answer.

- ☐ A. 111111 ☐ B. 144
☐ C. 1221 ☐ D. 12321

Question: 45 of 125

QID: 6039

Marks: 3

Unit digit of product of first ten odd numbers is:

Please mark (✓) for the correct answer.

- ☐ A. 0 ☐ B. 10
☐ C. 3 ☐ D. 5

Question: 46 of 125

QID: 6040

Marks: 3

56% of a number is 1064. What is 38% of that number?

Please mark (✓) for the correct answer.

- ☐ A. 666 ☐ B. 722
- ☐ C. 856 ☐ D. 912

Question: 47 of 125

QID: 6041

Marks: 3

Two numbers are in the ratio 2:3. If 9 is added to each, they will be in the ratio 3:4. The numbers are:

Please mark (✓) for the correct answer.

- ☐ A. 12,28 ☐ B. 18,27
- ☐ C. 8,12 ☐ D. 10,15

Question: 48 of 125

QID: 6042

Marks: 3

If $1178 \times 34 = 6052$, what is $60.52 + 17.8$?

Please mark (✓) for the correct answer.

- ☐ A. 34 ☐ B. 78.32
- ☐ C. 0.34 ☐ D. 0.034

Question: 49 of 125

QID: 6043

Marks: 3

On simplifying $15 \times 4 - 10 + 5$, we get:

Please mark (✓) for the correct answer.

- ☐ A. 10 ☐ B. 30
- ☐ C. 55 ☐ D. 120

Question: 50 of 125

QID: 6044

Marks: 3

The number 66.0684, correct to the nearest ten is:

Please mark (✓) for the correct answer.

- ☐ A. 66.068 ☐ B. 66.07
- ☐ C. 66.1 ☐ D. 70

Question: 51 of 125

QID: 6100

Marks: 2

Is there a place I can find a delicious plate of salad?

Please mark (✓) for the correct answer.

- ☐ A. nowhere ☐ B. anywhere
- ☐ C. where ☐ D. there

Question: 52 of 125

QID: 6101

Marks: 2

I should see a doctor,?

Please mark (✓) for the correct answer.

- ☐ A. Should I ☐ B. shall I
- ☐ C. shan't I ☐ D. Shouldn't I

Question: 53 of 125

QID: 6102

Marks: 2

Find the homophone for the word 'Allowed'.

Please mark (✓) for the correct answer.

- ☐ A. Allow ☐ B. Aloud
- ☐ C. Applaud ☐ D. None of these

Question: 54 of 125

QID: 6103

Marks: 2

Choose the antonym for the word 'Tame'.

Please mark (✓) for the correct answer.

- ☐ A. Domestic ☐ B. Compliant
- ☐ C. Wild ☐ D. Beginner

Question: 55 of 125

QID: 6104

Marks: 2

A self-governing country or region is called

Please mark (✓) for the correct answer.

- ☐ A. Aristocracy ☐ B. Autonomy
- ☐ C. Democracy ☐ D. Neocracy

..... have no money at the moment. (Fill in with pronoun)

Please mark (✓) for the correct answer.

☐ A. Us

☐ B. Their

☐ C. Them

☐ D. I

Question: 57 of 125

QID: 6106

Marks: 2

Stay calm do your best. (Choose the conjunction)

Please mark (✓) for the correct answer.

☐ A. and

☐ B. for

☐ C. until

☐ D. otherwise

Question: 58 of 125

QID: 6083

Marks: 2

Read the passage given below and answer the questions that follow.

William Wordsworth, the famous British poet, was one of the most important poets of the Romantic Movement in English Literature. He was born on April 17, 1770 in the scenic region of North-West England called the Lake District. The beautiful landscapes of the region had an enduring influence on Wordsworth's imagination, creating in him a love for nature. This can be seen in most of his poems. Wordsworth lost his mother when he was eight and at the age of thirteen, his father. Of his four siblings, Wordsworth was most attached to his younger sister, Dorothy. Several of his poems are addressed to his beloved sister.

Wordsworth began attending St. John's College, Cambridge in 1787. He often spent his holidays on long walking tours, visiting places famous for the beauty of their landscape. In 1790, he took a nearly three-thousand-mile walking tour of Europe, during which he toured the Alps extensively and also visited nearby areas of France, Switzerland and Italy. The following year, he graduated from Cambridge without distinction. In 1843, Wordsworth was made the Poet Laureate of England. A poet laureate is the official poet of the King of England. By this time, Wordsworth was considered one of the greatest poets of his age. However, when his daughter Dora died in 1847, Wordsworth stopped writing poetry altogether. He died, three years later, on April 23, 1850. Wordsworth was one of the first poets to actively reflect on the beauty and glory of nature and the power of imagination. His poems continue to be read all over the world by children and adults alike.

What developed love for nature in Wordsworth?

Please mark (✓) for the correct answer.

☐ A. Beautiful landscapes

☐ B. St. John's College

☐ C. France

☐ D. His sister

Read the passage given below and answer the questions that follow.

William Wordsworth, the famous British poet, was one of the most important poets of the Romantic Movement in English Literature. He was born on April 17, 1770 in the scenic region of North-West England called the Lake District. The beautiful landscapes of the region had an enduring influence on Wordsworth's imagination, creating in him a love for nature. This can be seen in most of his poems. Wordsworth lost his mother when he was eight and at the age of thirteen, his father. Of his four siblings, Wordsworth was most attached to his younger sister, Dorothy. Several of his poems are addressed to his beloved sister.

Wordsworth began attending St. John's College, Cambridge in 1787. He often spent his holidays on long walking tours, visiting places famous for the beauty of their landscape. In 1790, he took a nearly three-thousand-mile walking tour of Europe, during which he toured the Alps extensively and also visited nearby areas of France, Switzerland and Italy. The following year, he graduated from Cambridge without distinction. In 1843, Wordsworth was made the Poet Laureate of England. A poet laureate is the official poet of the King of England. By this time, Wordsworth was considered one of the greatest poets of his age. However, when his daughter Dora died in 1847, Wordsworth stopped writing poetry altogether. He died, three years later, on April 23, 1850. Wordsworth was one of the first poets to actively reflect on the beauty and glory of nature and the power of imagination. His poems continue to be read all over the world by children and adults alike.

How did Wordsworth spend his holidays?

Please mark (✓) for the correct answer.

- ☐ A. On islands ☐ B. In Switzerland
- ☐ C. On long walking tours ☐ D. In Italy

Question: 60 of 125

QID: 6085

Marks: 2

Read the passage given below and answer the questions that follow.

William Wordsworth, the famous British poet, was one of the most important poets of the Romantic Movement in English Literature. He was born on April 17, 1770 in the scenic region of North-West England called the Lake District. The beautiful landscapes of the region had an enduring influence on Wordsworth's imagination, creating in him a love for nature. This can be seen in most of his poems. Wordsworth lost his mother when he was eight and at the age of thirteen, his father. Of his four siblings, Wordsworth was most attached to his younger sister, Dorothy. Several of his poems are addressed to his beloved sister.

Wordsworth began attending St. John's College, Cambridge in 1787. He often spent his holidays on long walking tours, visiting places famous for the beauty of their landscape. In 1790, he took a nearly three-thousand-mile walking tour of Europe, during which he toured the Alps extensively and also visited nearby areas of France, Switzerland and Italy. The following year, he graduated from Cambridge without distinction. In 1843, Wordsworth was made the Poet Laureate of England. A poet laureate is the official poet of the King of England. By this time, Wordsworth was considered one of the greatest poets of his age. However, when his daughter Dora died in 1847, Wordsworth stopped writing poetry altogether. He died, three years later, on April 23, 1850. Wordsworth was one of the first poets to actively reflect on the beauty and glory of nature and the power of imagination. His poems continue to be read all over the world by children and adults alike.

What position of honour was given to Wordsworth?

Please mark (✓) for the correct answer.

- ☐ A. Poet of King ☐ B. Noble Prize
- ☐ C. National Poet ☐ D. Poet Laureate of England

Read the passage given below and answer the questions that follow.

William Wordsworth, the famous British poet, was one of the most important poets of the Romantic Movement in English Literature. He was born on April 17, 1770 in the scenic region of North-West England called the Lake District. The beautiful landscapes of the region had an enduring influence on Wordsworth's imagination, creating in him a love for nature. This can be seen in most of his poems. Wordsworth lost his mother when he was eight and at the age of thirteen, his father. Of his four siblings, Wordsworth was most attached to his younger sister, Dorothy. Several of his poems are addressed to his beloved sister.

Wordsworth began attending St. John's College, Cambridge in 1787. He often spent his holidays on long walking tours, visiting places famous for the beauty of their landscape. In 1790, he took a nearly three-thousand-mile walking tour of Europe, during which he toured the Alps extensively and also visited nearby areas of France, Switzerland and Italy. The following year, he graduated from Cambridge without distinction. In 1843, Wordsworth was made the Poet Laureate of England. A poet laureate is the official poet of the King of England. By this time, Wordsworth was considered one of the greatest poets of his age. However, when his daughter Dora died in 1847, Wordsworth stopped writing poetry altogether. He died, three years later, on April 23, 1850. Wordsworth was one of the first poets to actively reflect on the beauty and glory of nature and the power of imagination. His poems continue to be read all over the world by children and adults alike.

When did Wordsworth's daughter die?

Please mark (✓) for the correct answer.

- ☐ A. 1847 ☐ B. 1834
☐ C. 1850 ☐ D. 1855

Question: 62 of 125

QID: 6087

Marks: 2

Read the passage given below and answer the questions that follow.

William Wordsworth, the famous British poet, was one of the most important poets of the Romantic Movement in English Literature. He was born on April 17, 1770 in the scenic region of North-West England called the Lake District. The beautiful landscapes of the region had an enduring influence on Wordsworth's imagination, creating in him a love for nature. This can be seen in most of his poems. Wordsworth lost his mother when he was eight and at the age of thirteen, his father. Of his four siblings, Wordsworth was most attached to his younger sister, Dorothy. Several of his poems are addressed to his beloved sister.

Wordsworth began attending St. John's College, Cambridge in 1787. He often spent his holidays on long walking tours, visiting places famous for the beauty of their landscape. In 1790, he took a nearly three-thousand-mile walking tour of Europe, during which he toured the Alps extensively and also visited nearby areas of France, Switzerland and Italy. The following year, he graduated from Cambridge without distinction. In 1843, Wordsworth was made the Poet Laureate of England. A poet laureate is the official poet of the King of England. By this time, Wordsworth was considered one of the greatest poets of his age. However, when his daughter Dora died in 1847, Wordsworth stopped writing poetry altogether. He died, three years later, on April 23, 1850. Wordsworth was one of the first poets to actively reflect on the beauty and glory of nature and the power of imagination. His poems continue to be read all over the world by children and adults alike.

Find words from the passage which mean the same as 'Renowned'.

Please mark (✓) for the correct answer.

- ☐ A. Enduring ☐ B. Famous
☐ C. Imagination ☐ D. Laureate

Rearrange the following words to make a meaningful sentence.

you/time/work/do/what/finish?

Please mark (✓) for the correct answer.

- ☐ A. What do you finish time work? ☐ B. What time do you finish work?
- ☐ C. Finish what time do you work? ☐ D. Work finish what time do you?

Choose the plural for 'Mouse.'

Please mark (✓) for the correct answer.

- ☐ A. Mouses ☐ B. Mouse
- ☐ C. Mice ☐ D. Mices

Choose the synonym for the word 'Polite'.

Please mark (✓) for the correct answer.

- ☐ A. Courteous ☐ B. Cheat
- ☐ C. Prompt ☐ D. Deceive

Choose the correctly spelt word.

Please mark (✓) for the correct answer.

- ☐ A. Conclusan ☐ B. Cautias
- ☐ C. Eminent ☐ D. Conversashan

Select the opposite gender of 'Witch.'

Please mark (✓) for the correct answer.

- ☐ A. He-witch ☐ B. Ghost
- ☐ C. Haunted ☐ D. Wizard

Question: 68 of 125

QID: 6093

Marks: 2

Choose the correct meaning of the given idiom.
To give someone a piece of mind.

Please mark (✓) for the correct answer.

- ☐ A. To praise
- ☐ B. To scold
- ☐ C. To admit
- ☐ D. To advise

Question: 69 of 125

QID: 6094

Marks: 2

Find the assertive sentence from the following.

Please mark (✓) for the correct answer.

- ☐ A. Where do you work?
- ☐ B. May God bless you!
- ☐ C. Please let me do my work.
- ☐ D. I have become a police officer.

Question: 70 of 125

QID: 6095

Marks: 2

Choose one word for the following
One who collects postage stamps

Please mark (✓) for the correct answer.

- ☐ A. Postman
- ☐ B. Philatelist
- ☐ C. Calligrapher
- ☐ D. Lexicographer

Question: 71 of 125

QID: 6096

Marks: 2

Fill in the blank by choosing the correct option.
..... you play basketball?

Please mark (✓) for the correct answer.

- ☐ A. Does
- ☐ B. Do
- ☐ C. Have
- ☐ D. Had

Question: 72 of 125

QID: 6097

Marks: 2

I hard during exams.

Please mark (✓) for the correct answer.

- ☐ A. am working
- ☐ B. work
- ☐ C. will be worked
- ☐ D. was worked

Question: 73 of 125

QID: 6098

Marks: 2

..... teacher teaches the classroom.

Please mark (✓) for the correct answer.

- ☐ A. The; on ☐ B. A; of
- ☐ C. The; in ☐ D. The; to

Question: 74 of 125

QID: 6099

Marks: 2

I am buying a pair of shoes.

Please mark (✓) for the correct answer.

- ☐ A. older ☐ B. new
- ☐ C. newer ☐ D. newest

Question: 75 of 125

QID: 6107

Marks: 2

Rearrange the following words to form a meaningful sentence.

do / speak / you / to / how / know / French

Please mark (✓) for the correct answer.

- ☐ A. Speak you French do to how know. ☐ B. Do you know how to speak French?
- ☐ C. Do know French how to speak you. ☐ D. French you know how to speak, do?

Question: 76 of 125

QID: 6058

Marks: 2

Arjuna Award is given for outstanding performance in the field of

Please mark (✓) for the correct answer.

- ☐ A. literature ☐ B. sports
- ☐ C. science ☐ D. cinema

Question: 77 of 125

QID: 6059

Marks: 2

India shares its land borders with how many countries?

Please mark (✓) for the correct answer.

- ☐ A. 5 ☐ B. 9
- ☐ C. 11 ☐ D. 7

Question: 78 of 125

QID: 6060

Marks: 2

Name the young ones of elephant.

Please mark (✓) for the correct answer.

- ☐ A. Cub ☐ B. Puppy
- ☐ C. Calf ☐ D. Fawn

Question: 79 of 125

QID: 6061

Marks: 2

Seismograph is an instrument to use for

Please mark (✓) for the correct answer.

- ☐ A. temperature ☐ B. solution
- ☐ C. blood pressure ☐ D. intensity of earthquake

Question: 80 of 125

QID: 6062

Marks: 2

Which is the largest wheat-producing state in India?

Please mark (✓) for the correct answer.

- ☐ A. Andhra Pradesh ☐ B. Uttar Pradesh
- ☐ C. Karnataka ☐ D. Madhya Pradesh

Question: 81 of 125

QID: 6063

Marks: 2

Who is popularly known as the Grand Old Man of India?

Please mark (✓) for the correct answer.

- ☐ A. Dadabhai Naoroji ☐ B. Gopal Krishna Gokhale
- ☐ C. Bal Gangadhar Tilak ☐ D. Mahadev Govind Ranade

Question: 82 of 125

QID: 6064

Marks: 2

The famous 'Ganga Sagar Mela', an annual fair is held in which state of India?

Please mark (✓) for the correct answer.

- ☐ A. Gujarat ☐ B. West Bengal
- ☐ C. Uttarakhand ☐ D. Uttar Pradesh

Question: 83 of 125

QID: 6065

Marks: 2

Who administers the oath of the President of India?

Please mark (✓) for the correct answer.

- | | |
|--|--|
| <input type="radio"/> A. Governor General of India | <input type="radio"/> B. Chief Justice of India |
| <input type="radio"/> C. Prime Minister of India | <input type="radio"/> D. Vice-President of India |

Question: 84 of 125

QID: 6066

Marks: 2

Which Sikh Guru initiated 'The Khalsa'?

Please mark (✓) for the correct answer.

- | | |
|---|--|
| <input type="radio"/> A. Guru Nanak Dev | <input type="radio"/> B. Guru Gobind Singh |
| <input type="radio"/> C. Guru Angad Dev | <input type="radio"/> D. Guru Tegh Bahadur |

Question: 85 of 125

QID: 6067

Marks: 2

Red data book contains data of which of the following species?

Please mark (✓) for the correct answer.

- | | |
|---|--|
| <input type="radio"/> A. Plant species | <input type="radio"/> B. Animal species |
| <input type="radio"/> C. Endangered species | <input type="radio"/> D. Extinct species |

Question: 86 of 125

QID: 6068

Marks: 2

What is the name of the acid present in an ant's sting?

Please mark (✓) for the correct answer.

- | | |
|--------------------------------------|--------------------------------------|
| <input type="radio"/> A. Acetic acid | <input type="radio"/> B. Citric acid |
| <input type="radio"/> C. Formic acid | <input type="radio"/> D. Lactic acid |

Question: 87 of 125

QID: 6069

Marks: 2

..... is the rearing of silkworms for the production of silk.

Please mark (✓) for the correct answer.

- | | |
|---------------------------------------|---------------------------------------|
| <input type="radio"/> A. Apiculture | <input type="radio"/> B. Sericulture |
| <input type="radio"/> C. Pisciculture | <input type="radio"/> D. Horticulture |

Question: 88 of 125

QID: 6070

Marks: 2

Microsoft Excel is also called

Please mark (✓) for the correct answer.

- ☐ A. Document ☐ B. Table
- ☐ C. Spreadsheet ☐ D. Label

Question: 89 of 125

QID: 6071

Marks: 2

Which of the following organs gets affected in Jaundice?

Please mark (✓) for the correct answer.

- ☐ A. Pancreas ☐ B. Stomach
- ☐ C. Liver ☐ D. Small Intestine

Question: 90 of 125

QID: 6072

Marks: 2

Keibul Lamjao, the only floating National Park in the world, is located in

Please mark (✓) for the correct answer.

- ☐ A. Assam ☐ B. Mizoram
- ☐ C. Manipur ☐ D. Nagaland

Question: 91 of 125

QID: 6073

Marks: 2

Konkani language is spoken by the people of

Please mark (✓) for the correct answer.

- ☐ A. Goa ☐ B. Kerala
- ☐ C. Gujarat ☐ D. Tamil Nadu

Question: 92 of 125

QID: 6074

Marks: 2

Chhatrapati Shivaji Maharaj was the ruler of which dynasty?

Please mark (✓) for the correct answer.

- ☐ A. Chola ☐ B. Pallava
- ☐ C. Maurya ☐ D. Maratha

Question: 93 of 125

QID: 6075

Marks: 2

Which one is not a natural source of water?

Please mark (✓) for the correct answer.

☐ A. Canal☐ B. Pond☐ C. Lake☐ D. River**Question: 94 of 125**

QID: 6076

Marks: 2

Corbett National Park was established to protect which animal?

Please mark (✓) for the correct answer.

☐ A. Elephant☐ B. Bengal Tiger☐ C. Lion☐ D. One horned Rhinoceros**Question: 95 of 125**

QID: 6077

Marks: 2

Which of the following cricket grounds is known as the 'Mecca of Cricket'?

Please mark (✓) for the correct answer.

☐ A. Lord's Cricket Ground (England)☐ B. Adelaide Oval (Australia)☐ C. Brisbane Cricket Ground (Australia)☐ D. Barabati Stadium (Odisha)**Question: 96 of 125**

QID: 6078

Marks: 2

The motif of 'Ellora Caves' is printed on the reverse of which currency note?

Please mark (✓) for the correct answer.

☐ A. ₹ 20 note☐ B. ₹ 50 note☐ C. ₹ 500 note☐ D. ₹ 2000 note**Question: 97 of 125**

QID: 6079

Marks: 2

Jallikattu, a popular bull taming sport can be seen in which state of India?

Please mark (✓) for the correct answer.

☐ A. Tamil Nadu☐ B. Andhra Pradesh☐ C. Karnataka☐ D. Maharashtra

Question: 98 of 125

QID: 6080

Marks: 2

The constellation 'Sapta Rishi' is known to Westerners as the

Please mark (✓) for the correct answer.

- ☐ A. Seven Monks ☐ B. Alpha Centauri
- ☐ C. Great Bear ☐ D. Small Bear

Question: 99 of 125

QID: 6081

Marks: 2

The mountain range which divides the North and the South India is

Please mark (✓) for the correct answer.

- ☐ A. Himalayas ☐ B. Western Ghats
- ☐ C. Vindhya ☐ D. Satpura

Question: 100 of 125

QID: 6082

Marks: 2

Name the largest glacier in India.

Please mark (✓) for the correct answer.

- ☐ A. Milam Glacier ☐ B. Kafni Glacier
- ☐ C. Siachen Glacier ☐ D. Gangotri Glacier

Question: 101 of 125

QID: 6108

Marks: 2

If 'x' stands for '+', '÷' stands for '-', '-' stands for 'x' and '+' stands for '÷', then find the value of the following equation.
 $54 \div 16 - 3 \times 6 + 2 = ?$

Please mark (✓) for the correct answer.

- ☐ A. 9 ☐ B. 12
- ☐ C. 8 ☐ D. 15

Question: 102 of 125

QID: 6109

Marks: 2

⇒ B is the father of Q. B has only two children.
⇒ Q is the brother of R. R is the daughter of P.
⇒ A is the granddaughter of P. S is the father of A.

How is S related to Q?

Please mark (✓) for the correct answer.

- ☐ A. Son ☐ B. Son-in-law
- ☐ C. Brother ☐ D. Brother-in-law

If January 1 is a Friday, then what is the first day of the month of March in a leap year?

Please mark (✓) for the correct answer.

- ☐ A. Tuesday
 ☐ B. Wednesday
 ☐ C. Thursday
 ☐ D. Friday

Question: 104 of 125

QID: 6111

Marks: 2

Sunita is the 11th from either end of a row of girls. How many girls are there in that row?

Please mark (✓) for the correct answer.

- ☐ A. 19
 ☐ B. 20
 ☐ C. 21
 ☐ D. 22

Question: 105 of 125

QID: 6112


Marks: 2

Select the answer figure in which the question figure is hidden.

Question Figure



Answer Figures



(a)

(b)

(c)

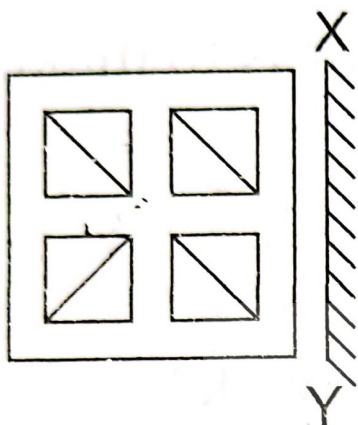
(d)

Please mark (✓) for the correct answer.

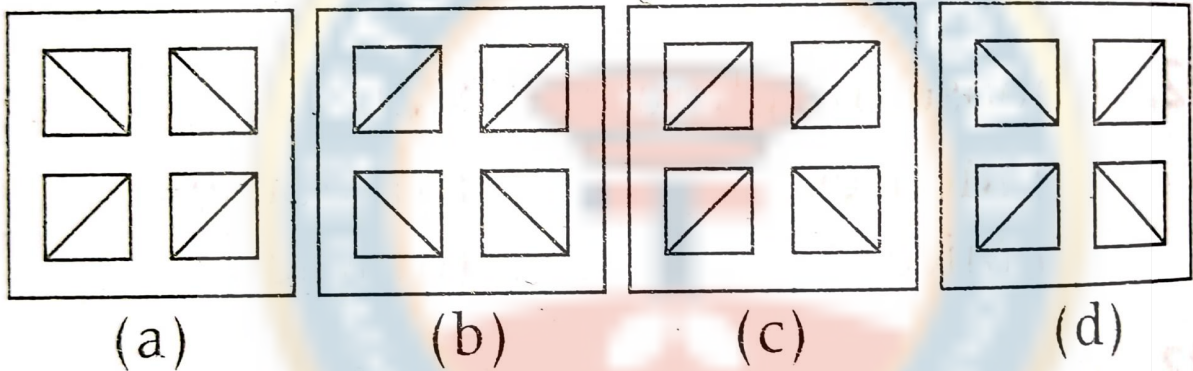
- ☐ A. a
 ☐ B. b
 ☐ C. c
 ☐ D. d

Select the correct mirror image of the question figure.

Question Figure



Answer Figures



Please mark (✓) for the correct answer.

- ☐ A. a
- ☐ B. b
- ☐ C. c
- ☐ D. d

Find the missing term in the series.
A1, C3, F6, J10, O15, ?

Please mark (✓) for the correct answer.

- ☐ A. U21
- ☐ B. V21
- ☐ C. T20
- ☐ D. U20

Question: 108 of 125

QID: 6115

Marks: 2

Find the odd one from the given alternatives.

Please mark (✓) for the correct answer.

☐ A. ABDG☐ B. CDFI☐ C. EFHK☐ D. GHJK**Question: 109 of 125**

QID: 6116

Marks: 2

Ram cycled 10 km southward from his home, turned right and cycled 6 km, turned right and cycled 10 km, turned left and cycled 15 km. How many kilometers will he have to cycle straight to reach home?

Please mark (✓) for the correct answer.

☐ A. 10 km☐ B. 21 km☐ C. 16 km☐ D. 20 km**Question: 110 of 125**

QID: 6117

Marks: 2

'Smell' is to 'Flower', in the same way as 'Taste' is to

Please mark (✓) for the correct answer.

☐ A. Tongue☐ B. Water☐ C. Sweet☐ D. Food**Question: 111 of 125**

QID: 6118

Marks: 2

Find the related word from the given alternative.

Cub : Lion :: Colt : ?

Please mark (✓) for the correct answer.

☐ A. Doe☐ B. Stag☐ C. Leopard☐ D. Stallion**Question: 112 of 125**

QID: 6119

Marks: 2

If in a certain language 'TIMEN' is coded as 'ACMOG', how is 'EMTIN' coded in that language?

Please mark (✓) for the correct answer.


☐ A. OMACG☐ B. OMAGC☐ C. OMACN☐ D. OMBGC

In a certain language 'TOUR' is coded as '1234' and 'CLEAR' is coded as '56784' and 'SPARE' is as '90847', then how is 'SCULPTURE' coded in that language?

Please mark (✓) for the correct answer.

- ☐ A. 1453602347
- ☐ B. 953401347
- ☐ C. 85360245
- ☐ D. 953601347

How many triangles are there in the figure given below?



Please mark (✓) for the correct answer.


- ☐ A. 21
- ☐ B. 27
- ☐ C. 18
- ☐ D. 29

Five friends P, Q, R, S, and T are sitting in a row facing North. Here, S is between T and Q and Q is to the immediate left of R. P is to the immediate left of T. Who is in the middle?

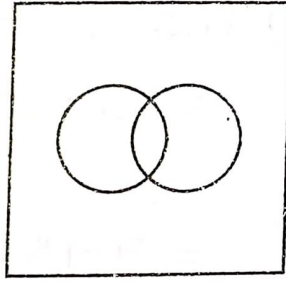
Please mark (✓) for the correct answer.

- ☐ A. S
- ☐ B. T
- ☐ C. Q
- ☐ D. R

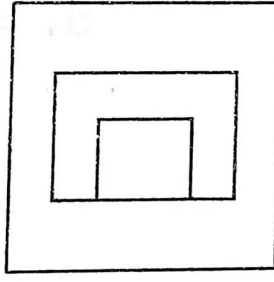
Find the odd figure from the given alternative.



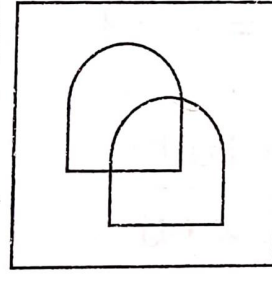
(a)



(b)




(c)




(d)

Please mark (✓) for the correct answer.

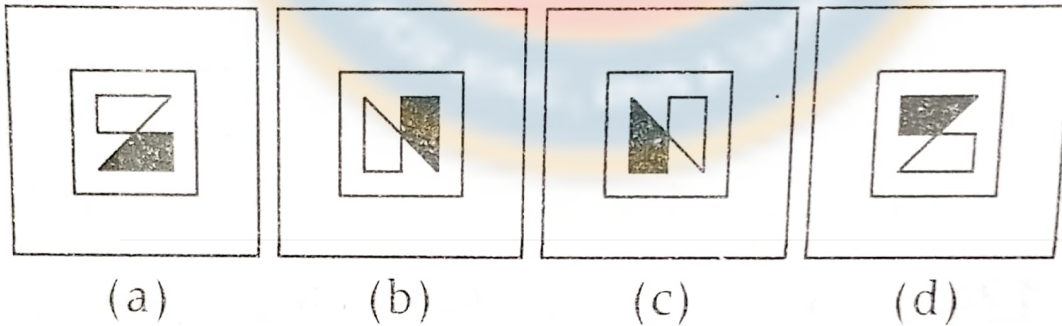
☐ A. a☐ B. b☐ C. c☐ D. d

Complete the given figure from the given alternative.

Question Figure



Answer Figures



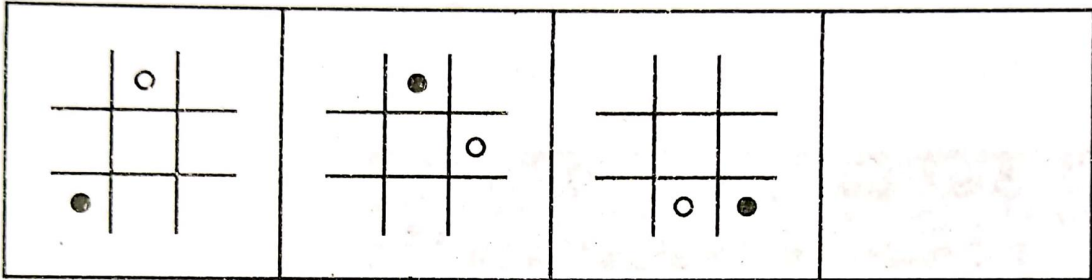
Please mark (✓) for the correct answer.

- ☐ A. a
- ☐ C. c

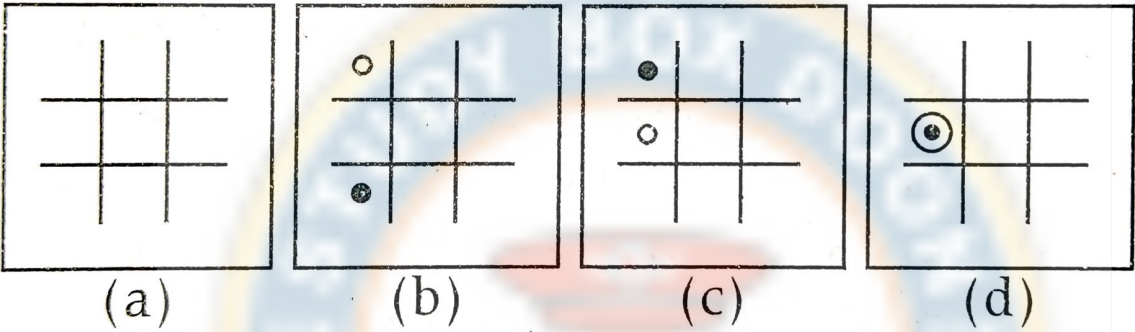
- ☐ B. b
- ☐ D. d

Find the next figure in the given figure series.

Questions Figures



Answer Figures

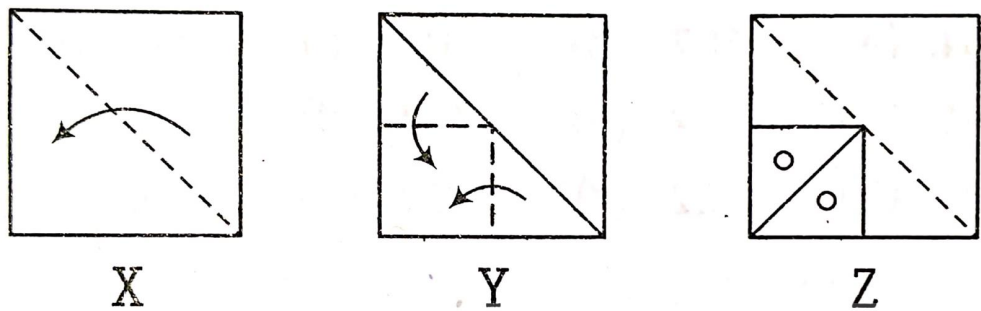


Please mark (✓) for the correct answer.

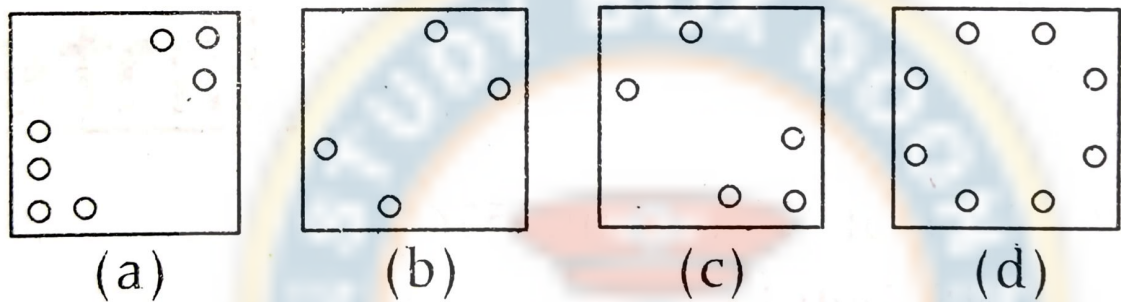
- ☐ A. a
- ☐ B. b
- ☐ C. c
- ☐ D. d

Select the answer figure which indicates how the paper will appear when opened?

Question Figures



Answer Figures



Please mark (✓) for the correct answer.

- ☐ A. a
- ☐ B. b
- ☐ C. c
- ☐ D. d

A woman introduces a man as the son of the brother of her mother. How is the man related to the woman?

Please mark (✓) for the correct answer.

- ☐ A. Nephew
- ☐ B. Son
- ☐ C. Cousin
- ☐ D. Uncle

Find the related number from the given alternative.
63 : 21 :: 27 : ?

Please mark (✓) for the correct answer.

- ☐ A. 6
- ☐ B. 9
- ☐ C. 1
- ☐ D. 3

If $2 + 6 + 9 = 926$ and $1 + 8 + 2 = 218$, then $4 + 3 + 1 = ?$

Please mark (✓) for the correct answer.

☐ A. 314

☐ B. 341

☐ C. 143

☐ D. 431

Question: 123 of 125

QID: 6130

Marks: 2

Two days before yesterday was Friday, then what day of the week will be the day after tomorrow?

Please mark (✓) for the correct answer.

☐ A. Monday

☐ B. Sunday

☐ C. Saturday

☐ D. Wednesday

Question: 124 of 125

QID: 6131

Marks: 2

In a row of boys, Satish is fifteenth from the left and seventh from the right. How many boys are there in the row?

Please mark (✓) for the correct answer.

☐ A. 20

☐ B. 19

☐ C. 22

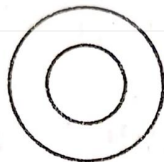
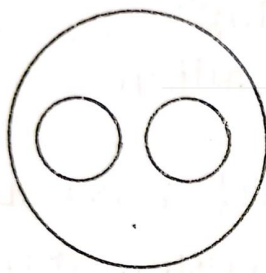
☐ D. 21

Question: 125 of 125

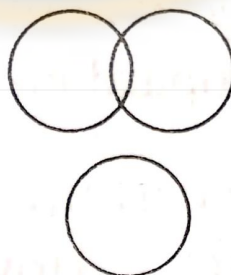
QID: 6132

Marks: 2

Identify the diagram that best represents the relationship among the given classes:
Ladyfinger, Apple, Fruit



(c)



(d)

Please mark (✓) for the correct answer.

☐ A. a

☐ B. b

☐ C. c

☐ D. d



Answer Key

| No | Question Type | QID | Correct Answer |
|---------------|-------------------------------|------|----------------|
| Question - 1 | Multiple Choice (Radiobutton) | 6045 | B |
| Question - 2 | Multiple Choice (Radiobutton) | 6046 | C |
| Question - 3 | Multiple Choice (Radiobutton) | 6047 | D |
| Question - 4 | Multiple Choice (Radiobutton) | 6048 | A |
| Question - 5 | Multiple Choice (Radiobutton) | 6049 | B |
| Question - 6 | Multiple Choice (Radiobutton) | 6050 | C |
| Question - 7 | Multiple Choice (Radiobutton) | 6051 | D |
| Question - 8 | Multiple Choice (Radiobutton) | 6052 | A |
| Question - 9 | Multiple Choice (Radiobutton) | 6053 | B |
| Question - 10 | Multiple Choice (Radiobutton) | 6054 | C |
| Question - 11 | Multiple Choice (Radiobutton) | 6055 | D |
| Question - 12 | Multiple Choice (Radiobutton) | 6056 | A |
| Question - 13 | Multiple Choice (Radiobutton) | 6057 | B |
| Question - 14 | Multiple Choice (Radiobutton) | 6008 | C |
| Question - 15 | Multiple Choice (Radiobutton) | 6009 | A |
| Question - 16 | Multiple Choice (Radiobutton) | 6010 | B |
| Question - 17 | Multiple Choice (Radiobutton) | 6011 | B |
| Question - 18 | Multiple Choice (Radiobutton) | 6012 | C |
| Question - 19 | Multiple Choice (Radiobutton) | 6013 | B |
| Question - 20 | Multiple Choice (Radiobutton) | 6014 | D |
| Question - 21 | Multiple Choice (Radiobutton) | 6015 | C |
| Question - 22 | Multiple Choice (Radiobutton) | 6016 | D |
| Question - 23 | Multiple Choice (Radiobutton) | 6017 | C |
| Question - 24 | Multiple Choice (Radiobutton) | 6018 | A |
| Question - 25 | Multiple Choice (Radiobutton) | 6019 | B |
| Question - 26 | Multiple Choice (Radiobutton) | 6020 | C |
| Question - 27 | Multiple Choice (Radiobutton) | 6021 | A |
| Question - 28 | Multiple Choice (Radiobutton) | 6022 | C |
| Question - 29 | Multiple Choice (Radiobutton) | 6023 | C |
| Question - 30 | Multiple Choice (Radiobutton) | 6024 | D |
| Question - 31 | Multiple Choice (Radiobutton) | 6025 | A |
| Question - 32 | Multiple Choice (Radiobutton) | 6026 | D |
| Question - 33 | Multiple Choice (Radiobutton) | 6027 | B |
| Question - 34 | Multiple Choice (Radiobutton) | 6028 | B |
| Question - 35 | Multiple Choice (Radiobutton) | 6029 | C |
| Question - 36 | Multiple Choice (Radiobutton) | 6030 | C |
| Question - 37 | Multiple Choice (Radiobutton) | 6031 | C |
| Question - 38 | Multiple Choice (Radiobutton) | 6032 | A |
| Question - 39 | Multiple Choice (Radiobutton) | 6033 | B |
| Question - 40 | Multiple Choice (Radiobutton) | 6034 | C |
| Question - 41 | Multiple Choice (Radiobutton) | 6035 | D |
| Question - 42 | Multiple Choice (Radiobutton) | 6036 | C |

| No | Question Type | QID | Correct Answer |
|---------------|-------------------------------|------|----------------|
| Question - 43 | Multiple Choice (Radiobutton) | 6037 | D |
| Question - 44 | Multiple Choice (Radiobutton) | 6038 | C |
| Question - 45 | Multiple Choice (Radiobutton) | 6039 | D |
| Question - 46 | Multiple Choice (Radiobutton) | 6040 | B |
| Question - 47 | Multiple Choice (Radiobutton) | 6041 | B |
| Question - 48 | Multiple Choice (Radiobutton) | 6042 | B |
| Question - 49 | Multiple Choice (Radiobutton) | 6043 | C |
| Question - 50 | Multiple Choice (Radiobutton) | 6044 | D |
| Question - 51 | Multiple Choice (Radiobutton) | 6100 | B |
| Question - 52 | Multiple Choice (Radiobutton) | 6101 | D |
| Question - 53 | Multiple Choice (Radiobutton) | 6102 | B |
| Question - 54 | Multiple Choice (Radiobutton) | 6103 | C |
| Question - 55 | Multiple Choice (Radiobutton) | 6104 | B |
| Question - 56 | Multiple Choice (Radiobutton) | 6105 | D |
| Question - 57 | Multiple Choice (Radiobutton) | 6106 | A |
| Question - 58 | Multiple Choice (Radiobutton) | 6083 | A |
| Question - 59 | Multiple Choice (Radiobutton) | 6084 | C |
| Question - 60 | Multiple Choice (Radiobutton) | 6085 | D |
| Question - 61 | Multiple Choice (Radiobutton) | 6086 | A |
| Question - 62 | Multiple Choice (Radiobutton) | 6087 | B |
| Question - 63 | Multiple Choice (Radiobutton) | 6088 | B |
| Question - 64 | Multiple Choice (Radiobutton) | 6089 | C |
| Question - 65 | Multiple Choice (Radiobutton) | 6090 | A |
| Question - 66 | Multiple Choice (Radiobutton) | 6091 | C |
| Question - 67 | Multiple Choice (Radiobutton) | 6092 | D |
| Question - 68 | Multiple Choice (Radiobutton) | 6093 | B |
| Question - 69 | Multiple Choice (Radiobutton) | 6094 | D |
| Question - 70 | Multiple Choice (Radiobutton) | 6095 | B |
| Question - 71 | Multiple Choice (Radiobutton) | 6096 | B |
| Question - 72 | Multiple Choice (Radiobutton) | 6097 | A |
| Question - 73 | Multiple Choice (Radiobutton) | 6098 | C |
| Question - 74 | Multiple Choice (Radiobutton) | 6099 | B |
| Question - 75 | Multiple Choice (Radiobutton) | 6107 | B |
| Question - 76 | Multiple Choice (Radiobutton) | 6058 | B |
| Question - 77 | Multiple Choice (Radiobutton) | 6059 | D |
| Question - 78 | Multiple Choice (Radiobutton) | 6060 | C |
| Question - 79 | Multiple Choice (Radiobutton) | 6061 | D |
| Question - 80 | Multiple Choice (Radiobutton) | 6062 | B |
| Question - 81 | Multiple Choice (Radiobutton) | 6063 | A |
| Question - 82 | Multiple Choice (Radiobutton) | 6064 | B |
| Question - 83 | Multiple Choice (Radiobutton) | 6065 | B |
| Question - 84 | Multiple Choice (Radiobutton) | 6066 | B |
| Question - 85 | Multiple Choice (Radiobutton) | 6067 | C |
| Question - 86 | Multiple Choice (Radiobutton) | 6068 | C |
| Question - 87 | Multiple Choice (Radiobutton) | 6069 | B |
| Question - 88 | Multiple Choice (Radiobutton) | 6070 | C |

| No | Question Type | QID | Correct Answer |
|----------------|-------------------------------|------|----------------|
| Question - 89 | Multiple Choice (Radiobutton) | 6071 | C |
| Question - 90 | Multiple Choice (Radiobutton) | 6072 | C |
| Question - 91 | Multiple Choice (Radiobutton) | 6073 | A |
| Question - 92 | Multiple Choice (Radiobutton) | 6074 | D |
| Question - 93 | Multiple Choice (Radiobutton) | 6075 | B |
| Question - 94 | Multiple Choice (Radiobutton) | 6076 | B |
| Question - 95 | Multiple Choice (Radiobutton) | 6077 | A |
| Question - 96 | Multiple Choice (Radiobutton) | 6078 | A |
| Question - 97 | Multiple Choice (Radiobutton) | 6079 | A |
| Question - 98 | Multiple Choice (Radiobutton) | 6080 | C |
| Question - 99 | Multiple Choice (Radiobutton) | 6081 | C |
| Question - 100 | Multiple Choice (Radiobutton) | 6082 | C |
| Question - 101 | Multiple Choice (Radiobutton) | 6108 | A |
| Question - 102 | Multiple Choice (Radiobutton) | 6109 | D |
| Question - 103 | Multiple Choice (Radiobutton) | 6110 | A |
| Question - 104 | Multiple Choice (Radiobutton) | 6111 | C |
| Question - 105 | Multiple Choice (Radiobutton) | 6112 | A |
| Question - 106 | Multiple Choice (Radiobutton) | 6113 | C |
| Question - 107 | Multiple Choice (Radiobutton) | 6114 | A |
| Question - 108 | Multiple Choice (Radiobutton) | 6115 | D |
| Question - 109 | Multiple Choice (Radiobutton) | 6116 | B |
| Question - 110 | Multiple Choice (Radiobutton) | 6117 | D |
| Question - 111 | Multiple Choice (Radiobutton) | 6118 | D |
| Question - 112 | Multiple Choice (Radiobutton) | 6119 | B |
| Question - 113 | Multiple Choice (Radiobutton) | 6120 | D |
| Question - 114 | Multiple Choice (Radiobutton) | 6121 | A |
| Question - 115 | Multiple Choice (Radiobutton) | 6122 | A |
| Question - 116 | Multiple Choice (Radiobutton) | 6123 | C |
| Question - 117 | Multiple Choice (Radiobutton) | 6124 | C |
| Question - 118 | Multiple Choice (Radiobutton) | 6125 | D |
| Question - 119 | Multiple Choice (Radiobutton) | 6126 | D |
| Question - 120 | Multiple Choice (Radiobutton) | 6127 | C |
| Question - 121 | Multiple Choice (Radiobutton) | 6128 | B |
| Question - 122 | Multiple Choice (Radiobutton) | 6129 | C |
| Question - 123 | Multiple Choice (Radiobutton) | 6130 | D |
| Question - 124 | Multiple Choice (Radiobutton) | 6131 | D |
| Question - 125 | Multiple Choice (Radiobutton) | 6132 | B |

--- END OF ANSWER KEY ---