

Studybox Doon

RMS Mock Test 5 (6th)

Exam ID: 237

Name: _____

Date: _____

Exam Instructions

1. The timer has been set for the exam, and a countdown will display the remaining time. When the timer runs out, the exam will end automatically. No further action will be required after that.
2. You can flag any question that you want.
3. If you don't want to submit any of your provided answers, you can clear them.
4. If you choose to drop this exam, it will not be submitted, and no result will be generated.
5. Once you finish the exam, you cannot resume it.

Question: 1 of 200

QID: 13412

Marks: 1

How many factors are there in a prime number?

Please mark (✓) for the correct answer.

- ☐ A. 0 ☐ B. 2
- ☐ C. 3 ☐ D. 1

Question: 2 of 200

QID: 13413

Marks: 1

The average age of the students of a class is 15.8 yr. The average age of boys is 16.4 yr and that of girls is 15.4 yr. The ratio of number of boys to that of girls is

Please mark (✓) for the correct answer.

- ☐ A. 1:3 ☐ B. 3:2
- ☐ C. 2:3 ☐ D. 3:4

Question: 3 of 200

QID: 13414

Marks: 1

If 50% of $(x - y) = 30\%$ of $(x + y)$, then what per cent of x is y ?

Please mark (✓) for the correct answer.

- ☐ A. 15% ☐ B. 20%
- ☐ C. 30% ☐ D. 25%

Question: 4 of 200

QID: 13415

Marks: 1

If a number x is 10% less than another number y and y is 10% more than 125, then x is equal to

Please mark (✓) for the correct answer.

- ☐ A. 123.75 ☐ B. 123.25
- ☐ C. 122.75 ☐ D. 122.5

Question: 5 of 200

QID: 13416

Marks: 1

The sale price of an article including sales tax is ₹1232. The rate of sales tax is 10%. If the shopkeeper makes a profit of 12%, the cost price of the article is

Please mark (✓) for the correct answer.

- ☐ A. ₹900 ☐ B. ₹1000
- ☐ C. ₹950 ☐ D. ₹1050

Question: 6 of 200

QID: 13417

Marks: 1

A trader buys a chair for ₹600 at a credit of 4 months and sells it for ₹765. Reckoning money worth 6% p.a. his gain per cent is

Please mark (✓) for the correct answer.

- ☐ A. 20% ☐ B. 22%
- ☐ C. 25% ☐ D. 30%

Question: 7 of 200

QID: 13418

Marks: 1

Two pipes A and B can fill a tank in 36 h and 45 h respectively. If both the pipes are opened simultaneously, how much time will be taken to fill the tank?

Please mark (✓) for the correct answer.

- ☐ A. 18 h ☐ B. 20 h
- ☐ C. 15 h ☐ D. 21 h

Question: 8 of 200

QID: 13419

Marks: 1

A shopkeeper purchased 70 kg of potatoes for ₹420 and sold the whole lot at the rate of ₹6.50/kg. What will be his profit per cent?

Please mark (✓) for the correct answer.

- ☐ A. $8\frac{1}{3}\%$ ☐ B. $8\frac{2}{3}\%$
- ☐ C. 8% ☐ D. 10%

Question: 9 of 200

QID: 13420

Marks: 1

An article was sold for ₹861 at a profit of 23%. What is its cost price?

Please mark (✓) for the correct answer.

- ☐ A. ₹650 ☐ B. ₹700
- ☐ C. ₹720 ☐ D. ₹740

Question: 10 of 200

QID: 13421

Marks: 1

If $a:b = 5:9$ and $b:c = 18:19$, then $a:b:c = ?$

Please mark (✓) for the correct answer.

- ☐ A. 5:18:19 ☐ B. 5:9:19
- ☐ C. 10:18:19 ☐ D. 10:9:19

Question: 11 of 200

QID: 13422

Marks: 1

₹1162 was divided among A, B and C in the ratio 35:28:20. The difference between the shares of A and C is

Please mark (✓) for the correct answer.

- ☐ A. ₹220 ☐ B. ₹205
- ☐ C. ₹215 ☐ D. ₹210

Question: 12 of 200

QID: 13423

Marks: 1

If 20 men or 30 women can do a certain work in 40 days, then in how many days will 20 men and 30 women together do the same work?

Please mark (✓) for the correct answer.

- ☐ A. 20 days ☐ B. 25 days
- ☐ C. 15 days ☐ D. 18 days

Question: 13 of 200

QID: 13424

Marks: 1

If I cover a distance of 540 km in 7 h 30 min at a certain speed, my speed (in m/s) is

Please mark (✓) for the correct answer.

- ☐ A. 11 ☐ B. 20
- ☐ C. 12 ☐ D. 15

Question: 14 of 200

QID: 13425

Marks: 1

In how many years, a sum of ₹1500 will fetch ₹1080 as simple interest at the rate of 8% p.a.?

Please mark (✓) for the correct answer.

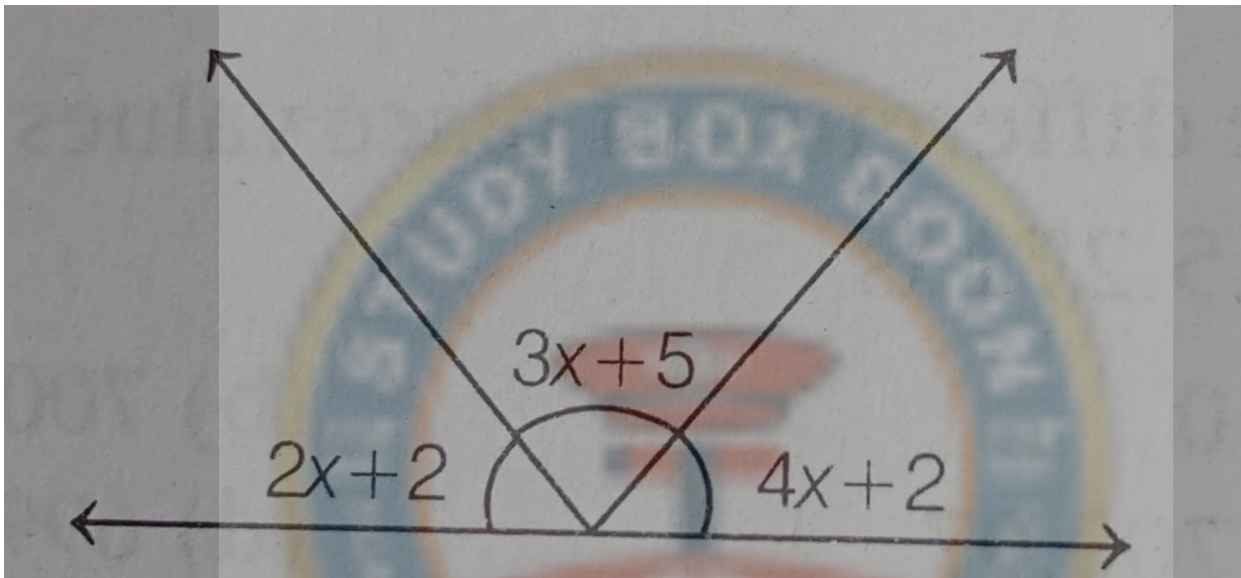
- ☐ A. 7 ☐ B. 8
- ☐ C. 9 ☐ D. 2

Question: 15 of 200

QID: 13426

Marks: 1

Find the value of x in the following figure.



Please mark (✓) for the correct answer.

- ☐ A. 16° ☐ B. 17°
- ☐ C. 18° ☐ D. 19°

Question: 16 of 200

QID: 13427

Marks: 1

The HCF of 1.75, 5.6 and 7 is

Please mark (✓) for the correct answer.

- ☐ A. 3.5 ☐ B. 0.07
- ☐ C. 0.05 ☐ D. 0.35

Question: 17 of 200

QID: 13428

Marks: 1

The ratio of two numbers is 3:4 and their HCF is 13. Their LCM is

Please mark (✓) for the correct answer.

- ☐ A. 156 ☐ B. 136
- ☐ C. 165 ☐ D. 120

Question: 18 of 200

QID: 13429

Marks: 1

If $144/0.144 = 14.4/x$, the value of x is

Please mark (✓) for the correct answer.

- ☐ A. 0.144 ☐ B. 0.0144
- ☐ C. 1.44 ☐ D. 0.00144

Question: 19 of 200

QID: 13430

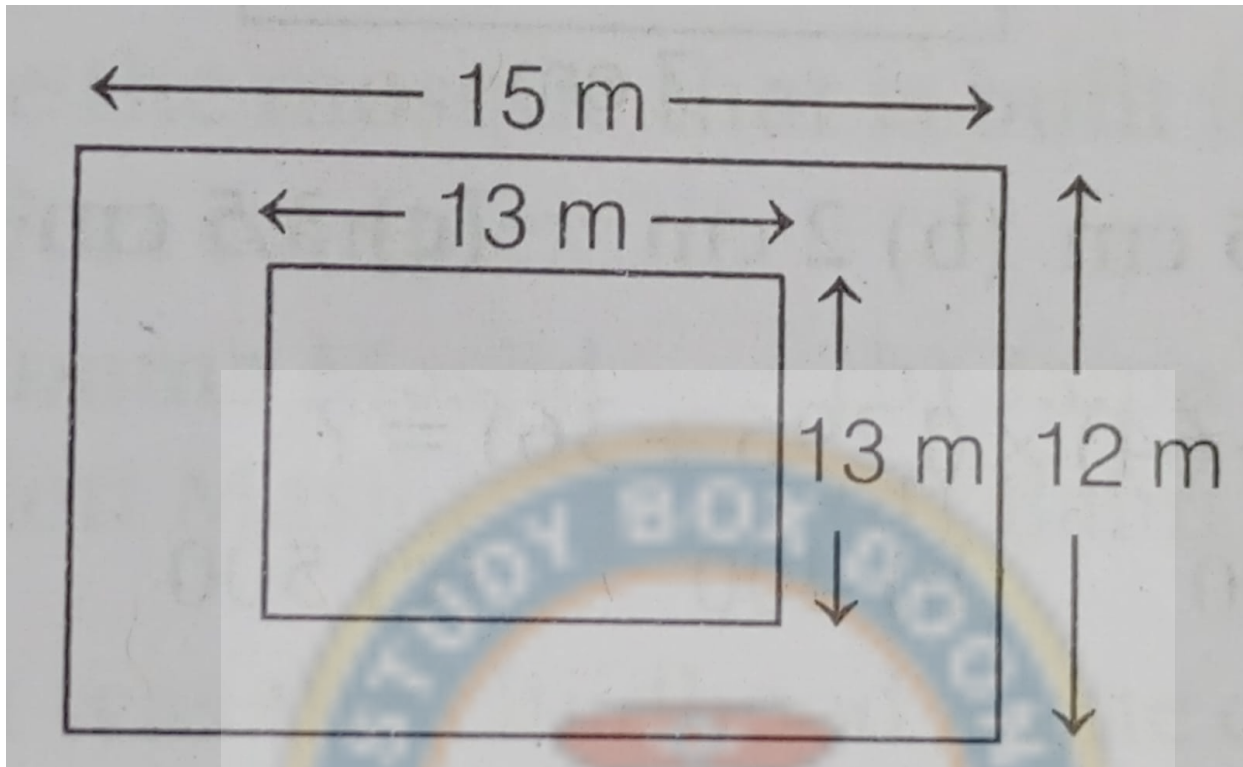
Marks: 1

A student was asked to multiply 7275 by 57 but instead he multiplied it by 75. By how much was his answer greater than the correct answer?

Please mark (✓) for the correct answer.

- ☐ A. 130950 ☐ B. 139050
- ☐ C. 120850 ☐ D. 128050

A rectangular floor is 15 m long and 12 m wide. A square carpet of side 13 m is laid on the floor. Find the area of the floor that is not carpeted.



Please mark (✓) for the correct answer.

- ☐ A. 10 m² ☐ B. 11 m²
- ☐ C. 12 m² ☐ D. 13 m²

Question: 21 of 200

QID: 13432

Marks: 1

Which of the following measures of angles can be those of an obtuse angled triangle?

Please mark (✓) for the correct answer.

- ☐ A. 90°, 45° ☐ B. 60°, 30°
- ☐ C. 40°, 20° ☐ D. 90°, 50°

Question: 22 of 200

QID: 13433

Marks: 1

The length of a rectangle is 7 cm more than its breadth. If the perimeter of the rectangle is 94 cm., what is its area?

Please mark (✓) for the correct answer.

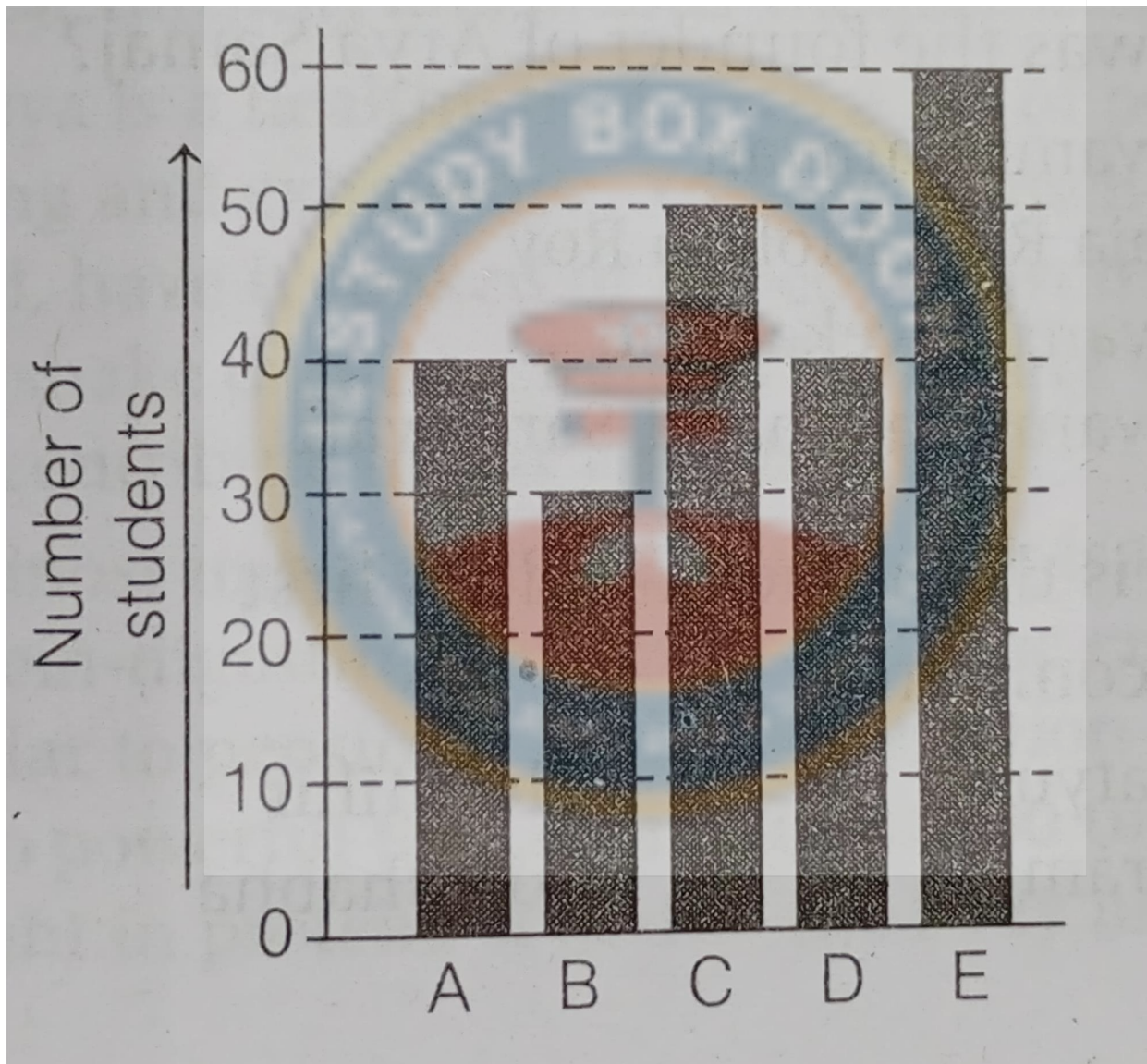
- ☐ A. 440 cm² ☐ B. 380 cm²
- ☐ C. 420 cm² ☐ D. 540 cm²

A man purchased a radio at ₹900 and sold it at ₹1200. What was his profit per cent?

Please mark (✓) for the correct answer.

- ☐ A. 20% ☐ B. 25%
☐ C. 30% ☐ D. $33\frac{1}{3}\%$

From the given graph, find out the group in which the number of students of one group is half of the other group?



Please mark (✓) for the correct answer.

- ☐ A. A ☐ B. B
☐ C. C ☐ D. D

Question: 25 of 200

QID: 13436

Marks: 1

The smallest 4-digit even number formed by using digits 0, 1, 2 and 3 only once is

Please mark (✓) for the correct answer.

☐ A. 1023☐ B. 1032☐ C. 3201☐ D. 3210**Question: 26 of 200**

QID: 13437

Marks: 1

The sum of two numbers is 11009. If one of them is 9999, then find the other number.

Please mark (✓) for the correct answer.

☐ A. 1010☐ B. 1110☐ C. 2110☐ D. 21008**Question: 27 of 200**

QID: 13438

Marks: 1

The number 13013 is divisible by 13. 5-digit smallest number which begins with 14 and is divisible by 13 is

Please mark (✓) for the correct answer.

☐ A. 14040☐ B. 14001☐ C. 14014☐ D. 14027**Question: 28 of 200**

QID: 13439

Marks: 1

Express 5.125 in fractional form

Please mark (✓) for the correct answer.

☐ A. $5\frac{1}{125}$ ☐ B. $5\frac{1}{25}$ ☐ C. $5\frac{1}{8}$ ☐ D. $51\frac{1}{4}$ **Question: 29 of 200**

QID: 13440

Marks: 1

The difference between the place value of 5 in 29503 and the face value of 7 in 32071 is

Please mark (✓) for the correct answer.

☐ A. 493☐ B. 2☐ C. 43☐ D. 430

Question: 30 of 200

QID: 13441

Marks: 1

Three bells ring at intervals 12sec, 15sec and 18sec respectively. They started ringing simultaneously at 7:00 am. What will be the next time when they all ring simultaneously?

Please mark (✓) for the correct answer.

- ☐ A. 7:30 am ☐ B. 7:03 am
- ☐ C. 7:30 pm ☐ D. 7:03 pm

Question: 31 of 200

QID: 13442

Marks: 1

Two digits greatest prime number is

Please mark (✓) for the correct answer.

- ☐ A. 93 ☐ B. 99
- ☐ C. 91 ☐ D. 97

Question: 32 of 200

QID: 13443

Marks: 1

Which of the following is equivalent to 3.65?

Please mark (✓) for the correct answer.

- ☐ A. 36.5% ☐ B. 0.365%
- ☐ C. 365% ☐ D. 3650%

Question: 33 of 200

QID: 13444

Marks: 1

0.025 is divided by 5, quotient is

Please mark (✓) for the correct answer.

- ☐ A. 0.05 ☐ B. 0.005
- ☐ C. 0.5 ☐ D. 5

Question: 34 of 200

QID: 13445

Marks: 1

$\frac{\sqrt{81} + \sqrt{36}}{\sqrt{121} - \sqrt{64}}$
The value of $\frac{\sqrt{81} + \sqrt{36}}{\sqrt{121} - \sqrt{64}}$ is

Please mark (✓) for the correct answer.

- ☐ A. 5 ☐ B. 4
- ☐ C. 6 ☐ D. 3

Question: 35 of 200

QID: 13446

Marks: 1

Find the area of a rectangle whose length is 18 cm and breadth is 7.5 cm.

Please mark (✓) for the correct answer.

- ☐ A. 135 cm² ☐ B. 135 cm³
- ☐ C. 145 cm³ ☐ D. 125.5 cm²

Question: 36 of 200

QID: 13447

Marks: 1

Weight of one coin of ₹5 is 9 gm. In Anu's bag total 9 kg weight of ₹5 coin. What is the total number of coin in Anu's bag?

Please mark (✓) for the correct answer.

- ☐ A. 10 ☐ B. 100
- ☐ C. 1000 ☐ D. 10000

Question: 37 of 200

QID: 13448

Marks: 1

What is 412 times 62?

Please mark (✓) for the correct answer.

- ☐ A. 25132 ☐ B. 24720
- ☐ C. 26638 ☐ D. 25544

Question: 38 of 200

QID: 13449

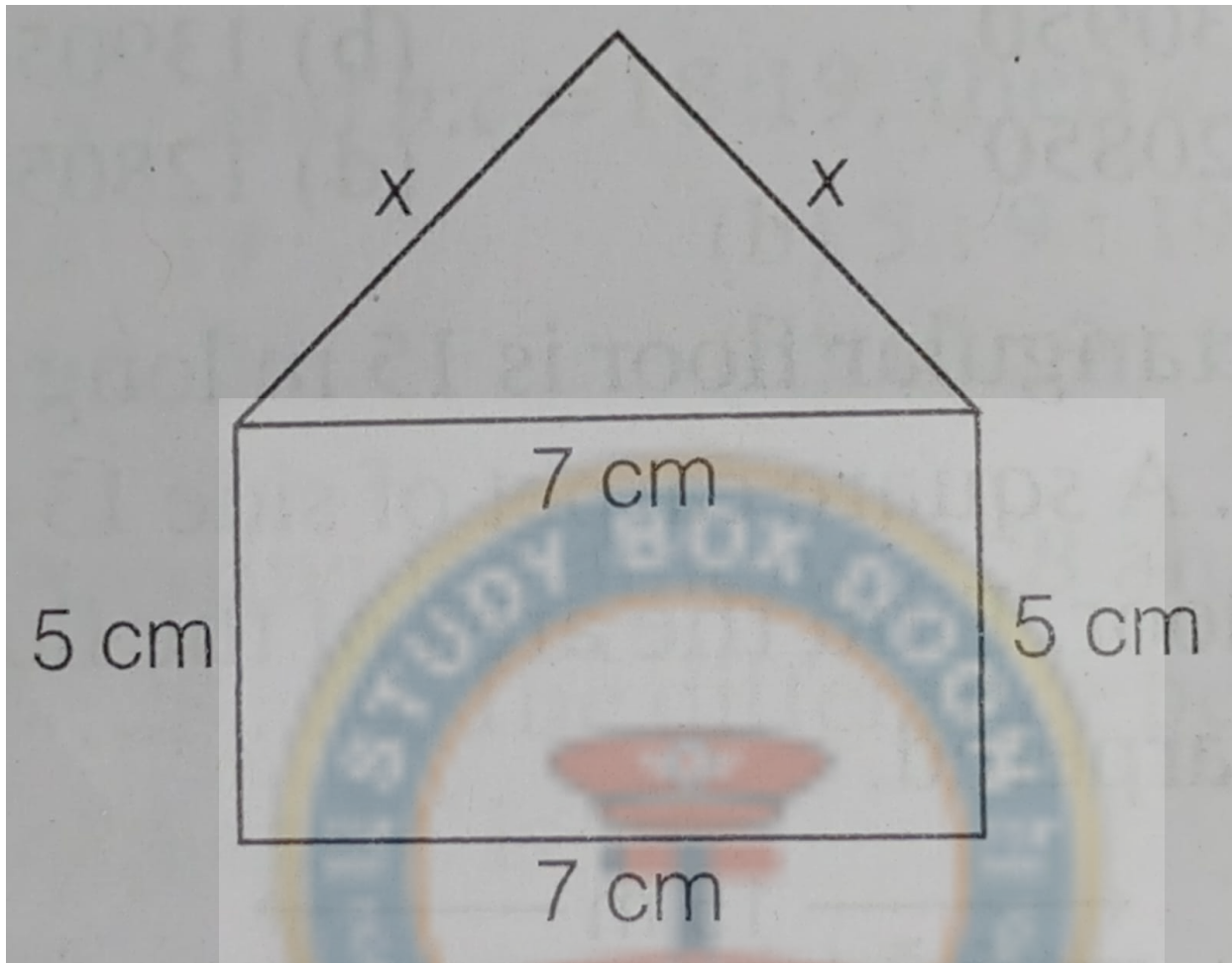
Marks: 1

What is the difference between the largest and the smallest 5-digit number formed by using the digits 3, 5, 7, 8 and 0 only once?

Please mark (✓) for the correct answer.

- ☐ A. 65952 ☐ B. 56592
- ☐ C. 56952 ☐ D. 56259

What is the value of x in the following figure, whose perimeter is 28 cm?



Please mark (✓) for the correct answer.

- ☐ A. 5.5 cm
- ☐ C. 3.5 cm

- ☐ B. 2 cm
- ☐ D. 5 cm

Question: 40 of 200

QID: 13451

Marks: 1

$$(800 \div 64) \times (1296 \div 36) = ?$$

Please mark (✓) for the correct answer.

- ☐ A. 420
- ☐ C. 500

- ☐ B. 400
- ☐ D. 450

Question: 41 of 200

QID: 13403

Marks: 1

The difference of place values of 7's in 1715.271 is

Please mark (✓) for the correct answer.

- ☐ A. 0 ☐ B. 700
- ☐ C. 700.07 ☐ D. 699.93

Question: 42 of 200

QID: 13404

Marks: 1

The difference between the number 5671 and the number obtained by reversing the digits is

Please mark (✓) for the correct answer.

- ☐ A. 4960 ☐ B. 3619
- ☐ C. 7436 ☐ D. 3906

Question: 43 of 200

QID: 13405

Marks: 1

If the value of $547.527 / 0.0082$ is x , then the value of $547527 / 82$ will be

Please mark (✓) for the correct answer.

- ☐ A. $x/10$ ☐ B. $10x$
- ☐ C. $100x$ ☐ D. $x/100$

Question: 44 of 200

QID: 13406

Marks: 1

$25 + 3/100 + 4/1000$ is equal to

Please mark (✓) for the correct answer.

- ☐ A. 25.34 ☐ B. 25.304
- ☐ C. 25.034 ☐ D. 25.0034

Question: 45 of 200

QID: 13407

Marks: 1

When the numerator of a fraction is increased by 4, the fraction increases by $2/3$. What is the denominator of the fraction?

Please mark (✓) for the correct answer.

- ☐ A. 6 ☐ B. 7
- ☐ C. 8 ☐ D. None of these

Question: 46 of 200

QID: 13408

Marks: 1

The area of a square is 64 cm^2 . Then, its perimeter is

Please mark (✓) for the correct answer.

- ☐ A. 64 cm ☐ B. 32 cm
- ☐ C. 46 cm ☐ D. 48 cm

Question: 47 of 200

QID: 13409

Marks: 1

The sum of the fourth and seventh multiples of 13 is

Please mark (✓) for the correct answer.

- ☐ A. 143 ☐ B. 91
- ☐ C. 117 ☐ D. 133

Question: 48 of 200

QID: 13410

Marks: 1

Which of the following is not a factor of 316?

Please mark (✓) for the correct answer.

- ☐ A. 1 ☐ B. 8
- ☐ C. 79 ☐ D. 158

Question: 49 of 200

QID: 13411

Marks: 1

The product of two numbers is $\frac{5}{4}$. If one number is $\frac{5}{6}$, what is the other number?

Please mark (✓) for the correct answer.

- ☐ A. 2 ☐ B. $\frac{1}{2}$
- ☐ C. $\frac{3}{2}$ ☐ D. $\frac{2}{3}$

Question: 50 of 200

QID: 13402

Marks: 1

12000 is obtained, when a number is subtracted from the sum of 9875 and 8765, find the number.

Please mark (✓) for the correct answer.

- ☐ A. 6630 ☐ B. 6640
- ☐ C. 6650 ☐ D. 660

Which letter will replace the question mark?

P	T	X
J	N	R
G	K	?

Please mark (✓) for the correct answer.

☐ A. U

☐ B. L

☐ C. O

☐ D. T

Question: 52 of 200

QID: 13470

Marks: 1

Arrange the following words according to dictionary order.

1. Epitaxy
2. Episode
3. Epigene
4. Epitome

Please mark (✓) for the correct answer.

☐ A. 1, 2, 3, 4

☐ B. 3, 2, 4, 1

☐ C. 3, 2, 1, 4

☐ D. 4, 2, 1, 3

Question: 53 of 200

QID: 13471

Marks: 1

Select the related number from the given alternative.

192 : 291 :: 316 : ?

Please mark (✓) for the correct answer.

☐ A. 631

☐ B. 136

☐ C. 163

☐ D. 613

Question: 54 of 200

QID: 13472

Marks: 1

In a row of boys, Animesh is 7th from one extreme end and 11th from the other end. Find the total number of boys in the row.

Please mark (✓) for the correct answer.

☐ A. 16

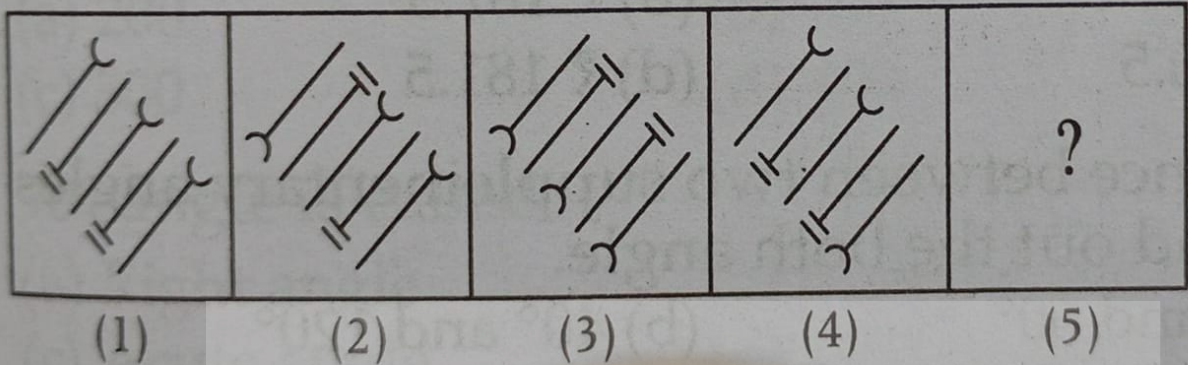
☐ B. 17

☐ C. 18

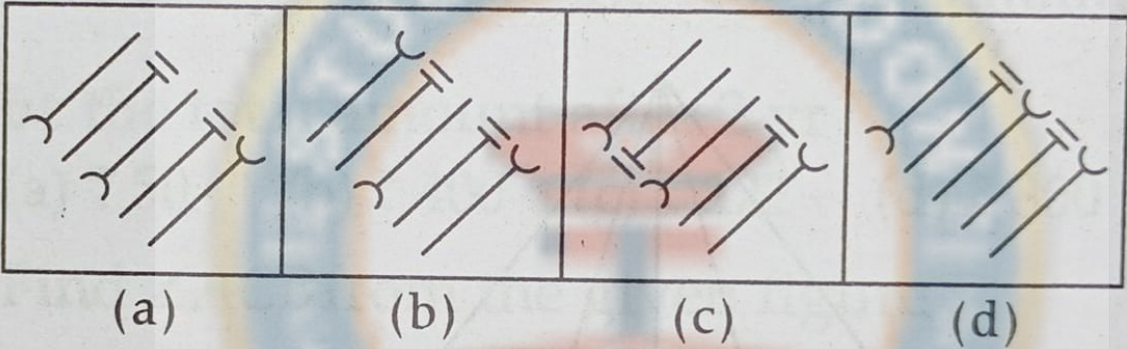
☐ D. 15

Pick up the appropriate figure from the answer figure which can replace the question mark (?) in problem figure.

Problem Figures



Answer Figures



Please mark (✓) for the correct answer.

- ☐ A. a
- ☐ B. b
- ☐ C. c
- ☐ D. d

Pick up the appropriate figure from the answer figure which can replace the question mark (?) in problem figure.

Problem Figures

(1)	(2)	(3)	(4)	(5)

Answer Figures

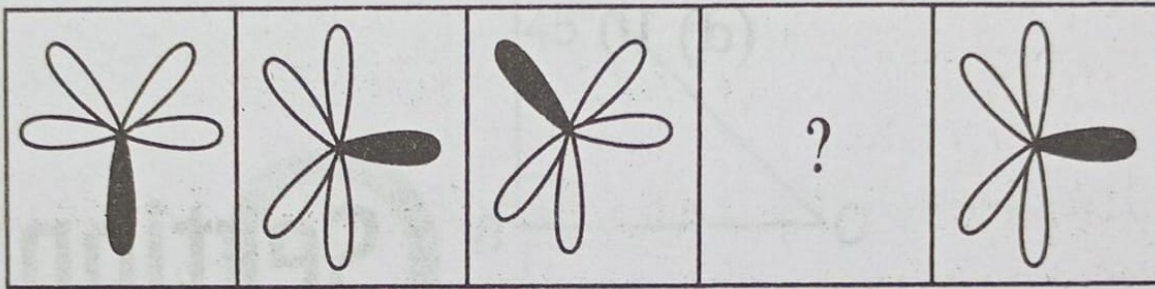
(a)	(b)	(c)	(d)

Please mark (✓) for the correct answer.

- ☐ A. a
- ☐ B. b
- ☐ C. c
- ☐ D. d

Pick up the appropriate figure from the answer figure which can replace the question mark (?) in problem figure.

Problem Figures



(1)


(2)

(3)

(4)

(5)

Answer Figures



(a)

(b)

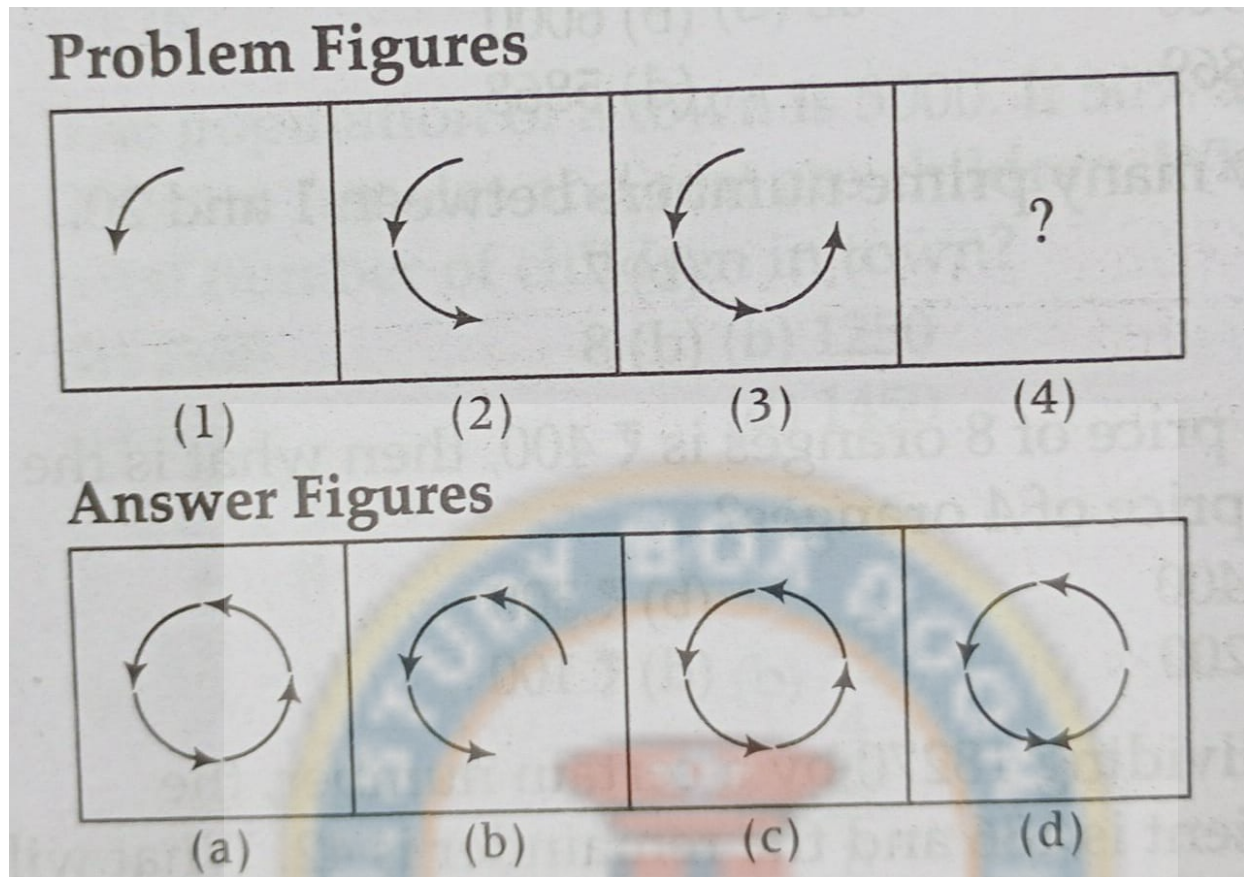
(c)

(d)

Please mark (✓) for the correct answer.

☐ A. a☐ B. b☐ C. c☐ D. d

Pick up the appropriate figure from the answer figure which can replace the question mark (?) in problem figure.



Please mark (✓) for the correct answer.

- ☐ A. a
- ☐ C. c

- ☐ B. b
- ☐ D. d

Question: 59 of 200

QID: 13494

Marks: 1

In a class, Sandeep is 25th from top and 32nd from bottom, then total number of students in the class is

Please mark (✓) for the correct answer.

- ☐ A. 56
- ☐ C. 58

- ☐ B. 57
- ☐ D. 60

Question: 60 of 200

QID: 13495

Marks: 1

Radha remembers that her father's birthday is after 16th March but before 21st March, while her brother Mahesh remembers that his father's birthday is before 22nd but after 19th of March. On which date is the birthday of their father?

Please mark (✓) for the correct answer.

- ☐ A. 19th
- ☐ C. 21th

- ☐ B. 20th
- ☐ D. 17th

Each of A, B, C, D, and E has different amounts of money. C has more money than E, B, and A. Who has the maximum amount of money?

Please mark (✓) for the correct answer.

☐ A. A

☐ B. B

☐ C. C

☐ D. D

Question: 62 of 200

QID: 13497

Marks: 1

A is sister of B. B is father of C. C is only brother of D. Then, how A is related to D?

Please mark (✓) for the correct answer.

☐ A. Aunt

☐ B. Sister-in-law

☐ C. Mother

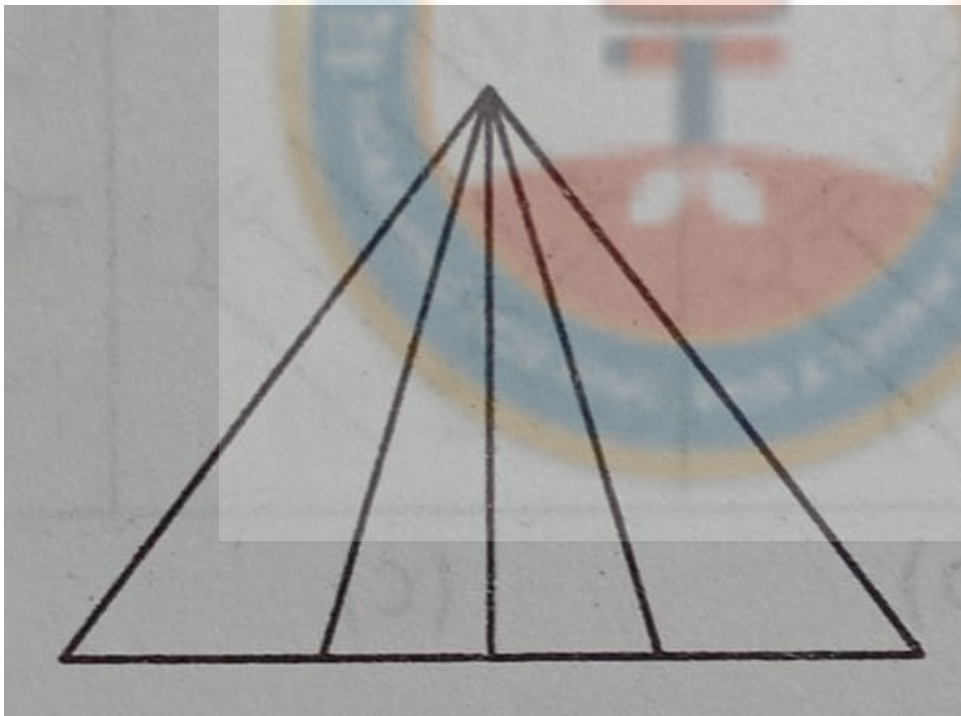
☐ D. Sister

Question: 63 of 200

QID: 13498

Marks: 1

How many triangles are there in the following figure?



Please mark (✓) for the correct answer.

☐ A. 5

☐ B. 9

☐ C. 12

☐ D. 10

If today is Sunday, then what day of the week will be 3 days after tomorrow?

Please mark (✓) for the correct answer.

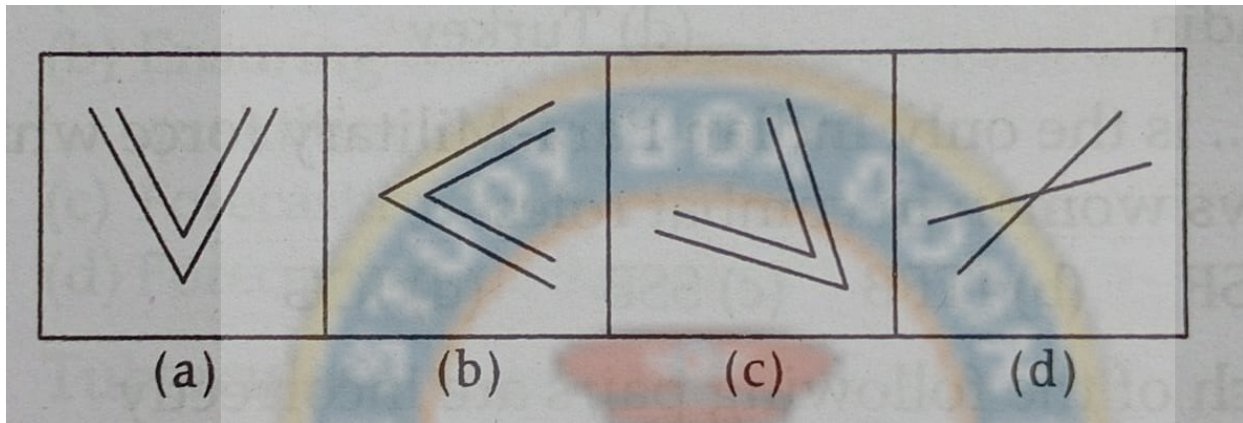
- ☐ A. Thursday
 ☐ B. Wednesday
- ☐ C. Saturday
 ☐ D. Friday

Question: 65 of 200

QID: 13483

Marks: 1

Look carefully at the sequence of symbols to find the odd pattern.



Please mark (✓) for the correct answer.

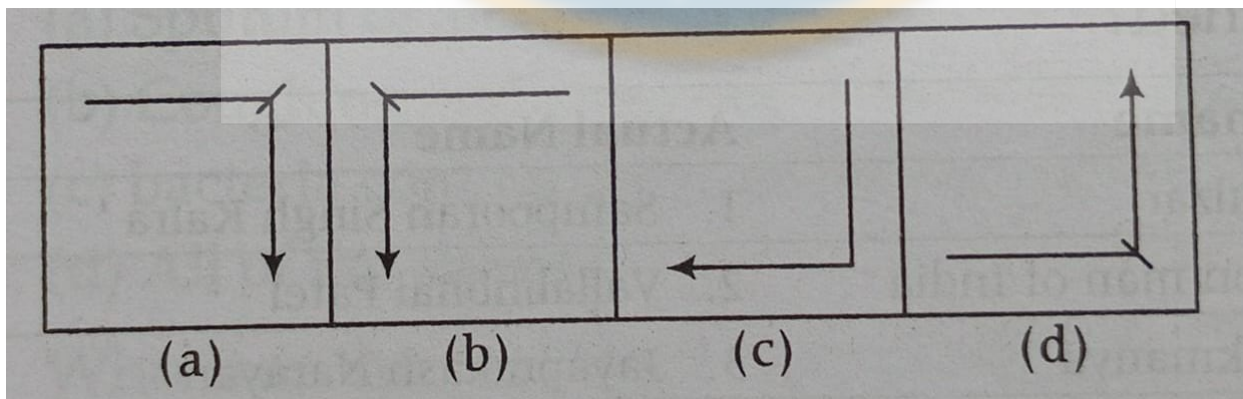
- ☐ A. a
 ☐ B. b
- ☐ C. c
 ☐ D. d

Question: 66 of 200

QID: 13484

Marks: 1

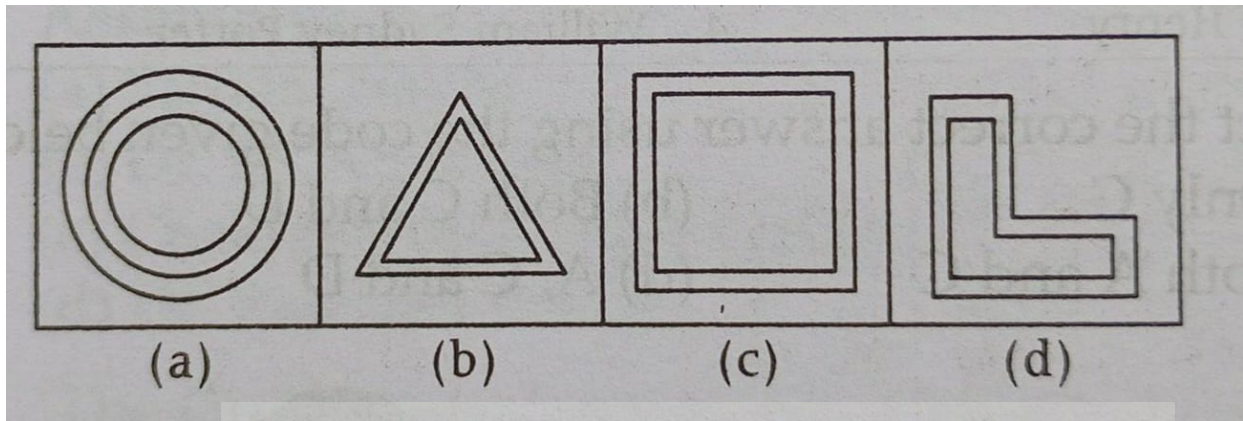
Look carefully at the sequence of symbols to find the odd pattern.



Please mark (✓) for the correct answer.

- ☐ A. a
 ☐ B. b
- ☐ C. c
 ☐ D. d

Look carefully at the sequence of symbols to find the odd pattern.



Please mark (✓) for the correct answer.

- ☐ A. a
☐ C. c

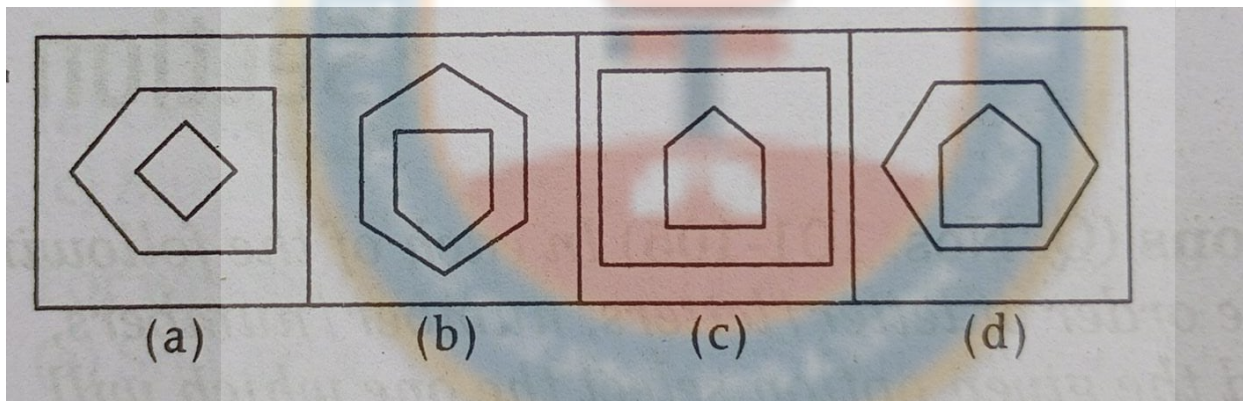
- ☐ B. b
☐ D. d

Question: 68 of 200

QID: 13486

Marks: 1

Look carefully at the sequence of symbols to find the odd pattern.



Please mark (✓) for the correct answer.

- ☐ A. a
☐ C. c

- ☐ B. b
☐ D. d

Look carefully at the sequence of symbols to find the odd pattern.

Problem Figures

(1)	(2)	(3)	(4)

Answer Figures

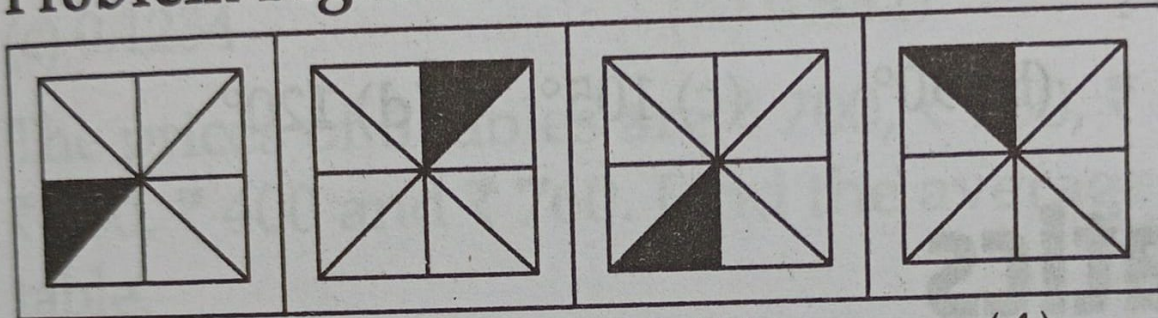
(a)	(b)	(c)	(d)

Please mark (✓) for the correct answer.

- ☐ A. a
- ☐ B. b
- ☐ C. c
- ☐ D. d

Look carefully at the sequence of symbols to find the odd pattern.

Problem Figures



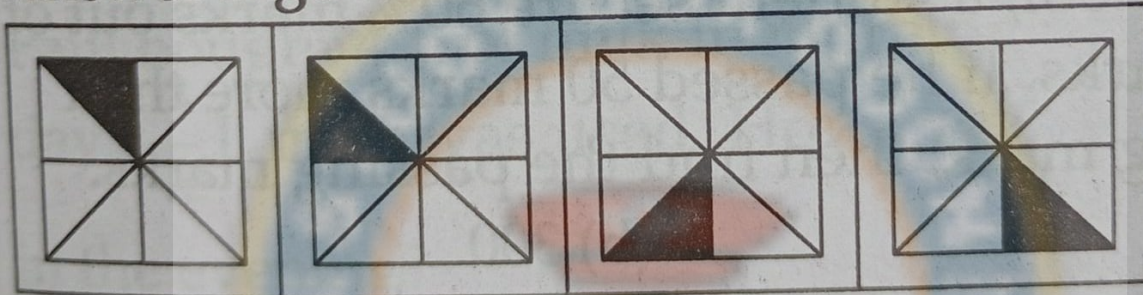
(1)

(2)

(3)

(4)

Answer Figures



(a)

(b)

(c)

(d)

Please mark (✓) for the correct answer.

☐ A. a☐ B. b☐ C. c☐ D. d

Look carefully at the sequence of symbols to find the odd pattern.

Problem Figures

(1)	(2)	(3)	(4)

Answer Figures

(a)	(b)	(c)	(d)

Please mark (✓) for the correct answer.

- ☐ A. a
- ☐ B. b
- ☐ C. c
- ☐ D. d

If 'SUN' is coded as '54', then 'MOON' is coded as

Please mark (✓) for the correct answer.

- ☐ A. 57
- ☐ B. 47
- ☐ C. 54
- ☐ D. 60

If '+' is 'x', 'x' is '-', '-' is '÷' and '÷' is '+', then answer the following questions based on this information.

$24 - 6 \div 3 = ?$

Please mark (✓) for the correct answer.

- ☐ A. 15
- ☐ B. 10
- ☐ C. 12
- ☐ D. 13

If '+' is 'x', 'x' is '-', '-' is '÷' and '÷' is '+', then answer the following questions based on this information.

$12 \div 3 \times 4 = ?$

Please mark (✓) for the correct answer.

- ☐ A. 12
- ☐ B. 13
- ☐ C. 14
- ☐ D. 15

If '+' is 'x', 'x' is '-', '-' is '÷' and '÷' is '+', then answer the following questions based on this information.

$10 \div 3 \times 4 + 3 = ?$

Please mark (✓) for the correct answer.

- ☐ A. 19
- ☐ B. 20
- ☐ C. 17
- ☐ D. 21

If '+' is 'x', 'x' is '-', '-' is '÷' and '÷' is '+', then answer the following questions based on this information.

$30 - 6 \div 5 \times 4 + 2 = ?$

Please mark (✓) for the correct answer.

- ☐ A. 3
- ☐ B. 9
- ☐ C. 27
- ☐ D. 30

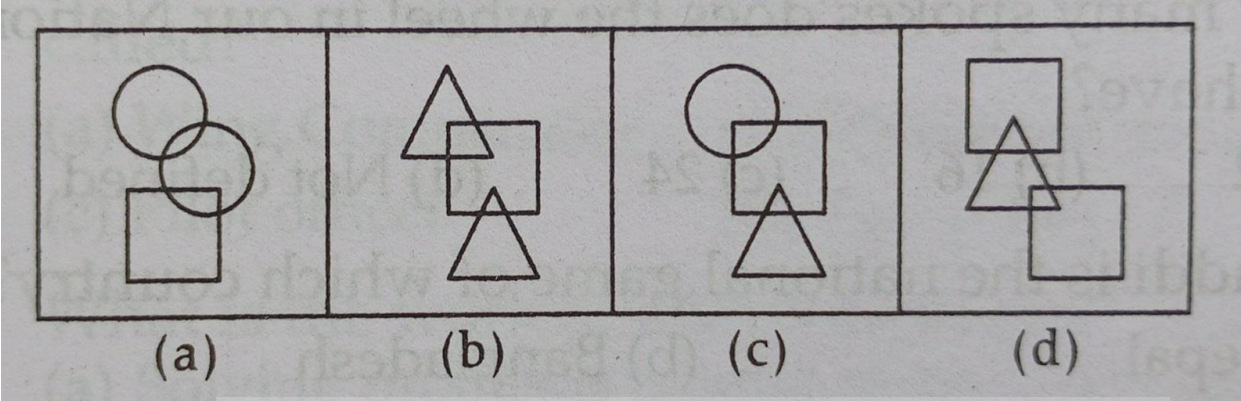
If '+' is 'x', 'x' is '-', '-' is '÷' and '÷' is '+', then answer the following questions based on this information.

$20 \times 60 \div 40 - 20 + 10 = ?$

Please mark (✓) for the correct answer.

- ☐ A. 45
- ☐ B. 50
- ☐ C. 20
- ☐ D. 60

Look carefully at the sequence of symbols to find the odd pattern.



Please mark (✓) for the correct answer.

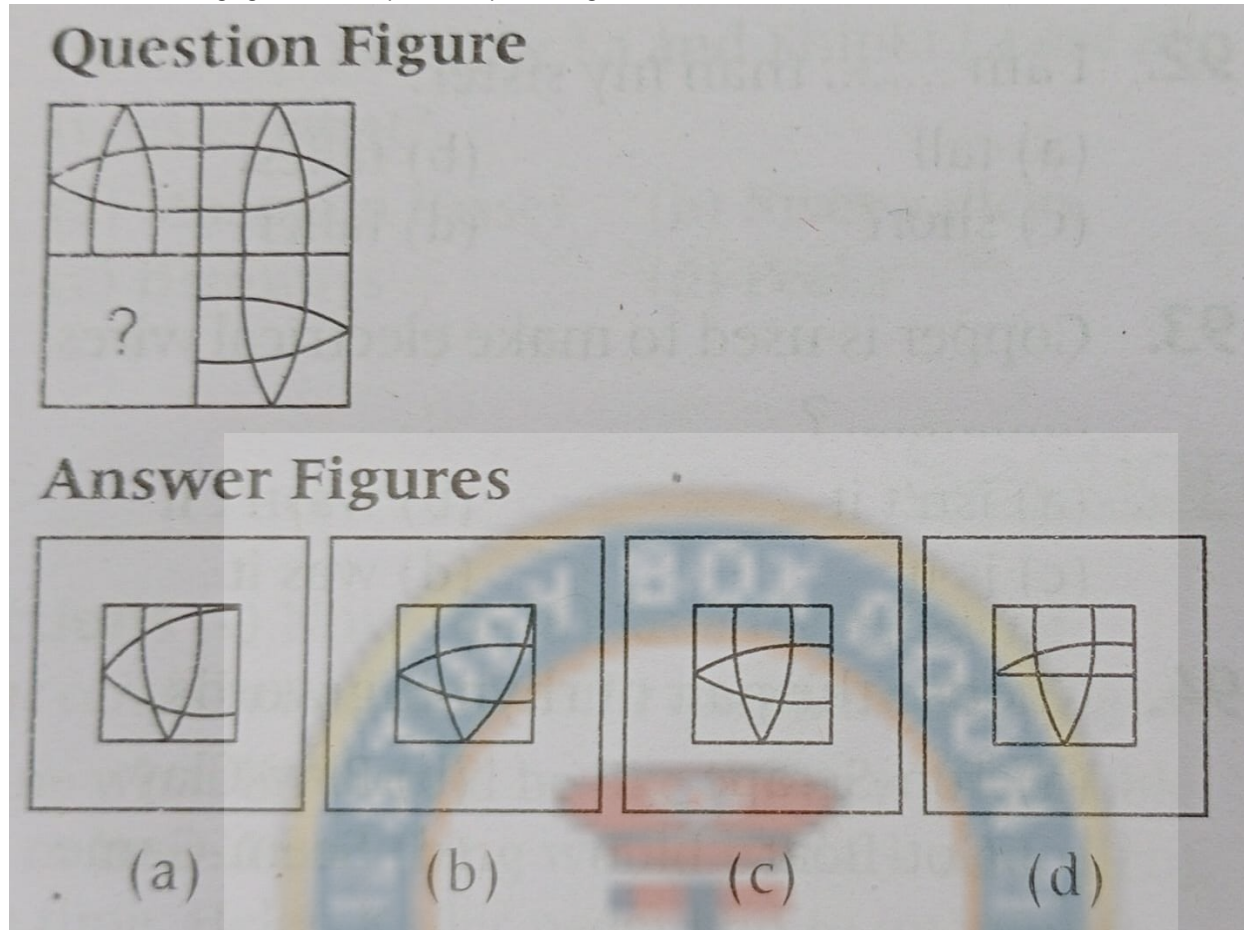
- ☐ A. a
- ☐ B. b
- ☐ C. c
- ☐ D. d

If 'CHAIR' is coded as 'FKDLU', then 'RAID' is coded as,

Please mark (✓) for the correct answer.

- ☐ A. ULGD
- ☐ B. ULKG
- ☐ C. ULDG
- ☐ D. UDLG

Which of the following figures will complete the question figure?



Please mark (✓) for the correct answer.

- ☐ A. a
 ☐ B. b
 ☐ C. c
 ☐ D. d

Question: 81 of 200

QID: 13454

Marks: 1

Find the next term of the given series.

DW, EV, FU, ?

Please mark (✓) for the correct answer.

- ☐ A. HT
 ☐ B. ST
 ☐ C. GT
 ☐ D. UT

Question: 82 of 200

QID: 13455

Marks: 1

A man is facing South. He turns 135° in the anti-clockwise direction and then 180° in the clockwise direction. Which direction is he facing now?

Please mark (✓) for the correct answer.

- ☐ A. South-East
 ☐ B. North-East
 ☐ C. South-West
 ☐ D. North-West

Question: 83 of 200

QID: 13456

Marks: 1

If the day after tomorrow is Sunday, what was the day before yesterday?

Please mark (✓) for the correct answer.

- ☐ A. Wednesday ☐ B. Thursday
- ☐ C. Friday ☐ D. Saturday

Question: 84 of 200

QID: 13457

Marks: 1

A is the brother of B. C is the daughter of A. E is the son of B. How are C and E related?

Please mark (✓) for the correct answer.

- ☐ A. Cousins ☐ B. Brothers
- ☐ C. Sisters ☐ D. None of the above

Question: 85 of 200

QID: 13458

Marks: 1

Select the odd letters from the given alternative.

Please mark (✓) for the correct answer.

- ☐ A. HNTZ ☐ B. DJPV
- ☐ C. AGMS ☐ D. CIOZ

Complete the given figure series.

Question Figures

			?
--	--	--	---

Answer Figures

(a)	(b)	(c)	(d)

Please mark (✓) for the correct answer.

- ☐ A. a
- ☐ B. b
- ☐ C. c
- ☐ D. d

Among five students, M is heavier than K and T. B is lighter than T and P. K is not the lightest. Who among them is the lightest?

Please mark (✓) for the correct answer.

- ☐ A. B
- ☐ B. P
- ☐ C. T
- ☐ D. M

Find out the missing number.

210, 120, 60, 24, 6, ?

Please mark (✓) for the correct answer.

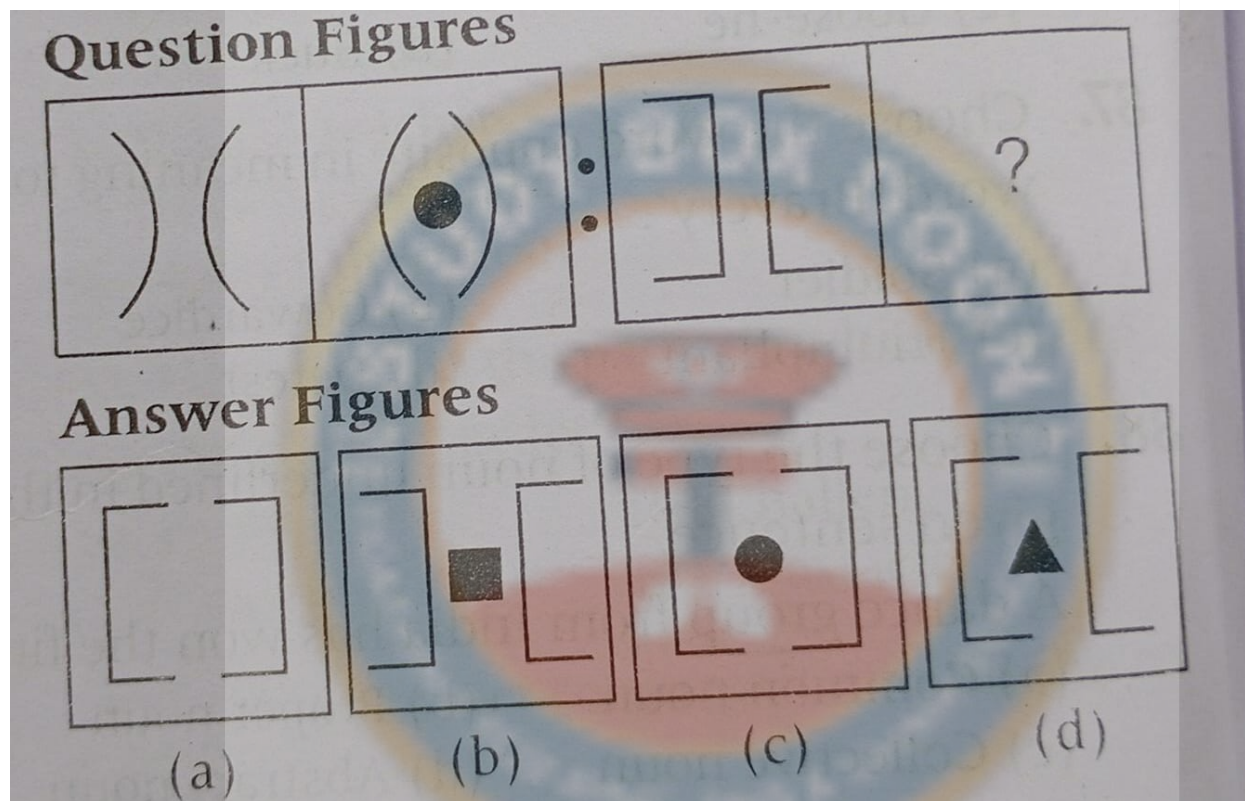
- ☐ A. 0
- ☐ B. 3
- ☐ C. 1
- ☐ D. 2

P is 7 years older than Q. After 4 years, the age of Q will be half that of P. The sum of their present ages (in years) is

Please mark (✓) for the correct answer.

- ☐ A. 19
 ☐ B. 17
 ☐ C. 15
 ☐ D. 13

Select the correct alternative to complete the second pair.



Please mark (✓) for the correct answer.

- ☐ A. a
 ☐ B. b
 ☐ C. c
 ☐ D. d

Which of the following is a leap year?

Please mark (✓) for the correct answer.

- ☐ A. 2010
 ☐ B. 2006
 ☐ C. 2016
 ☐ D. 2009

What will be the angle between the hands of a clock at 9:00?

Please mark (✓) for the correct answer.

☐ A. 75°


☐ B. 90°

☐ C. 105°

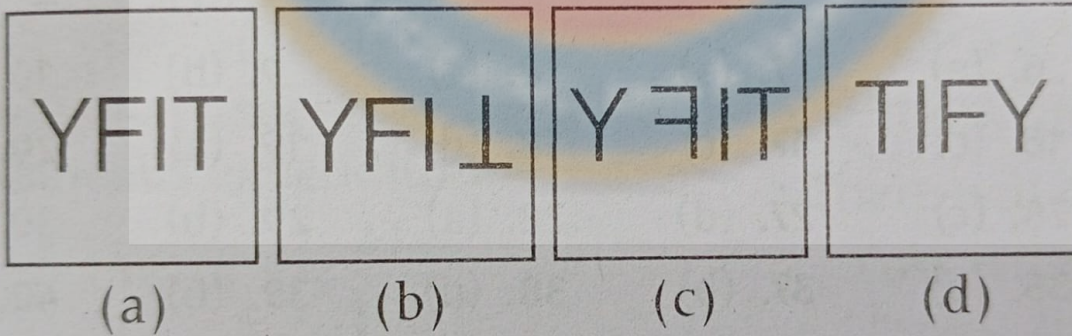
☐ D. 120°



Select the correct mirror image.



Answer Figures



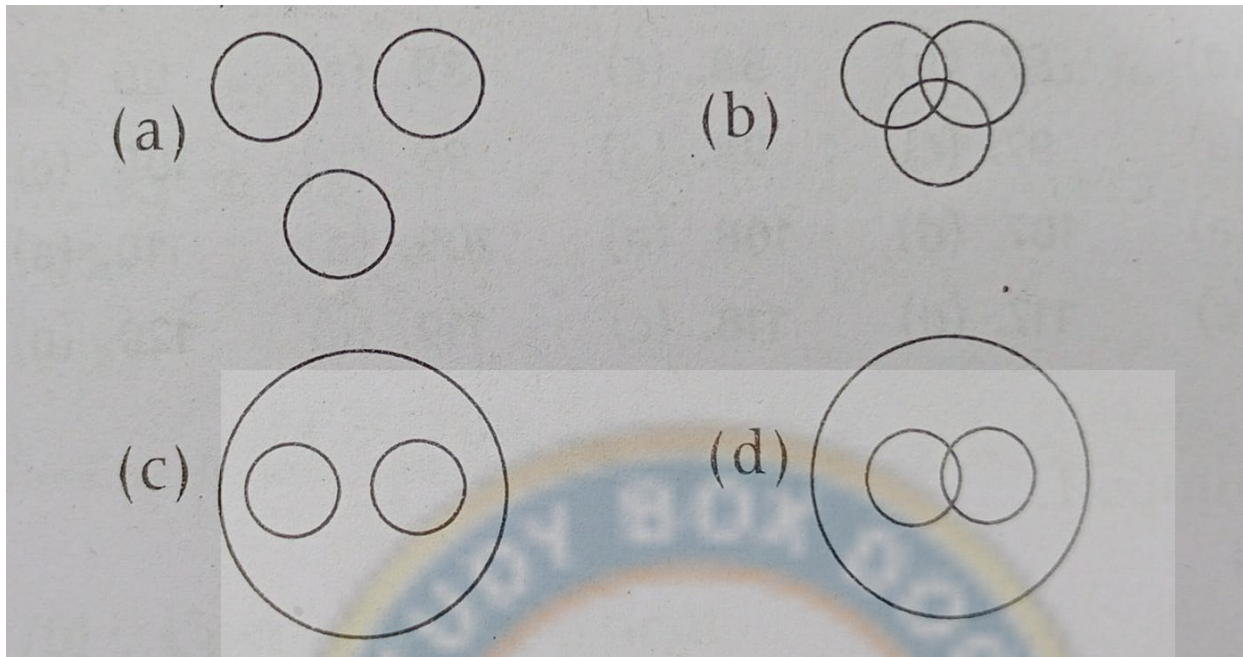
Please mark (✓) for the correct answer.

- ☐ A. a
☐ C. c

- ☐ B. b
☐ D. d

Identify the diagram that best represents the relationship among the given classes.

Ball, Bat, Gloves



Please mark (✓) for the correct answer.

☐ A. a

☐ C. c

☐ B. b

☐ D. d

Question: 95 of 200

QID: 13466

Marks: 1

If '+' means '×', '-' means '÷', '×' means '-', and '÷' means '+', then what is the value of the following expression?

$$6 \div 36 - 6 \times 3 + 2$$

Please mark (✓) for the correct answer.

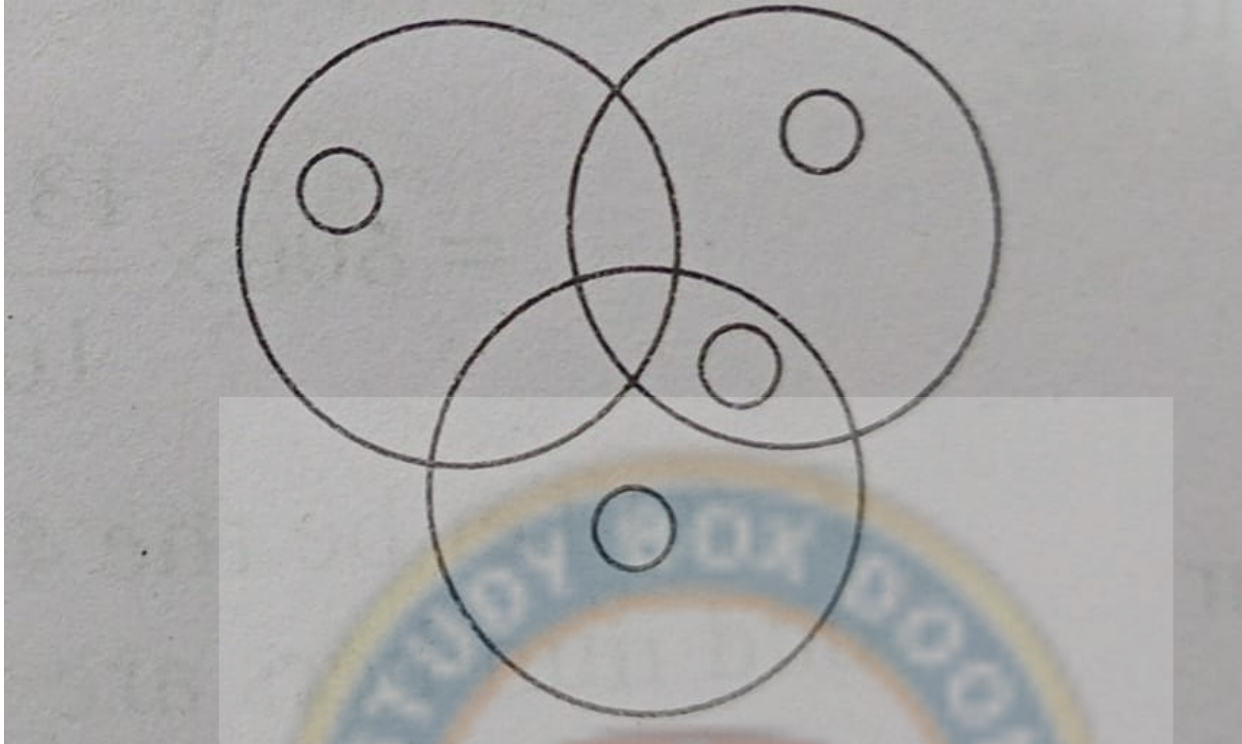
☐ A. 5

☐ C. 8

☐ B. 12

☐ D. 6

What is the number of circles in the following figure?



Please mark (✓) for the correct answer.

☐ A. 6

☐ B. 5

☐ C. 7

☐ D. 8

Question: 97 of 200

QID: 13468

Marks: 1

Select the related word from the given alternative.

Door : Wood :: Shirt : ?

Please mark (✓) for the correct answer.

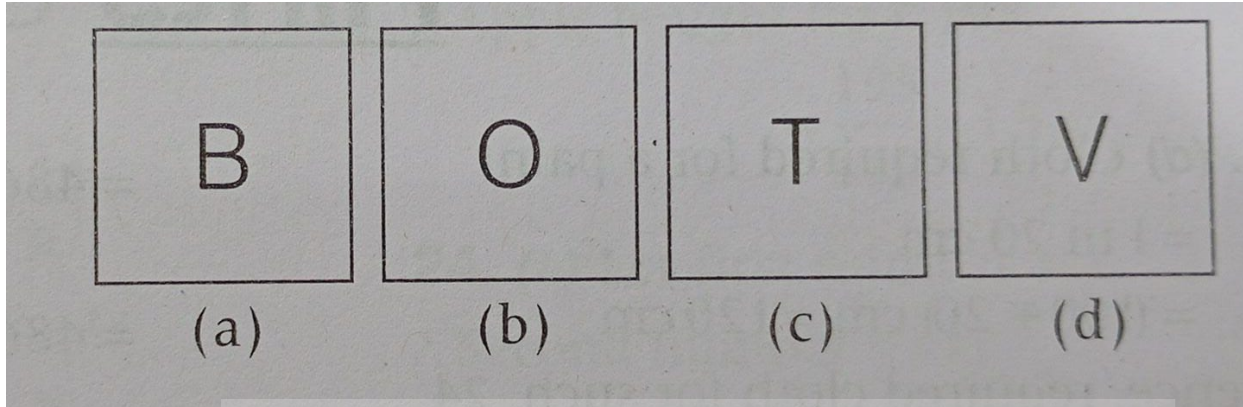
☐ A. Collar

☐ B. Buttons

☐ C. Cuff

☐ D. Cloth

Find the odd one from the given alternative.



Please mark (✓) for the correct answer.

☐ A. B

☐ B. O

☐ C. T

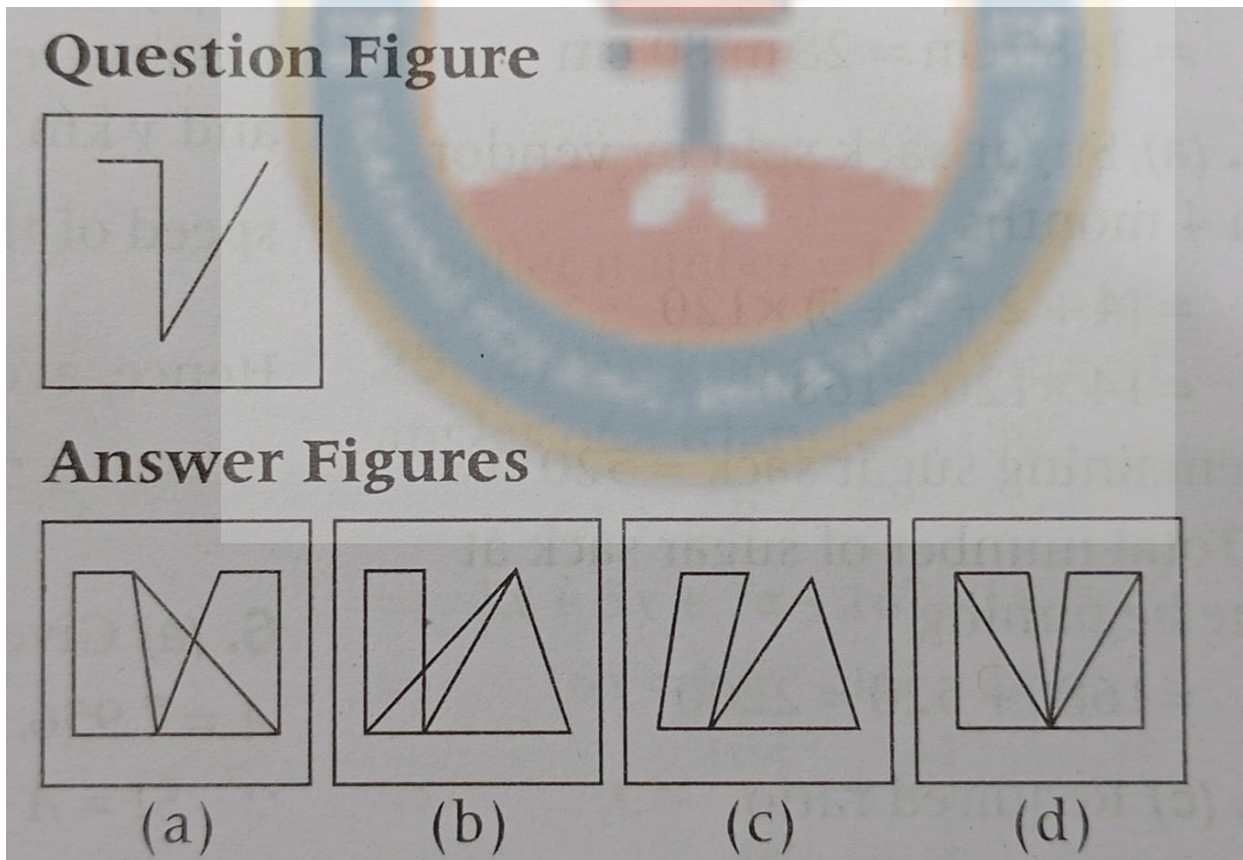
☐ D. V

Question: 99 of 200

QID: 13474

Marks: 1

Select the answer figure in which the question figure is embedded.



Please mark (✓) for the correct answer.

☐ A. a

☐ B. b

☐ C. c

☐ D. d

Question: 100 of 200

QID: 13475

Marks: 1

Find the odd word from the given alternative.

Please mark (✓) for the correct answer.

- ☐ A. Swim ☐ B. Run
- ☐ C. Listen ☐ D. Walk

Question: 101 of 200

QID: 13514

Marks: 1

Choose the type of noun underlined in the given sentence.

A dance group from India has won the final.

Please mark (✓) for the correct answer.

- ☐ A. Common noun ☐ B. Proper noun
- ☐ C. Collective noun ☐ D. Abstract noun

Question: 102 of 200

QID: 13515

Marks: 1

Choose the correct option to fill in the blanks.

The company that the employees will work in a team.

Please mark (✓) for the correct answer.

- ☐ A. decided ☐ B. decides
- ☐ C. decide ☐ D. deciding

Question: 103 of 200

QID: 13516

Marks: 1

..... school library has a bundle books.

Please mark (✓) for the correct answer.

- ☐ A. Our; of ☐ B. Their; in
- ☐ C. Our; to ☐ D. Their; on

Question: 104 of 200

QID: 13517

Marks: 1

..... regiment of soldiers completed their mission

Please mark (✓) for the correct answer.

- ☐ A. A; cowardly ☐ B. An; hastily
- ☐ C. A; successfully ☐ D. The; clearly

Question: 105 of 200

QID: 13518

Marks: 1

I am than my sister.

Please mark (✓) for the correct answer.

- ☐ A. tall ☐ B. tallest
☐ C. short ☐ D. taller

Question: 106 of 200

QID: 13519

Marks: 1

Copper is used to make electrical wires, ?

Please mark (✓) for the correct answer.

- ☐ A. isn't it ☐ B. wasn't it
☐ C. is it ☐ D. was it

Question: 107 of 200

QID: 13520

Marks: 1

Choose the pair of rhyming words.

Please mark (✓) for the correct answer.

- ☐ A. Top-Scrape ☐ B. Play-Clay
☐ C. Got-Boat ☐ D. Seem-Game

Question: 108 of 200

QID: 13521

Marks: 1

Choose the correct meaning of the idiom given below.

A bird's eye view.

Please mark (✓) for the correct answer.

- ☐ A. Top view ☐ B. General view
☐ C. Lower view ☐ D. Extended view

Question: 109 of 200

QID: 13522

Marks: 1

Name the type of given sentence.

My father is a bank employee.

Please mark (✓) for the correct answer.

- ☐ A. Assertive ☐ B. Negative
☐ C. Imperative ☐ D. Exclamatory

Question: 110 of 200

QID: 13523

Marks: 1

Choose the correct option to fill in the blank.

The king over several provinces within the country.

Please mark (✓) for the correct answer.

- ☐ A. rains ☐ B. rinse
- ☐ C. reigns ☐ D. None of these

Question: 111 of 200

QID: 13524

Marks: 1

Choose the word with correct spelling.

Please mark (✓) for the correct answer.

- ☐ A. Interview ☐ B. Luggage
- ☐ C. Musician ☐ D. All of these

Question: 112 of 200

QID: 13525

Marks: 1

Choose the synonym for the word 'ceases'.

Please mark (✓) for the correct answer.

- ☐ A. Begin ☐ B. Stop
- ☐ C. Originate ☐ D. Reject

Question: 113 of 200

QID: 13526

Marks: 1

I a glass of water because I was thirsty.

Please mark (✓) for the correct answer.

- ☐ A. drink ☐ B. drinks
- ☐ C. drank ☐ D. had drunk

Read the passage and answer the questions that follow.

Savannah and Charlotte worked real hard all summer to prepare for the end of summer picnic. Savannah grew tomatoes and green peppers in her garden. Charlotte lives on a farm and since the spring has been growing corn, lettuce, and grapes. A week before the picnic both girls harvested and packed their produce. They decided that all of their hard work deserved a reward. They charged others for their produce. Savannah charged one dollar for one tomato or green pepper. Charlotte charged one dollar for a head of lettuce, fifty cents for an ear of corn, and five cents for a grape.

Savannah grew for the end of summer picnic.

Please mark (✓) for the correct answer.

- ☐ A. tomatoes ☐ B. corn
- ☐ C. lettuce ☐ D. apples

Question: 115 of 200

QID: 13538

Marks: 1

Choose the correct tense of the following sentences.
Hitesh is a good cook.

Please mark (✓) for the correct answer.

- ☐ A. Simple Present ☐ B. Simple Past
- ☐ C. Simple Future ☐ D. Present Continuous

Question: 116 of 200

QID: 13539

Marks: 1

Choose the correct tense of the following sentences.
Mayank does not return money to anybody.

Please mark (✓) for the correct answer.

- ☐ A. Past Continuous ☐ B. Simple Future
- ☐ C. Present Perfect ☐ D. Simple Present

Read the following passage carefully and answer the questions that follow.

Imagine what life would be like if you weren't able to see or hear. Everything would be dark and silent all the time. Helen Keller never had to imagine it, because she lived it. She was born on June 27, 1880 in Alabama. She was very healthy and had no medical problems.

But when Helen was 1½ years old, something unexpected happened and she got very sick. For about a week, she had a terrible fever and headache. Doctors suspected she contracted scarlet fever or meningitis. She survived, but she lost her sight and hearing at the same time. Her parents were shocked.

As Helen grew up, she tried to communicate with her family and friends. It was sometimes frustrating for her because it was hard to let others know what she needed. Helen quickly realised she was different and her parents recognised she needed help.

They called the Perkins Institute for the Blind in Boston to get advice. The director said Anne Sullivan might be able to help. Anne used to attend the school when she was blind, but she got a special surgery when she was 15 and was able to see. Since she understood what it's like to be blind, people thought she could really help Helen.

Helen Keller is a great example of someone who was always determined and never let obstacles get in her way. She took the challenges life presented her and turned them into something positive. As she grew older, she wanted to help others who had the same challenges. She became an activist and her mission was to inspire others. She spent her life raising money and awareness for the rights of women and people with disabilities. She wrote over a dozen books, traveled all over the country and lived until she was 87 years old.

According to the article, how did Helen Keller become blind and deaf?

Please mark (✓) for the correct answer.

- ☐ A. She was born blind and deaf. ☐ B. She was in a terrible horseback riding accident.
- ☐ C. She became blind and deaf later in life due to old age. ☐ D. She contracted a serious illness as a child.

Question: 118 of 200

QID: 13532

Marks: 1

Select the correct meaning of the following sentences.
One who sees the bright side of things

Please mark (✓) for the correct answer.

- ☐ A. Optimist ☐ B. Brightest
- ☐ C. Clonist ☐ D. None of these

Question: 119 of 200

QID: 13533

Marks: 1

Select the correct meaning of the following sentences.
One who is hard to please

Please mark (✓) for the correct answer.

- ☐ A. Hardist ☐ B. Fastidious
- ☐ C. Arrogant ☐ D. Sober

Select the correct meaning of the following sentences.

Writing about one's own life

Please mark (✓) for the correct answer.

- | | |
|--|---------------------------------|
| <input type="radio"/> A. Biography | <input type="radio"/> B. Drama |
| <input type="radio"/> C. Autobiography | <input type="radio"/> D. Memoir |

Select the correct meaning of the following sentences.

One who is not married

Please mark (✓) for the correct answer.

- | | |
|------------------------------------|-------------------------------------|
| <input type="radio"/> A. Boyfriend | <input type="radio"/> B. Girlfriend |
| <input type="radio"/> C. Bachelor | <input type="radio"/> D. Masculine |

Select the correct meaning of the following sentences.

One who sells things door to door

Please mark (✓) for the correct answer.

- | | |
|-------------------------------------|---------------------------------|
| <input type="radio"/> A. Seller | <input type="radio"/> B. Vendor |
| <input type="radio"/> C. Shopkeeper | <input type="radio"/> D. Miser |

Choose the correct tense of the following sentences.

Why are you crying?

Please mark (✓) for the correct answer.

- | | |
|--|---|
| <input type="radio"/> A. Simple Present | <input type="radio"/> B. Present Continuous |
| <input type="radio"/> C. Past Continuous | <input type="radio"/> D. Future Continuous |

Read the following passage carefully and answer the questions that follow.

Imagine what life would be like if you weren't able to see or hear. Everything would be dark and silent all the time. Helen Keller never had to imagine it, because she lived it. She was born on June 27, 1880 in Alabama. She was very healthy and had no medical problems.

But when Helen was 1½ years old, something unexpected happened and she got very sick. For about a week, she had a terrible fever and headache. Doctors suspected she contracted scarlet fever or meningitis. She survived, but she lost her sight and hearing at the same time. Her parents were shocked.

As Helen grew up, she tried to communicate with her family and friends. It was sometimes frustrating for her because it was hard to let others know what she needed. Helen quickly realised she was different and her parents recognised she needed help.

They called the Perkins Institute for the Blind in Boston to get advice. The director said Anne Sullivan might be able to help. Anne used to attend the school when she was blind, but she got a special surgery when she was 15 and was able to see. Since she understood what it's like to be blind, people thought she could really help Helen.

Helen Keller is a great example of someone who was always determined and never let obstacles get in her way. She took the challenges life presented her and turned them into something positive. As she grew older, she wanted to help others who had the same challenges. She became an activist and her mission was to inspire others. She spent her life raising money and awareness for the rights of women and people with disabilities. She wrote over a dozen books, traveled all over the country and lived until she was 87 years old.

Who was Anne Sullivan?

Please mark (✓) for the correct answer.

- | | |
|--|--|
| <input type="radio"/> A. Helen's friend | <input type="radio"/> B. Helen's teacher |
| <input type="radio"/> C. Helen's classmate | <input type="radio"/> D. Helen's neighbour |

Question: 125 of 200

QID: 13540

Marks: 1

Choose the correct tense of the following sentences.
The farmer had paid his taxes.

Please mark (✓) for the correct answer.

- | | |
|--|--|
| <input type="radio"/> A. Present Perfect | <input type="radio"/> B. Simple Past |
| <input type="radio"/> C. Past Perfect | <input type="radio"/> D. Past Perfect Continuous |

Question: 126 of 200

QID: 13541

Marks: 1

Choose the correct tense of the following sentences.
Vidya will go to a party.

Please mark (✓) for the correct answer.

- | | |
|--|---|
| <input type="radio"/> A. Present Perfect | <input type="radio"/> B. Present Continuous |
| <input type="radio"/> C. Future Continuous | <input type="radio"/> D. Simple Future |

Mark the option with the correct spelling of the given words.

Please mark (✓) for the correct answer.

- | | |
|-------------------------------------|-------------------------------------|
| <input type="radio"/> A. Centigrede | <input type="radio"/> B. Centregade |
| <input type="radio"/> C. Centigrate | <input type="radio"/> D. Centigrade |

Mark the option with the correct spelling of the given words.

Please mark (✓) for the correct answer.

- | | |
|--------------------------------------|-------------------------------------|
| <input type="radio"/> A. Maegistrate | <input type="radio"/> B. Magistrate |
| <input type="radio"/> C. Magastrate | <input type="radio"/> D. Magistrite |

Rearrange the following words/group of words to make meaningful sentences. Choose the correct sequence given in the options.

information on (A)/ internet is (B)/ any topic (C)/ a source of (D).

Please mark (✓) for the correct answer.

- | | |
|-------------------------------|-------------------------------|
| <input type="radio"/> A. ABCD | <input type="radio"/> B. DCBA |
| <input type="radio"/> C. BDAC | <input type="radio"/> D. CBDA |

Rearrange the following words/group of words to make meaningful sentences. Choose the correct sequence given in the options.

English (A)/ Rashmi (B)/ fluently (C)/ speaks (D).

Please mark (✓) for the correct answer.

- | | |
|-------------------------------|-------------------------------|
| <input type="radio"/> A. BDAC | <input type="radio"/> B. ACBD |
| <input type="radio"/> C. ABCD | <input type="radio"/> D. ADCB |

Read the following passage carefully and answer the questions that follow.

Imagine what life would be like if you weren't able to see or hear. Everything would be dark and silent all the time. Helen Keller never had to imagine it, because she lived it. She was born on June 27, 1880 in Alabama. She was very healthy and had no medical problems.

But when Helen was 1½ years old, something unexpected happened and she got very sick. For about a week, she had a terrible fever and headache. Doctors suspected she contracted scarlet fever or meningitis. She survived, but she lost her sight and hearing at the same time. Her parents were shocked.

As Helen grew up, she tried to communicate with her family and friends. It was sometimes frustrating for her because it was hard to let others know what she needed. Helen quickly realised she was different and her parents recognised she needed help.

They called the Perkins Institute for the Blind in Boston to get advice. The director said Anne Sullivan might be able to help. Anne used to attend the school when she was blind, but she got a special surgery when she was 15 and was able to see. Since she understood what it's like to be blind, people thought she could really help Helen.

Helen Keller is a great example of someone who was always determined and never let obstacles get in her way. She took the challenges life presented her and turned them into something positive. As she grew older, she wanted to help others who had the same challenges. She became an activist and her mission was to inspire others. She spent her life raising money and awareness for the rights of women and people with disabilities. She wrote over a dozen books, traveled all over the country and lived until she was 87 years old.

Find the word in the passage which means the same as 'Disorder'.

Please mark (✓) for the correct answer.

- | | |
|-------------------------------------|------------------------------------|
| <input type="radio"/> A. Disability | <input type="radio"/> B. Challenge |
| <input type="radio"/> C. Meningitis | <input type="radio"/> D. Obstacle |

Question: 132 of 200

QID: 13505

Marks: 1

Choose the correct conjunction to fill the blank.
I'd like a Pizza a salad for lunch.

Please mark (✓) for the correct answer.

- | | |
|------------------------------|------------------------------|
| <input type="radio"/> A. and | <input type="radio"/> B. or |
| <input type="radio"/> C. if | <input type="radio"/> D. yet |

Question: 133 of 200

QID: 13506

Marks: 1

Brittle (Choose the similar word)

Please mark (✓) for the correct answer.

- | | |
|----------------------------------|------------------------------------|
| <input type="radio"/> A. Tough | <input type="radio"/> B. Enduring |
| <input type="radio"/> C. Clarify | <input type="radio"/> D. Breakable |

Rearrange the following words to form a meaningful sentence.

twelve/until/the//can/clock/strikes/stay/out

Please mark (✓) for the correct answer.

- ☐ A. I can stay out until the clock strikes twelve.
- ☐ B. Until the clock strikes I can stay out twelve.
- ☐ C. I can clock twelve strikes stay out until the.
- ☐ D. The clock strikes twelve until I can stay out.

Rearrange the following words to form a meaningful sentence.

hiding/she/the/was/table/under.

Please mark (✓) for the correct answer.

- ☐ A. She hiding was the under table.
- ☐ B. She was hiding the under table.
- ☐ C. She was hiding under the table.
- ☐ D. The table was hiding under she.

A place where books are issued and returned after reading is called

Please mark (✓) for the correct answer.

- ☐ A. Library
- ☐ B. Museum
- ☐ C. Store
- ☐ D. Clinic

Choose one word for the given sentence. One who eats everything.

Please mark (✓) for the correct answer.

- ☐ A. Carnivorous
- ☐ B. Omnivorous
- ☐ C. Herbivorous
- ☐ D. Piscivorous

Choose the plural of the given word: 'Father in law'.

Please mark (✓) for the correct answer.

- ☐ A. Father in laws
- ☐ B. Father-in-law
- ☐ C. Fathers-in-law
- ☐ D. Fathers-in-laws

Choose the correct masculine gender of 'Goose'.

Please mark (✓) for the correct answer.

- ☐ A. Gander ☐ B. He-goose
☐ C. Goose-he ☐ D. Buck

Choose the word opposite in meaning to the word 'Bravery'.

Please mark (✓) for the correct answer.

- ☐ A. Soldier ☐ B. Cowardice
☐ C. Triumphant ☐ D. Detest

Read the passage and answer the questions that follow.

Savannah and Charlotte worked real hard all summer to prepare for the end of summer picnic. Savannah grew tomatoes and green peppers in her garden. Charlotte lives on a farm and since the spring has been growing corn, lettuce, and grapes. A week before the picnic both girls harvested and packed their produce. They decided that all of their hard work deserved a reward. They charged others for their produce. Savannah charged one dollar for one tomato or green pepper. Charlotte charged one dollar for a head of lettuce, fifty cents for an ear of corn, and five cents for a grape.

Charlotte grew for the end of summer picnic.

Please mark (✓) for the correct answer.

- ☐ A. tomatoes ☐ B. corn
☐ C. lettuce ☐ D. Both 'b' and 'c'

Read the passage and answer the questions that follow.

Savannah and Charlotte worked real hard all summer to prepare for the end of summer picnic. Savannah grew tomatoes and green peppers in her garden. Charlotte lives on a farm and since the spring has been growing corn, lettuce, and grapes. A week before the picnic both girls harvested and packed their produce. They decided that all of their hard work deserved a reward. They charged others for their produce. Savannah charged one dollar for one tomato or green pepper. Charlotte charged one dollar for a head of lettuce, fifty cents for an ear of corn, and five cents for a grape.

Where does Charlotte live?

Please mark (✓) for the correct answer.

- ☐ A. Mattydale ☐ B. On a farm
☐ C. In the circus ☐ D. On a boat

Read the passage and answer the questions that follow.

Savannah and Charlotte worked real hard all summer to prepare for the end of summer picnic. Savannah grew tomatoes and green peppers in her garden. Charlotte lives on a farm and since the spring has been growing corn, lettuce, and grapes. A week before the picnic both girls harvested and packed their produce. They decided that all of their hard work deserved a reward. They charged others for their produce. Savannah charged one dollar for one tomato or green pepper. Charlotte charged one dollar for a head of lettuce, fifty cents for an ear of corn, and five cents for a grape.

If you were to go to a picnic and purchase 3 tomatoes and 3 ears of corn from the girls, how much would it cost?

Please mark (✓) for the correct answer.

- ☐ A. \$1.50
- ☐ B. \$3.50
- ☐ C. \$4.00
- ☐ D. \$4.50

Read the passage and answer the questions that follow.

Savannah and Charlotte worked real hard all summer to prepare for the end of summer picnic. Savannah grew tomatoes and green peppers in her garden. Charlotte lives on a farm and since the spring has been growing corn, lettuce, and grapes. A week before the picnic both girls harvested and packed their produce. They decided that all of their hard work deserved a reward. They charged others for their produce. Savannah charged one dollar for one tomato or green pepper. Charlotte charged one dollar for a head of lettuce, fifty cents for an ear of corn, and five cents for a grape.

If you were to go to the picnic and purchase 1 tomato, 1 pepper, 2 ears of corn and 4 grapes from the girls, how much would it cost?

Please mark (✓) for the correct answer.

- ☐ A. \$2.20
- ☐ B. \$2.50
- ☐ C. \$3.20
- ☐ D. \$3.50

Select the word from the options for the given definition.
One who eats everything

Please mark (✓) for the correct answer.

- ☐ A. Cannibal
- ☐ B. Herbivorous
- ☐ C. Omnivorous
- ☐ D. Carnivorous

Select the word from the options for the given definition.

One who hates marriage

Please mark (✓) for the correct answer.

- ☐ A. Misogamist
- ☐ B. Misogynist
- ☐ C. Misanthrope
- ☐ D. Priest

Question: 147 of 200

QID: 13548

Marks: 1

A fleet of ships or

Please mark (✓) for the correct answer.

- ☐ A. Vehicles ☐ B. Lions
- ☐ C. Monkeys ☐ D. Aeroplanes

Question: 148 of 200

QID: 13549

Marks: 1

His friend his food.

Please mark (✓) for the correct answer.

- ☐ A. could eat ☐ B. eating
- ☐ C. eaten ☐ D. eat

Question: 149 of 200

QID: 13550

Marks: 1

Neither you nor he to blame.

Please mark (✓) for the correct answer.

- ☐ A. are ☐ B. were
- ☐ C. have ☐ D. is

Question: 150 of 200

QID: 13551

Marks: 1

Radha is than Sonal.

Please mark (✓) for the correct answer.

- ☐ A. beautiful ☐ B. more beautiful
- ☐ C. very beautiful ☐ D. most beautiful

Question: 151 of 200

QID: 13584

Marks: 1

For which country is the Lion its national symbol?

Please mark (✓) for the correct answer.

- ☐ A. Sri Lanka ☐ B. Norway
- ☐ C. Belgium ☐ D. All of these

Question: 152 of 200

QID: 13585

Marks: 1

Which is the highest extinct volcano in the world?

Please mark (✓) for the correct answer.

- | | |
|--|--------------------------------------|
| <input type="radio"/> A. Nevados Ojos del Salado | <input type="radio"/> B. Fujiyama |
| <input type="radio"/> C. Kanchenjunga | <input type="radio"/> D. Kilimanjaro |

Question: 153 of 200

QID: 13586

Marks: 1

Which award is the India's first highest Civilian Award?

Please mark (✓) for the correct answer.

- | | |
|--|-------------------------------------|
| <input type="radio"/> A. Bharat Ratna | <input type="radio"/> B. Padma Shri |
| <input type="radio"/> C. Padma Vibhushan | <input type="radio"/> D. Vir Chakra |

Question: 154 of 200

QID: 13587

Marks: 1

What did Gandhiji do on 15th August 1947?

Please mark (✓) for the correct answer.

- | | |
|---|--|
| <input type="radio"/> A. He addressed a gathering at the Red Fort | <input type="radio"/> B. He spent the day in fasting and prayer |
| <input type="radio"/> C. He broadcast a speech on All India Radio | <input type="radio"/> D. He was touring the country to stop the communal riots |

Question: 155 of 200

QID: 13588

Marks: 1

Pongal is the harvest festival of which state?

Please mark (✓) for the correct answer.

- | | |
|---------------------------------|-------------------------------------|
| <input type="radio"/> A. Odisha | <input type="radio"/> B. Assam |
| <input type="radio"/> C. Kerala | <input type="radio"/> D. Tamil Nadu |

Question: 156 of 200

QID: 13589

Marks: 1

In which country were books printed for the first time?

Please mark (✓) for the correct answer.

- | | |
|--------------------------------|----------------------------------|
| <input type="radio"/> A. China | <input type="radio"/> B. Germany |
| <input type="radio"/> C. India | <input type="radio"/> D. Japan |

Question: 157 of 200

QID: 13590

Marks: 1

Which of the following cities is the winter capital of Jammu & Kashmir?

Please mark (✓) for the correct answer.

- ☐ A. Jammu ☐ B. Srinagar
☐ C. Shimla ☐ D. Dehradun

Question: 158 of 200

QID: 13591

Marks: 1

How many spokes does the wheel in our National Flag have?

Please mark (✓) for the correct answer.

- ☐ A. 12 ☐ B. 16
☐ C. 24 ☐ D. Not defined

Question: 159 of 200

QID: 13592

Marks: 1

Kabaddi is the national game of which country?

Please mark (✓) for the correct answer.

- ☐ A. Nepal ☐ B. Bangladesh
☐ C. India ☐ D. Turkey

Question: 160 of 200

QID: 13593

Marks: 1

..... is the only Indian Para-Military force which allows women in combat roles.

Please mark (✓) for the correct answer.

- ☐ A. BSF ☐ B. ITPB
☐ C. SSB ☐ D. ICG

Which of the following pairs are incorrectly matched?

Nickname	Actual Name
A. Gulzar	Sampooran Singh Kalra
B. Iron man of India	Vallabhbhai Patel
C. Loknayak	Jayaprakash Narayan
D. O Henry	William Sydney Porter

Select the correct answer using the code given below:

Please mark (✓) for the correct answer.

- ☐ A. Only C ☐ B. Both A and C
- ☐ C. Both A and D ☐ D. None of these

Question: 162 of 200

QID: 13595

Marks: 1

Jhumar is the folk dance popular in which state of India?

Please mark (✓) for the correct answer.

- ☐ A. Punjab ☐ B. Rajasthan
- ☐ C. Bihar ☐ D. Haryana

Question: 163 of 200

QID: 13596

Marks: 1

Where is the Salt Lake Stadium?

Please mark (✓) for the correct answer.

- ☐ A. Salt Flats, Utah, USA ☐ B. New York, USA
- ☐ C. Kolkata, India ☐ D. London, England

Question: 164 of 200

QID: 13597

Marks: 1

What is the full form of the abbreviation EVM?

Please mark (✓) for the correct answer.

- ☐ A. Election Voting Machine ☐ B. Electronic Voting Machine
- ☐ C. Election Voter Method ☐ D. Electronic Voting Mechanism

Question: 165 of 200

QID: 13598

Marks: 1

The McMahon Line marks which border of India?

Please mark (✓) for the correct answer.

- ☐ A. India – Pakistan border in the North-West
- ☐ B. India's border with Bangladesh
- ☐ C. India – China border in the North-East
- ☐ D. India's border with Myanmar

Question: 166 of 200

QID: 13599

Marks: 1

The Sunderbans is well-known for the protection of which wild animal?

Please mark (✓) for the correct answer.

- ☐ A. Royal Bengal Tiger
- ☐ B. Asiatic Lion
- ☐ C. Wild Elephant
- ☐ D. One-horned Rhinoceros

Question: 167 of 200

QID: 13600

Marks: 1

Who was known by the nickname 'Bapu'?

Please mark (✓) for the correct answer.

- ☐ A. Rabindranath Tagore
- ☐ B. MK Gandhi
- ☐ C. Chittaranjan Das
- ☐ D. Dadabhai Naoroji

Question: 168 of 200

QID: 13601

Marks: 1

Where is the Grand Canyon?

Please mark (✓) for the correct answer.

- ☐ A. On the border between Zimbabwe and Zambia in Africa
- ☐ B. Colorado, USA
- ☐ C. Mexico
- ☐ D. Pakistan

Question: 169 of 200

QID: 13552

Marks: 1

In which government services, ranks like DGP, IGP are given?

Please mark (✓) for the correct answer.

- ☐ A. Indian Air Force
- ☐ B. Indian Navy
- ☐ C. Indian Army
- ☐ D. Indian Police Service

Question: 170 of 200

QID: 13553

Marks: 1

Which of the following is not matched correctly?

Please mark (✓) for the correct answer.

- | | |
|--|--|
| <input type="radio"/> A. Pankaj Advani - Billiards | <input type="radio"/> B. Hima Das - Sprinter |
| <input type="radio"/> C. Mary Kom - Wrestling | <input type="radio"/> D. Deepa Malik - Athletics |

Question: 171 of 200

QID: 13554

Marks: 1

Which Mughal king started a new religion named Din-i-ilahi?

Please mark (✓) for the correct answer.

- | | |
|-----------------------------------|------------------------------------|
| <input type="radio"/> A. Akbar | <input type="radio"/> B. Shahjahan |
| <input type="radio"/> C. Jahangir | <input type="radio"/> D. Aurangzeb |

Question: 172 of 200

QID: 13555

Marks: 1

Which Indian state is known as a land of five rivers?

Please mark (✓) for the correct answer.

- | | |
|--|---|
| <input type="radio"/> A. Uttar Pradesh | <input type="radio"/> B. Punjab |
| <input type="radio"/> C. Uttarakhand | <input type="radio"/> D. Andhra Pradesh |

Question: 173 of 200

QID: 13556

Marks: 1

Who is called 'Tiger of Mysore'?

Please mark (✓) for the correct answer.

- | | |
|--------------------------------------|---------------------------------------|
| <input type="radio"/> A. Tatita Tope | <input type="radio"/> B. Nana Saheb |
| <input type="radio"/> C. Tipu Sultan | <input type="radio"/> D. Kunwar Singh |

Question: 174 of 200

QID: 13557

Marks: 1

Diseases that spread from one person to another are called

Please mark (✓) for the correct answer.

- | | |
|--|--|
| <input type="radio"/> A. Communicable diseases | <input type="radio"/> B. Degenerative diseases |
| <input type="radio"/> C. Non-communicable diseases | <input type="radio"/> D. None of the above |

Question: 175 of 200

QID: 13558

Marks: 1

Who was the first sportsperson to receive Bharat Ratna?

Please mark (✓) for the correct answer.

- ☐ A. Balbir Singh Sr. ☐ B. Sachin Tendulkar
- ☐ C. Dhyan Chand ☐ D. Milkha Singh

Question: 176 of 200

QID: 13559

Marks: 1

The ceremony known as 'Beating Retreat' is held at

Please mark (✓) for the correct answer.

- ☐ A. Rashtrapati Bhavan ☐ B. Red Fort
- ☐ C. India Gate ☐ D. Vijay Chowk

Question: 177 of 200

QID: 13560

Marks: 1

Salim Ali is popularly known as

Please mark (✓) for the correct answer.

- ☐ A. Forest Man of India ☐ B. Water Man of India
- ☐ C. Birdman of India ☐ D. Milkman of India

Question: 178 of 200

QID: 13561

Marks: 1

To protect the grain from microorganisms, farmers use leaves of

Please mark (✓) for the correct answer.

- ☐ A. Coriander ☐ B. Neem
- ☐ C. Mango ☐ D. Mulberry

Question: 179 of 200

QID: 13562

Marks: 1

Which Mughal emperor was defeated by Sher Shah Suri?

Please mark (✓) for the correct answer.

- ☐ A. Babur ☐ B. Akbar
- ☐ C. Shahjahan ☐ D. Humayun

Question: 180 of 200

QID: 13563

Marks: 1

Panchatantra has been written by

Please mark (✓) for the correct answer.

- ☐ A. Surdas ☐ B. Prem Chand
☐ C. Vishnu Sharma ☐ D. Tulsidas

Question: 181 of 200

QID: 13564

Marks: 1

Which of the following is the most fertile soil found in India?

Please mark (✓) for the correct answer.

- ☐ A. Black Soil ☐ B. Laterite Soil
☐ C. Red Soil ☐ D. Alluvial Soil

Question: 182 of 200

QID: 13565

Marks: 1

Name the young ones of cat.

Please mark (✓) for the correct answer.

- ☐ A. Kid ☐ B. Calf
☐ C. Lamb ☐ D. Kitten

Question: 183 of 200

QID: 13566

Marks: 1

The image of 'Mangalyaan' can be found on _____ note.

Please mark (✓) for the correct answer.

- ☐ A. ₹50 ☐ B. ₹200
☐ C. ₹2000 ☐ D. ₹100

Question: 184 of 200

QID: 13567

Marks: 1

Who is the world's first female amputee (handicap) to climb Mount Everest?

Please mark (✓) for the correct answer.

- ☐ A. Bachendri Pal ☐ B. Arunima Sinha
☐ C. Santosh Yadav ☐ D. Malavath Purna

Question: 185 of 200

QID: 13568

Marks: 1

Jallianwala Bagh Massacre took place on the day of

Please mark (✓) for the correct answer.

- ☐ A. Pongal ☐ B. Lohri
- ☐ C. Baisakhi ☐ D. Guru Parb

Question: 186 of 200

QID: 13569

Marks: 1

Which part of a plant absorbs water and nutrients?

Please mark (✓) for the correct answer.

- ☐ A. Stem ☐ B. Flowers
- ☐ C. Roots ☐ D. Leaves

Question: 187 of 200

QID: 13570

Marks: 1

Kanchenjunga Mountain is located in

Please mark (✓) for the correct answer.

- ☐ A. Himachal Pradesh ☐ B. Jammu and Kashmir
- ☐ C. Ladakh ☐ D. Sikkim

Question: 188 of 200

QID: 13571

Marks: 1

What is the name of the Garden situated inside the Rashtrapati Bhavan?

Please mark (✓) for the correct answer.

- ☐ A. Lodhi Garden ☐ B. Japanese Garden
- ☐ C. Mughal Garden ☐ D. Buddha Garden

Question: 189 of 200

QID: 13572

Marks: 1

Which disease is not caused by virus?

Please mark (✓) for the correct answer.

- ☐ A. Influenza ☐ B. Measles
- ☐ C. Yellow fever ☐ D. Cholera

Question: 190 of 200

QID: 13573

Marks: 1

Nathu La, Rohtang La and Shipki La are all types of what?

Please mark (✓) for the correct answer.

- ☐ A. Mountain Passes ☐ B. River Valleys
- ☐ C. Highways ☐ D. Peaks

Question: 191 of 200

QID: 13574

Marks: 1

The optimum temperature for seed germination is 25°C to

Please mark (✓) for the correct answer.

- ☐ A. 30°C ☐ B. 40°C
- ☐ C. 27°C ☐ D. 35°C

Question: 192 of 200

QID: 13575

Marks: 1

Nile river flows in which continent?

Please mark (✓) for the correct answer.

- ☐ A. Asia ☐ B. Africa
- ☐ C. Antarctica ☐ D. Australia

Question: 193 of 200

QID: 13576

Marks: 1

What is the most intelligent mammal on Earth?

Please mark (✓) for the correct answer.

- ☐ A. Dogs ☐ B. Apes
- ☐ C. Dolphin ☐ D. Horse

Question: 194 of 200

QID: 13577

Marks: 1

Which of the following awards is given for acts of bravery on the battlefield during war in India?

Please mark (✓) for the correct answer.

- ☐ A. Param Vir Chakra ☐ B. Ashok Chakra
- ☐ C. Vir Chakra ☐ D. Padma Shri

Question: 195 of 200

QID: 13578

Marks: 1

Which is the highest mountain peak in Japan?

Please mark (✓) for the correct answer.

- ☐ A. Fujiyama ☐ B. Kilimanjaro
- ☐ C. Elbruz ☐ D. Mount K2

Question: 196 of 200

QID: 13579

Marks: 1

What is the lowest ranked Indian Air Force officer called?

Please mark (✓) for the correct answer.

- ☐ A. Wing Commander ☐ B. Flying Officer
- ☐ C. Pilot Officer ☐ D. Test Pilot

Question: 197 of 200

QID: 13580

Marks: 1

What is the work of a Meteorologist?

Please mark (✓) for the correct answer.

- ☐ A. Solving problems related to healthy nutrition ☐ B. Ensuring the proper measurement of physical quantities
- ☐ C. Forecasting the weather ☐ D. Forecasting earthquakes

Question: 198 of 200

QID: 13581

Marks: 1

Tuberculosis is caused by

Please mark (✓) for the correct answer.

- ☐ A. Sputum of an infected person ☐ B. Coughing and sneezing of an infected person
- ☐ C. Bacteria coming through the air we breathe ☐ D. All of the above

Question: 199 of 200

QID: 13582

Marks: 1

Who was the President of the Constituent Assembly?

Please mark (✓) for the correct answer.

- ☐ A. Sarojini Naidu ☐ B. Dr. BR Ambedkar
- ☐ C. Chakravarthi Rajagopalachari ☐ D. Dr. Rajendra Prasad

'The Guide' novel, on which a successful film was based, has been written by

Please mark (✓) for the correct answer.

- | | |
|---|--|
| <input type="radio"/> A. Oscar Wilde | <input type="radio"/> B. RK Narayan |
| <input type="radio"/> C. Munshi Premchand | <input type="radio"/> D. Rabindranath Tagore |

--- END OF QUESTION PAPER ---



Answer Key

No	Question Type	QID	Correct Answer
Question - 1	Multiple Choice (Radiobutton)	13412	B
Question - 2	Multiple Choice (Radiobutton)	13413	C
Question - 3	Multiple Choice (Radiobutton)	13414	D
Question - 4	Multiple Choice (Radiobutton)	13415	A
Question - 5	Multiple Choice (Radiobutton)	13416	B
Question - 6	Multiple Choice (Radiobutton)	13417	D
Question - 7	Multiple Choice (Radiobutton)	13418	B
Question - 8	Multiple Choice (Radiobutton)	13419	A
Question - 9	Multiple Choice (Radiobutton)	13420	B
Question - 10	Multiple Choice (Radiobutton)	13421	C
Question - 11	Multiple Choice (Radiobutton)	13422	D
Question - 12	Multiple Choice (Radiobutton)	13423	A
Question - 13	Multiple Choice (Radiobutton)	13424	B
Question - 14	Multiple Choice (Radiobutton)	13425	C
Question - 15	Multiple Choice (Radiobutton)	13426	D
Question - 16	Multiple Choice (Radiobutton)	13427	B
Question - 17	Multiple Choice (Radiobutton)	13428	A
Question - 18	Multiple Choice (Radiobutton)	13429	B
Question - 19	Multiple Choice (Radiobutton)	13430	A
Question - 20	Multiple Choice (Radiobutton)	13431	B
Question - 21	Multiple Choice (Radiobutton)	13432	C
Question - 22	Multiple Choice (Radiobutton)	13433	D
Question - 23	Multiple Choice (Radiobutton)	13434	D
Question - 24	Multiple Choice (Radiobutton)	13435	B
Question - 25	Multiple Choice (Radiobutton)	13436	B
Question - 26	Multiple Choice (Radiobutton)	13437	A
Question - 27	Multiple Choice (Radiobutton)	13438	B
Question - 28	Multiple Choice (Radiobutton)	13439	C
Question - 29	Multiple Choice (Radiobutton)	13440	A
Question - 30	Multiple Choice (Radiobutton)	13441	B
Question - 31	Multiple Choice (Radiobutton)	13442	D
Question - 32	Multiple Choice (Radiobutton)	13443	C
Question - 33	Multiple Choice (Radiobutton)	13444	B
Question - 34	Multiple Choice (Radiobutton)	13445	A
Question - 35	Multiple Choice (Radiobutton)	13446	A
Question - 36	Multiple Choice (Radiobutton)	13447	C
Question - 37	Multiple Choice (Radiobutton)	13448	D
Question - 38	Multiple Choice (Radiobutton)	13449	C
Question - 39	Multiple Choice (Radiobutton)	13450	A
Question - 40	Multiple Choice (Radiobutton)	13451	D
Question - 41	Multiple Choice (Radiobutton)	13403	D
Question - 42	Multiple Choice (Radiobutton)	13404	D

No	Question Type	QID	Correct Answer
Question - 43	Multiple Choice (Radiobutton)	13405	A
Question - 44	Multiple Choice (Radiobutton)	13406	C
Question - 45	Multiple Choice (Radiobutton)	13407	A
Question - 46	Multiple Choice (Radiobutton)	13408	B
Question - 47	Multiple Choice (Radiobutton)	13409	A
Question - 48	Multiple Choice (Radiobutton)	13410	B
Question - 49	Multiple Choice (Radiobutton)	13411	C
Question - 50	Multiple Choice (Radiobutton)	13402	B
Question - 51	Multiple Choice (Radiobutton)	13469	C
Question - 52	Multiple Choice (Radiobutton)	13470	C
Question - 53	Multiple Choice (Radiobutton)	13471	D
Question - 54	Multiple Choice (Radiobutton)	13472	B
Question - 55	Multiple Choice (Radiobutton)	13490	B
Question - 56	Multiple Choice (Radiobutton)	13491	A
Question - 57	Multiple Choice (Radiobutton)	13492	D
Question - 58	Multiple Choice (Radiobutton)	13493	C
Question - 59	Multiple Choice (Radiobutton)	13494	A
Question - 60	Multiple Choice (Radiobutton)	13495	B
Question - 61	Multiple Choice (Radiobutton)	13496	D
Question - 62	Multiple Choice (Radiobutton)	13497	A
Question - 63	Multiple Choice (Radiobutton)	13498	D
Question - 64	Multiple Choice (Radiobutton)	13499	A
Question - 65	Multiple Choice (Radiobutton)	13483	D
Question - 66	Multiple Choice (Radiobutton)	13484	C
Question - 67	Multiple Choice (Radiobutton)	13485	A
Question - 68	Multiple Choice (Radiobutton)	13486	C
Question - 69	Multiple Choice (Radiobutton)	13487	A
Question - 70	Multiple Choice (Radiobutton)	13488	D
Question - 71	Multiple Choice (Radiobutton)	13489	C
Question - 72	Multiple Choice (Radiobutton)	13476	A
Question - 73	Multiple Choice (Radiobutton)	13477	C
Question - 74	Multiple Choice (Radiobutton)	13478	B
Question - 75	Multiple Choice (Radiobutton)	13479	A
Question - 76	Multiple Choice (Radiobutton)	13480	C
Question - 77	Multiple Choice (Radiobutton)	13481	D
Question - 78	Multiple Choice (Radiobutton)	13482	C
Question - 79	Multiple Choice (Radiobutton)	13452	D
Question - 80	Multiple Choice (Radiobutton)	13453	C
Question - 81	Multiple Choice (Radiobutton)	13454	C
Question - 82	Multiple Choice (Radiobutton)	13455	C
Question - 83	Multiple Choice (Radiobutton)	13456	A
Question - 84	Multiple Choice (Radiobutton)	13457	A
Question - 85	Multiple Choice (Radiobutton)	13458	D
Question - 86	Multiple Choice (Radiobutton)	13459	A
Question - 87	Multiple Choice (Radiobutton)	13460	A
Question - 88	Multiple Choice (Radiobutton)	13461	A

No	Question Type	QID	Correct Answer	
Question - 89	Multiple Choice (Radiobutton)	13462	D	
Question - 90	Multiple Choice (Radiobutton)	13463	C	
Question - 91	Multiple Choice (Radiobutton)	13500	C	
Question - 92	Multiple Choice (Radiobutton)	13501	B	
Question - 93	Multiple Choice (Radiobutton)	13464	C	
Question - 94	Multiple Choice (Radiobutton)	13465	A	
Question - 95	Multiple Choice (Radiobutton)	13466	D	
Question - 96	Multiple Choice (Radiobutton)	13467	C	
Question - 97	Multiple Choice (Radiobutton)	13468	D	
Question - 98	Multiple Choice (Radiobutton)	13473	B	
Question - 99	Multiple Choice (Radiobutton)	13474	B	
Question - 100	Multiple Choice (Radiobutton)	13475	C	
Question - 101	Multiple Choice (Radiobutton)	13514	C	
Question - 102	Multiple Choice (Radiobutton)	13515	A	
Question - 103	Multiple Choice (Radiobutton)	13516	A	
Question - 104	Multiple Choice (Radiobutton)	13517	C	
Question - 105	Multiple Choice (Radiobutton)	13518	D	
Question - 106	Multiple Choice (Radiobutton)	13519	A	
Question - 107	Multiple Choice (Radiobutton)	13520	B	
Question - 108	Multiple Choice (Radiobutton)	13521	B	
Question - 109	Multiple Choice (Radiobutton)	13522	A	
Question - 110	Multiple Choice (Radiobutton)	13523	C	
Question - 111	Multiple Choice (Radiobutton)	13524	D	
Question - 112	Multiple Choice (Radiobutton)	13525	B	
Question - 113	Multiple Choice (Radiobutton)	13526	C	
Question - 114	Multiple Choice (Radiobutton)	13527	A	
Question - 115	Multiple Choice (Radiobutton)	13538	A	
Question - 116	Multiple Choice (Radiobutton)	13539	D	
Question - 117	Multiple Choice (Radiobutton)	13502	D	
Question - 118	Multiple Choice (Radiobutton)	13532	A	
Question - 119	Multiple Choice (Radiobutton)	13533	B	
Question - 120	Multiple Choice (Radiobutton)	13534	C	
Question - 121	Multiple Choice (Radiobutton)	13535	C	
Question - 122	Multiple Choice (Radiobutton)	13536	B	
Question - 123	Multiple Choice (Radiobutton)	13537	B	
Question - 124	Multiple Choice (Radiobutton)	13503	B	
Question - 125	Multiple Choice (Radiobutton)	13540	C	
Question - 126	Multiple Choice (Radiobutton)	13541	D	
Question - 127	Multiple Choice (Radiobutton)	13542	D	
Question - 128	Multiple Choice (Radiobutton)	13543	B	
Question - 129	Multiple Choice (Radiobutton)	13544	C	
Question - 130	Multiple Choice (Radiobutton)	13545	A	
Question - 131	Multiple Choice (Radiobutton)	13504	A	
Question - 132	Multiple Choice (Radiobutton)	13505	B	
Question - 133	Multiple Choice (Radiobutton)	13506	D	
Question - 134	Multiple Choice (Radiobutton)	13507	A	
Question - 135	Multiple Choice (Radiobutton)	13508	C	

No	Question Type	QID	Correct Answer
Question - 136	Multiple Choice (Radiobutton)	13509	A
Question - 137	Multiple Choice (Radiobutton)	13510	B
Question - 138	Multiple Choice (Radiobutton)	13511	C
Question - 139	Multiple Choice (Radiobutton)	13512	A
Question - 140	Multiple Choice (Radiobutton)	13513	B
Question - 141	Multiple Choice (Radiobutton)	13528	D
Question - 142	Multiple Choice (Radiobutton)	13529	B
Question - 143	Multiple Choice (Radiobutton)	13530	D
Question - 144	Multiple Choice (Radiobutton)	13531	C
Question - 145	Multiple Choice (Radiobutton)	13546	C
Question - 146	Multiple Choice (Radiobutton)	13547	A
Question - 147	Multiple Choice (Radiobutton)	13548	A
Question - 148	Multiple Choice (Radiobutton)	13549	D
Question - 149	Multiple Choice (Radiobutton)	13550	D
Question - 150	Multiple Choice (Radiobutton)	13551	B
Question - 151	Multiple Choice (Radiobutton)	13584	D
Question - 152	Multiple Choice (Radiobutton)	13585	A
Question - 153	Multiple Choice (Radiobutton)	13586	A
Question - 154	Multiple Choice (Radiobutton)	13587	B
Question - 155	Multiple Choice (Radiobutton)	13588	D
Question - 156	Multiple Choice (Radiobutton)	13589	A
Question - 157	Multiple Choice (Radiobutton)	13590	A
Question - 158	Multiple Choice (Radiobutton)	13591	C
Question - 159	Multiple Choice (Radiobutton)	13592	B
Question - 160	Multiple Choice (Radiobutton)	13593	C
Question - 161	Multiple Choice (Radiobutton)	13594	D
Question - 162	Multiple Choice (Radiobutton)	13595	D
Question - 163	Multiple Choice (Radiobutton)	13596	C
Question - 164	Multiple Choice (Radiobutton)	13597	B
Question - 165	Multiple Choice (Radiobutton)	13598	C
Question - 166	Multiple Choice (Radiobutton)	13599	A
Question - 167	Multiple Choice (Radiobutton)	13600	B
Question - 168	Multiple Choice (Radiobutton)	13601	B
Question - 169	Multiple Choice (Radiobutton)	13552	D
Question - 170	Multiple Choice (Radiobutton)	13553	C
Question - 171	Multiple Choice (Radiobutton)	13554	A
Question - 172	Multiple Choice (Radiobutton)	13555	B
Question - 173	Multiple Choice (Radiobutton)	13556	C
Question - 174	Multiple Choice (Radiobutton)	13557	A
Question - 175	Multiple Choice (Radiobutton)	13558	B
Question - 176	Multiple Choice (Radiobutton)	13559	D
Question - 177	Multiple Choice (Radiobutton)	13560	C
Question - 178	Multiple Choice (Radiobutton)	13561	B
Question - 179	Multiple Choice (Radiobutton)	13562	D
Question - 180	Multiple Choice (Radiobutton)	13563	C
Question - 181	Multiple Choice (Radiobutton)	13564	D

No	Question Type	QID	Correct Answer
Question - 182	Multiple Choice (Radiobutton)	13565	D
Question - 183	Multiple Choice (Radiobutton)	13566	C
Question - 184	Multiple Choice (Radiobutton)	13567	B
Question - 185	Multiple Choice (Radiobutton)	13568	C
Question - 186	Multiple Choice (Radiobutton)	13569	C
Question - 187	Multiple Choice (Radiobutton)	13570	D
Question - 188	Multiple Choice (Radiobutton)	13571	C
Question - 189	Multiple Choice (Radiobutton)	13572	D
Question - 190	Multiple Choice (Radiobutton)	13573	A
Question - 191	Multiple Choice (Radiobutton)	13574	A
Question - 192	Multiple Choice (Radiobutton)	13575	B
Question - 193	Multiple Choice (Radiobutton)	13576	C
Question - 194	Multiple Choice (Radiobutton)	13577	A
Question - 195	Multiple Choice (Radiobutton)	13578	A
Question - 196	Multiple Choice (Radiobutton)	13579	B
Question - 197	Multiple Choice (Radiobutton)	13580	C
Question - 198	Multiple Choice (Radiobutton)	13581	D
Question - 199	Multiple Choice (Radiobutton)	13582	D
Question - 200	Multiple Choice (Radiobutton)	13583	B

--- END OF ANSWER KEY ---

