

Name: _____

Date: _____

Exam Instructions

1. The timer has been set for the exam, and a countdown will display the remaining time. When the timer runs out, the exam will end automatically. No further action will be required after that.
2. You can flag any question that you want.
3. If you don't want to submit any of your provided answers, you can clear them.
4. If you choose to drop this exam, it will not be submitted, and no result will be generated.
5. Once you finish the exam, you cannot resume it.

Question: 1 of 200

QID: 12411

Marks: 1

What is the sum of largest and smallest number which can be formed with 5, 7, 2 and 8-digit?

Please mark (✓) for the correct answer.

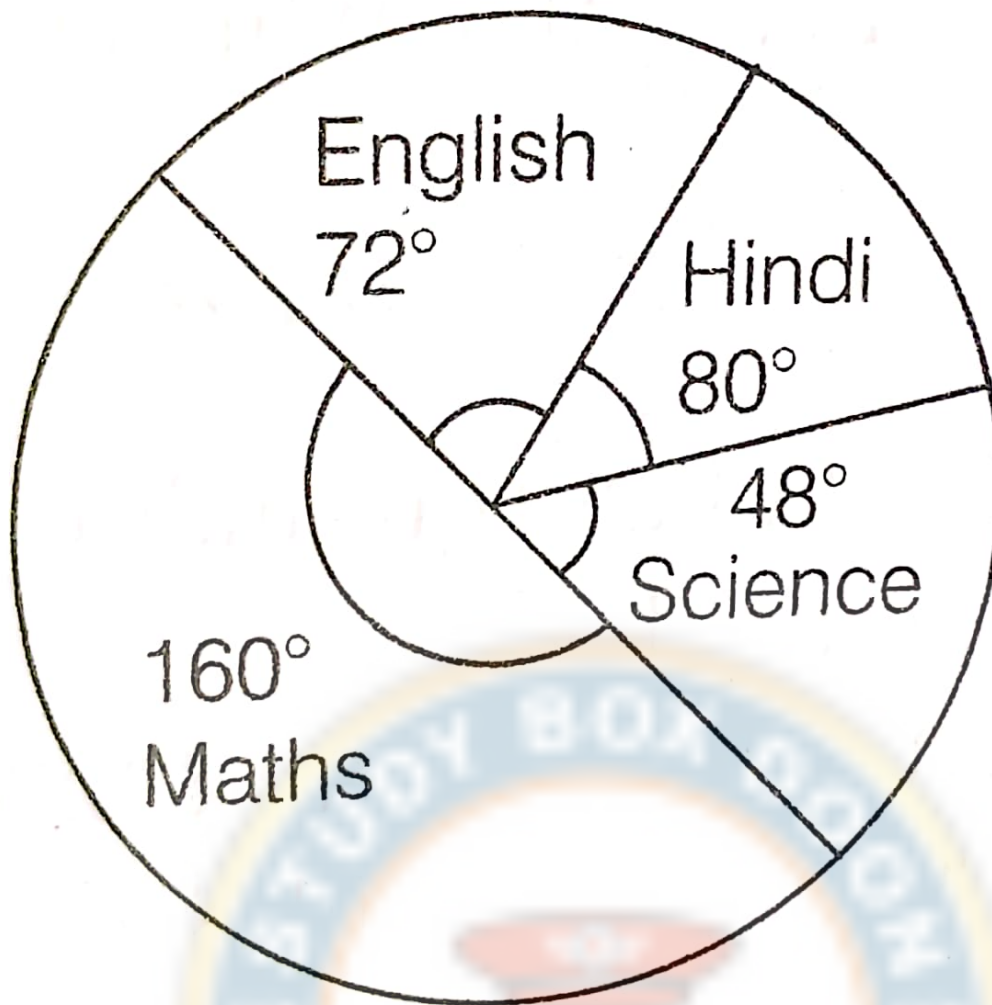
- ☐ A. 11337 ☐ B. 11330
- ☐ C. 13330 ☐ D. 33110

Question: 2 of 200

QID: 12412

Marks: 1

From the given pie-chart calculate what per cent of students teaches English subject?



Please mark (✓) for the correct answer.

- ☐ A. 22% ☐ B. 21%
☐ C. 20% ☐ D. 25%

Question: 3 of 200

QID: 12414

Marks: 1

The total cost of 12 apples and 8 guavas is ₹76 and the total cost of 8 apples and 12 guavas is ₹64. What is the total cost of 1 apple and 1 guava?

Please mark (✓) for the correct answer.

- ☐ A. ₹5 ☐ B. ₹7
☐ C. ₹8 ☐ D. ₹10

Question: 4 of 200

QID: 12415

Marks: 1

The average age of a woman and her daughter is 25 yr. The ratio of their ages is 7 : 3 respectively. What will be the ratio of their ages after 9 yr?

Please mark (✓) for the correct answer.

- ☐ A. 2 : 1 ☐ B. 5 : 2
☐ C. 4 : 1 ☐ D. 11 : 6

Question: 5 of 200

QID: 12416

Marks: 1

A 240 m long train crosses a platform of equal length in 27s. What is the speed of the train (in km/h)?

Please mark (✓) for the correct answer.

- ☐ A. 48 ☐ B. 60
- ☐ C. 56 ☐ D. 64

Question: 6 of 200

QID: 12417

Marks: 1

$4+4.44+44.4+4.04+444$ is equal to:

Please mark (✓) for the correct answer.

- ☐ A. 500.88 ☐ B. 577.2
- ☐ C. 495.22 ☐ D. 472.88

Question: 7 of 200

QID: 12418

Marks: 1

X can complete a piece of work in 30 h and Y can complete it in 24 h. In how many hours will it be completed if they work together?

Please mark (✓) for the correct answer.

- ☐ A. 14.33 h ☐ B. 16.33 h
- ☐ C. 13.33 h ☐ D. 15.33 h

Question: 8 of 200

QID: 12419

Marks: 1

In a park there are 10 rows and 12 columns of mango trees. The distance between the two trees is 2 m and a distance of 1 m is left from all sides of the boundary of the park. The length of the park is

Please mark (✓) for the correct answer.

- ☐ A. 20 m ☐ B. 18 m
- ☐ C. 22 m ☐ D. 24 m

Question: 9 of 200

QID: 12420

Marks: 1

The average age of a class of 39 students is 15 yr. If the age of the teacher be included, the average increases by 3 months. Find the age of the teacher.

Please mark (✓) for the correct answer.

- ☐ A. 35 yr ☐ B. 32 yr
- ☐ C. 30 yr ☐ D. 25 yr

Question: 10 of 200

QID: 12421

Marks: 1

The sum of two numbers is 40 and their difference is 4. The ratio of the numbers is

Please mark (✓) for the correct answer.

- ☐ A. 11 : 9
- ☐ B. 11 : 7
- ☐ C. 21 : 19
- ☐ D. 22 : 9

Question: 11 of 200

QID: 12422

Marks: 1

If ₹2800 is $\frac{2}{7}$ per cent of the value of a house, the worth of the house (in ₹) is

Please mark (✓) for the correct answer.

- ☐ A. ₹960000
- ☐ B. ₹980000
- ☐ C. ₹860000
- ☐ D. ₹880000

Question: 12 of 200

QID: 12423

Marks: 1

When a plot is sold for ₹18700, the owner losses 15%. At what price must the plot be sold in order to gain 15%?

Please mark (✓) for the correct answer.

- ☐ A. ₹20000
- ☐ B. ₹22500
- ☐ C. ₹25300
- ☐ D. ₹25600

Question: 13 of 200

QID: 12424

Marks: 1

The ratio of the cost price and the selling price of an article is 4 : 5. The profit per cent is

Please mark (✓) for the correct answer.

- ☐ A. 20%
- ☐ B. 26%
- ☐ C. 30%
- ☐ D. 25%

Question: 14 of 200

QID: 12425

Marks: 1

Find the fourth proportional to 4, 9 and 12.

Please mark (✓) for the correct answer.

- ☐ A. 27
- ☐ B. 30
- ☐ C. 36
- ☐ D. 24

Question: 15 of 200

QID: 12426

Marks: 1

The daily earnings of a scooter driver in a week are: ₹28.50, ₹33.00, ₹37.50, ₹19.00, ₹24.50, ₹34.00 and ₹26.50 respectively. Find the average daily earning of the scooter driver.

Please mark (✓) for the correct answer.

- ☐ A. ₹31 ☐ B. ₹30
- ☐ C. ₹32 ☐ D. ₹29

Question: 16 of 200

QID: 12427

Marks: 1

Find the amount, if $P = ₹200$, $R = 4\frac{1}{2}\%$ p.a., and $T = 3$ yr.

Please mark (✓) for the correct answer.

- ☐ A. ₹224 ☐ B. ₹223
- ☐ C. ₹222 ☐ D. ₹221

Question: 17 of 200

QID: 12428

Marks: 1

In $\triangle ABC$, if $\angle A + \angle B = 85^\circ$, and $\angle B + \angle C = 160^\circ$, then find $\angle A$ and $\angle B$.

Please mark (✓) for the correct answer.

- ☐ A. $20^\circ, 65^\circ$ ☐ B. $30^\circ, 60^\circ$
- ☐ C. $35^\circ, 25^\circ$ ☐ D. $25^\circ, 45^\circ$

Question: 18 of 200

QID: 12429

Marks: 1

The length and breadth of a field are 300 m and 650 m respectively. Find the area of the field.

Please mark (✓) for the correct answer.

- ☐ A. 195000 m^2 ☐ B. 185000 m^2
- ☐ C. 175000 m^2 ☐ D. 165000 m^2

Question: 19 of 200

QID: 12430

Marks: 1

Find the volume of a cube whose one edge is 5 cm.

Please mark (✓) for the correct answer.

- ☐ A. 148 cm^3 ☐ B. 149 cm^3
- ☐ C. 126 cm^3 ☐ D. 125 cm^3

Question: 20 of 200

QID: 12431

Marks: 1

What is the value of $3x+4x+5x-8x$?

Please mark (✓) for the correct answer.

- ☐ A. $4x$ ☐ B. $3x$
☐ C. $2x$ ☐ D. $7x$

Question: 21 of 200

QID: 12432

Marks: 1

Find the difference between the greatest 5-digit number and the least 5-digit number.

Please mark (✓) for the correct answer.

- ☐ A. 79999 ☐ B. 69999
☐ C. 59999 ☐ D. 89999

Question: 22 of 200

QID: 12433

Marks: 1

Find the LCM of 8, 10 and 12.

Please mark (✓) for the correct answer.

- ☐ A. 115 ☐ B. 215
☐ C. 120 ☐ D. 190

Question: 23 of 200

QID: 12434

Marks: 1

Find a number $\frac{1}{3}$ rd of which exceeds its $\frac{1}{4}$ th by 3.

Please mark (✓) for the correct answer.

- ☐ A. 36 ☐ B. 46
☐ C. 26 ☐ D. 25

Question: 24 of 200

QID: 12435

Marks: 1

Find the cost of 250 quintals of wheat at ₹ 130 per quintal.

Please mark (✓) for the correct answer.

- ☐ A. ₹ 32500 ☐ B. ₹ 32700
☐ C. ₹ 52400 ☐ D. ₹ 37500

Question: 25 of 200

QID: 12413

Marks: 1

If sum of each row, column and diagonals are equal, then the value of aa, bb, cc, and dd respectively, is:

a	0	7
6	b	2
d	c	3

Please mark (✓) for the correct answer.

☐ A. 5, 8, 4, 1☐ B. 8, 4, 5, 1☐ C. 8, 7, 5, 2☐ D. 5, 4, 8, 1**Question: 26 of 200**

QID: 12436

Marks: 1

A man buys a cycle for ₹ 1400 and sells it at a loss of 15%. What is the selling price of the cycle?

Please mark (✓) for the correct answer.

☐ A. ₹ 1160☐ B. ₹ 1180☐ C. ₹ 1230☐ D. ₹ 1190**Question: 27 of 200**

QID: 12437

Marks: 1

If 16% of x is same as 12% of 48, then x is equal to

Please mark (✓) for the correct answer.

☐ A. 32☐ B. 36☐ C. 40☐ D. 30**Question: 28 of 200**

QID: 12438

Marks: 1

Next term of 36, 34, 30, 28, 24, ... is

Please mark (✓) for the correct answer.

☐ A. 21☐ B. 18☐ C. 22☐ D. 20

Question: 29 of 200

QID: 12439

Marks: 1

How is $\frac{3}{4}$ expressed as percentage?

Please mark (✓) for the correct answer.

- ☐ A. 60% ☐ B. 75%
- ☐ C. 80% ☐ D. 85%

Question: 30 of 200

QID: 12440

Marks: 1

$4.8 \times 1.8 + 36 + 5.4$ of $\frac{11}{9}$ is equal to

Please mark (✓) for the correct answer.

- ☐ A. 2.4 ☐ B. 2.6
- ☐ C. 2.8 ☐ D. 3.2

Question: 31 of 200

QID: 12441

Marks: 1

The volume (in cm^3) of a cube whose diagonal measures $4\sqrt{3}$ cm is

Please mark (✓) for the correct answer.

- ☐ A. 121 ☐ B. 81
- ☐ C. 64 ☐ D. 49

Question: 32 of 200

QID: 12442

Marks: 1

If $\sqrt{2^n} = 64$, then the value of n is

Please mark (✓) for the correct answer.

- ☐ A. 14 ☐ B. 8
- ☐ C. 10 ☐ D. 12

Question: 33 of 200

QID: 12443

Marks: 1

If $a:b=1:3$ and $b:c=5:7$, then $a:b:c$ is equal to

Please mark (✓) for the correct answer.

- ☐ A. 12:15:27 ☐ B. 5:15:21
- ☐ C. 11:13:14 ☐ D. 12:5:9

Question: 34 of 200

QID: 12444

Marks: 1

Which greatest number will divide 3026 and 5053 leaving remainders 11 and 13, respectively?

Please mark (✓) for the correct answer.

- ☐ A. 30 ☐ B. 60
☐ C. 15 ☐ D. 45

Question: 35 of 200

QID: 12445

Marks: 1

$0.48/4.8 + 0.048/480 + 0.48/48$ is equal to

Please mark (✓) for the correct answer.

- ☐ A. 0.1100 ☐ B. 0.1011
☐ C. 0.1101 ☐ D. 0.1001

Question: 36 of 200

QID: 12446

Marks: 1

What is the difference between the largest number of 6-digits and smallest number of 5-digits ?

Please mark (✓) for the correct answer.

- ☐ A. 1 ☐ B. 989099
☐ C. 998999 ☐ D. 989999

Question: 37 of 200

QID: 12447

Marks: 1

If 0.545 is divided by 5, quotient is

Please mark (✓) for the correct answer.

- ☐ A. 0.190 ☐ B. 0.109
☐ C. 0.209 ☐ D. 0.106

Question: 38 of 200

QID: 12448

Marks: 1

The least number which should be added to 2497, so that the sum is exactly divisible by 5, 6, 4 and 3, is:

Please mark (✓) for the correct answer.

- ☐ A. 23 ☐ B. 37
☐ C. 33 ☐ D. 32

Question: 39 of 200

QID: 12449

Marks: 1

The HCF of two numbers is 11 and their LCM is 693. If one of the numbers is 77, find the other number.

Please mark (✓) for the correct answer.

- ☐ A. 88 ☐ B. 99
- ☐ C. 80 ☐ D. 90

Question: 40 of 200

QID: 12450

Marks: 1

What least number must be subtracted from 2010 to obtain a number which is exactly divisible by 19?

Please mark (✓) for the correct answer.

- ☐ A. 14 ☐ B. 16
- ☐ C. 15 ☐ D. 17

Question: 41 of 200

QID: 12451

Marks: 1

On dividing 7213 by a certain number, we get 45 as quotient and 13 as remainder. What is the divisor?

Please mark (✓) for the correct answer.

- ☐ A. 150 ☐ B. 140
- ☐ C. 155 ☐ D. 160

Question: 42 of 200

QID: 12452

Marks: 1

If 60% of $\frac{3}{5}$ of a number is 36, then the number is

Please mark (✓) for the correct answer.

- ☐ A. 100 ☐ B. 90
- ☐ C. 95 ☐ D. 105

Question: 43 of 200

QID: 12453

Marks: 1

If $213 \times 16 = 3408$, then 1.6×21.3 is equal to

Please mark (✓) for the correct answer.

- ☐ A. 0.3408 ☐ B. 3.408
- ☐ C. 34.08 ☐ D. 340.8

Question: 44 of 200

QID: 12454

Marks: 1

$$\frac{x}{4} - \frac{x-3}{6} = 1$$

If $\frac{x}{4} - \frac{x-3}{6} = 1$, then the value of x is

Please mark (✓) for the correct answer.

- ☐ A. 8 ☐ B. 6
- ☐ C. 10 ☐ D. 11

Question: 45 of 200

QID: 12455

Marks: 1

If one dozen note books cost ₹ 36, find the cost of 8 note books.

Please mark (✓) for the correct answer.

- ☐ A. 22 ☐ B. 24
- ☐ C. 25 ☐ D. 29

Question: 46 of 200

QID: 12456

Marks: 1

The average weight of 8 boys in a class is 30 kg, another boy joined the class and the new average was found to be 28.5 kg. Find the weight of the new boy.

Please mark (✓) for the correct answer.

- ☐ A. 15.5 kg ☐ B. 16.5 kg
- ☐ C. 13.5 kg ☐ D. 12.5 kg

Question: 47 of 200

QID: 12457

Marks: 1

A's salary is 40% of B's salary. If B's salary be ₹ 2870, find A's salary.

Please mark (✓) for the correct answer.

- ☐ A. ₹ 1158 ☐ B. ₹ 1148
- ☐ C. ₹ 1168 ☐ D. ₹ 1178

Question: 48 of 200

QID: 12458

Marks: 1

Anurag purchased a car for ₹ 65000. He paid ₹ 40 for road tax and ₹ 200 as license fee. What price must he sell it to gain 30%?

Please mark (✓) for the correct answer.

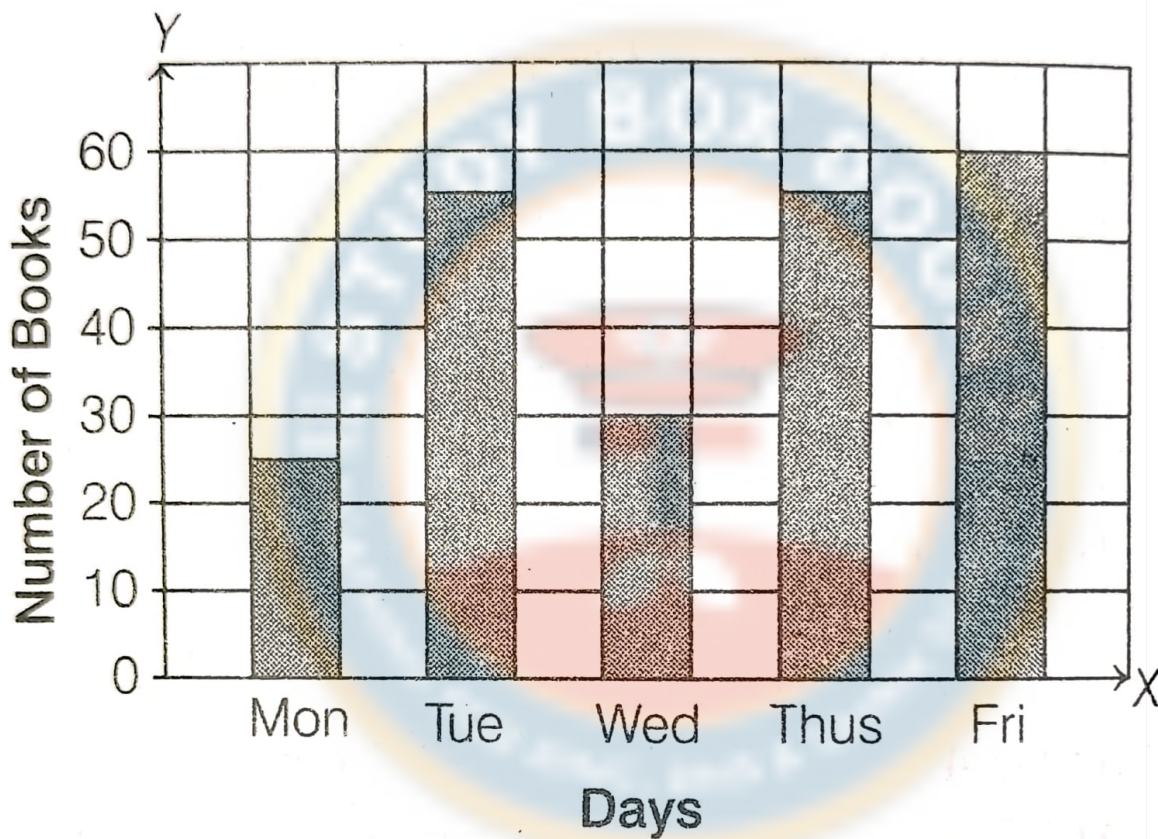
- ☐ A. ₹ 95072 ☐ B. ₹ 85072
- ☐ C. ₹ 89012 ☐ D. ₹ 79050

In what time will the interest on ₹ 3600 amount to ₹ 360 at 5% p.a.?

Please mark (✓) for the correct answer.

- ☐ A. 1 yr ☐ B. 2 yr
- ☐ C. 5 yr ☐ D. 8 yr

The bar graph given shows the number of books borrowed from as school library in a certain week.



How many books were borrowed on Friday?

Please mark (✓) for the correct answer.

- ☐ A. 60 ☐ B. 40
- ☐ C. 55 ☐ D. 50

Which one of the following planets has the maximum number of natural satellites?

Please mark (✓) for the correct answer.

- ☐ A. Saturn ☐ B. Mars
- ☐ C. Jupiter ☐ D. Neptune

Question: 52 of 200

QID: 12462

Marks: 1

Which one of the following rivers does not fall into Bay of Bengal?

Please mark (✓) for the correct answer.

- ☐ A. Ganga ☐ B. Brahmaputra
- ☐ C. Kaveri ☐ D. Narmada

Question: 53 of 200

QID: 12463

Marks: 1

Which of the following is the coldest continent?

Please mark (✓) for the correct answer.

- ☐ A. Asia ☐ B. South America
- ☐ C. Africa ☐ D. Antarctica

Question: 54 of 200

QID: 12464

Marks: 1

Salinometer is used for

Please mark (✓) for the correct answer.

- ☐ A. determines salinity of solution ☐ B. views distant objects in space
- ☐ C. measure blood pressure ☐ D. measure frequency of a tuning fork

Question: 55 of 200

QID: 12465

Marks: 1

In which of the following parts of our body, the longest bone Femur is located?

Please mark (✓) for the correct answer.

- ☐ A. Hands ☐ B. Mouth
- ☐ C. Brain ☐ D. Legs

Question: 56 of 200

QID: 12466

Marks: 1

Commercial silk is obtained from

Please mark (✓) for the correct answer.

- ☐ A. cocoon/pupa ☐ B. caterpillar
- ☐ C. adult moth ☐ D. both egg and adult moth

Question: 57 of 200

QID: 12467

Marks: 1

What is the name of the ocean at the North Pole?

Please mark (✓) for the correct answer.

- ☐ A. Pacific Ocean
- ☐ B. Atlantic Ocean
- ☐ C. Arctic Ocean
- ☐ D. Indian Ocean

Question: 58 of 200

QID: 12468

Marks: 1

Which monument was built by the Mughal emperor Akbar?

Please mark (✓) for the correct answer.

- ☐ A. Qutub Minar
- ☐ B. Red Fort
- ☐ C. Charminar
- ☐ D. Fatehpur Sikhri

Question: 59 of 200

QID: 12469

Marks: 1

Name the city in which Golconda Fort is located.

Please mark (✓) for the correct answer.

- ☐ A. Jodhpur
- ☐ B. Mysore
- ☐ C. Jaipur
- ☐ D. Hyderabad

Question: 60 of 200

QID: 12470

Marks: 1

The most abundant gas on the Earth's atmosphere is

Please mark (✓) for the correct answer.

- ☐ A. oxygen
- ☐ B. carbon
- ☐ C. nitrogen
- ☐ D. hydrogen

Question: 61 of 200

QID: 12471

Marks: 1

In terms of size, Earth is the largest planet in our Solar system.

Please mark (✓) for the correct answer.

- ☐ A. 3rd
- ☐ B. 5th
- ☐ C. 2nd
- ☐ D. 4th

Question: 62 of 200

QID: 12472

Marks: 1

Rain is also known as

Please mark (✓) for the correct answer.

- ☐ A. Precipitation ☐ B. Condensation
- ☐ C. Transpiration ☐ D. Evaporation

Question: 63 of 200

QID: 12475

Marks: 1

Which of these grows from the roots?

Please mark (✓) for the correct answer.

- ☐ A. Potato ☐ B. Ginger
- ☐ C. Onion ☐ D. Sweet Potato

Question: 64 of 200

QID: 12476

Marks: 1

Sahyadris is also known as

Please mark (✓) for the correct answer.

- ☐ A. Aravali ☐ B. Western Ghats
- ☐ C. Himadri ☐ D. Eastern Ghats

Question: 65 of 200

QID: 12477

Marks: 1

Who is the lowest ranked Air Force Officer among these?

Please mark (✓) for the correct answer.

- ☐ A. Wing Commander ☐ B. Group Captain
- ☐ C. Flying Officer ☐ D. Flight Lieutenant

Question: 66 of 200

QID: 12478

Marks: 1

The largest Island in the world is

Please mark (✓) for the correct answer.

- ☐ A. Australia ☐ B. New Zealand
- ☐ C. Greenland ☐ D. Mozambique

Question: 67 of 200

QID: 12479

Marks: 1

Where is Wagah-Border located?

Please mark (✓) for the correct answer.

- ☐ A. Longewala (Rajasthan) ☐ B. Moreh (Manipur)
- ☐ C. Rann of Kutch (Gujarat) ☐ D. Amritsar (Punjab)

Question: 68 of 200

QID: 12480

Marks: 1

Which gas when solidified is commonly known as Dry ice?

Please mark (✓) for the correct answer.

- ☐ A. Carbon monoxide ☐ B. Nitrous oxide
- ☐ C. Carbon dioxide ☐ D. Hydrogen peroxide

Question: 69 of 200

QID: 12481

Marks: 1

Which of the following are the primary causes of water pollution?

Please mark (✓) for the correct answer.

- ☐ A. Plants ☐ B. Animals
- ☐ C. Human activities ☐ D. None of these

Question: 70 of 200

QID: 12482

Marks: 1

Which one is a process in which water changes into vapours in atmosphere?

Please mark (✓) for the correct answer.

- ☐ A. Evaporation ☐ B. Transpiration
- ☐ C. Precipitation ☐ D. Condensation

Question: 71 of 200

QID: 12483

Marks: 1

AIDS, common cold, dengue fever and influenza are examples of

Please mark (✓) for the correct answer.

- ☐ A. Deficiency Disease ☐ B. Infectious diseases
- ☐ C. Physiological Diseases ☐ D. Non-infectious diseases

Question: 72 of 200

QID: 12484

Marks: 1

India became republic on.

Please mark (✓) for the correct answer.

- ☐ A. August 15, 1947
- ☐ B. January 26, 1857
- ☐ C. January 26, 1950
- ☐ D. August 15, 1950

Question: 73 of 200

QID: 12485

Marks: 1

At which place was Mahatma Gandhi born?

Please mark (✓) for the correct answer.

- ☐ A. Porbandar
- ☐ B. Rajkot
- ☐ C. Ahmedabad
- ☐ D. Delhi

Question: 74 of 200

QID: 12486

Marks: 1

Who is known as the Father of the Nation of India?

Please mark (✓) for the correct answer.

- ☐ A. Mahatma Gandhi
- ☐ B. Subhas Chandra Bose
- ☐ C. Jawaharlal Nehru
- ☐ D. Dr. B.R. Ambedkar

Question: 75 of 200

QID: 12487

Marks: 1

Which planet is known as the Red Planet?

Please mark (✓) for the correct answer.

- ☐ A. Venus
- ☐ B. Mars
- ☐ C. Jupiter
- ☐ D. Saturn

Question: 76 of 200

QID: 12488

Marks: 1

Who wrote the National Anthem of India?

Please mark (✓) for the correct answer.

- ☐ A. Rabindranath Tagore
- ☐ B. Bankim Chandra Chatterjee
- ☐ C. Sarojini Naidu
- ☐ D. Mahatma Gandhi

Question: 77 of 200

QID: 12489

Marks: 1

The capital of Rajasthan is —

Please mark (✓) for the correct answer.

- ☐ A. Jaipur ☐ B. Udaipur
- ☐ C. Jodhpur ☐ D. Ajmer

Question: 78 of 200

QID: 12490

Marks: 1

Who was the first Prime Minister of India?

Please mark (✓) for the correct answer.

- ☐ A. Mahatma Gandhi ☐ B. Lal Bahadur Shastri
- ☐ C. Jawaharlal Nehru ☐ D. Dr. Rajendra Prasad

Question: 79 of 200

QID: 12491

Marks: 1

What is the currency of Japan?

Please mark (✓) for the correct answer.

- ☐ A. Yuan ☐ B. Yen
- ☐ C. Won ☐ D. Dollar

Question: 80 of 200

QID: 12492

Marks: 1

Which is the largest continent in the world?

Please mark (✓) for the correct answer.

- ☐ A. Africa ☐ B. Asia
- ☐ C. Europe ☐ D. North America

Question: 81 of 200

QID: 12493

Marks: 1

Who invented the light bulb?

Please mark (✓) for the correct answer.

- ☐ A. Thomas Edison ☐ B. Isaac Newton
- ☐ C. Alexander Fleming ☐ D. Albert Einstein

Question: 82 of 200

QID: 12494

Marks: 1

Which gas is most essential for breathing?

Please mark (✓) for the correct answer.

- ☐ A. Hydrogen
- ☐ B. Oxygen
- ☐ C. Nitrogen
- ☐ D. Carbon dioxide

Question: 83 of 200

QID: 12495

Marks: 1

Who is the President of India in 2025?

Please mark (✓) for the correct answer.

- ☐ A. Droupadi Murmu
- ☐ B. Ram Nath Kovind
- ☐ C. Narendra Modi
- ☐ D. Pratibha Patil

Question: 84 of 200

QID: 12496

Marks: 1

Which river is known as the Ganga of South India?

Please mark (✓) for the correct answer.

- ☐ A. Kaveri
- ☐ B. Krishna
- ☐ C. Godavari
- ☐ D. Yamuna

Question: 85 of 200

QID: 12497

Marks: 1

Which festival is known as the Festival of Lights?

Please mark (✓) for the correct answer.

- ☐ A. Holi
- ☐ B. Diwali
- ☐ C. Dussehra
- ☐ D. Eid

Question: 86 of 200

QID: 12498

Marks: 1

Which state is known as the "Land of Five Rivers"?

Please mark (✓) for the correct answer.

- ☐ A. Punjab
- ☐ B. Haryana
- ☐ C. Uttar Pradesh
- ☐ D. Rajasthan

Question: 87 of 200

QID: 12499

Marks: 1

Which sport is associated with Wimbledon?

Please mark (✓) for the correct answer.

- ☐ A. Football
- ☐ B. Hockey
- ☐ C. Tennis
- ☐ D. Cricket

Question: 88 of 200

QID: 12500

Marks: 1

Which is the national animal of India?

Please mark (✓) for the correct answer.

- ☐ A. Lion
- ☐ B. Elephant
- ☐ C. Tiger
- ☐ D. Leopard

Question: 89 of 200

QID: 12501

Marks: 1

Who discovered gravity?

Please mark (✓) for the correct answer.

- ☐ A. Galileo Galilei
- ☐ B. Isaac Newton
- ☐ C. Albert Einstein
- ☐ D. Charles Darwin

Question: 90 of 200

QID: 12502

Marks: 1

In which year did India get independence?

Please mark (✓) for the correct answer.

- ☐ A. 1945
- ☐ B. 1946
- ☐ C. 1947
- ☐ D. 1948

Question: 91 of 200

QID: 12503

Marks: 1

Which is the smallest planet in our solar system?

Please mark (✓) for the correct answer.

- ☐ A. Mercury
- ☐ B. Mars
- ☐ C. Venus
- ☐ D. Pluto

Question: 92 of 200

QID: 12504

Marks: 1

Which Indian city is called the “City of Joy”?

Please mark (✓) for the correct answer.

- ☐ A. Delhi
- ☐ B. Kolkata
- ☐ C. Mumbai
- ☐ D. Chennai

Question: 93 of 200

QID: 12505

Marks: 1

Which is the national flower of India?

Please mark (✓) for the correct answer.

- ☐ A. Rose
- ☐ B. Lotus
- ☐ C. Jasmine
- ☐ D. Marigold

Question: 94 of 200

QID: 12506

Marks: 1

Who was the first woman Prime Minister of India?

Please mark (✓) for the correct answer.

- ☐ A. Pratibha Patil
- ☐ B. Sonia Gandhi
- ☐ C. Indira Gandhi
- ☐ D. Sarojini Naidu

Question: 95 of 200

QID: 12507

Marks: 1

Which country will host the 2028 Olympics?

Please mark (✓) for the correct answer.

- ☐ A. USA
- ☐ B. China
- ☐ C. France
- ☐ D. Japan

Question: 96 of 200

QID: 12508

Marks: 1

Who is the current Chief of Defence Staff (CDS) of India (2025)?

Please mark (✓) for the correct answer.

- ☐ A. General Anil Chauhan
- ☐ B. General Bipin Rawat
- ☐ C. Admiral R. Hari Kumar
- ☐ D. General Manoj Pande

Question: 97 of 200

QID: 12509

Marks: 1

What is the full form of ISRO?

Please mark (✓) for the correct answer.

- ☐ A. Indian Science Research Organization
- ☐ B. Indian Space Research Organisation
- ☐ C. International Space Research Office
- ☐ D. Indian Solar Research Office

Question: 98 of 200

QID: 12510

Marks: 1

Which day is celebrated as Republic Day in India?

Please mark (✓) for the correct answer.

- ☐ A. 15th August
- ☐ B. 26th January
- ☐ C. 2nd October
- ☐ D. 14th November

Question: 99 of 200

QID: 12473

Marks: 1

Which Article of Constitution provides Indian citizen & apos;Right to Equality'?

Please mark (✓) for the correct answer.

- ☐ A. Article-12
- ☐ B. Article-13
- ☐ C. Article-17
- ☐ D. Article-14

Question: 100 of 200

QID: 12474

Marks: 1

Narora nuclear power plant is located in the state of

Please mark (✓) for the correct answer.

- ☐ A. Maharashtra
- ☐ B. Tamil Nadu
- ☐ C. Uttar Pradesh
- ☐ D. West Bengal

Read the following passage and answer the questions that follow.

From Rameshwaram to the Rashtrapati Bhavan, it's been a long journey. Talking to Nona Walia, on the eve of Teacher's day, President Dr. APJ Abdul Kalam talked about life's toughest lessons learnt and his mission being a teacher to the Indian youth. "A proper education would help nurture a sense of dignity and self-respect among our youth," says President Kalam. There's still a child in him though, and he's still curious about learning new things. Life's a mission for President Kalam. Nonetheless, he remembers his first lesson in life and how it changed his destiny.

"I was studying in Standard V and must have been all of 10. My teacher, Sri Sivasubramania Iyer was telling how birds fly. He drew a diagram of a bird on the blackboard, depicting the wings, tail and the body with the head and then explained how birds soar to the sky.

At the end of the class, I said I didn't understand. Then he asked the other students if they had understood, but nobody had understood how birds fly," he recalls.

"That evening, the entire class was taken to Rameshwaram shore," the President continues, "My teacher showed us sea birds. We saw marvellous formations of them flying and how their wings flapped. Then my teacher asked us, 'Where is the bird's engine and how is it powered?'

I knew then that birds are powered by their own life and motivation. I understood all about birds dynamics."

What did Dr. APJ Abdul Kalam learn when the entire class was taken to the Rameshwaram shore?

Please mark (✓) for the correct answer.

- | | |
|--------------------------------------------------------|------------------------------------------------------------------------------|
| <input type="radio"/> A. Birds are powered by engines. | <input type="radio"/> B. Birds are powered by fuels. |
| <input type="radio"/> C. There is a dynamics in birds. | <input type="radio"/> D. Birds are powered by their own life and motivation. |

Read the following passage and answer the questions that follow.

From Rameshwaram to the Rashtrapati Bhavan, it's been a long journey. Talking to Nona Walia, on the eve of Teacher's day, President Dr. APJ Abdul Kalam talked about life's toughest lessons learnt and his mission being a teacher to the Indian youth. "A proper education would help nurture a sense of dignity and self-respect among our youth," says President Kalam. There's still a child in him though, and he's still curious about learning new things. Life's a mission for President Kalam. Nonetheless, he remembers his first lesson in life and how it changed his destiny.

"I was studying in Standard V and must have been all of 10. My teacher, Sri Sivasubramania Iyer was telling how birds fly. He drew a diagram of a bird on the blackboard, depicting the wings, tail and the body with the head and then explained how birds soar to the sky.

At the end of the class, I said I didn't understand. Then he asked the other students if they had understood, but nobody had understood how birds fly," he recalls.

"That evening, the entire class was taken to Rameshwaram shore," the President continues, "My teacher showed us sea birds. We saw marvellous formations of them flying and how their wings flapped. Then my teacher asked us, 'Where is the bird's engine and how is it powered?'

I knew then that birds are powered by their own life and motivation. I understood all about birds dynamics."

What inspiration do you gain after reading about Dr. Kalam's experiences as a student?

Please mark (✓) for the correct answer.

- ☐ A. Be curious to learn more
- ☐ B. One should learn the birds dynamics
- ☐ C. One should be open-minded
- ☐ D. None of the above

Question: 103 of 200

QID: 12516

Marks: 1

Rearrange the following words to form a meaningful sentence.

will be / tonight / studying / she / at the / library

Please mark (✓) for the correct answer.

- ☐ A. She will be at the library studying tonight.
- ☐ B. She will be studying at the library tonight.
- ☐ C. Tonight will be she at the library studying.
- ☐ D. Studying at the library will be she tonight.

Question: 104 of 200

QID: 12517

Marks: 1

Rearrange the following words to form a meaningful sentence.

yet / haven't / we / eating / finished / watermelon / the

Please mark (✓) for the correct answer.

- ☐ A. We haven't finished eating the watermelon yet.
- ☐ B. We finished haven't eating yet the watermelon.
- ☐ C. The watermelon haven't finished we eating yet.
- ☐ D. The eating haven't finished we watermelon yet.

Question: 105 of 200

QID: 12518

Marks: 1

Find the word opposite in meaning to '**Courageous**'.

Please mark (✓) for the correct answer.

- ☐ A. Heroic ☐ B. Dangerous
- ☐ C. Hazardous ☐ D. Cowardly

Question: 106 of 200

QID: 12519

Marks: 1

Find the opposite gender of 'Mare'.

Please mark (✓) for the correct answer.

- ☐ A. Deer ☐ B. Stallion
- ☐ C. Fox ☐ D. Elephant

Question: 107 of 200

QID: 12520

Marks: 1

Choose the sentence with question tag.

Please mark (✓) for the correct answer.

- ☐ A. They are learning English, aren't they? ☐ B. Why are you going to Jaipur?
- ☐ C. Could you please lend me your bicycle? ☐ D. Will you come at 10 pm tomorrow?

Question: 108 of 200

QID: 12521

Marks: 1

Choose the idiom in the given sentence.

The long and short of every holy book is that all are equal and man should speak the truth.

Please mark (✓) for the correct answer.

- ☐ A. All are equal ☐ B. Long and short
- ☐ C. Man should speak the truth ☐ D. Every holy book

Question: 109 of 200

QID: 12522

Marks: 1

Choose the correctly spelt word.

Please mark (✓) for the correct answer.

- ☐ A. Chemeleon ☐ B. Consiquence
- ☐ C. Nuisance ☐ D. Motgage

Question: 110 of 200

QID: 12523

Marks: 1

Name the type of given sentence. Have mercy on me.

Please mark (✓) for the correct answer.

- ☐ A. Imperative
- ☐ B. Exclamatory
- ☐ C. Assertive
- ☐ D. Interrogative

Question: 111 of 200

QID: 12524

Marks: 1

Choose the homophone for the word 'Right'.

Please mark (✓) for the correct answer.

- ☐ A. Rite
- ☐ B. Write
- ☐ C. Both (a) and (b)
- ☐ D. None of these

Question: 112 of 200


QID: 12525

Marks: 1

One who settles in another country is called

Please mark (✓) for the correct answer.

- ☐ A. Migrant
- ☐ B. Immigrant
- ☐ C. Commuter
- ☐ D. Traveller



Read the following passage and answer the questions that follow.

From Rameshwaram to the Rashtrapati Bhavan, it's been a long journey. Talking to Nona Walia, on the eve of Teacher's day, President Dr. APJ Abdul Kalam talked about life's toughest lessons learnt and his mission being a teacher to the Indian youth. "A proper education would help nurture a sense of dignity and self-respect among our youth," says President Kalam. There's still a child in him though, and he's still curious about learning new things. Life's a mission for President Kalam. Nonetheless, he remembers his first lesson in life and how it changed his destiny.

"I was studying in Standard V and must have been all of 10. My teacher, Sri Sivasubramania Iyer was telling how birds fly. He drew a diagram of a bird on the blackboard, depicting the wings, tail and the body with the head and then explained how birds soar to the sky.

At the end of the class, I said I didn't understand. Then he asked the other students if they had understood, but nobody had understood how birds fly," he recalls.

"That evening, the entire class was taken to Rameshwaram shore," the President continues, "My teacher showed us sea birds. We saw marvellous formations of them flying and how their wings flapped. Then my teacher asked us, 'Where is the bird's engine and how is it powered?'

I knew then that birds are powered by their own life and motivation. I understood all about birds dynamics."

Find a word in the passage which is opposite in meaning to the word 'Ordinary'.

Please mark (✓) for the correct answer.

- | | |
|------------------------------------|-------------------------------------|
| <input type="radio"/> A. Remembers | <input type="radio"/> B. Marvellous |
| <input type="radio"/> C. Depicting | <input type="radio"/> D. Flapped |

Question: 114 of 200

QID: 12530

Marks: 1

They are the kids here. (Choose the correct adjective)

Please mark (✓) for the correct answer.

- | | |
|-----------------------------------|----------------------------------|
| <input type="radio"/> A. smartest | <input type="radio"/> B. braver |
| <input type="radio"/> C. smarter | <input type="radio"/> D. happier |

Question: 115 of 200

QID: 12531

Marks: 1

My father will come with us

Please mark (✓) for the correct answer.

- | | |
|------------------------------------|--------------------------------|
| <input type="radio"/> A. yesterday | <input type="radio"/> B. today |
| <input type="radio"/> C. ago | <input type="radio"/> D. since |

Our experiments, designed by my teacher usually very fun. (Choose the correct form of the verb).

Please mark (✓) for the correct answer.

- ☐ A. is ☐ B. am
☐ C. are ☐ D. was

..... it rained a lot, we enjoyed the holiday. (Choose the correct conjunction)

Please mark (✓) for the correct answer.

- ☐ A. Even if ☐ B. As long as
☐ C. If only ☐ D. Even though

A granary is a for threshed grains.

Please mark (✓) for the correct answer.

- ☐ A. storehouse ☐ B. store
☐ C. shop ☐ D. house



Read the following passage and answer the questions that follow.

From Rameshwaram to the Rashtrapati Bhavan, it's been a long journey. Talking to Nona Walia, on the eve of Teacher's day, President Dr. APJ Abdul Kalam talked about life's toughest lessons learnt and his mission being a teacher to the Indian youth. "A proper education would help nurture a sense of dignity and self-respect among our youth," says President Kalam. There's still a child in him though, and he's still curious about learning new things. Life's a mission for President Kalam. Nonetheless, he remembers his first lesson in life and how it changed his destiny.

"I was studying in Standard V and must have been all of 10. My teacher, Sri Sivasubramania Iyer was telling how birds fly. He drew a diagram of a bird on the blackboard, depicting the wings, tail and the body with the head and then explained how birds soar to the sky.

At the end of the class, I said I didn't understand. Then he asked the other students if they had understood, but nobody had understood how birds fly," he recalls.

"That evening, the entire class was taken to Rameshwaram shore," the President continues, "My teacher showed us sea birds. We saw marvellous formations of them flying and how their wings flapped. Then my teacher asked us, 'Where is the bird's engine and how is it powered?'

I knew then that birds are powered by their own life and motivation. I understood all about birds dynamics."

When did Nona Walia talk to the President Dr. APJ Abdul Kalam?

Please mark (✓) for the correct answer.

- ☐ A. On September 4 ☐ B. On September 3
- ☐ C. On September 5 ☐ D. On September 6

Question: 120 of 200

QID: 12535

Marks: 1

Choose the synonym for the word 'System'.

Please mark (✓) for the correct answer.

- ☐ A. Chaos ☐ B. Disorder
- ☐ C. Scarce ☐ D. Order

Question: 121 of 200

QID: 12536

Marks: 1

Choose the correct synonym of "Happy".

Please mark (✓) for the correct answer.

- ☐ A. Angry ☐ B. Joyful
- ☐ C. Sad ☐ D. Weak

Question: 122 of 200

QID: 12537

Marks: 1

Choose the correct antonym of "Brave".

Please mark (✓) for the correct answer.

- ☐ A. Cowardly ☐ B. Strong
- ☐ C. Fearless ☐ D. Courageous

Question: 123 of 200

QID: 12538

Marks: 1

Fill in the blank: She _____ to school every day.

Please mark (✓) for the correct answer.

- ☐ A. goes ☐ B. go
- ☐ C. goosed ☐ D. going

Question: 124 of 200

QID: 12539

Marks: 1

Choose the correct plural form of "Child".

Please mark (✓) for the correct answer.

- ☐ A. Childs ☐ B. Children
- ☐ C. Childes ☐ D. Childen

Question: 125 of 200

QID: 12540

Marks: 1

Select the correct pronoun: This book belongs to Raju. It is _____.

Please mark (✓) for the correct answer.

- ☐ A. He ☐ B. Him
- ☐ C. His ☐ D. Hers

Question: 126 of 200

QID: 12541

Marks: 1

Choose the correct past tense of "Go".

Please mark (✓) for the correct answer.

- ☐ A. Went ☐ B. Go
- ☐ C. Gone ☐ D. Goed

Question: 127 of 200

QID: 12542

Marks: 1

Identify the adjective in the sentence: The tall boy is playing.

Please mark (✓) for the correct answer.

- ☐ A. Tall ☐ B. Boy
- ☐ C. Playing ☐ D. Is

Question: 128 of 200

QID: 12543

Marks: 1

Fill in the blank with correct article: I saw ____ eagle in the sky.

Please mark (✓) for the correct answer.

- ☐ A. A ☐ B. An
- ☐ C. The ☐ D. No article

Question: 129 of 200

QID: 12544

Marks: 1

Select the correct preposition: The cat is sitting ____ the table.

Please mark (✓) for the correct answer.

- ☐ A. On ☐ B. At
- ☐ C. In ☐ D. Under

Question: 130 of 200

QID: 12545

Marks: 1

Choose the correct form: She has ____ her homework.

Please mark (✓) for the correct answer.

- ☐ A. Done ☐ B. Do
- ☐ C. Doing ☐ D. Did

Question: 131 of 200

QID: 12546

Marks: 1

Choose the correct verb: They ____ football every Sunday.

Please mark (✓) for the correct answer.

- ☐ A. Play ☐ B. Plays
- ☐ C. Playing ☐ D. Played

Select the correct antonym of "Generous".

Please mark (✓) for the correct answer.

☐ A. Selfish

☐ B. Kind

☐ C. Brave

☐ D. Lucky

Choose the correct tense: He _____ a letter yesterday.

Please mark (✓) for the correct answer.

☐ A. Writes

☐ B. Wrote

☐ C. Write

☐ D. Writing

Read the following passage and answer the questions that follow.

From Rameshwaram to the Rashtrapati Bhavan, it's been a long journey. Talking to Nona Walia, on the eve of Teacher's day, President Dr. APJ Abdul Kalam talked about life's toughest lessons learnt and his mission being a teacher to the Indian youth. "A proper education would help nurture a sense of dignity and self-respect among our youth," says President Kalam. There's still a child in him though, and he's still curious about learning new things. Life's a mission for President Kalam. Nonetheless, he remembers his first lesson in life and how it changed his destiny.

"I was studying in Standard V and must have been all of 10. My teacher, Sri Sivasubramania Iyer was telling how birds fly. He drew a diagram of a bird on the blackboard, depicting the wings, tail and the body with the head and then explained how birds soar to the sky.

At the end of the class, I said I didn't understand. Then he asked the other students if they had understood, but nobody had understood how birds fly," he recalls.

"That evening, the entire class was taken to Rameshwaram shore," the President continues, "My teacher showed us sea birds. We saw marvellous formations of them flying and how their wings flapped. Then my teacher asked us, 'Where is the bird's engine and how is it powered?'

I knew then that birds are powered by their own life and motivation. I understood all about birds dynamics."

What did the teacher draw on the blackboard?

Please mark (✓) for the correct answer.

☐ A. Detailed diagram of a cat

☐ B. Detailed diagram of a lion

☐ C. Detailed diagram of a bird

☐ D. Detailed diagram of a rat

Question: 135 of 200

QID: 12549

Marks: 1

Fill in the blank: I am looking forward ____ your reply.

Please mark (✓) for the correct answer.

☐ **A.** For☐ **B.** To☐ **C.** At☐ **D.** On**Question: 136 of 200**

QID: 12550

Marks: 1

Choose the correct synonym of "Beautiful".

Please mark (✓) for the correct answer.

☐ **A.** Pretty☐ **B.** Ugly☐ **C.** Horrible☐ **D.** Dirty**Question: 137 of 200**

QID: 12551

Marks: 1

Identify the noun: The sun rises in the east.

Please mark (✓) for the correct answer.

☐ **A.** Sun☐ **B.** Rises☐ **C.** In☐ **D.** none**Question: 138 of 200**

QID: 12552

Marks: 1

Select the correct option: He is ____ than his brother.

Please mark (✓) for the correct answer.

☐ **A.** Tall☐ **B.** Taller☐ **C.** Tallest☐ **D.** Tallly**Question: 139 of 200**

QID: 12553

Marks: 1

Fill in the blank: I _____ my homework now.

Please mark (✓) for the correct answer.

☐ **A.** Do☐ **B.** Did☐ **C.** Am doing☐ **D.** Doing

Question: 140 of 200

QID: 12554

Marks: 1

Choose the correct antonym: "Difficult"

Please mark (✓) for the correct answer.

- ☐ A. Easy ☐ B. Hard
- ☐ C. Tough ☐ D. Strong

Question: 141 of 200

QID: 12555

Marks: 1

Select the correct pronoun: Priya and I went to the park. ____ played cricket.

Please mark (✓) for the correct answer.

- ☐ A. They ☐ B. We
- ☐ C. Us ☐ D. Him

Question: 142 of 200

QID: 12556

Marks: 1

Identify the verb: The dog barks loudly.

Please mark (✓) for the correct answer.

- ☐ A. Dog ☐ B. Barks
- ☐ C. Loudly ☐ D. The

Question: 143 of 200

QID: 12557

Marks: 1

Choose the correct plural: Mouse

Please mark (✓) for the correct answer.

- ☐ A. Mouses ☐ B. Mice
- ☐ C. Mousen ☐ D. Mousees

Question: 144 of 200

QID: 12558

Marks: 1

Fill in the blank: She is fond ____ chocolate.

Please mark (✓) for the correct answer.

- ☐ A. Of ☐ B. With
- ☐ C. For ☐ D. On

Question: 145 of 200

QID: 12559

Marks: 1

Select the correct synonym of "Fast".

Please mark (✓) for the correct answer.

☐ A. Quick☐ B. Slow☐ C. Late☐ D. Weak**Question: 146 of 200**

QID: 12560

Marks: 1

Fill in the blank: I have never _____ to London.

Please mark (✓) for the correct answer.

☐ A. Been☐ B. Go☐ C. Went☐ D. Going**Question: 147 of 200**

QID: 12526

Marks: 1

It wasn't me on your door. (Choose the correct tense form of the verb)

Please mark (✓) for the correct answer.

☐ A. knocking☐ B. knocks☐ C. knock☐ D. knocked**Question: 148 of 200**

QID: 12527

Marks: 1

..... knows she has to study for exams. (Choose the pronoun)

Please mark (✓) for the correct answer.

☐ A. Them☐ B. They☐ C. We☐ D. She**Question: 149 of 200**

QID: 12528

Marks: 1

I will get myself coffee. (Choose the correct article)

Please mark (✓) for the correct answer.

☐ A. an☐ B. a☐ C. the☐ D. No article

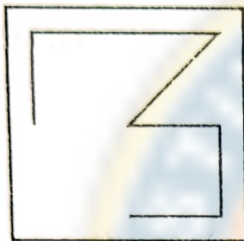
There was no peach orchard..... site of this building. (Choose the correct preposition)

Please mark (✓) for the correct answer.

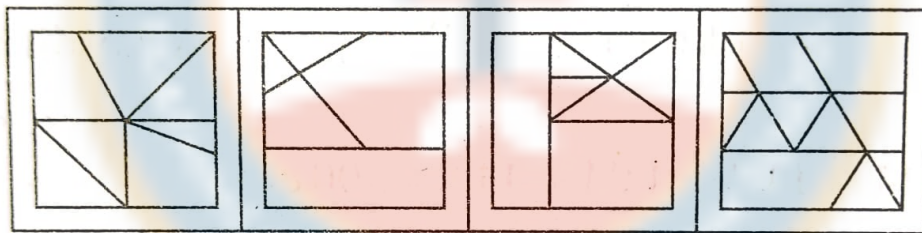
- ☐ A. in ☐ B. to
☐ C. on ☐ D. of

Select the answer figure in which the question figure is embedded.

Question Figure



Answer Figures



(a)

(b)

(c)

(d)

Please mark (✓) for the correct answer.

- ☐ A. a ☐ B. b
☐ C. c ☐ D. d

Find the odd one out: Apple, Mango, Banana, Potato.

Please mark (✓) for the correct answer.

- ☐ A. Apple ☐ B. Mango
☐ C. Banana ☐ D. Potato

Question: 153 of 200

QID: 12587

Marks: 1

If CAT = 24, BAT = 23, then RAT = ?

Please mark (✓) for the correct answer.

☐ A. 25☐ B. 26☐ C. 27☐ D. 24**Question: 154 of 200**

QID: 12588

Marks: 1

Which number comes next in the series: 2, 4, 8, 16, ?

Please mark (✓) for the correct answer.

☐ A. 18☐ B. 24☐ C. 32☐ D. 20**Question: 155 of 200**

QID: 12589

Marks: 1

Find the missing term: 3, 6, 12, 24, ?

Please mark (✓) for the correct answer.

☐ A. 30☐ B. 36☐ C. 42☐ D. 48**Question: 156 of 200**

QID: 12590

Marks: 1

If A = 1, B = 2, then the sum of values of CAT is ____.

Please mark (✓) for the correct answer.

☐ A. 20☐ B. 22☐ C. 24☐ D. 26**Question: 157 of 200**

QID: 12591

Marks: 1

Choose the odd one out: 2, 4, 6, 9.

Please mark (✓) for the correct answer.

☐ A. 2☐ B. 4☐ C. 6☐ D. 9

Question: 158 of 200

QID: 12592

Marks: 1

If MONDAY is coded as NPOEBZ, how is FRIDAY coded?

Please mark (✓) for the correct answer.

- ☐ A. ESHCZX ☐ B. GSJEBZ
☐ C. GSJEBZ ☐ D. GRJEBZ

Question: 159 of 200

QID: 12593

Marks: 1

Which figure is different: Square, Triangle, Circle, Rectangle.

Please mark (✓) for the correct answer.

- ☐ A. Triangle ☐ B. Circle
☐ C. Square ☐ D. Rectangle

Question: 160 of 200

QID: 12594

Marks: 1

Rearrange letters to form a word: "NPAL"

Please mark (✓) for the correct answer.

- ☐ A. PLANE ☐ B. PANEL
☐ C. PALEN ☐ D. PLEAN

Question: 161 of 200

QID: 12595

Marks: 1

If $12 \times 2 = 24$, $12 \times 3 = 36$, then $12 \times 4 = ?$

Please mark (✓) for the correct answer.

- ☐ A. 42 ☐ B. 44
☐ C. 46 ☐ D. 48

Question: 162 of 200

QID: 12596

Marks: 1

If the opposite of EAST is WEST, then the opposite of NORTH is ____.

Please mark (✓) for the correct answer.

- ☐ A. South ☐ B. West
☐ C. East ☐ D. North

Question: 163 of 200

QID: 12597

Marks: 1

Choose the odd one: Dog, Cat, Cow, Crow.

Please mark (✓) for the correct answer.

☐ A. Dog☐ B. Cat☐ C. Cow☐ D. Crow**Question: 164 of 200**

QID: 12598

Marks: 1

If 5 pens cost ₹50, what is the cost of 3 pens?

Please mark (✓) for the correct answer.

☐ A. 20☐ B. 25☐ C. 30☐ D. 35**Question: 165 of 200**

QID: 12599

Marks: 1

Find the missing number: 7, 14, 28, 56, ?

Please mark (✓) for the correct answer.

☐ A. 60☐ B. 84☐ C. 100☐ D. 112**Question: 166 of 200**

QID: 12600

Marks: 1

Which is the odd one: Car, Bus, Train, Chair.

Please mark (✓) for the correct answer.

☐ A. Car☐ B. Bus☐ C. Train☐ D. Chair**Question: 167 of 200**

QID: 12601

Marks: 1

In a certain code, TREE = 64, then FLOWER = ?

Please mark (✓) for the correct answer.

☐ A. 72☐ B. 84☐ C. 96☐ D. 102

Question: 168 of 200

QID: 12602

Marks: 1

Find the next number: 1, 4, 9, 16, 25, ?

Please mark (✓) for the correct answer.

☐ A. 30☐ B. 35☐ C. 36☐ D. 40**Question: 169 of 200**

QID: 12603

Marks: 1

Which pair is different: Book–Read, Pen–Write, Knife–Cut, Shoe–Sleep.

Please mark (✓) for the correct answer.

☐ A. Book–Read☐ B. Pen–Write☐ C. Knife–Cut☐ D. Shoe–Sleep**Question: 170 of 200**

QID: 12604

Marks: 1

If $15 + 5 = 20$, then $25 + 15 = ?$

Please mark (✓) for the correct answer.

☐ A. 30☐ B. 35☐ C. 40☐ D. 45**Question: 171 of 200**

QID: 12605

Marks: 1

Choose the correct sequence: AZ, BY, CX, DW, ___.

Please mark (✓) for the correct answer.

☐ A. EV☐ B. FV☐ C. EW☐ D. EX**Question: 172 of 200**

QID: 12606

Marks: 1

Find the missing letter: A, C, F, J, O, ?

Please mark (✓) for the correct answer.

☐ A. T☐ B. U☐ C. V☐ D. W

Question: 173 of 200

QID: 12607

Marks: 1

Pointing to a boy, Ravi said, "He is my father's only son." How is the boy related to Ravi?

Please mark (✓) for the correct answer.

- ☐ A. Brother ☐ B. Self
- ☐ C. Cousin ☐ D. Father

Question: 174 of 200

QID: 12608

Marks: 1

Which number will complete the pattern? 3, 9, 27, 81, ?

Please mark (✓) for the correct answer.

- ☐ A. 162 ☐ B. 196
- ☐ C. 243 ☐ D. 256

Question: 175 of 200

QID: 12609

Marks: 1

Choose the odd one: March, April, May, Sunday.

Please mark (✓) for the correct answer.

- ☐ A. March ☐ B. April
- ☐ C. May ☐ D. Sunday

Question: 176 of 200

QID: 12610

Marks: 1

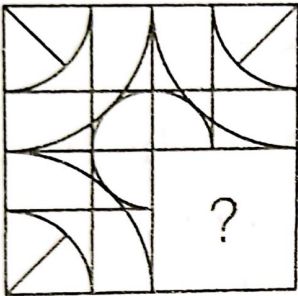
If CLOCK = 39, then WATCH = ?

Please mark (✓) for the correct answer.

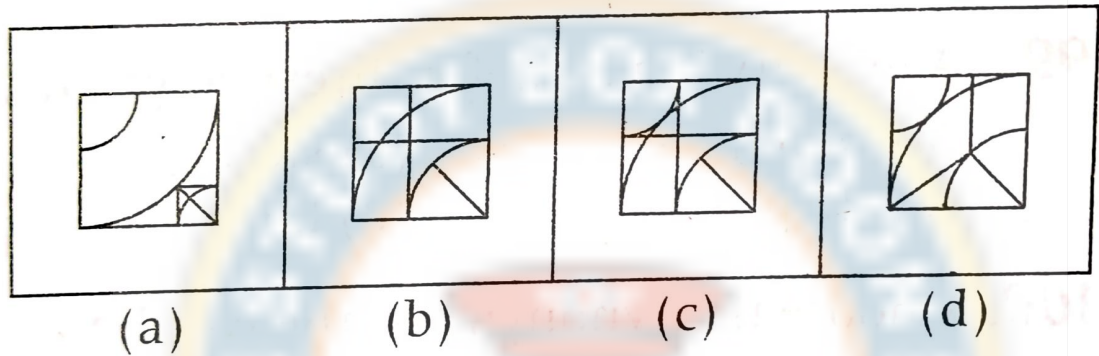
- ☐ A. 52 ☐ B. 55
- ☐ C. 57 ☐ D. 60

Complete the given figure from the given alternative.

Question Figure



Answer Figures



Please mark (✓) for the correct answer.

- ☐ A. a
- ☐ B. b
- ☐ C. c
- ☐ D. d

Arrange the given words in the sequence in which they occur in the dictionary

1. Doom
2. Down
3. Drone
4. Drape
5. Ding

Please mark (✓) for the correct answer.

- ☐ A. 51243
- ☐ B. 51234
- ☐ C. 52143
- ☐ D. 52134

'Town' is related to 'Village', in the same way as 'Urban' is related to

Please mark (✓) for the correct answer.


- ☐ A. City ☐ B. Metropolis
- ☐ C. Rural ☐ D. Semi-urban

Find the related term from the given alternative.


F : 216 :: L : ?

Please mark (✓) for the correct answer.

- ☐ A. 1728 ☐ B. 1700
- ☐ C. 1600 ☐ D. 1723



How many straight lines are there in the following figure?



Please mark (✓) for the correct answer.

☐ A. 9

☐ B. 11

☐ C. 15

☐ D. 48

Question: 182 of 200

QID: 12576

Marks: 1

Find the next term
Q1F, S2E, U6D, W24C, ?

Please mark (✓) for the correct answer.

☐ A. Y120B

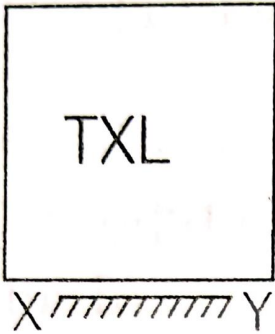
☐ B. Y44B

☐ C. Z88B

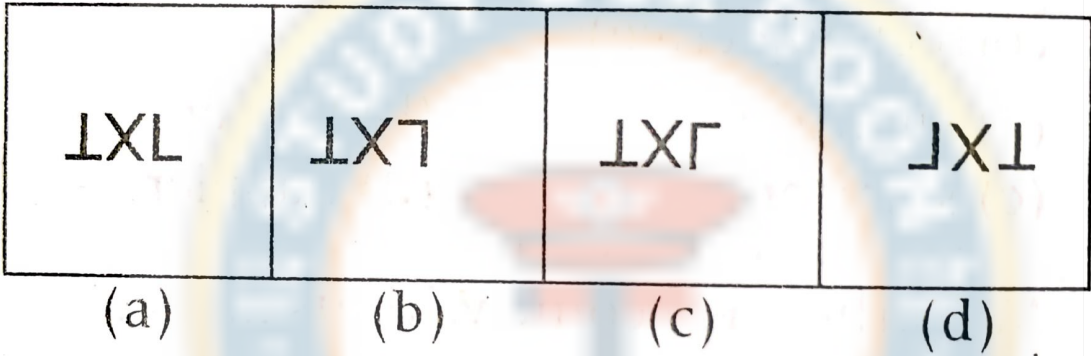
☐ D. Y66B

Find the correct mirror image of the question figure.

Question Figure



Answer Figures



Please mark (✓) for the correct answer.

- ☐ A. a
- ☐ B. b
- ☐ C. c
- ☐ D. d

Find the odd word.

Please mark (✓) for the correct answer.

- ☐ A. Lungs
- ☐ B. Liver
- ☐ C. Kidney
- ☐ D. Ear

Select the odd number-pair from the given alternatives.

Please mark (✓) for the correct answer.

- ☐ A. 13-171
- ☐ B. 11-123
- ☐ C. 5-27
- ☐ D. 7-53

Pune is bigger than Jhansi. Sitapur is bigger than Chittor. Rajgarh is not as big as Jhansi but bigger than Sitapur. Which of the following is the smallest city?

Please mark (✓) for the correct answer.

- ☐ A. Pune
- ☐ B. Jhansi
- ☐ C. Sitapur
- ☐ D. Chittor

Select the odd letters from the given alternatives.

Please mark (✓) for the correct answer.

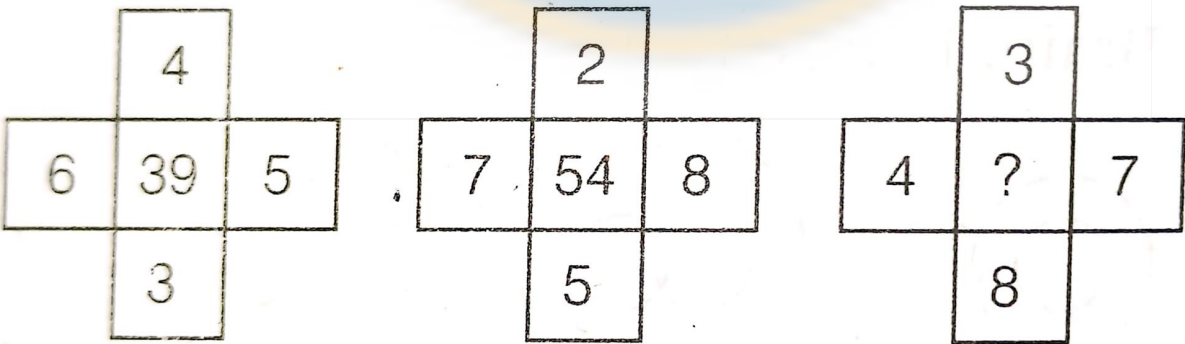
- ☐ A. QUYC
- ☐ B. UYCH
- ☐ C. GKOS
- ☐ D. RVZD

The bell of a watch takes 9 sec to chime 6 times. How much time will it take to chime 10 times at the same rate?

Please mark (✓) for the correct answer.

- ☐ A. 6.67 s
- ☐ B. 12 s
- ☐ C. 15 s
- ☐ D. 10 s

Which number replaces the question mark?



Please mark (✓) for the correct answer.

- ☐ A. 62
- ☐ B. 68
- ☐ C. 72
- ☐ D. 78

Select the word which cannot be formed using the letters of the given word.

INCARNATION

Please mark (✓) for the correct answer.

☐ A. RAIN

☐ B. CARE

☐ C. COIR

☐ D. TRAIN

Find the missing term

2, 6, 8, 16, 30, 54, ?

Please mark (✓) for the correct answer.

☐ A. 74

☐ B. 88

☐ C. 100

☐ D. 110

Today is Wednesday, what will be the day after 84 days?

Please mark (✓) for the correct answer.

☐ A. Monday

☐ B. Tuesday

☐ C. Wednesday

☐ D. Sunday

Select the related word.

Dog : Bark : : Goat : ?

Please mark (✓) for the correct answer.

☐ A. Bleat

☐ B. How

☐ C. Grunt

☐ D. Bray

A girl is facing North. She turns 180° in the anti-clockwise direction and then 225° in the clockwise direction. Which direction is she facing now?

Please mark (✓) for the correct answer.

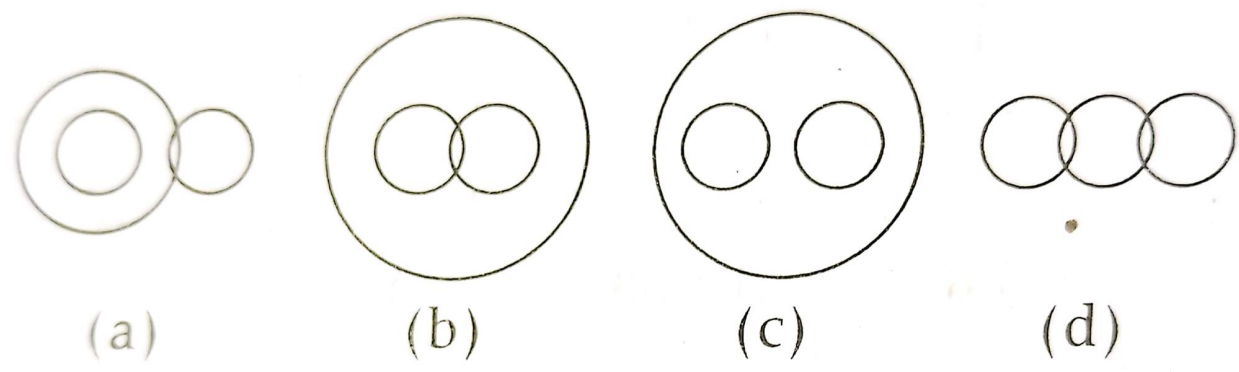
☐ A. West

☐ B. North-East

☐ C. South-West

☐ D. East

Identify the diagram that best represents the relationship among the given classes.
Brain, Lungs, Body.



Please mark (✓) for the correct answer.

- ☐ A. a
- ☐ B. b
- ☐ C. c
- ☐ D. d

In a certain language 'SOCAIL' is written as 'TQFENR', then 'DIMPLE' is coded as

Please mark (✓) for the correct answer.

- ☐ A. EKPTQK
- ☐ B. AKTPKQ
- ☐ C. ELPTKQ
- ☐ D. KQTPKE

If 'HINDU' is coded as '61257' and 'RAMAN' is coded as '84942', then 'INDIRA' will be coded as

Please mark (✓) for the correct answer.

- ☐ A. 454626
- ☐ B. 594921
- ☐ C. 125184
- ☐ D. 884572

If '+' means '÷', '÷' means '-', '-' means 'x' and 'x' means '+', then value of $12+3÷1-5\times2$ is

Please mark (✓) for the correct answer.

- ☐ A. 5
- ☐ B. -3
- ☐ C. 1
- ☐ D. -1

Six friends A, B, C, D, E and F are sitting in a row facing North. 'C' is between 'A' and 'E'. 'B' is just to the right of 'E' but left of 'D'. 'F' is not at the right end. How many persons are to the right of 'E'?

Please mark (✓) for the correct answer.

☐ A. 1

☐ B. 2

☐ C. 3

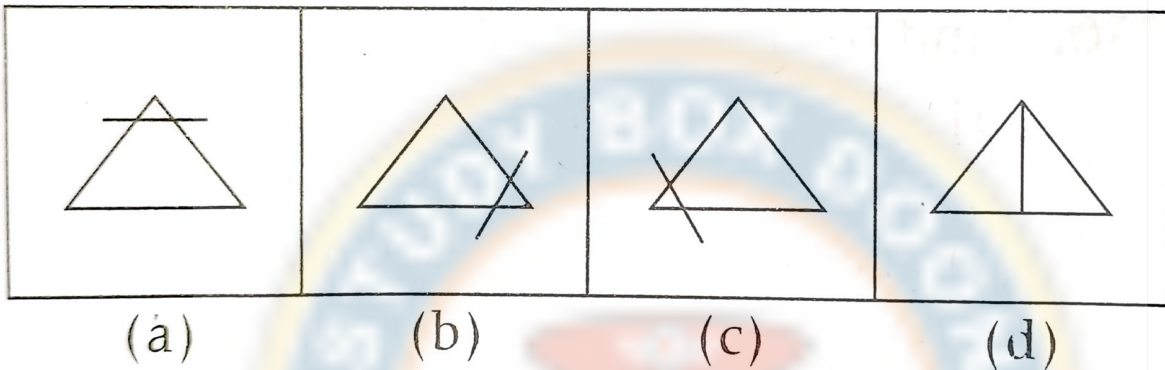
☐ D. 4

Question: 200 of 200

QID: 12570

Marks: 1

Find the odd figure.



Please mark (✓) for the correct answer.

☐ A. a

☐ B. b

☐ C. c

☐ D. d

— END OF QUESTION PAPER —

Answer Key

No	Question Type	QID	Correct Answer
Question - 1	Multiple Choice (Radiobutton)	12411	B
Question - 2	Multiple Choice (Radiobutton)	12412	C
Question - 3	Multiple Choice (Radiobutton)	12414	B
Question - 4	Multiple Choice (Radiobutton)	12415	D
Question - 5	Multiple Choice (Radiobutton)	12416	D
Question - 6	Multiple Choice (Radiobutton)	12417	A
Question - 7	Multiple Choice (Radiobutton)	12418	C
Question - 8	Multiple Choice (Radiobutton)	12419	D
Question - 9	Multiple Choice (Radiobutton)	12420	D
Question - 10	Multiple Choice (Radiobutton)	12421	A
Question - 11	Multiple Choice (Radiobutton)	12422	B
Question - 12	Multiple Choice (Radiobutton)	12423	C
Question - 13	Multiple Choice (Radiobutton)	12424	D
Question - 14	Multiple Choice (Radiobutton)	12425	A
Question - 15	Multiple Choice (Radiobutton)	12426	D
Question - 16	Multiple Choice (Radiobutton)	12427	A
Question - 17	Multiple Choice (Radiobutton)	12428	A
Question - 18	Multiple Choice (Radiobutton)	12429	A
Question - 19	Multiple Choice (Radiobutton)	12430	D
Question - 20	Multiple Choice (Radiobutton)	12431	A
Question - 21	Multiple Choice (Radiobutton)	12432	D
Question - 22	Multiple Choice (Radiobutton)	12433	C
Question - 23	Multiple Choice (Radiobutton)	12434	A
Question - 24	Multiple Choice (Radiobutton)	12435	A
Question - 25	Multiple Choice (Radiobutton)	12413	D
Question - 26	Multiple Choice (Radiobutton)	12436	D
Question - 27	Multiple Choice (Radiobutton)	12437	B
Question - 28	Multiple Choice (Radiobutton)	12438	C
Question - 29	Multiple Choice (Radiobutton)	12439	B
Question - 30	Multiple Choice (Radiobutton)	12440	C
Question - 31	Multiple Choice (Radiobutton)	12441	C
Question - 32	Multiple Choice (Radiobutton)	12442	D
Question - 33	Multiple Choice (Radiobutton)	12443	B
Question - 34	Multiple Choice (Radiobutton)	12444	C
Question - 35	Multiple Choice (Radiobutton)	12445	C
Question - 36	Multiple Choice (Radiobutton)	12446	D
Question - 37	Multiple Choice (Radiobutton)	12447	B
Question - 38	Multiple Choice (Radiobutton)	12448	A
Question - 39	Multiple Choice (Radiobutton)	12449	B
Question - 40	Multiple Choice (Radiobutton)	12450	C
Question - 41	Multiple Choice (Radiobutton)	12451	D
Question - 42	Multiple Choice (Radiobutton)	12452	A

No	Question Type	QID	Correct Answer
Question - 43	Multiple Choice (Radiobutton)	12453	C
Question - 44	Multiple Choice (Radiobutton)	12454	B
Question - 45	Multiple Choice (Radiobutton)	12455	B
Question - 46	Multiple Choice (Radiobutton)	12456	B
Question - 47	Multiple Choice (Radiobutton)	12457	B
Question - 48	Multiple Choice (Radiobutton)	12458	B
Question - 49	Multiple Choice (Radiobutton)	12459	B
Question - 50	Multiple Choice (Radiobutton)	12460	A
Question - 51	Multiple Choice (Radiobutton)	12461	A
Question - 52	Multiple Choice (Radiobutton)	12462	D
Question - 53	Multiple Choice (Radiobutton)	12463	D
Question - 54	Multiple Choice (Radiobutton)	12464	A
Question - 55	Multiple Choice (Radiobutton)	12465	D
Question - 56	Multiple Choice (Radiobutton)	12466	A
Question - 57	Multiple Choice (Radiobutton)	12467	C
Question - 58	Multiple Choice (Radiobutton)	12468	D
Question - 59	Multiple Choice (Radiobutton)	12469	D
Question - 60	Multiple Choice (Radiobutton)	12470	C
Question - 61	Multiple Choice (Radiobutton)	12471	B
Question - 62	Multiple Choice (Radiobutton)	12472	A
Question - 63	Multiple Choice (Radiobutton)	12475	D
Question - 64	Multiple Choice (Radiobutton)	12476	B
Question - 65	Multiple Choice (Radiobutton)	12477	C
Question - 66	Multiple Choice (Radiobutton)	12478	C
Question - 67	Multiple Choice (Radiobutton)	12479	D
Question - 68	Multiple Choice (Radiobutton)	12480	C
Question - 69	Multiple Choice (Radiobutton)	12481	C
Question - 70	Multiple Choice (Radiobutton)	12482	A
Question - 71	Multiple Choice (Radiobutton)	12483	B
Question - 72	Multiple Choice (Radiobutton)	12484	C
Question - 73	Multiple Choice (Radiobutton)	12485	A
Question - 74	Multiple Choice (Radiobutton)	12486	A
Question - 75	Multiple Choice (Radiobutton)	12487	B
Question - 76	Multiple Choice (Radiobutton)	12488	A
Question - 77	Multiple Choice (Radiobutton)	12489	A
Question - 78	Multiple Choice (Radiobutton)	12490	C
Question - 79	Multiple Choice (Radiobutton)	12491	B
Question - 80	Multiple Choice (Radiobutton)	12492	B
Question - 81	Multiple Choice (Radiobutton)	12493	A
Question - 82	Multiple Choice (Radiobutton)	12494	B
Question - 83	Multiple Choice (Radiobutton)	12495	A
Question - 84	Multiple Choice (Radiobutton)	12496	C
Question - 85	Multiple Choice (Radiobutton)	12497	B
Question - 86	Multiple Choice (Radiobutton)	12498	A
Question - 87	Multiple Choice (Radiobutton)	12499	C
Question - 88	Multiple Choice (Radiobutton)	12500	C

No	Question Type	QID	Correct Answer	
Question - 89	Multiple Choice (Radiobutton)	12501	B	
Question - 90	Multiple Choice (Radiobutton)	12502	C	
Question - 91	Multiple Choice (Radiobutton)	12503	A	
Question - 92	Multiple Choice (Radiobutton)	12504	B	
Question - 93	Multiple Choice (Radiobutton)	12505	B	
Question - 94	Multiple Choice (Radiobutton)	12506	C	
Question - 95	Multiple Choice (Radiobutton)	12507	A	
Question - 96	Multiple Choice (Radiobutton)	12508	A	
Question - 97	Multiple Choice (Radiobutton)	12509	B	
Question - 98	Multiple Choice (Radiobutton)	12510	B	
Question - 99	Multiple Choice (Radiobutton)	12473	D	
Question - 100	Multiple Choice (Radiobutton)	12474	C	
Question - 101	Multiple Choice (Radiobutton)	12513	D	
Question - 102	Multiple Choice (Radiobutton)	12515	A	
Question - 103	Multiple Choice (Radiobutton)	12516	B	
Question - 104	Multiple Choice (Radiobutton)	12517	A	
Question - 105	Multiple Choice (Radiobutton)	12518	D	
Question - 106	Multiple Choice (Radiobutton)	12519	B	
Question - 107	Multiple Choice (Radiobutton)	12520	A	
Question - 108	Multiple Choice (Radiobutton)	12521	B	
Question - 109	Multiple Choice (Radiobutton)	12522	C	
Question - 110	Multiple Choice (Radiobutton)	12523	A	
Question - 111	Multiple Choice (Radiobutton)	12524	C	
Question - 112	Multiple Choice (Radiobutton)	12525	B	
Question - 113	Multiple Choice (Radiobutton)	12514	B	
Question - 114	Multiple Choice (Radiobutton)	12530	A	
Question - 115	Multiple Choice (Radiobutton)	12531	B	
Question - 116	Multiple Choice (Radiobutton)	12532	C	
Question - 117	Multiple Choice (Radiobutton)	12533	D	
Question - 118	Multiple Choice (Radiobutton)	12534	A	
Question - 119	Multiple Choice (Radiobutton)	12511	A	
Question - 120	Multiple Choice (Radiobutton)	12535	D	
Question - 121	Multiple Choice (Radiobutton)	12536	B	
Question - 122	Multiple Choice (Radiobutton)	12537	A	
Question - 123	Multiple Choice (Radiobutton)	12538	A	
Question - 124	Multiple Choice (Radiobutton)	12539	B	
Question - 125	Multiple Choice (Radiobutton)	12540	C	
Question - 126	Multiple Choice (Radiobutton)	12541	A	
Question - 127	Multiple Choice (Radiobutton)	12542	A	
Question - 128	Multiple Choice (Radiobutton)	12543	B	
Question - 129	Multiple Choice (Radiobutton)	12544	A	
Question - 130	Multiple Choice (Radiobutton)	12545	A	
Question - 131	Multiple Choice (Radiobutton)	12546	A	
Question - 132	Multiple Choice (Radiobutton)	12547	A	
Question - 133	Multiple Choice (Radiobutton)	12548	B	
Question - 134	Multiple Choice (Radiobutton)	12512	C	
Question - 135	Multiple Choice (Radiobutton)	12549	B	

No	Question Type	QID	Correct Answer
Question - 136	Multiple Choice (Radiobutton)	12550	A
Question - 137	Multiple Choice (Radiobutton)	12551	A
Question - 138	Multiple Choice (Radiobutton)	12552	B
Question - 139	Multiple Choice (Radiobutton)	12553	C
Question - 140	Multiple Choice (Radiobutton)	12554	A
Question - 141	Multiple Choice (Radiobutton)	12555	B
Question - 142	Multiple Choice (Radiobutton)	12556	B
Question - 143	Multiple Choice (Radiobutton)	12557	B
Question - 144	Multiple Choice (Radiobutton)	12558	A
Question - 145	Multiple Choice (Radiobutton)	12559	A
Question - 146	Multiple Choice (Radiobutton)	12560	A
Question - 147	Multiple Choice (Radiobutton)	12526	A
Question - 148	Multiple Choice (Radiobutton)	12527	D
Question - 149	Multiple Choice (Radiobutton)	12528	B
Question - 150	Multiple Choice (Radiobutton)	12529	C
Question - 151	Multiple Choice (Radiobutton)	12585	A
Question - 152	Multiple Choice (Radiobutton)	12586	D
Question - 153	Multiple Choice (Radiobutton)	12587	B
Question - 154	Multiple Choice (Radiobutton)	12588	C
Question - 155	Multiple Choice (Radiobutton)	12589	D
Question - 156	Multiple Choice (Radiobutton)	12590	C
Question - 157	Multiple Choice (Radiobutton)	12591	D
Question - 158	Multiple Choice (Radiobutton)	12592	B
Question - 159	Multiple Choice (Radiobutton)	12593	B
Question - 160	Multiple Choice (Radiobutton)	12594	A
Question - 161	Multiple Choice (Radiobutton)	12595	D
Question - 162	Multiple Choice (Radiobutton)	12596	A
Question - 163	Multiple Choice (Radiobutton)	12597	D
Question - 164	Multiple Choice (Radiobutton)	12598	C
Question - 165	Multiple Choice (Radiobutton)	12599	D
Question - 166	Multiple Choice (Radiobutton)	12600	D
Question - 167	Multiple Choice (Radiobutton)	12601	C
Question - 168	Multiple Choice (Radiobutton)	12602	C
Question - 169	Multiple Choice (Radiobutton)	12603	D
Question - 170	Multiple Choice (Radiobutton)	12604	C
Question - 171	Multiple Choice (Radiobutton)	12605	A
Question - 172	Multiple Choice (Radiobutton)	12606	B
Question - 173	Multiple Choice (Radiobutton)	12607	B
Question - 174	Multiple Choice (Radiobutton)	12608	C
Question - 175	Multiple Choice (Radiobutton)	12609	D
Question - 176	Multiple Choice (Radiobutton)	12610	B
Question - 177	Multiple Choice (Radiobutton)	12571	C
Question - 178	Multiple Choice (Radiobutton)	12572	B
Question - 179	Multiple Choice (Radiobutton)	12573	C
Question - 180	Multiple Choice (Radiobutton)	12574	A
Question - 181	Multiple Choice (Radiobutton)	12575	B

No	Question Type	QID	Correct Answer
Question - 182	Multiple Choice (Radiobutton)	12576	A
Question - 183	Multiple Choice (Radiobutton)	12577	C
Question - 184	Multiple Choice (Radiobutton)	12578	D
Question - 185	Multiple Choice (Radiobutton)	12579	D
Question - 186	Multiple Choice (Radiobutton)	12580	D
Question - 187	Multiple Choice (Radiobutton)	12581	B
Question - 188	Multiple Choice (Radiobutton)	12582	C
Question - 189	Multiple Choice (Radiobutton)	12583	B
Question - 190	Multiple Choice (Radiobutton)	12584	B
Question - 191	Multiple Choice (Radiobutton)	12561	C
Question - 192	Multiple Choice (Radiobutton)	12562	C
Question - 193	Multiple Choice (Radiobutton)	12563	A
Question - 194	Multiple Choice (Radiobutton)	12564	B
Question - 195	Multiple Choice (Radiobutton)	12565	C
Question - 196	Multiple Choice (Radiobutton)	12566	A
Question - 197	Multiple Choice (Radiobutton)	12567	C
Question - 198	Multiple Choice (Radiobutton)	12568	C
Question - 199	Multiple Choice (Radiobutton)	12569	B
Question - 200	Multiple Choice (Radiobutton)	12570	D

--- END OF ANSWER KEY ---