



Studybox Doon

RMS Mock Test 3 (9th)

Exam ID: 223

Name: _____

Date: _____

Exam Instructions

1. The timer has been set for the exam, and a countdown will display the remaining time. When the timer runs out, the exam will end automatically. No further action will be required after that.
2. You can flag any question that you want.
3. If you don't want to submit any of your provided answers, you can clear them.
4. If you choose to drop this exam, it will not be submitted, and no result will be generated.
5. Once you finish the exam, you cannot resume it.

Question: 1 of 200

QID: 11986

Marks: 1

The difference in the measures of two complementary angles is 12° , then the measures of the angles, are

Please mark (✓) for the correct answer.

- ☐ A. $51^\circ, 39^\circ$ ☐ B. $60^\circ, 30^\circ$
☐ C. $45^\circ, 45^\circ$ ☐ D. $51^\circ, 51^\circ$

Question: 2 of 200

QID: 11987

Marks: 1

The surface area of a sphere of diameter 14 cm, is

Please mark (✓) for the correct answer.

- ☐ A. 166 cm^2 ☐ B. 196 cm^2
☐ C. 661 cm^2 ☐ D. 616 cm^2

Question: 3 of 200

QID: 11988

Marks: 1

The sum of three consecutive even numbers is 138, then the greatest of these numbers is

Please mark (✓) for the correct answer.

- ☐ A. 44 ☐ B. 46
☐ C. 42 ☐ D. 48

Question: 4 of 200

QID: 11989

Marks: 1

The factorization of $84 - 2r - 2r^2$, is

Please mark (✓) for the correct answer.

- ☐ A. $(6-r)(r+7)$ ☐ B. $(7-r)(r+6)$
- ☐ C. $2(6-r)(r+7)$ ☐ D. $2(7-r)(r+7)$

Question: 5 of 200

QID: 11990

Marks: 1

If $x^2 + y^2 / x^2 - y^2 = 17/8$, then the value of $x : y$, is


Please mark (✓) for the correct answer.

- ☐ A. 3:5 ☐ B. 5:3
- ☐ C. 3:8 ☐ D. 5:8

Question: 6 of 200

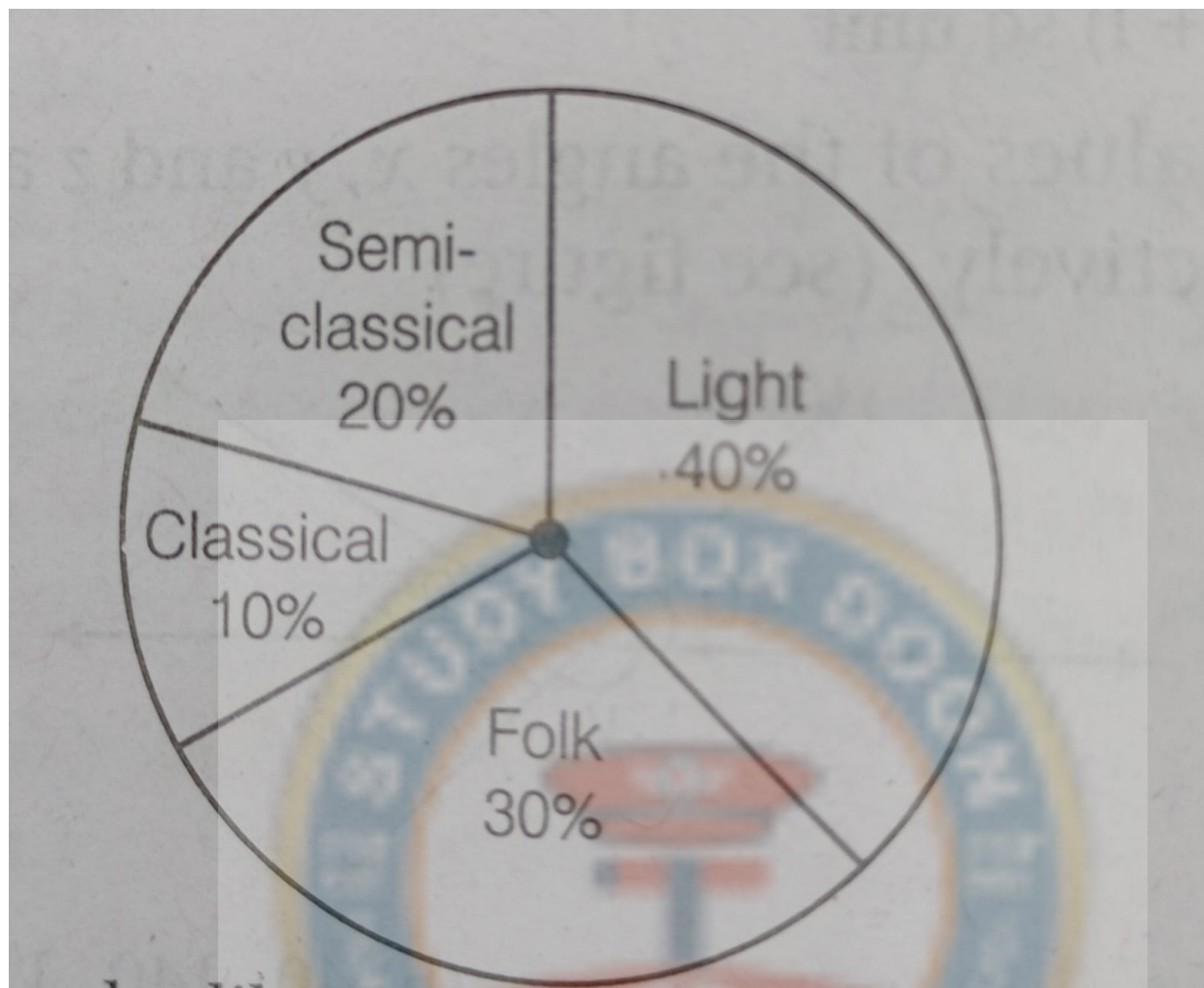
QID: 11991

Marks: 1



Directions (Q. Nos. 106 and 107) A pie chart is given below

Pie chart showing the distribution of people who like different types of music:



Which type of music is liked by the maximum number of people ?

Please mark (✓) for the correct answer.

- ☐ A. Semi-Classical ☐ B. Classical
- ☐ C. Light ☐ D. Folk

Question: 7 of 200

QID: 11992

Marks: 1

If a cassette company were to make 1000 CD'S, how many of semi-classical and folk would they make ?

Please mark (✓) for the correct answer.

- ☐ A. 200, 400 ☐ B. 100, 300
- ☐ C. 200, 300 ☐ D. 100, 400

Question: 8 of 200

QID: 11993

Marks: 1

The value of $\sqrt{24} + \sqrt{216} / \sqrt{96}$ is

Please mark (✓) for the correct answer.

- ☐ A. 8 ☐ B. 6
- ☐ C. 4 ☐ D. 2

Question: 9 of 200

QID: 11994

Marks: 1

Navin purchased a cellphone for ₹12000 and sold it for ₹ 8000, then his loss per cent, is

Please mark (✓) for the correct answer.

- ☐ A. 30% ☐ B. 33%
- ☐ C. $33\frac{1}{3}\%$ ☐ D. $34\frac{2}{3}\%$

Question: 10 of 200

QID: 11995

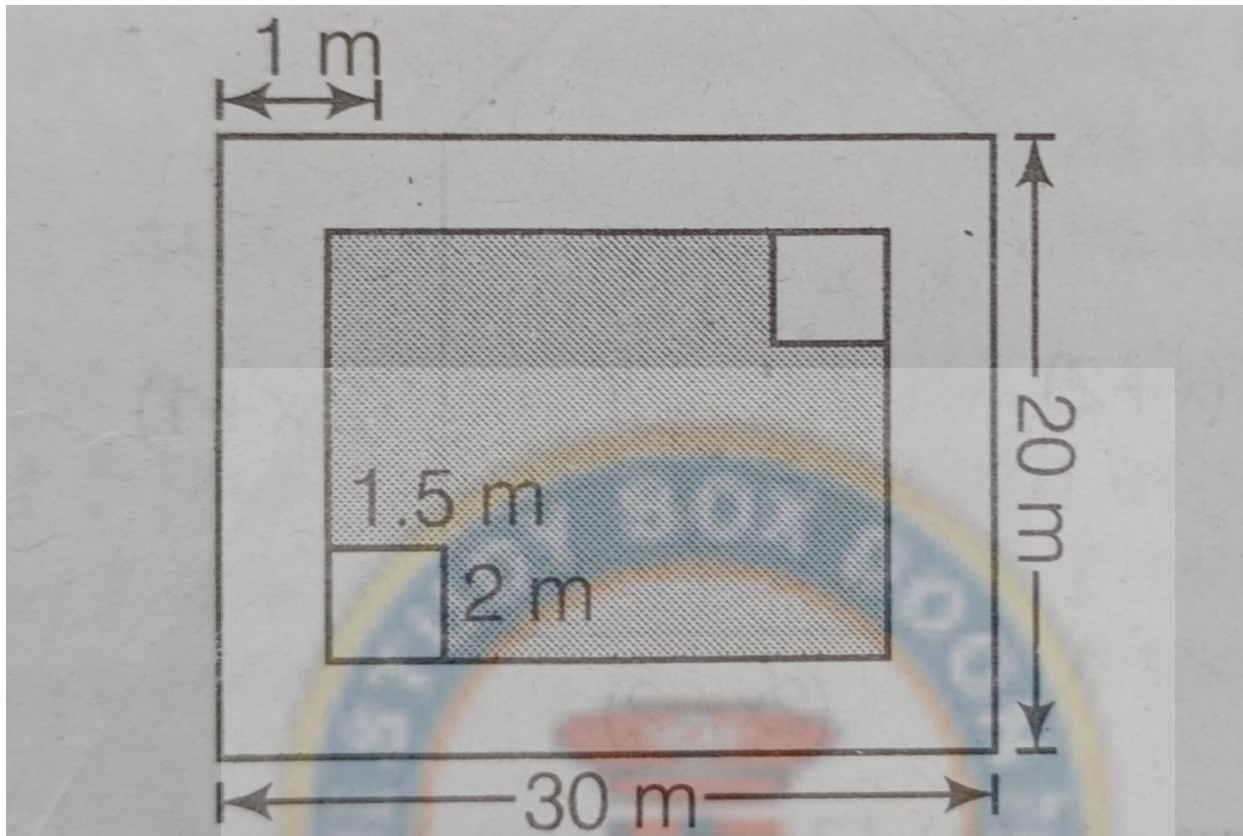
Marks: 1

The value of $(3x + 2y)^2 + (3x - 2y)^2$, is

Please mark (✓) for the correct answer.

- ☐ A. $9x^2 + 4y^2$ ☐ B. $18x^2 + 8y^2$
- ☐ C. $12xy$ ☐ D. $24xy$

There are two rectangular flower beds of size $1.5\text{ m} \times 2\text{ m}$ each in the park as shown in the given figure and the rest has grass on it, then the area covered by grass, is



Please mark (✓) for the correct answer.

- ☐ A. 498 m^2
☐ B. 948 m^2
☐ C. 894 m^2
☐ D. 849 m^2

Question: 12 of 200

QID: 11997

Marks: 1

If $5^{(3x-1)} \times 25 = 125$, then the value of x , is

Please mark (✓) for the correct answer.

- ☐ A. 4
 ☐ B. 3
 ☐ C. 2
 ☐ D. 1

Question: 13 of 200

QID: 11998

Marks: 1

A car is travelling 60 km in 2 h , then the distance travelled by the car in 6 h , if the speed remains constant, is

Please mark (✓) for the correct answer.

- ☐ A. 60 km
☐ B. 120 km
☐ C. 180 km
☐ D. 240 km

Question: 14 of 200

QID: 11999

Marks: 1

If $x - 1/x = 7$, then the value of $x^2 + 1/x^2$, is

Please mark (✓) for the correct answer.

- ☐ A. 49 ☐ B. 50
- ☐ C. 51 ☐ D. 52

Question: 15 of 200

QID: 12000

Marks: 1

A pair of integers whose product is -36 and whose difference is 15, is

Please mark (✓) for the correct answer.

- ☐ A. -3,12 ☐ B. -12,3
- ☐ C. 9,-4 ☐ D. 4,-9

Question: 16 of 200

QID: 12001

Marks: 1

The HCF of $12/7$, $18/7$, $24/7$, is

Please mark (✓) for the correct answer.

- ☐ A. $12/7$ ☐ B. $6/7$
- ☐ C. $4/7$ ☐ D. $3/7$

Question: 17 of 200

QID: 12002

Marks: 1

By prime factorisation, the value of the cube root of 5832, is

Please mark (✓) for the correct answer.

- ☐ A. 16 ☐ B. 17
- ☐ C. 18 ☐ D. 19

Question: 18 of 200

QID: 12003

Marks: 1

If two interior angles on the same side of a transversal intersecting two parallel lines are in the ratio 3:2, then the greater of the two angles, is

Please mark (✓) for the correct answer.

- ☐ A. 72° ☐ B. 36°
- ☐ C. 108° ☐ D. 44°

Question: 19 of 200

QID: 12004

Marks: 1

The nature of $(-5 + 2\sqrt{5} - \sqrt{5})$ is

Please mark (✓) for the correct answer.

- ☐ A. natural ☐ B. integer
- ☐ C. rational ☐ D. irrational

Question: 20 of 200

QID: 12005

Marks: 1

If the total surface area of a cube is 486 cm^2 , then its lateral surface area.

Please mark (✓) for the correct answer.

- ☐ A. 243 cm^2 ☐ B. 342 cm^2
- ☐ C. 324 cm^2 ☐ D. 432 cm^2

Question: 21 of 200

QID: 12020

Marks: 1

Difference of two perfect cubes is 189. If the cube root of the smaller of the two numbers is 3, the cube root of the larger number, is

Please mark (✓) for the correct answer.

- ☐ A. 27 ☐ B. 36
- ☐ C. 9 ☐ D. 6

Question: 22 of 200

QID: 12021

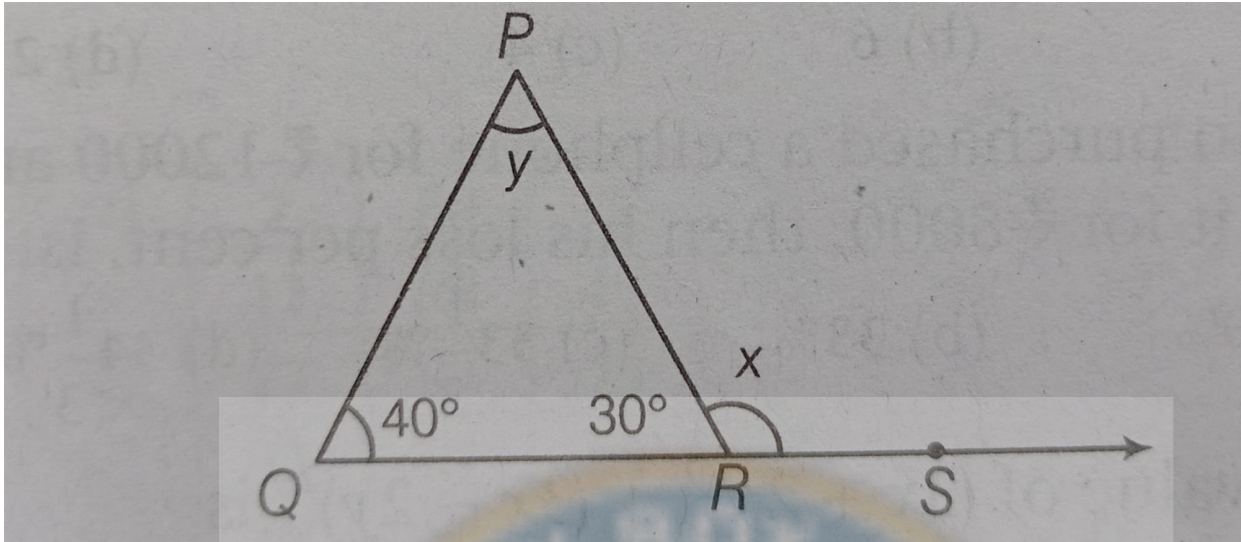
Marks: 1

If the speed of a boat in still water is 15 km/h . It can go 30 km upstream and 45 km downstream in the same time, then the speed of stream.

Please mark (✓) for the correct answer.

- ☐ A. 3 km/h ☐ B. 4 km/h
- ☐ C. 5 km/h ☐ D. 6 km/h

In the following figure, then the value of $2x$, is



Please mark (✓) for the correct answer.

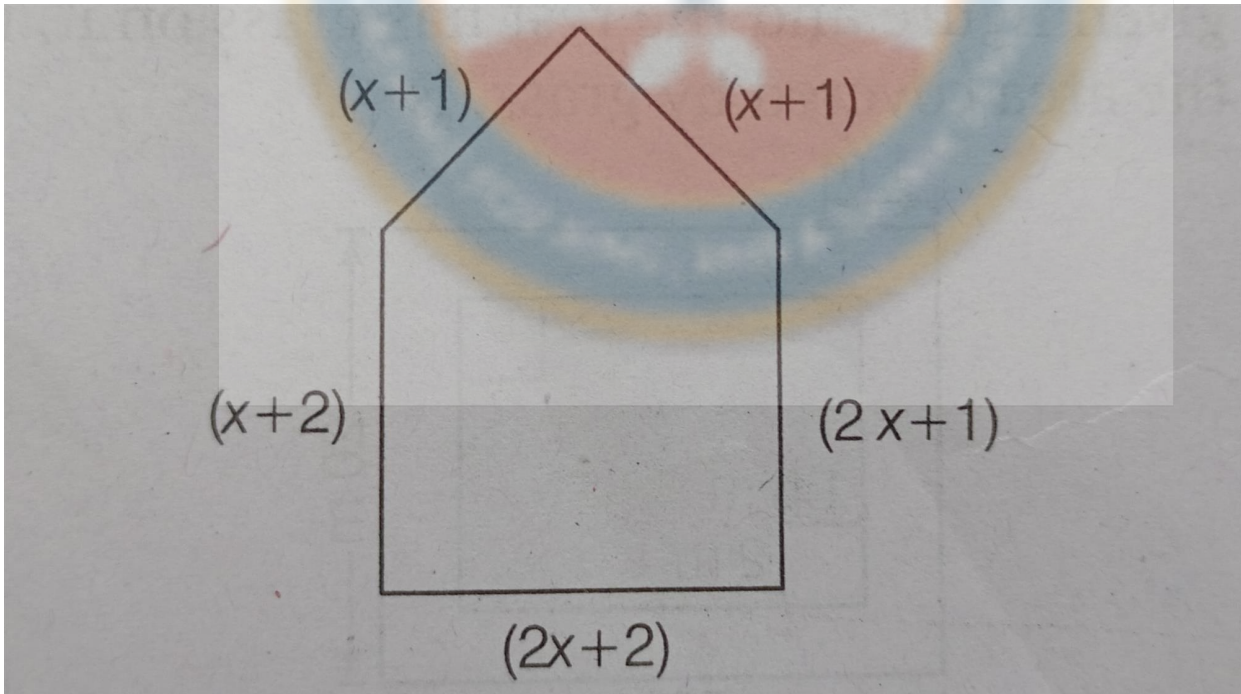
- ☐ A. 300° ☐ B. 200°
☐ C. 100° ☐ D. 50°

Question: 24 of 200

QID: 12007

Marks: 1

For what value of x , the perimeter of shape is 77 cm?



Please mark (✓) for the correct answer.

- ☐ A. 14 cm ☐ B. 12 cm
☐ C. 10 cm ☐ D. 8 cm

Question: 25 of 200

QID: 12008

Marks: 1

If $p(x) = x^3 - 4x^2 + x + 6$, then the value of $p(3)$ is

Please mark (✓) for the correct answer.

- ☐ A. 27 ☐ B. 10
☐ C. 4 ☐ D. 0

Question: 26 of 200

QID: 12009

Marks: 1

If $a:b = 5:3$, then the value of $(5a+8b) : (6a-7b)$, is

Please mark (✓) for the correct answer.

- ☐ A. 9:49 ☐ B. 49:9
☐ C. 11:50 ☐ D. 50:11

Question: 27 of 200

QID: 12010

Marks: 1

If you have a spinning wheel with 3 green sectors, 5 black sectors and 10 red sectors, then the probability of getting a non-black sector, is

Please mark (✓) for the correct answer.

- ☐ A. $\frac{1}{9}$ ☐ B. $\frac{1}{6}$
☐ C. $\frac{5}{9}$ ☐ D. $\frac{13}{18}$

Question: 28 of 200

QID: 12011

Marks: 1

The value of $\sqrt{248} + \sqrt{52} + \sqrt{144}$, is

Please mark (✓) for the correct answer.

- ☐ A. 17 ☐ B. 16
☐ C. 15 ☐ D. 14

Question: 29 of 200

QID: 12012

Marks: 1

Find the compound interest on ₹48000 for one year at 8% per annum, when compounded half-yearly.

Please mark (✓) for the correct answer.

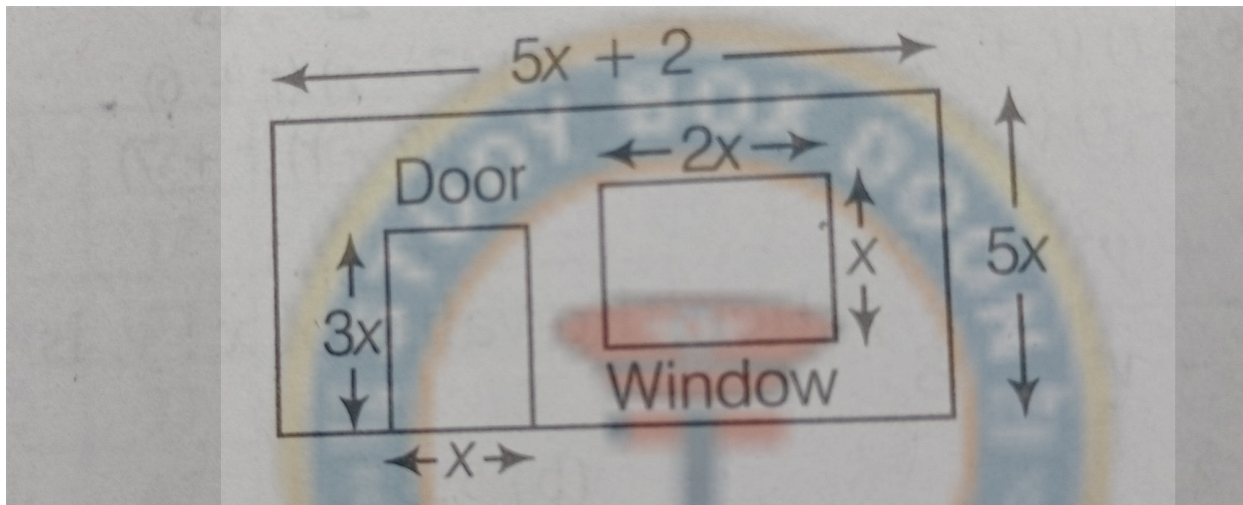
- ☐ A. ₹51916 ☐ B. ₹51916.80
☐ C. ₹3916.80 ☐ D. ₹3910.80

If lemons were bought at ₹48 per dozen and sold at the rate of ₹48 per 10, then the gain or loss per cent, is

Please mark (✓) for the correct answer.

- ☐ A. 40% profit
 ☐ B. 40% loss
 ☐ C. 20% profit
 ☐ D. 20% loss

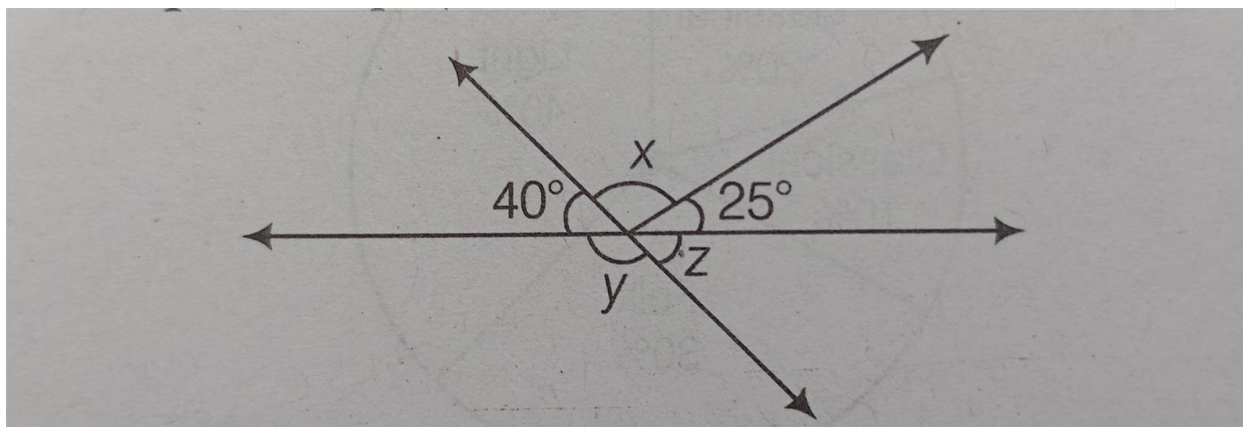
The alongside figure shows the dimensions of a wall having a window and a door of a room. Then, the algebraic expression for the area of the wall to be painted, is



Please mark (✓) for the correct answer.

- ☐ A. $x(2x+1)$ sq unit
 ☐ B. $2x(x+1)$ sq unit
 ☐ C. $10x(2x+1)$ sq unit
 ☐ D. $(x+1)$ sq unit

The values of the angles x , y and z are respectively,



Please mark (✓) for the correct answer.

- ☐ A. $115^\circ, 140^\circ, 40^\circ$
☐ B. $40^\circ, 140^\circ, 115^\circ$
☐ C. $140^\circ, 40^\circ, 115^\circ$
☐ D. $115^\circ, 40^\circ, 140^\circ$

Question: 33 of 200

QID: 12016

Marks: 1

If some migratory birds travel as much as 15000 km to escape the extreme climatic conditions at home, then the distance in meters using scientific notation, is

Please mark (✓) for the correct answer.

- ☐ A. 1.5×10^7 m
- ☐ B. 1.5×10^5 m
- ☐ C. 1.5×10^6 m
- ☐ D. 1.5×10^7 m

Question: 34 of 200

QID: 12017

Marks: 1

30 persons can reap a field in 17 days. How many more persons should be engaged to reap the same field in 10 days?

Please mark (✓) for the correct answer.

- ☐ A. 17
- ☐ B. 30
- ☐ C. 51
- ☐ D. 21

Question: 35 of 200

QID: 12018

Marks: 1

A negative integer and a positive integer whose difference is +2, are

Please mark (✓) for the correct answer.

- ☐ A. -1, 3
- ☐ B. -2, 4
- ☐ C. -1, 1
- ☐ D. -4, 6

Question: 36 of 200

QID: 12019

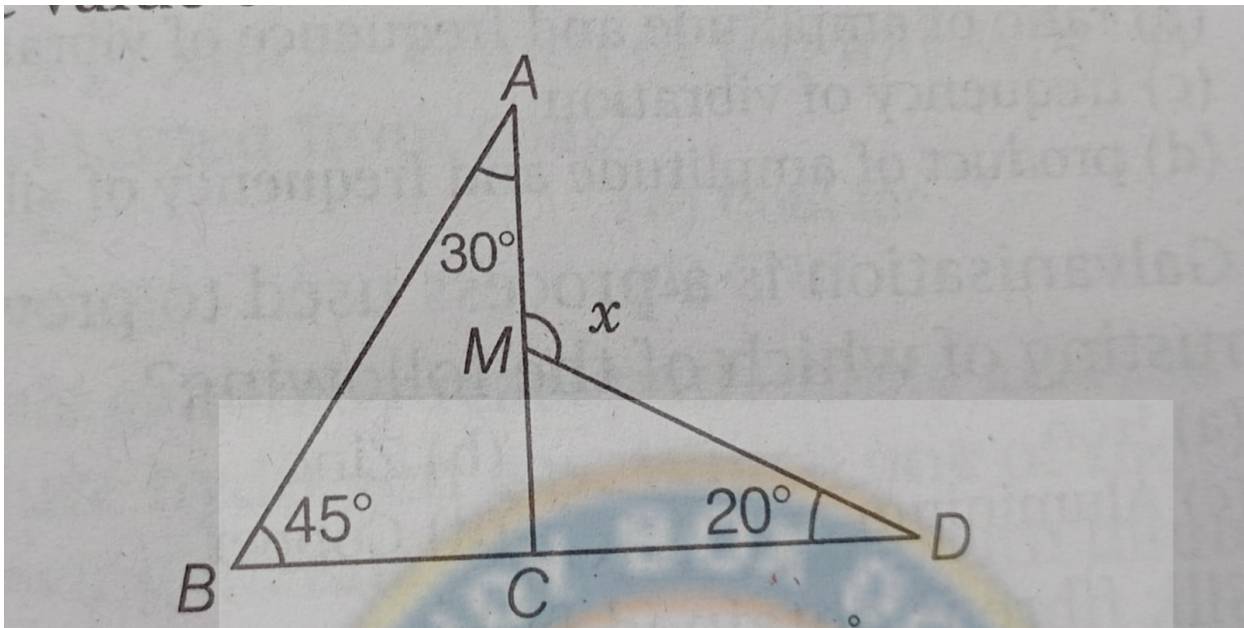
Marks: 1

Six bells begin to toll together at the interval of 10 s, 15sec, 20sec, 25sec, 30sec, 35sec respectively, then how many times will they toll together in the span of 7 h?

Please mark (✓) for the correct answer.

- ☐ A. 12
- ☐ B. 10
- ☐ C. 8
- ☐ D. 6

The value of x is.



Please mark (✓) for the correct answer.

- ☐ A. 75°
- ☐ B. 95°
- ☐ C. 105°
- ☐ D. 125°

Which number is not divisible by 9?

Please mark (✓) for the correct answer.

- ☐ A. 108
- ☐ B. 215
- ☐ C. 387
- ☐ D. 693

If a rectangular sheet of paper 44 cm x 18 cm is rolled along its length and a cylinder is formed, then the radius of the cylinder.

Please mark (✓) for the correct answer.

- ☐ A. 14 cm
- ☐ B. 7 cm
- ☐ C. 12 cm
- ☐ D. 6 cm

Question: 40 of 200

QID: 12025

Marks: 1

If $2^{1998} - 2^{1997} - 2^{1996} + 2^{1995} = k * 2^{1995}$ then the value of k is

Please mark (✓) for the correct answer.

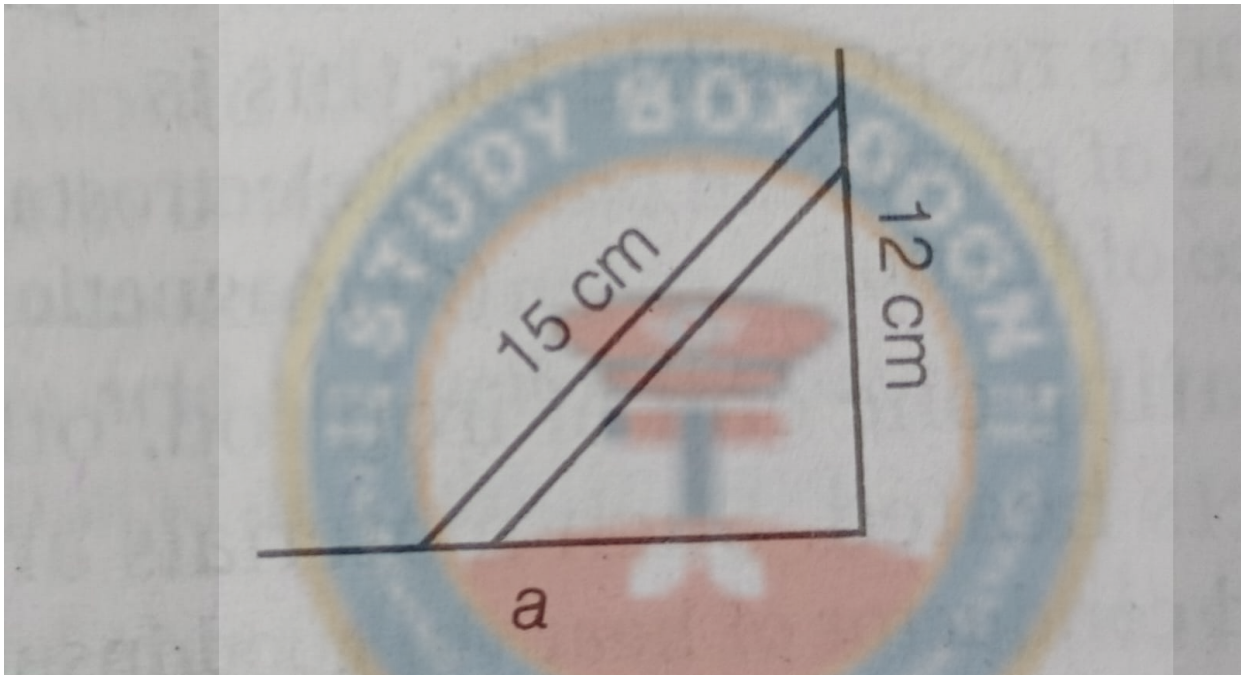
- ☐ A. 1 ☐ B. 2
- ☐ C. 3 ☐ D. 4

Question: 41 of 200

QID: 12026

Marks: 1

A 15 m long ladder reached a window 12 m high from the ground on placing it against a wall at a distance a. Find the distance of the foot of the ladder from the wall.



Please mark (✓) for the correct answer.

- ☐ A. 10 m ☐ B. 9 m
- ☐ C. 8 m ☐ D. 4 m

Question: 42 of 200

QID: 12027

Marks: 1

The present age of father is four times the age of his son. After 10 year, age of father will become three times the age of his son. Their present ages, are

Please mark (✓) for the correct answer.

- ☐ A. 20 yr, 80 yr ☐ B. 10 yr, 40 yr
- ☐ C. 5 yr, 20 yr ☐ D. 1 yr, 20 yr

Question: 43 of 200

QID: 12028

Marks: 1

The value of 103×107 without multiplying directly, is

Please mark (✓) for the correct answer.

☐ A. 10121☐ B. 11201☐ C. 11021☐ D. 10112**Question: 44 of 200**

QID: 12029

Marks: 1

In a Mathematics test given to 15 students, the following marks (out of 100) are recorded 41, 39, 48, 52, 46, 62, 54, 40, 96, 52, 98, 40, 42, 52, 60, then the mean of this data.

Please mark (✓) for the correct answer.

☐ A. 50☐ B. 59.80☐ C. 54☐ D. 54.80**Question: 45 of 200**

QID: 12030

Marks: 1

The least number that must be added to 1500, so as to get perfect square, is

Please mark (✓) for the correct answer.

☐ A. 19☐ B. 20☐ C. 21☐ D. 22**Question: 46 of 200**

QID: 12031

Marks: 1

The value of $\sqrt[3]{27} + \sqrt[3]{0.008} + \sqrt[3]{0.064}$, is

Please mark (✓) for the correct answer.

☐ A. 2.6☐ B. 3.6☐ C. 4.6☐ D. 5.6**Question: 47 of 200**

QID: 12032

Marks: 1

The probabilities of a student getting A, B, C and D grades are 0.35, 0.25, 0.35 and 0.05. Then, the probability that a student gets at most grade C, is

Please mark (✓) for the correct answer.

☐ A. 0.95☐ B. 0.70☐ C. 0.65☐ D. 0.40

Question: 48 of 200

QID: 12033

Marks: 1

Which of the property works in the following identity? $(8 + 5) + 3 = 8 + (5 + 3)$

Please mark (✓) for the correct answer.

- ☐ A. Distributive ☐ B. Associative
- ☐ C. Commutative ☐ D. Closure

Question: 49 of 200

QID: 12034

Marks: 1

Efficiency of Kanchan is four times to that of Hina. If they will complete the work is 24 days by working together, then in how many days can Hina alone complete the work?

Please mark (✓) for the correct answer.

- ☐ A. 36 days ☐ B. 24 days
- ☐ C. 144 days ☐ D. 96 days

Question: 50 of 200

QID: 12035

Marks: 1

The sum required to earn a monthly interest of ₹1500 at 5% per annum at simple interest.

Please mark (✓) for the correct answer.

- ☐ A. ₹3,60,000 ☐ B. ₹36,000
- ☐ C. ₹1,80,000 ☐ D. ₹18000

Question: 51 of 200

QID: 12036

Marks: 1

The SI unit of force is

Please mark (✓) for the correct answer.

- ☐ A. Joule ☐ B. Newton
- ☐ C. Pascal ☐ D. Dyne

Question: 52 of 200

QID: 12037

Marks: 1

The gas evolved when zinc reacts with dilute hydrochloric acid is

Please mark (✓) for the correct answer.

- ☐ A. Oxygen ☐ B. Carbon dioxide
- ☐ C. Hydrogen ☐ D. Nitrogen

Question: 53 of 200

QID: 12038

Marks: 1

The hereditary material in humans is

Please mark (✓) for the correct answer.

- | | |
|------------------------------|----------------------------------|
| <input type="radio"/> A. RNA | <input type="radio"/> B. Protein |
| <input type="radio"/> C. DNA | <input type="radio"/> D. Lipid |

Question: 54 of 200

QID: 12039

Marks: 1

Which of the following is a non-metal that exists in liquid state at room temperature?

Please mark (✓) for the correct answer.

- | | |
|----------------------------------|-----------------------------------|
| <input type="radio"/> A. Oxygen | <input type="radio"/> B. Hydrogen |
| <input type="radio"/> C. Bromine | <input type="radio"/> D. Nitrogen |

Question: 55 of 200

QID: 12040

Marks: 1

Which of the following is an example of a metalloid?

Please mark (✓) for the correct answer.

- | | |
|---------------------------------|-----------------------------------|
| <input type="radio"/> A. Sodium | <input type="radio"/> B. Oxygen |
| <input type="radio"/> C. Boron | <input type="radio"/> D. Chlorine |

Question: 56 of 200

QID: 12041

Marks: 1

The chemical formula of washing soda is

Please mark (✓) for the correct answer.

- | | |
|--|---|
| <input type="radio"/> A. NaCl | <input type="radio"/> B. NaOH |
| <input type="radio"/> C. $\text{Na}_2\text{CO}_3 \cdot 10\text{H}_2\text{O}$ | <input type="radio"/> D. NaHCO_3 |

Question: 57 of 200

QID: 12042

Marks: 1

Which of the following is a physical change?

Please mark (✓) for the correct answer.

- | | |
|--|--|
| <input type="radio"/> A. Rusting of iron | <input type="radio"/> B. Burning of paper |
| <input type="radio"/> C. Melting of ice | <input type="radio"/> D. Digestion of food |

Question: 58 of 200

QID: 12043

Marks: 1

Newton's second law of motion states that

Please mark (✓) for the correct answer.

- | | |
|--|---|
| <input type="radio"/> A. Every action has an equal and opposite reaction | <input type="radio"/> B. A body at rest remains at rest |
| <input type="radio"/> C. Force = Mass × Acceleration | <input type="radio"/> D. None of the above |

Question: 59 of 200

QID: 12044

Marks: 1

Which of the following is not a vector quantity?

Please mark (✓) for the correct answer.

- | | |
|--------------------------------|---------------------------------------|
| <input type="radio"/> A. Force | <input type="radio"/> B. Velocity |
| <input type="radio"/> C. Speed | <input type="radio"/> D. Displacement |

Question: 60 of 200

QID: 12045

Marks: 1

Which part of the plant conducts water from roots to leaves?

Please mark (✓) for the correct answer.

- | | |
|---------------------------------|----------------------------------|
| <input type="radio"/> A. Phloem | <input type="radio"/> B. Cambium |
| <input type="radio"/> C. Xylem | <input type="radio"/> D. Leaves |

Question: 61 of 200

QID: 12046

Marks: 1

Which vitamin is synthesized by skin in presence of sunlight?

Please mark (✓) for the correct answer.

- | | |
|------------------------------------|------------------------------------|
| <input type="radio"/> A. Vitamin A | <input type="radio"/> B. Vitamin B |
| <input type="radio"/> C. Vitamin D | <input type="radio"/> D. Vitamin C |

Question: 62 of 200

QID: 12047

Marks: 1

The process of converting a solid directly into a gas is called

Please mark (✓) for the correct answer.

- | | |
|---------------------------------------|--------------------------------------|
| <input type="radio"/> A. Condensation | <input type="radio"/> B. Evaporation |
| <input type="radio"/> C. Sublimation | <input type="radio"/> D. Melting |

Question: 63 of 200

QID: 12048

Marks: 1

Which of the following is a non-renewable source of energy?

Please mark (✓) for the correct answer.

- | | |
|---------------------------------------|--------------------------------------|
| <input type="radio"/> A. Solar energy | <input type="radio"/> B. Wind energy |
| <input type="radio"/> C. Coal | <input type="radio"/> D. Biomass |

Question: 64 of 200

QID: 12049

Marks: 1

The layer of Earth which is liquid in nature is

Please mark (✓) for the correct answer.

- | | |
|-------------------------------------|-------------------------------------|
| <input type="radio"/> A. Crust | <input type="radio"/> B. Mantle |
| <input type="radio"/> C. Outer core | <input type="radio"/> D. Inner core |

Question: 65 of 200

QID: 12050

Marks: 1

Which of the following acids is present in lemon?

Please mark (✓) for the correct answer.

- | | |
|--|--|
| <input type="radio"/> A. Sulfuric acid | <input type="radio"/> B. Hydrochloric acid |
| <input type="radio"/> C. Citric acid | <input type="radio"/> D. Acetic acid |

Question: 66 of 200

QID: 12051

Marks: 1

Which organelle is known as the powerhouse of the cell?

Please mark (✓) for the correct answer.

- | | |
|---------------------------------------|--------------------------------------|
| <input type="radio"/> A. Ribosome | <input type="radio"/> B. Nucleus |
| <input type="radio"/> C. Mitochondria | <input type="radio"/> D. Chloroplast |

Question: 67 of 200

QID: 12052

Marks: 1

Which gas is responsible for global warming?

Please mark (✓) for the correct answer.

- | | |
|---|-----------------------------------|
| <input type="radio"/> A. Oxygen | <input type="radio"/> B. Nitrogen |
| <input type="radio"/> C. Carbon dioxide | <input type="radio"/> D. Hydrogen |

Question: 68 of 200

QID: 12053

Marks: 1

The process of separation of immiscible liquids using a separating funnel is called

Please mark (✓) for the correct answer.

- ☐ A. Filtration ☐ B. Distillation
- ☐ C. Decantation ☐ D. Evaporation

Question: 69 of 200

QID: 12054

Marks: 1

The basic unit of life is

Please mark (✓) for the correct answer.

- ☐ A. Organ ☐ B. Tissue
- ☐ C. Cell ☐ D. Organism

Question: 70 of 200

QID: 12055

Marks: 1

Ohm's law states that

Please mark (✓) for the correct answer.

- ☐ A. $P = VI$ ☐ B. $V = I^2R$
- ☐ C. $V = I \times R$ ☐ D. None of the above

Question: 71 of 200

QID: 12056

Marks: 1

The chemical formula of common salt is

Please mark (✓) for the correct answer.

- ☐ A. KCl ☐ B. NaOH
- ☐ C. NaCl ☐ D. CaCl₂

Question: 72 of 200

QID: 12057

Marks: 1

Which of the following metals is liquid at room temperature?

Please mark (✓) for the correct answer.

- ☐ A. Iron ☐ B. Aluminium
- ☐ C. Mercury ☐ D. Copper

Question: 73 of 200

QID: 12058

Marks: 1

The process by which green plants make their own food is called

Please mark (✓) for the correct answer.

- ☐ A. Respiration
- ☐ B. Transpiration
- ☐ C. Photosynthesis
- ☐ D. Fermentation

Question: 74 of 200

QID: 12059

Marks: 1

The pH of pure water is

Please mark (✓) for the correct answer.

- ☐ A. 6
- ☐ B. 8
- ☐ C. 7
- ☐ D. 5

Question: 75 of 200

QID: 12060

Marks: 1

The SI unit of pressure is

Please mark (✓) for the correct answer.

- ☐ A. Newton
- ☐ B. Joule
- ☐ C. Pascal
- ☐ D. Watt

Question: 76 of 200

QID: 12061

Marks: 1

The process by which a solid changes into liquid is called

Please mark (✓) for the correct answer.

- ☐ A. Condensation
- ☐ B. Evaporation
- ☐ C. Melting
- ☐ D. Sublimation

Question: 77 of 200

QID: 12062

Marks: 1

Which of the following is responsible for giving color to leaves?

Please mark (✓) for the correct answer.

- ☐ A. Mitochondria
- ☐ B. Chloroplast
- ☐ C. Chlorophyll
- ☐ D. Xylem

Question: 78 of 200

QID: 12063

Marks: 1

The unit of electric power is

Please mark (✓) for the correct answer.

- | | |
|--------------------------------|---------------------------------|
| <input type="radio"/> A. Joule | <input type="radio"/> B. Volt |
| <input type="radio"/> C. Watt | <input type="radio"/> D. Ampere |

Question: 79 of 200

QID: 12064

Marks: 1

Which part of the human brain controls voluntary actions?

Please mark (✓) for the correct answer.

- | | |
|-------------------------------------|--------------------------------------|
| <input type="radio"/> A. Cerebellum | <input type="radio"/> B. Medulla |
| <input type="radio"/> C. Cerebrum | <input type="radio"/> D. Spinal cord |

Question: 80 of 200

QID: 12065

Marks: 1

The blood vessels that carry blood away from the heart are called

Please mark (✓) for the correct answer.

- | | |
|-----------------------------------|--------------------------------------|
| <input type="radio"/> A. Veins | <input type="radio"/> B. Capillaries |
| <input type="radio"/> C. Arteries | <input type="radio"/> D. Venules |

Question: 81 of 200

QID: 12066

Marks: 1

Which gas is released during photosynthesis?

Please mark (✓) for the correct answer.

- | | |
|---------------------------------|---|
| <input type="radio"/> A. Oxygen | <input type="radio"/> B. Carbon dioxide |
| <input type="radio"/> C. Ozon | <input type="radio"/> D. Nitrogen |

Question: 82 of 200

QID: 12067

Marks: 1

Which organ in humans produces bile?

Please mark (✓) for the correct answer.

- | | |
|-----------------------------------|----------------------------------|
| <input type="radio"/> A. Pancreas | <input type="radio"/> B. Stomach |
| <input type="radio"/> C. Liver | <input type="radio"/> D. Kidney |

Question: 83 of 200

QID: 12068

Marks: 1

Which of the following is an acidic oxide?

Please mark (✓) for the correct answer.

☐ A. CO₂☐ B. SO₂☐ C. O₂☐ D. Na₂O**Question: 84 of 200**

QID: 12069

Marks: 1

The main component of natural gas is

Please mark (✓) for the correct answer.

☐ A. Methane☐ B. Propane☐ C. Oxygen☐ D. Ethane**Question: 85 of 200**

QID: 12070

Marks: 1

The SI unit of work is

Please mark (✓) for the correct answer.

☐ A. Joule☐ B. Newton☐ C. Kilo meter☐ D. Watt**Question: 86 of 200**

QID: 12071

Marks: 1

The speed of light in vacuum is approximately

Please mark (✓) for the correct answer.

☐ A. 3×10^8 m/s☐ B. 3×10^6 m/s☐ C. 3×10 m/s☐ D. 3×10^5 m/s**Question: 87 of 200**

QID: 12072

Marks: 1

The device used to measure current in a circuit is

Please mark (✓) for the correct answer.

☐ A. Voltmeter☐ B. Ohmmeter☐ C. Ammeter☐ D. Galvanometer

Question: 88 of 200

QID: 12073

Marks: 1

Which of the following elements is most reactive?

Please mark (✓) for the correct answer.

- ☐ A. Gold
- ☐ B. Silver
- ☐ C. Sodium
- ☐ D. Copper

Question: 89 of 200

QID: 12074

Marks: 1

Which of the following is used as a fuel in nuclear reactors?

Please mark (✓) for the correct answer.

- ☐ A. Uranium-235
- ☐ B. Thorium
- ☐ C. Helium-235
- ☐ D. Plutonium-239

Question: 90 of 200

QID: 12075

Marks: 1

The movement of Earth around the Sun is called

Please mark (✓) for the correct answer.

- ☐ A. Rotation
- ☐ B. Revolution
- ☐ C. Revotion
- ☐ D. Orbit

Question: 91 of 200

QID: 12076

Marks: 1

Which of the following acids is used in car batteries?

Please mark (✓) for the correct answer.

- ☐ A. Citric acid
- ☐ B. Acetic acid
- ☐ C. Sulfuric acid
- ☐ D. Hydrochloric acid

Question: 92 of 200

QID: 12077

Marks: 1

The basic unit of heredity is

Please mark (✓) for the correct answer.

- ☐ A. Chromosome
- ☐ B. Gene
- ☐ C. Cell
- ☐ D. None

Question: 93 of 200

QID: 12078

Marks: 1

Which phenomenon explains the bending of light as it passes from one medium to another?

Please mark (✓) for the correct answer.

- ☐ A. Reflection
- ☐ B. Diffraction
- ☐ C. Refraction
- ☐ D. Polarization

Question: 94 of 200

QID: 12079

Marks: 1

Which of the following is a conductor of electricity?

Please mark (✓) for the correct answer.

- ☐ A. Rubber
- ☐ B. Glass
- ☐ C. Copper
- ☐ D. Plastic

Question: 95 of 200

QID: 12080

Marks: 1

The chemical formula of quicklime is

Please mark (✓) for the correct answer.

- ☐ A. CaCO_3
- ☐ B. CaSO_4
- ☐ C. CaO
- ☐ D. Ca(OH)_2

Question: 96 of 200

QID: 12081

Marks: 1

Which of the following is an example of chemical change?

Please mark (✓) for the correct answer.

- ☐ A. Melting of wax
- ☐ B. Boiling of water
- ☐ C. Burning of paper
- ☐ D. Freezing of water

Question: 97 of 200

QID: 12082

Marks: 1

Which of the following is used in making fertilizers?

Please mark (✓) for the correct answer.

- ☐ A. HCl
- ☐ B. NaOH
- ☐ C. Ammonia
- ☐ D. CO_2

Question: 98 of 200

QID: 12083

Marks: 1

Which of the following is a renewable source of energy?

Please mark (✓) for the correct answer.

- ☐ A. Coal
- ☐ B. Petroleum
- ☐ C. Solar energy
- ☐ D. Natural gas

Question: 99 of 200

QID: 12084

Marks: 1

Which of the following is a skeletal system disorder?

Please mark (✓) for the correct answer.

- ☐ A. Asthma
- ☐ B. Tuberculosis
- ☐ C. Osteoporosis
- ☐ D. Diabetes

Question: 100 of 200

QID: 12085

Marks: 1

Which of the following is the most abundant gas in the atmosphere?

Please mark (✓) for the correct answer.

- ☐ A. Oxygen
- ☐ B. Carbon dioxide
- ☐ C. Nitrogen
- ☐ D. Hydrogen

Question: 101 of 200

QID: 12086

Marks: 1

Choose the correct antonym of "Generous"

Please mark (✓) for the correct answer.

- ☐ A. Kind
- ☐ B. Helpful
- ☐ C. Stingy
- ☐ D. Charitable

Question: 102 of 200

QID: 12087

Marks: 1

Identify the correct conjunction: "I wanted to go, _____ it was raining."

Please mark (✓) for the correct answer.

- ☐ A. But
- ☐ B. And
- ☐ C. But
- ☐ D. Or

Question: 103 of 200

QID: 12088

Marks: 1

Select the correct article: "She is _____ honest girl."

Please mark (✓) for the correct answer.

- ☐ A. A ☐ B. An
☐ C. An ☐ D. The

Question: 104 of 200

QID: 12089

Marks: 1

Fill in the blank: "Few students _____ completed the project."

Please mark (✓) for the correct answer.

- ☐ A. Has ☐ B. Have
☐ C. Have ☐ D. Had

Question: 105 of 200

QID: 12090

Marks: 1

Choose the correct form of verb: "If I _____ you, I would apologize."

Please mark (✓) for the correct answer.

- ☐ A. Am ☐ B. Was
☐ C. Were ☐ D. Is

Question: 106 of 200

QID: 12091

Marks: 1

Select the correct form: "He _____ to the market every day."

Please mark (✓) for the correct answer.

- ☐ A. Go ☐ B. Going
☐ C. Goes ☐ D. Gone

Question: 107 of 200

QID: 12092

Marks: 1

Identify the correct article: "_____ elephant is a large animal."

Please mark (✓) for the correct answer.

- ☐ A. A ☐ B. An
☐ C. An ☐ D. The

Question: 108 of 200

QID: 12093

Marks: 1

Choose the correctly spelled word

Please mark (✓) for the correct answer.

- ☐ A. Accomodate ☐ B. Accommodate
- ☐ C. Accommodate ☐ D. Acomodate

Question: 109 of 200

QID: 12094

Marks: 1

Select the correct option: "I am looking forward _____ meeting you."

Please mark (✓) for the correct answer.

- ☐ A. To ☐ B. For
- ☐ C. To ☐ D. With

Question: 110 of 200

QID: 12095

Marks: 1

Select the correct antonym of "Victory"

Please mark (✓) for the correct answer.

- ☐ A. Win ☐ B. Success
- ☐ C. Defeat ☐ D. Triumph

Question: 111 of 200

QID: 12096

Marks: 1

Select the correct form of adjective: "This is the _____ book I have ever read."

Please mark (✓) for the correct answer.

- ☐ A. Good ☐ B. Better
- ☐ C. Best ☐ D. Well

Question: 112 of 200

QID: 12097

Marks: 1

Identify the correct preposition: "He is good _____ playing football."

Please mark (✓) for the correct answer.

- ☐ A. At ☐ B. On
- ☐ C. At ☐ D. In

Question: 113 of 200

QID: 12098

Marks: 1

Choose the correct passive form: "They built the bridge in 1990."

Please mark (✓) for the correct answer.

- ☐ A. The bridge built in 1990
- ☐ B. The bridge was built in 1990
- ☐ C. The bridge was built in 1990
- ☐ D. The bridge is built in 1990

Question: 114 of 200

QID: 12099

Marks: 1

Choose the correctly punctuated sentence

Please mark (✓) for the correct answer.

- ☐ A. He said I am tired
- ☐ B. He said I'm tired
- ☐ C. He said, "I am tired."
- ☐ D. He said "I am tired"

Question: 115 of 200

QID: 12100

Marks: 1

Choose the correct phrasal verb: "He _____ up smoking last year."

Please mark (✓) for the correct answer.

- ☐ A. Give
- ☐ B. Give in
- ☐ C. Gave up
- ☐ D. Give out

Question: 116 of 200

QID: 12101

Marks: 1

Fill in the blank: "I have been waiting _____ two hours."

Please mark (✓) for the correct answer.

- ☐ A. Since
- ☐ B. At
- ☐ C. For
- ☐ D. From

Question: 117 of 200

QID: 12102

Marks: 1

Choose the correct degree of comparison: "This exam is _____ than the previous one."

Please mark (✓) for the correct answer.

- ☐ A. Difficult
- ☐ B. More difficult
- ☐ C. More difficult
- ☐ D. Most difficult

Question: 118 of 200

QID: 12103

Marks: 1

Select the correct form of the verb: "She _____ finished her homework."

Please mark (✓) for the correct answer.

☐ A. Has☐ B. Have☐ C. Has☐ D. Had**Question: 119 of 200**

QID: 12104

Marks: 1

Identify the correct synonym of "Abundant"

Please mark (✓) for the correct answer.

☐ A. Scarce☐ B. Limited☐ C. Plentiful☐ D. Rare**Question: 120 of 200**

QID: 12105

Marks: 1

Select the correct tense: "By next year, I _____ completed my course."

Please mark (✓) for the correct answer.

☐ A. Will complete☐ B. Will have completed☐ C. Will have completed☐ D. Have completed**Question: 121 of 200**

QID: 12106

Marks: 1

Identify the correct homophone: "The knight rode his horse at night."

Please mark (✓) for the correct answer.

☐ A. Knight – Night☐ B. Knight – Knite☐ C. Knot – Not☐ D. Night – Nite**Question: 122 of 200**

QID: 12107

Marks: 1

Fill in the blank: "She runs faster _____ her sister."

Please mark (✓) for the correct answer.

☐ A. Then☐ B. That☐ C. Than☐ D. As

Question: 123 of 200

QID: 12108

Marks: 1

Choose the correct option: "I will help you if I _____ time."

Please mark (✓) for the correct answer.

- ☐ A. Have ☐ B. Had
- ☐ C. Will ☐ D. Has

Question: 124 of 200

QID: 12109

Marks: 1

Fill in the blank: "Neither of the boys _____ ready."

Please mark (✓) for the correct answer.

- ☐ A. Are ☐ B. Is
- ☐ C. Is ☐ D. Were

Question: 125 of 200

QID: 12110

Marks: 1

Choose the correct pronoun: "This is the boy _____ won the match."

Please mark (✓) for the correct answer.

- ☐ A. Who ☐ B. Whom
- ☐ C. Who ☐ D. Whose

Question: 126 of 200

QID: 12111

Marks: 1

Choose the correct conjunction: "You can come with me _____ stay at home."

Please mark (✓) for the correct answer.

- ☐ A. And ☐ B. But
- ☐ C. Or ☐ D. So

Question: 127 of 200

QID: 12112

Marks: 1

Choose the correct tense: "I _____ him since morning."

Please mark (✓) for the correct answer.

- ☐ A. Have seen ☐ B. Had seen
- ☐ C. Have been seeing ☐ D. See

Question: 128 of 200

QID: 12113

Marks: 1

Choose the correct pronoun: "This is the book _____ I told you about."

Please mark (✓) for the correct answer.

- ☐ A. Which ☐ B. Who
- ☐ C. Why ☐ D. Whom

Question: 129 of 200

QID: 12114

Marks: 1

Choose the correct passive voice: "They are cleaning the room."

Please mark (✓) for the correct answer.

- ☐ A. The room cleaned by them ☐ B. The room is cleaned by them
- ☐ C. The room is being cleaned by them ☐ D. The room has been cleaned by them

Question: 130 of 200

QID: 12115

Marks: 1

Identify the correct antonym of "Scarce"

Please mark (✓) for the correct answer.

- ☐ A. Rare ☐ B. Limited
- ☐ C. Abundant ☐ D. Sparse

Question: 131 of 200

QID: 12116

Marks: 1

Select the correct conjunction: "I was tired, _____ I completed my work."

Please mark (✓) for the correct answer.

- ☐ A. So ☐ B. But
- ☐ C. Yet ☐ D. Or

Question: 132 of 200

QID: 12117

Marks: 1

Choose the correct synonym of "Benevolent"

Please mark (✓) for the correct answer.

- ☐ A. Cruel ☐ B. Selfish
- ☐ C. Kind ☐ D. Harsh

Question: 133 of 200

QID: 12118

Marks: 1

Select the correct preposition: "She is afraid _____ dogs."

Please mark (✓) for the correct answer.

- ☐ A. From ☐ B. Or
- ☐ C. For ☐ D. Of

Question: 134 of 200

QID: 12119

Marks: 1

Identify the correct synonym of "Diligent"

Please mark (✓) for the correct answer.

- ☐ A. Lazy ☐ B. Careless
- ☐ C. Hardworking ☐ D. Negligent

Question: 135 of 200

QID: 12120

Marks: 1

Identify the correct form of verb: "She insisted that he _____ on time."

Please mark (✓) for the correct answer.

- ☐ A. Is ☐ B. Was
- ☐ C. Were ☐ D. Be

Question: 136 of 200

QID: 12121

Marks: 1

Fill in the blank: "I am interested _____ learning French."

Please mark (✓) for the correct answer.

- ☐ A. On ☐ B. In
- ☐ C. By ☐ D. For

Question: 137 of 200

QID: 12122

Marks: 1

Fill in the blank: "I wish I _____ more time to study."

Please mark (✓) for the correct answer.

- ☐ A. Had ☐ B. Have had
- ☐ C. Have ☐ D. Has

Question: 138 of 200

QID: 12123

Marks: 1

Select the correct homophone: "The flower in the garden is beautiful."

Please mark (✓) for the correct answer.

- ☐ A. Flour – Flower
- ☐ B. Flower – Flour
- ☐ C. Flour – Flour
- ☐ D. Flour – Flow

Question: 139 of 200

QID: 12124

Marks: 1

Choose the correct article: "_____ Earth revolves around the Sun."

Please mark (✓) for the correct answer.

- ☐ A. A
- ☐ B. An
- ☐ C. The
- ☐ D. None

Question: 140 of 200

QID: 12125

Marks: 1

Select the correct pronoun: "He is the man _____ helped me."

Please mark (✓) for the correct answer.

- ☐ A. Where
- ☐ B. Whom
- ☐ C. Who
- ☐ D. Whose

Question: 141 of 200

QID: 12126

Marks: 1

Select the correct article: "He wants to become _____ engineer."

Please mark (✓) for the correct answer.

- ☐ A. An
- ☐ B. The
- ☐ C. A
- ☐ D. None of the above

Question: 142 of 200

QID: 12127

Marks: 1

Identify the correct synonym of "Cautious"

Please mark (✓) for the correct answer.

- ☐ A. Careless
- ☐ B. Reckless
- ☐ C. Careful
- ☐ D. Bold

Question: 143 of 200

QID: 12128

Marks: 1

Fill in the blank: "He plays football better _____ anyone else in the team."

Please mark (✓) for the correct answer.

- ☐ A. Then ☐ B. That
- ☐ C. Than ☐ D. As

Question: 144 of 200

QID: 12129

Marks: 1

Choose the correct phrasal verb: "Please _____ the lights when you leave."

Please mark (✓) for the correct answer.

- ☐ A. Turn on ☐ B. Turn up
- ☐ C. Turn off ☐ D. Turn in

Question: 145 of 200

QID: 12130

Marks: 1

Fill in the blank: "He did it _____ his best."

Please mark (✓) for the correct answer.

- ☐ A. On ☐ B. At
- ☐ C. To ☐ D. In

Question: 146 of 200

QID: 12131

Marks: 1

Choose the correct tense: "By the time you arrive, I _____ finished my homework."

Please mark (✓) for the correct answer.

- ☐ A. Have ☐ B. Had
- ☐ C. Will have ☐ D. Am

Question: 147 of 200

QID: 12132

Marks: 1

Fill in the blank: "She is one of the students _____ work hard."

Please mark (✓) for the correct answer.

- ☐ A. Who ☐ B. Whom
- ☐ C. Why ☐ D. Whose

Question: 148 of 200

QID: 12133

Marks: 1

Fill in the blank: "I would rather you _____ here tomorrow."

Please mark (✓) for the correct answer.

- ☐ A. Come ☐ B. Comes
- ☐ C. Coming ☐ D. Came

Question: 149 of 200

QID: 12134

Marks: 1

Select the correct adjective form: "She is _____ than her sister."

Please mark (✓) for the correct answer.

- ☐ A. Beautiful ☐ B. Very beautiful
- ☐ C. More beautiful ☐ D. Most beautiful

Question: 150 of 200

QID: 12135

Marks: 1

Choose the correct form of the verb: "If she _____ earlier, she would have caught the train."

Please mark (✓) for the correct answer.

- ☐ A. Leaves ☐ B. Had left
- ☐ C. Have left ☐ D. Left

Question: 151 of 200

QID: 12136

Marks: 1

Which river is known as the "Sorrow of Bihar"?

Please mark (✓) for the correct answer.

- ☐ A. Ganga ☐ B. Yamuna
- ☐ C. Kosi ☐ D. Godavari

Question: 152 of 200

QID: 12137

Marks: 1

Which state in India has the highest literacy rate?

Please mark (✓) for the correct answer.

- ☐ A. Kerala ☐ B. Tamil Nadu
- ☐ C. Kerala ☐ D. Maharashtra

Question: 153 of 200

QID: 12138

Marks: 1

The President of India is elected for a term of

Please mark (✓) for the correct answer.

- ☐ A. 4 years
- ☐ B. 5 years
- ☐ C. 5 years
- ☐ D. 6 years

Question: 154 of 200

QID: 12139

Marks: 1

The total number of fundamental rights in India is

Please mark (✓) for the correct answer.

- ☐ A. 5
- ☐ B. 6
- ☐ C. 6
- ☐ D. 7

Question: 155 of 200

QID: 12140

Marks: 1

Which article of the Indian Constitution deals with Fundamental Duties?

Please mark (✓) for the correct answer.

- ☐ A. Article 30
- ☐ B. Article 51A
- ☐ C. Article 51A
- ☐ D. Article 21

Question: 156 of 200

QID: 12141

Marks: 1

Which type of soil is suitable for cotton cultivation?

Please mark (✓) for the correct answer.

- ☐ A. Alluvial
- ☐ B. Red
- ☐ C. Black
- ☐ D. Laterite

Question: 157 of 200

QID: 12142

Marks: 1

Which of the following is the largest freshwater lake in India?

Please mark (✓) for the correct answer.

- ☐ A. Sambhar Lake
- ☐ B. Chilika Lake
- ☐ C. Wular Lake
- ☐ D. Dal Lake

Question: 158 of 200

QID: 12143

Marks: 1

The Battle of Plassey was fought in

Please mark (✓) for the correct answer.

☐ A. 1757☐ B. 1757☐ C. 1761☐ D. 1748**Question: 159 of 200**

QID: 12144

Marks: 1

The Tropic of Cancer passes through how many states in India?

Please mark (✓) for the correct answer.

☐ A. 5☐ B. 7☐ C. 8☐ D. 6**Question: 160 of 200**

QID: 12145

Marks: 1

Who was the founder of Maurya Empire?

Please mark (✓) for the correct answer.

☐ A. Ashoka☐ B. Bindusara☐ C. Chandragupta Maurya☐ D. Kautilya**Question: 161 of 200**

QID: 12146

Marks: 1

Who wrote the book 'Discovery of India'?

Please mark (✓) for the correct answer.

☐ A. Rabindranath Tagore☐ B. Mahatma Gandhi☐ C. Jawaharlal Nehru☐ D. Subhas Chandra Bose**Question: 162 of 200**

QID: 12147

Marks: 1

The headquarters of the United Nations is located in

Please mark (✓) for the correct answer.

☐ A. Paris☐ B. Geneva☐ C. New York☐ D. London

Question: 163 of 200

QID: 12148

Marks: 1

Who was the leader of the Salt March in 1930?

Please mark (✓) for the correct answer.

- ☐ A. Sardar Patel
- ☐ B. Subhas Chandra Bose
- ☐ C. Mahatma Gandhi
- ☐ D. Bhagat Singh

Question: 164 of 200

QID: 12149

Marks: 1

The main purpose of the Green Revolution in India was

Please mark (✓) for the correct answer.

- ☐ A. Industrial development
- ☐ B. Urbanization
- ☐ C. Agricultural productivity
- ☐ D. Educational reforms

Question: 165 of 200

QID: 12150

Marks: 1

Who was the first Governor-General of independent India?

Please mark (✓) for the correct answer.

- ☐ A. Jawaharlal Nehru
- ☐ B. Sardar Patel
- ☐ C. Lord Mountbatten
- ☐ D. Rajendra Prasad

Question: 166 of 200

QID: 12151

Marks: 1

The Indian National Congress was founded in

Please mark (✓) for the correct answer.

- ☐ A. 1885
- ☐ B. 1885
- ☐ C. 1905
- ☐ D. 1919

Question: 167 of 200

QID: 12152

Marks: 1

Which state is the largest producer of tea in India?

Please mark (✓) for the correct answer.

- ☐ A. Tamil Nadu
- ☐ B. Kerala
- ☐ C. Assam
- ☐ D. West Bengal

Question: 168 of 200

QID: 12153

Marks: 1

Which Indian state is known as the “Land of Five Rivers”?

Please mark (✓) for the correct answer.

- ☐ A. Haryana ☐ B. Punjab
- ☐ C. Punjab ☐ D. Rajasthan

Question: 169 of 200

QID: 12154

Marks: 1

Which is the largest desert in India?

Please mark (✓) for the correct answer.

- ☐ A. Thar Desert ☐ B. Rann of Kutch
- ☐ C. Thar Desert ☐ D. Sambhar

Question: 170 of 200

QID: 12155

Marks: 1

Which river is called the “Dakshin Ganga”?

Please mark (✓) for the correct answer.

- ☐ A. Godavari ☐ B. Krishna
- ☐ C. Godavari ☐ D. Kaveri

Question: 171 of 200

QID: 12156

Marks: 1

Which is the longest river in India?

Please mark (✓) for the correct answer.

- ☐ A. Yamuna ☐ B. Godavari
- ☐ C. Ganga ☐ D. Krishna

Question: 172 of 200

QID: 12157

Marks: 1

Which Indian state is known as the “Spice Garden of India”?

Please mark (✓) for the correct answer.

- ☐ A. Kerala ☐ B. Karnataka
- ☐ C. Kerala ☐ D. Tamil Nadu

Question: 173 of 200

QID: 12158

Marks: 1

Who among the following was the first Prime Minister of India?

Please mark (✓) for the correct answer.

- ☐ A. Rajendra Prasad
- ☐ B. Maulana Azad
- ☐ C. Jawaharlal Nehru
- ☐ D. Sardar Patel

Question: 174 of 200

QID: 12159

Marks: 1

The main occupation of people living in the Himalayas is

Please mark (✓) for the correct answer.

- ☐ A. Fishing
- ☐ B. Mining
- ☐ C. Agriculture
- ☐ D. Trade

Question: 175 of 200

QID: 12160

Marks: 1

Who was the Viceroy of India during the Jallianwala Bagh massacre?

Please mark (✓) for the correct answer.

- ☐ A. Lord Curzon
- ☐ B. Lord Ripon
- ☐ C. Lord Chelmsford
- ☐ D. Lord Mountbatten

Question: 176 of 200

QID: 12161

Marks: 1

Which Indian state has the largest area?

Please mark (✓) for the correct answer.

- ☐ A. Madhya Pradesh
- ☐ B. Tamil Nadu
- ☐ C. Rajasthan
- ☐ D. Maharashtra

Question: 177 of 200

QID: 12162

Marks: 1

Which movement was launched by Gandhi in 1920?

Please mark (✓) for the correct answer.

- ☐ A. Quit India Movement
- ☐ B. Salt Satyagraha
- ☐ C. Non-Cooperation Movement
- ☐ D. Civil Disobedience Movement

Question: 178 of 200

QID: 12163

Marks: 1

Who was the first woman Governor of an Indian state?

Please mark (✓) for the correct answer.

- ☐ A. Sarojini Naidu ☐ B. Indira Gandhi
☐ C. Sarojini Naidu ☐ D. Vijaya Lakshmi Pandit

Question: 179 of 200

QID: 12164

Marks: 1

The Rowlatt Act was passed in which year?

Please mark (✓) for the correct answer.

- ☐ A. 1915 ☐ B. 1918
☐ C. 1919 ☐ D. 1920

Question: 180 of 200

QID: 12165

Marks: 1

The Indian Constitution came into effect on

Please mark (✓) for the correct answer.

- ☐ A. January 25, 1950 ☐ B. February 26, 1950
☐ C. January 26, 1950 ☐ D. August 15, 1947

Question: 181 of 200

QID: 12166

Marks: 1

“दुःख” का संधि विच्छेद है –

Please mark (✓) for the correct answer.

- ☐ A. दु + ख ☐ B. दुः + ख
☐ C. दुःख + अ ☐ D. दु + अ + ख

Question: 182 of 200

QID: 12167

Marks: 1

“राम ने राधा को फूल दिया।” में कर्ता कौन है?

Please mark (✓) for the correct answer.

- ☐ A. राधा ☐ B. फूल
☐ C. राम ☐ D. ने

“नदी का पानी साफ है।” में विशेषण कौन है?

Please mark (✓) for the correct answer.

- ☐ A. नदी ☐ B. पानी
- ☐ C. साफ ☐ D. है

“मेरे दोस्त ने मुझे बुलाया।” में कर्म कौन है?

Please mark (✓) for the correct answer.

- ☐ A. मेरे दोस्त ☐ B. ने
- ☐ C. मुझे ☐ D. बुलाया

“सर्वनाम” का सही उदाहरण चुनिए –

Please mark (✓) for the correct answer.

- ☐ A. लाल ☐ B. वहीं
- ☐ C. वह ☐ D. खेल

“जल” का पर्यायवाची शब्द क्या है?

Please mark (✓) for the correct answer.

- ☐ A. अग्नि ☐ B. नदी
- ☐ C. पानी ☐ D. सागर

“सत्य” का विलोम शब्द क्या है?

Please mark (✓) for the correct answer.

- ☐ A. सत्य ☐ B. सत्यनिष्ठ
- ☐ C. असत्य ☐ D. धोखा

निम्नलिखित में से क्रिया चुनिए –

Please mark (✓) for the correct answer.

- ☐ A. खेल ☐ B. सुंदर
☐ C. खेलना ☐ D. विकास

निम्नलिखित में से विशेषण चुनिए –

Please mark (✓) for the correct answer.

- ☐ A. दौड़ना ☐ B. पढ़ना
☐ C. सुंदर ☐ D. खेल

“वह बहुत अच्छा है।” में “बहुत” क्या है?

Please mark (✓) for the correct answer.

- ☐ A. संज्ञा ☐ B. विशेषण
☐ C. क्रिया विशेषण ☐ D. सर्वनाम

निम्नलिखित में से क्रिया विशेषण (Adverb) चुनिए –

Please mark (✓) for the correct answer.

- ☐ A. तेज़ ☐ B. बड़ा
☐ C. तेज़ी से ☐ D. खेल

“विद्यालय” किस संधि से बना है?

Please mark (✓) for the correct answer.

- ☐ A. गुण संधि ☐ B. दीर्घ संधि
☐ C. योग संधि ☐ D. विसर्ग संधि

“सूर्य” का वचन क्या है?

Please mark (✓) for the correct answer.

- ☐ A. सूर्ये ☐ B. सूर्यास्त
☐ C. सूर्य ☐ D. सूर्या

Question: 194 of 200

QID: 12179

Marks: 1

“कुत्ता तेज दौड़ता है।” में कर्ता कौन है?

Please mark (✓) for the correct answer.

- ☐ A. है ☐ B. तेज
☐ C. कुत्ता ☐ D. दौड़ता

Question: 195 of 200

QID: 12180

Marks: 1

“सूर्य पश्चिम में अस्त होता है।” में क्रिया कौन है?

Please mark (✓) for the correct answer.

- ☐ A. सूर्य ☐ B. पश्चिम
☐ C. अस्त होता है ☐ D. होता

Question: 196 of 200

QID: 12181

Marks: 1

“मेरे पिता” में ‘मेरे’ क्या है?

Please mark (✓) for the correct answer.

- ☐ A. संज्ञा ☐ B. सर्वनाम
☐ C. विशेषण ☐ D. क्रिया

Question: 197 of 200

QID: 12182

Marks: 1

“राम और श्याम बाजार गए।” में संयोजक (Conjunction) कौन है?

Please mark (✓) for the correct answer.

- ☐ A. राम ☐ B. गए
☐ C. और ☐ D. बाजार

"सिंहासन" का शुद्ध रूप क्या है?

Please mark (✓) for the correct answer.

- ☐ A. सिंहसन ☐ B. सिंहासनों
- ☐ C. सिंहासन ☐ D. सिंहासान

सूर्य का पर्यायवाची शब्द चुनिए –

Please mark (✓) for the correct answer.

- ☐ A. चन्द्रमा ☐ B. तारा
- ☐ C. रवि ☐ D. ग्रह

निम्नलिखित में से क्रिया का भूतकाल चुनिए –

Please mark (✓) for the correct answer.

- ☐ A. खेलना ☐ B. खेलता
- ☐ C. खेला ☐ D. खेल

--- END OF QUESTION PAPER ---

Answer Key

No	Question Type	QID	Correct Answer
Question - 1	Multiple Choice (Radiobutton)	11986	A
Question - 2	Multiple Choice (Radiobutton)	11987	D
Question - 3	Multiple Choice (Radiobutton)	11988	D
Question - 4	Multiple Choice (Radiobutton)	11989	C
Question - 5	Multiple Choice (Radiobutton)	11990	B
Question - 6	Multiple Choice (Radiobutton)	11991	C
Question - 7	Multiple Choice (Radiobutton)	11992	C
Question - 8	Multiple Choice (Radiobutton)	11993	D
Question - 9	Multiple Choice (Radiobutton)	11994	C
Question - 10	Multiple Choice (Radiobutton)	11995	B
Question - 11	Multiple Choice (Radiobutton)	11996	A
Question - 12	Multiple Choice (Radiobutton)	11997	C
Question - 13	Multiple Choice (Radiobutton)	11998	C
Question - 14	Multiple Choice (Radiobutton)	11999	C
Question - 15	Multiple Choice (Radiobutton)	12000	A
Question - 16	Multiple Choice (Radiobutton)	12001	B
Question - 17	Multiple Choice (Radiobutton)	12002	C
Question - 18	Multiple Choice (Radiobutton)	12003	C
Question - 19	Multiple Choice (Radiobutton)	12004	D
Question - 20	Multiple Choice (Radiobutton)	12005	C
Question - 21	Multiple Choice (Radiobutton)	12020	D
Question - 22	Multiple Choice (Radiobutton)	12021	C
Question - 23	Multiple Choice (Radiobutton)	12006	A
Question - 24	Multiple Choice (Radiobutton)	12007	C
Question - 25	Multiple Choice (Radiobutton)	12008	D
Question - 26	Multiple Choice (Radiobutton)	12009	B
Question - 27	Multiple Choice (Radiobutton)	12010	D
Question - 28	Multiple Choice (Radiobutton)	12011	B
Question - 29	Multiple Choice (Radiobutton)	12012	C
Question - 30	Multiple Choice (Radiobutton)	12013	C
Question - 31	Multiple Choice (Radiobutton)	12014	C
Question - 32	Multiple Choice (Radiobutton)	12015	A
Question - 33	Multiple Choice (Radiobutton)	12016	D
Question - 34	Multiple Choice (Radiobutton)	12017	C
Question - 35	Multiple Choice (Radiobutton)	12018	C
Question - 36	Multiple Choice (Radiobutton)	12019	A
Question - 37	Multiple Choice (Radiobutton)	12022	B
Question - 38	Multiple Choice (Radiobutton)	12023	B
Question - 39	Multiple Choice (Radiobutton)	12024	B
Question - 40	Multiple Choice (Radiobutton)	12025	C
Question - 41	Multiple Choice (Radiobutton)	12026	B
Question - 42	Multiple Choice (Radiobutton)	12027	A

No	Question Type	QID	Correct Answer
Question - 43	Multiple Choice (Radiobutton)	12028	C
Question - 44	Multiple Choice (Radiobutton)	12029	D
Question - 45	Multiple Choice (Radiobutton)	12030	C
Question - 46	Multiple Choice (Radiobutton)	12031	B
Question - 47	Multiple Choice (Radiobutton)	12032	A
Question - 48	Multiple Choice (Radiobutton)	12033	B
Question - 49	Multiple Choice (Radiobutton)	12034	C
Question - 50	Multiple Choice (Radiobutton)	12035	A
Question - 51	Multiple Choice (Radiobutton)	12036	B
Question - 52	Multiple Choice (Radiobutton)	12037	C
Question - 53	Multiple Choice (Radiobutton)	12038	C
Question - 54	Multiple Choice (Radiobutton)	12039	C
Question - 55	Multiple Choice (Radiobutton)	12040	C
Question - 56	Multiple Choice (Radiobutton)	12041	C
Question - 57	Multiple Choice (Radiobutton)	12042	C
Question - 58	Multiple Choice (Radiobutton)	12043	C
Question - 59	Multiple Choice (Radiobutton)	12044	C
Question - 60	Multiple Choice (Radiobutton)	12045	C
Question - 61	Multiple Choice (Radiobutton)	12046	C
Question - 62	Multiple Choice (Radiobutton)	12047	C
Question - 63	Multiple Choice (Radiobutton)	12048	C
Question - 64	Multiple Choice (Radiobutton)	12049	C
Question - 65	Multiple Choice (Radiobutton)	12050	C
Question - 66	Multiple Choice (Radiobutton)	12051	C
Question - 67	Multiple Choice (Radiobutton)	12052	C
Question - 68	Multiple Choice (Radiobutton)	12053	C
Question - 69	Multiple Choice (Radiobutton)	12054	C
Question - 70	Multiple Choice (Radiobutton)	12055	C
Question - 71	Multiple Choice (Radiobutton)	12056	C
Question - 72	Multiple Choice (Radiobutton)	12057	C
Question - 73	Multiple Choice (Radiobutton)	12058	C
Question - 74	Multiple Choice (Radiobutton)	12059	C
Question - 75	Multiple Choice (Radiobutton)	12060	C
Question - 76	Multiple Choice (Radiobutton)	12061	C
Question - 77	Multiple Choice (Radiobutton)	12062	C
Question - 78	Multiple Choice (Radiobutton)	12063	C
Question - 79	Multiple Choice (Radiobutton)	12064	C
Question - 80	Multiple Choice (Radiobutton)	12065	C
Question - 81	Multiple Choice (Radiobutton)	12066	A
Question - 82	Multiple Choice (Radiobutton)	12067	C
Question - 83	Multiple Choice (Radiobutton)	12068	B
Question - 84	Multiple Choice (Radiobutton)	12069	A
Question - 85	Multiple Choice (Radiobutton)	12070	A
Question - 86	Multiple Choice (Radiobutton)	12071	A
Question - 87	Multiple Choice (Radiobutton)	12072	C
Question - 88	Multiple Choice (Radiobutton)	12073	C

No	Question Type	QID	Correct Answer	
Question - 89	Multiple Choice (Radiobutton)	12074	A	
Question - 90	Multiple Choice (Radiobutton)	12075	B	
Question - 91	Multiple Choice (Radiobutton)	12076	C	
Question - 92	Multiple Choice (Radiobutton)	12077	B	
Question - 93	Multiple Choice (Radiobutton)	12078	C	
Question - 94	Multiple Choice (Radiobutton)	12079	C	
Question - 95	Multiple Choice (Radiobutton)	12080	C	
Question - 96	Multiple Choice (Radiobutton)	12081	C	
Question - 97	Multiple Choice (Radiobutton)	12082	C	
Question - 98	Multiple Choice (Radiobutton)	12083	C	
Question - 99	Multiple Choice (Radiobutton)	12084	C	
Question - 100	Multiple Choice (Radiobutton)	12085	C	
Question - 101	Multiple Choice (Radiobutton)	12086	C	
Question - 102	Multiple Choice (Radiobutton)	12087	C	
Question - 103	Multiple Choice (Radiobutton)	12088	C	
Question - 104	Multiple Choice (Radiobutton)	12089	C	
Question - 105	Multiple Choice (Radiobutton)	12090	C	
Question - 106	Multiple Choice (Radiobutton)	12091	C	
Question - 107	Multiple Choice (Radiobutton)	12092	C	
Question - 108	Multiple Choice (Radiobutton)	12093	C	
Question - 109	Multiple Choice (Radiobutton)	12094	C	
Question - 110	Multiple Choice (Radiobutton)	12095	C	
Question - 111	Multiple Choice (Radiobutton)	12096	C	
Question - 112	Multiple Choice (Radiobutton)	12097	C	
Question - 113	Multiple Choice (Radiobutton)	12098	C	
Question - 114	Multiple Choice (Radiobutton)	12099	C	
Question - 115	Multiple Choice (Radiobutton)	12100	C	
Question - 116	Multiple Choice (Radiobutton)	12101	C	
Question - 117	Multiple Choice (Radiobutton)	12102	C	
Question - 118	Multiple Choice (Radiobutton)	12103	C	
Question - 119	Multiple Choice (Radiobutton)	12104	C	
Question - 120	Multiple Choice (Radiobutton)	12105	C	
Question - 121	Multiple Choice (Radiobutton)	12106	A	
Question - 122	Multiple Choice (Radiobutton)	12107	C	
Question - 123	Multiple Choice (Radiobutton)	12108	A	
Question - 124	Multiple Choice (Radiobutton)	12109	C	
Question - 125	Multiple Choice (Radiobutton)	12110	C	
Question - 126	Multiple Choice (Radiobutton)	12111	C	
Question - 127	Multiple Choice (Radiobutton)	12112	C	
Question - 128	Multiple Choice (Radiobutton)	12113	A	
Question - 129	Multiple Choice (Radiobutton)	12114	C	
Question - 130	Multiple Choice (Radiobutton)	12115	C	
Question - 131	Multiple Choice (Radiobutton)	12116	C	
Question - 132	Multiple Choice (Radiobutton)	12117	C	
Question - 133	Multiple Choice (Radiobutton)	12118	D	
Question - 134	Multiple Choice (Radiobutton)	12119	C	
Question - 135	Multiple Choice (Radiobutton)	12120	D	

No	Question Type	QID	Correct Answer
Question - 136	Multiple Choice (Radiobutton)	12121	B
Question - 137	Multiple Choice (Radiobutton)	12122	A
Question - 138	Multiple Choice (Radiobutton)	12123	B
Question - 139	Multiple Choice (Radiobutton)	12124	C
Question - 140	Multiple Choice (Radiobutton)	12125	C
Question - 141	Multiple Choice (Radiobutton)	12126	A
Question - 142	Multiple Choice (Radiobutton)	12127	C
Question - 143	Multiple Choice (Radiobutton)	12128	C
Question - 144	Multiple Choice (Radiobutton)	12129	C
Question - 145	Multiple Choice (Radiobutton)	12130	C
Question - 146	Multiple Choice (Radiobutton)	12131	C
Question - 147	Multiple Choice (Radiobutton)	12132	A
Question - 148	Multiple Choice (Radiobutton)	12133	D
Question - 149	Multiple Choice (Radiobutton)	12134	C
Question - 150	Multiple Choice (Radiobutton)	12135	B
Question - 151	Multiple Choice (Radiobutton)	12136	C
Question - 152	Multiple Choice (Radiobutton)	12137	C
Question - 153	Multiple Choice (Radiobutton)	12138	C
Question - 154	Multiple Choice (Radiobutton)	12139	C
Question - 155	Multiple Choice (Radiobutton)	12140	C
Question - 156	Multiple Choice (Radiobutton)	12141	C
Question - 157	Multiple Choice (Radiobutton)	12142	C
Question - 158	Multiple Choice (Radiobutton)	12143	B
Question - 159	Multiple Choice (Radiobutton)	12144	C
Question - 160	Multiple Choice (Radiobutton)	12145	C
Question - 161	Multiple Choice (Radiobutton)	12146	C
Question - 162	Multiple Choice (Radiobutton)	12147	C
Question - 163	Multiple Choice (Radiobutton)	12148	C
Question - 164	Multiple Choice (Radiobutton)	12149	C
Question - 165	Multiple Choice (Radiobutton)	12150	C
Question - 166	Multiple Choice (Radiobutton)	12151	B
Question - 167	Multiple Choice (Radiobutton)	12152	C
Question - 168	Multiple Choice (Radiobutton)	12153	C
Question - 169	Multiple Choice (Radiobutton)	12154	C
Question - 170	Multiple Choice (Radiobutton)	12155	C
Question - 171	Multiple Choice (Radiobutton)	12156	C
Question - 172	Multiple Choice (Radiobutton)	12157	C
Question - 173	Multiple Choice (Radiobutton)	12158	C
Question - 174	Multiple Choice (Radiobutton)	12159	C
Question - 175	Multiple Choice (Radiobutton)	12160	C
Question - 176	Multiple Choice (Radiobutton)	12161	C
Question - 177	Multiple Choice (Radiobutton)	12162	C
Question - 178	Multiple Choice (Radiobutton)	12163	C
Question - 179	Multiple Choice (Radiobutton)	12164	C
Question - 180	Multiple Choice (Radiobutton)	12165	C
Question - 181	Multiple Choice (Radiobutton)	12166	B

No	Question Type	QID	Correct Answer
Question - 182	Multiple Choice (Radiobutton)	12167	C
Question - 183	Multiple Choice (Radiobutton)	12168	C
Question - 184	Multiple Choice (Radiobutton)	12169	C
Question - 185	Multiple Choice (Radiobutton)	12170	C
Question - 186	Multiple Choice (Radiobutton)	12171	C
Question - 187	Multiple Choice (Radiobutton)	12172	C
Question - 188	Multiple Choice (Radiobutton)	12173	C
Question - 189	Multiple Choice (Radiobutton)	12174	C
Question - 190	Multiple Choice (Radiobutton)	12175	C
Question - 191	Multiple Choice (Radiobutton)	12176	C
Question - 192	Multiple Choice (Radiobutton)	12177	C
Question - 193	Multiple Choice (Radiobutton)	12178	C
Question - 194	Multiple Choice (Radiobutton)	12179	C
Question - 195	Multiple Choice (Radiobutton)	12180	C
Question - 196	Multiple Choice (Radiobutton)	12181	C
Question - 197	Multiple Choice (Radiobutton)	12182	C
Question - 198	Multiple Choice (Radiobutton)	12183	C
Question - 199	Multiple Choice (Radiobutton)	12184	C
Question - 200	Multiple Choice (Radiobutton)	12185	C

--- END OF ANSWER KEY ---