

Studybox Doon

RMS Mock Test 2 (9th)

Exam ID: 214

Name: _____

Date: _____

Exam Instructions

1. The timer has been set for the exam, and a countdown will display the remaining time. When the timer runs out, the exam will end automatically. No further action will be required after that.
2. You can flag any question that you want.
3. If you don't want to submit any of your provided answers, you can clear them.
4. If you choose to drop this exam, it will not be submitted, and no result will be generated.
5. Once you finish the exam, you cannot resume it.

Question: 1 of 200

QID: 11412

Marks: 1

A pair of integers whose product is -36 and whose difference is 15, is

Please mark (✓) for the correct answer.

- ☐ A. -3,12 ☐ B. -12,3
☐ C. 9,-4 ☐ D. a and b both

Question: 2 of 200

QID: 11413

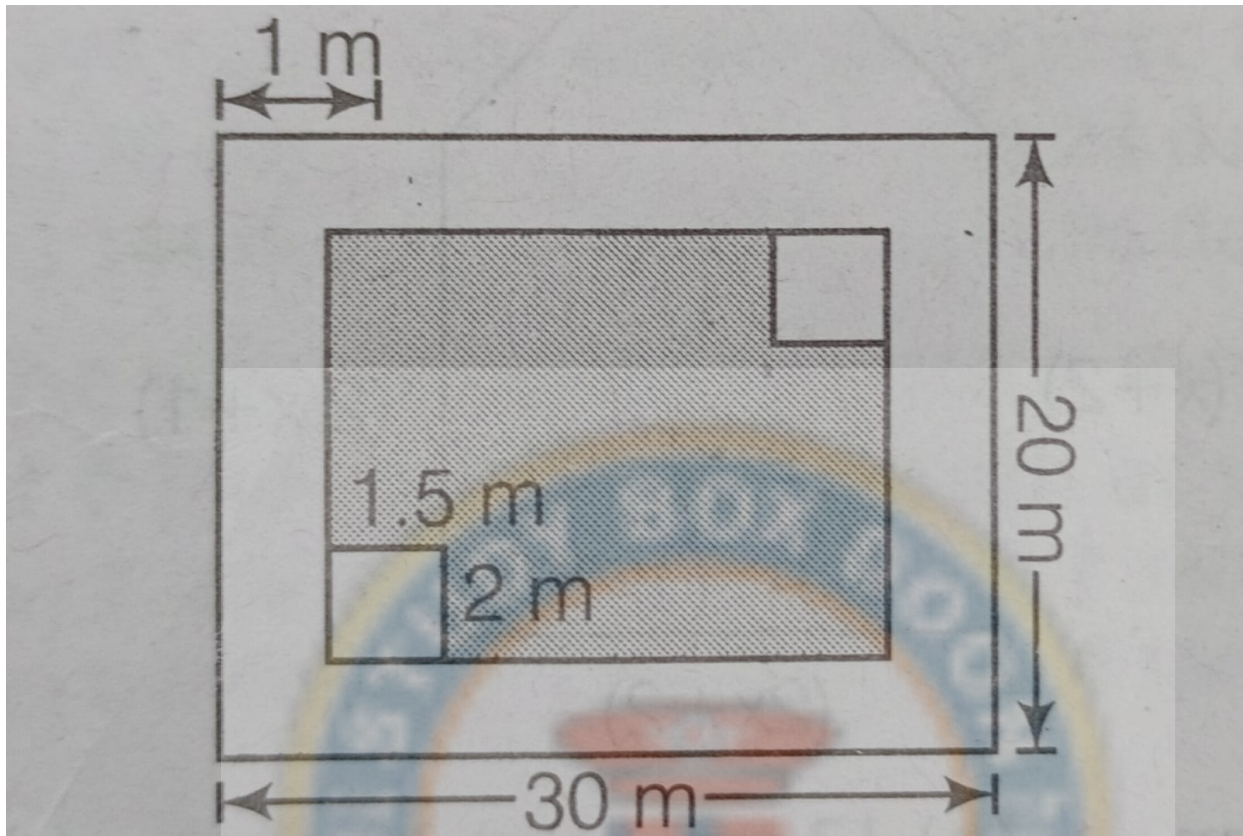
Marks: 1

The HCF of $12/7$, $18/7$, $24/7$, is

Please mark (✓) for the correct answer.

- ☐ A. $12/7$ ☐ B. $6/7$
☐ C. $4/7$ ☐ D. $3/7$

There are two rectangular flower beds of size $1.5\text{ m} \times 2\text{ m}$ each in the park as shown in the given figure and the rest has grass on it, then the area covered by grass, is



Please mark (✓) for the correct answer.

- ☐ A. 498 m^2
☐ B. 948 m^2
☐ C. 894 m^2
☐ D. 849 m^2

Question: 4 of 200

QID: 11409

Marks: 1

If $5^{(3x-1)} \times 25 = 125$, then the value of x , is

Please mark (✓) for the correct answer.

- ☐ A. 4
 ☐ B. 3
 ☐ C. $\frac{2}{3}$
☐ D. $\frac{1}{3}$

Question: 5 of 200

QID: 11410

Marks: 1

A car is travelling 60 km in 2 h , then the distance travelled by the car in 6 h , if the speed remains constant, is

Please mark (✓) for the correct answer.

- ☐ A. 60 km
☐ B. 120 km
☐ C. 180 km
☐ D. 240 km

Question: 6 of 200

QID: 11411

Marks: 1

If $x - 1/x = 7$, then the value of $x^2 + 1/x^2$, is

Please mark (✓) for the correct answer.

- ☐ A. 49 ☐ B. 50
- ☐ C. 51 ☐ D. 52

Question: 7 of 200

QID: 11414

Marks: 1

By prime factorisation, the value of the cube root of 5832, is

Please mark (✓) for the correct answer.

- ☐ A. 16 ☐ B. 17
- ☐ C. 18 ☐ D. 19

Question: 8 of 200

QID: 11415

Marks: 1

If two interior angles on the same side of a transversal intersecting two parallel lines are in the ratio 3:2, then the greater of the two angles, is

Please mark (✓) for the correct answer.

- ☐ A. 72° ☐ B. 36°
- ☐ C. 108° ☐ D. 44°

Question: 9 of 200

QID: 11416

Marks: 1

The nature of $(-5 + 2\sqrt{5} - \sqrt{5})$ is

Please mark (✓) for the correct answer.

- ☐ A. natural ☐ B. integer
- ☐ C. rational ☐ D. irrational

Question: 10 of 200

QID: 11417

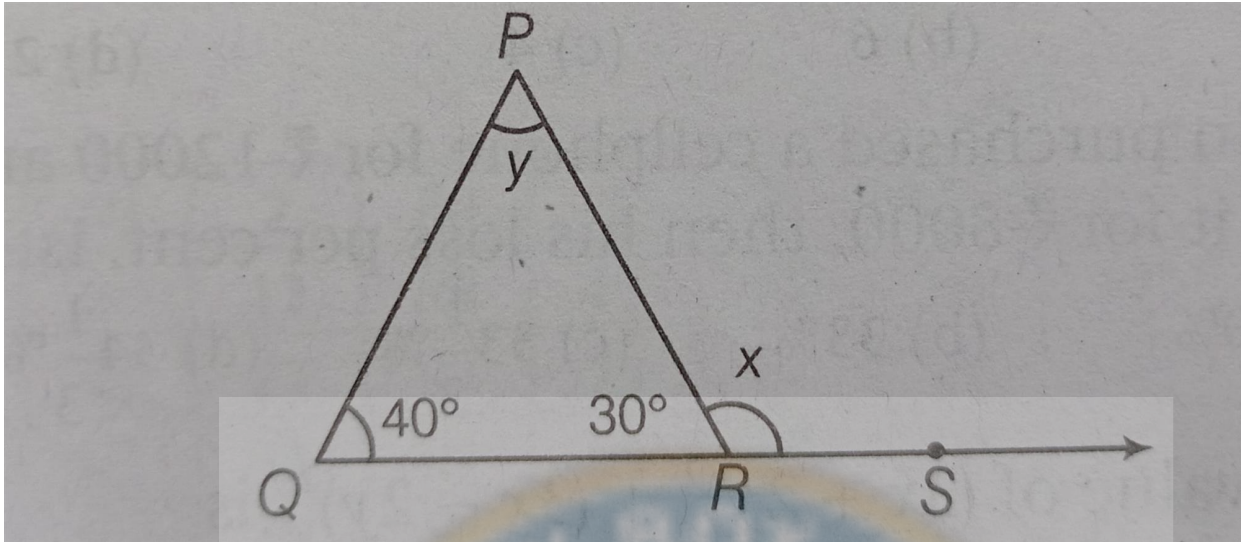
Marks: 1

If the total surface area of a cube is 486 cm^2 , then its lateral surface area.

Please mark (✓) for the correct answer.

- ☐ A. 243 cm^2 ☐ B. 342 cm^2
- ☐ C. 324 cm^2 ☐ D. 432 cm^2

In the following figure, then the value of $2x$, is



Please mark (✓) for the correct answer.

☐ A. 300°

☐ B. 200°

☐ C. 100°

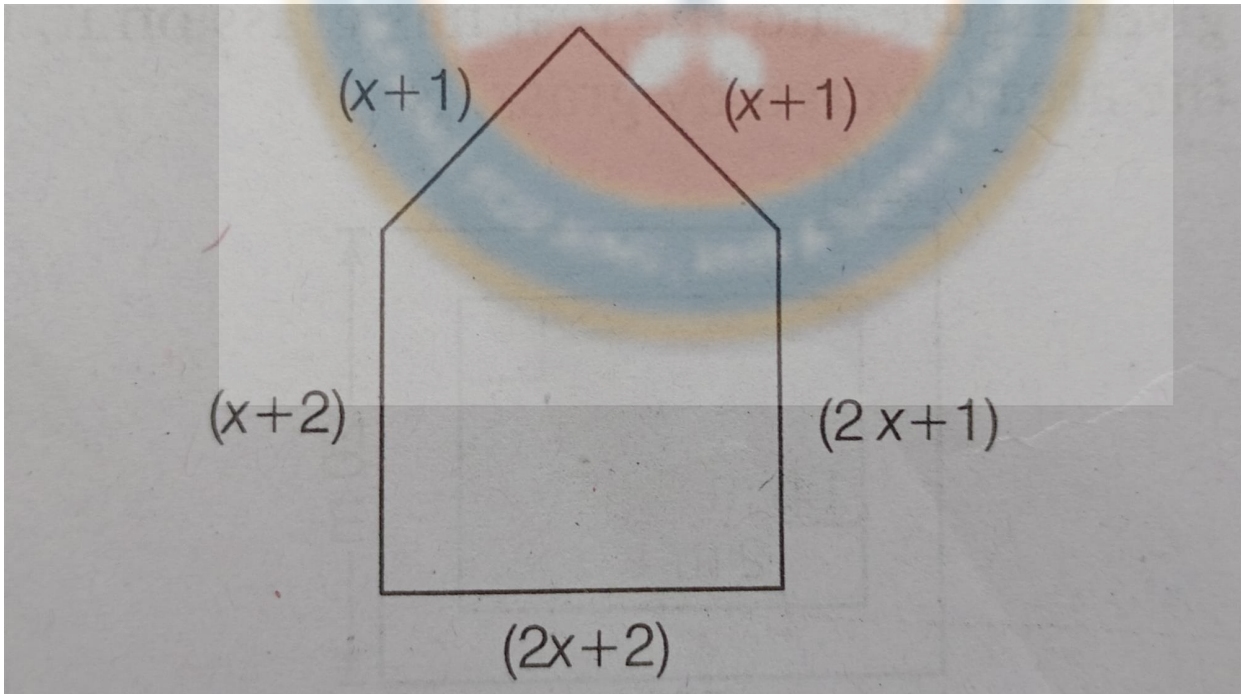
☐ D. 50°

Question: 12 of 200

QID: 11419

Marks: 1

For what value of x , the perimeter of shape is 77 cm?



Please mark (✓) for the correct answer.

☐ A. 14 cm

☐ B. 12 cm

☐ C. 10 cm

☐ D. 8 cm

Question: 13 of 200

QID: 11420

Marks: 1

If $p(x) = x^3 - 4x^2 + x + 6$, then the value of $p(3)$ is

Please mark (✓) for the correct answer.

- ☐ A. 27 ☐ B. 10
☐ C. 4 ☐ D. 0

Question: 14 of 200

QID: 11421

Marks: 1

If $a:b = 5:3$, then the value of $(5a+8b) : (6a-7b)$, is

Please mark (✓) for the correct answer.

- ☐ A. 9:49 ☐ B. 49:9
☐ C. 11:50 ☐ D. 50:11

Question: 15 of 200

QID: 11422

Marks: 1

If you have a spinning wheel with 3 green sectors, 5 black sectors and 10 red sectors, then the probability of getting a non-black sector, is

Please mark (✓) for the correct answer.

- ☐ A. $\frac{1}{9}$ ☐ B. $\frac{1}{6}$
☐ C. $\frac{5}{9}$ ☐ D. $\frac{13}{18}$

Question: 16 of 200

QID: 11423

Marks: 1

The value of $\sqrt{248} + \sqrt{52} + \sqrt{144}$, is

Please mark (✓) for the correct answer.

- ☐ A. 17 ☐ B. 16
☐ C. 15 ☐ D. none

Question: 17 of 200

QID: 11424

Marks: 1

Find the compound interest on ₹48000 for one year at 8% per annum, when compounded half-yearly.

Please mark (✓) for the correct answer.

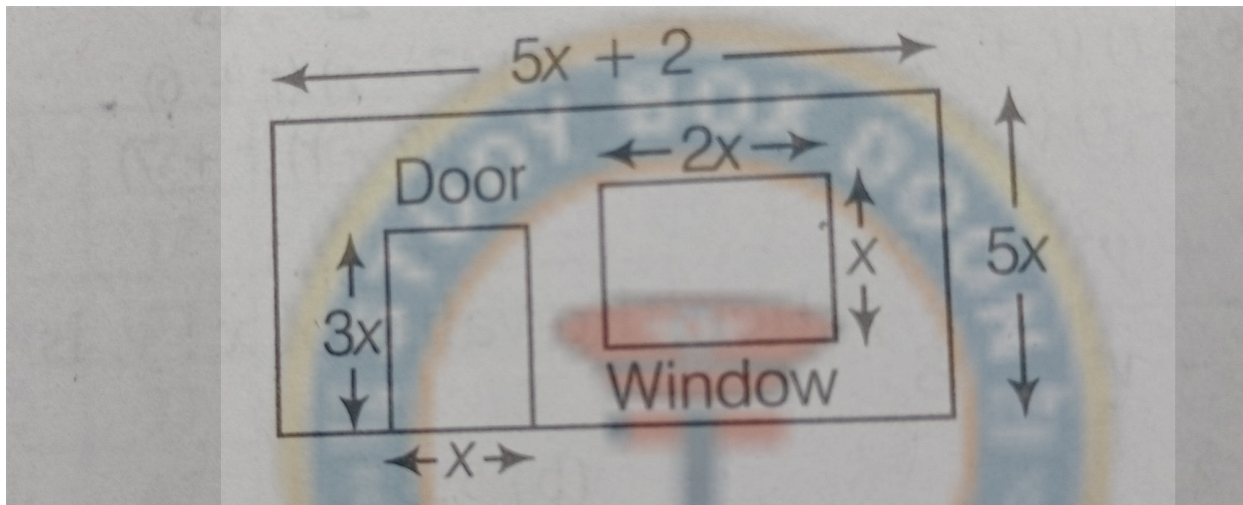
- ☐ A. ₹51916 ☐ B. ₹51916.80
☐ C. ₹3916.80 ☐ D. ₹3910.80

If lemons were bought at ₹48 per dozen and sold at the rate of ₹48 per 10, then the gain or loss per cent, is

Please mark (✓) for the correct answer.

- ☐ A. 40% profit
 ☐ B. 40% loss
 ☐ C. 20% profit
 ☐ D. 20% loss

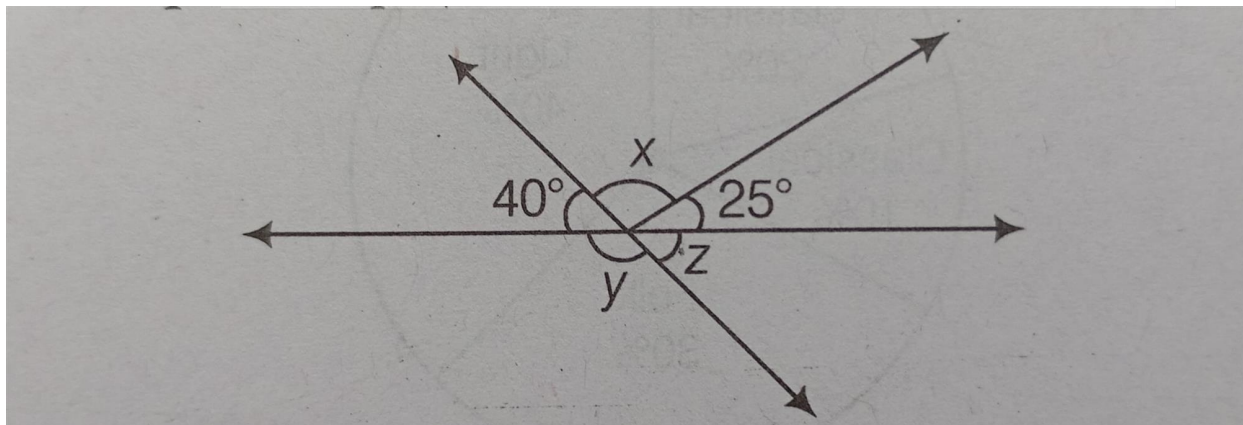
The alongside figure shows the dimensions of a wall having a window and a door of a room. Then, the algebraic expression for the area of the wall to be painted, is



Please mark (✓) for the correct answer.

- ☐ A. $x(2x+1)$ sq unit
 ☐ B. $2x(x+1)$ sq unit
 ☐ C. $10x(2x+1)$ sq unit
 ☐ D. $(x+1)$ sq unit

The values of the angles x , y and z are respectively,



Please mark (✓) for the correct answer.

- ☐ A. $115^\circ, 140^\circ, 40^\circ$
☐ B. $40^\circ, 140^\circ, 115^\circ$
☐ C. $140^\circ, 40^\circ, 115^\circ$
☐ D. $115^\circ, 40^\circ, 140^\circ$

Question: 21 of 200

QID: 11428

Marks: 1

If some migratory birds travel as much as 15000 km to escape the extreme climatic conditions at home, then the distance in meters using scientific notation, is

Please mark (✓) for the correct answer.

- ☐ A. 1.5×10^{17} m
- ☐ B. 1.5×10^5 m
- ☐ C. 1.5×10^6 m
- ☐ D. 1.5×10^7 m

Question: 22 of 200

QID: 11429

Marks: 1

30 persons can reap a field in 17 days. How many more persons should be engaged to reap the same field in 10 days?

Please mark (✓) for the correct answer.

- ☐ A. 17
- ☐ B. 30
- ☐ C. 51
- ☐ D. 21

Question: 23 of 200

QID: 11430

Marks: 1

A negative integer and a positive integer whose difference is +2, are

Please mark (✓) for the correct answer.

- ☐ A. -1, 3
- ☐ B. -2, 4
- ☐ C. -1, 1
- ☐ D. -4, 6

Question: 24 of 200

QID: 11431

Marks: 1

Six bells begin to toll together at the interval of 10 s, 15sec, 20sec, 25sec, 30sec, 35sec respectively, then how many times will they toll together in the span of 7 h?

Please mark (✓) for the correct answer.

- ☐ A. 12
- ☐ B. 10
- ☐ C. 8
- ☐ D. 6

Question: 25 of 200

QID: 11432

Marks: 1

Difference of two perfect cubes is 189. If the cube root of the smaller of the two numbers is 3, the cube root of the larger number, is

Please mark (✓) for the correct answer.

- ☐ A. 27
- ☐ B. 36
- ☐ C. 9
- ☐ D. 6

Question: 26 of 200

QID: 11433

Marks: 1

If the speed of a boat in still water is 15 km/h. It can go 30 km upstream and 45 km downstream in the same time, then the speed of stream.

Please mark (✓) for the correct answer.

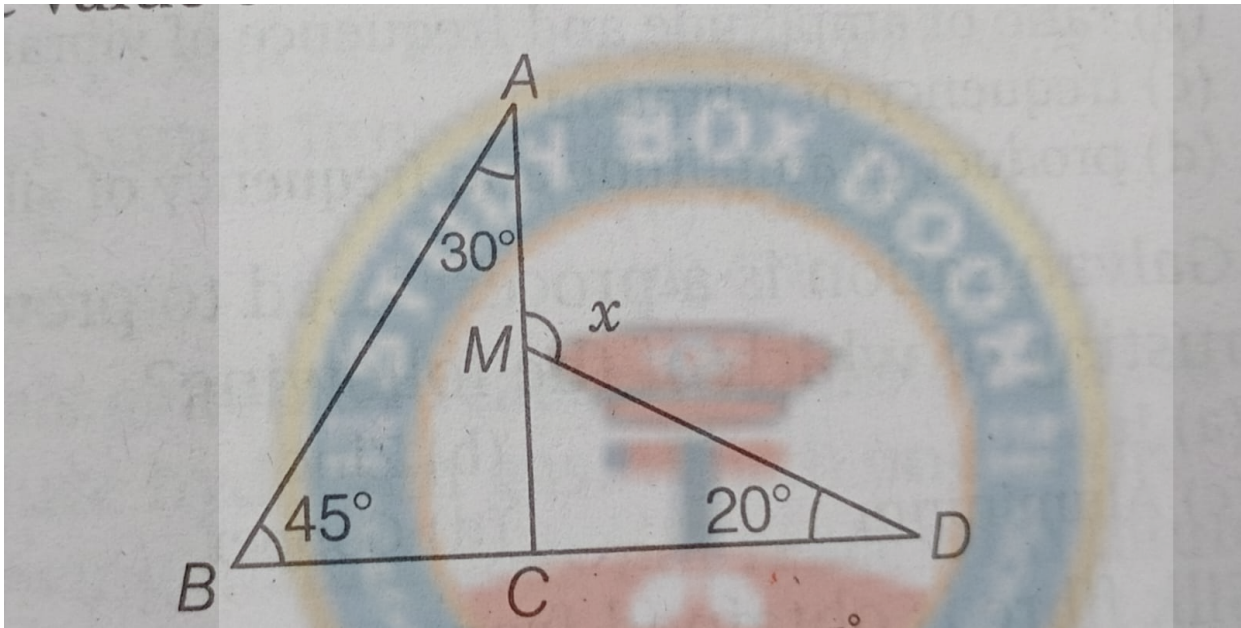
- ☐ A. 3 km/h
 ☐ B. 4 km/h
 ☐ C. 5 km/h
 ☐ D. 6 km/h

Question: 27 of 200

QID: 11434

Marks: 1

The value of x is.



Please mark (✓) for the correct answer.

- ☐ A. 75°
 ☐ B. 95°
 ☐ C. 105°
 ☐ D. 125°

Question: 28 of 200

QID: 11435

Marks: 1

Which number is not divisible by 9?

Please mark (✓) for the correct answer.

- ☐ A. 108
 ☐ B. 215
 ☐ C. 387
 ☐ D. 693

If a rectangular sheet of paper 44 cm x 18 cm is rolled along its length and a cylinder is formed, then the radius of the cylinder.

Please mark (✓) for the correct answer.

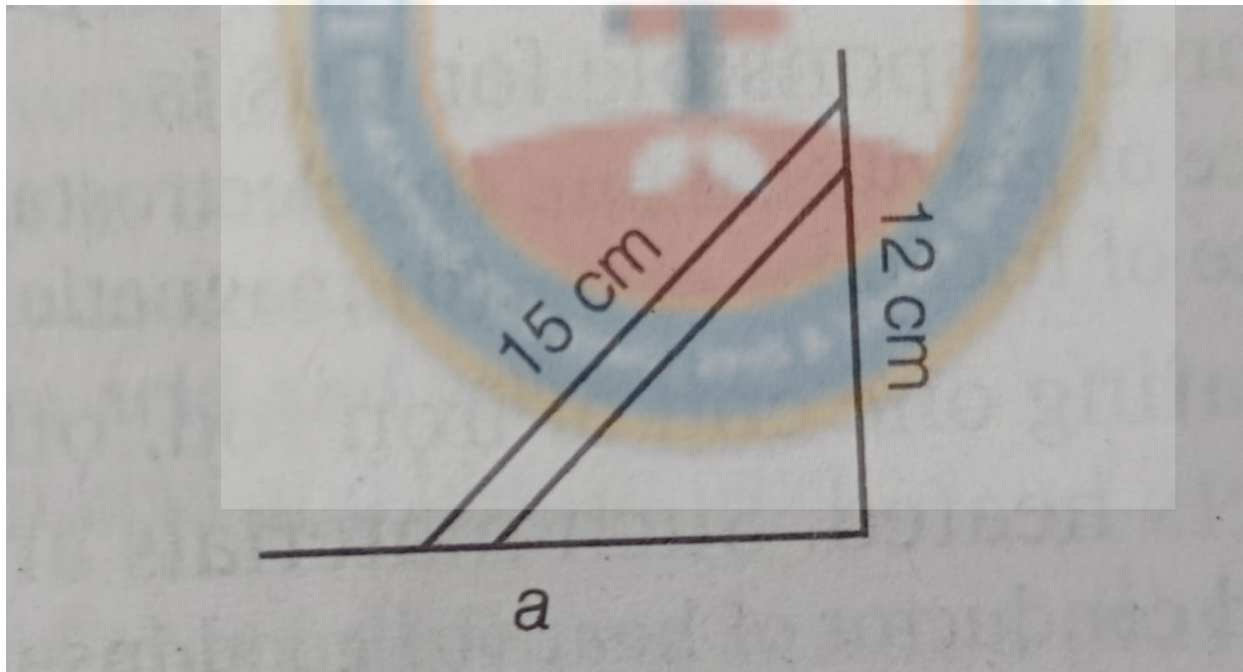
- ☐ A. 14 cm
- ☐ B. 7 cm
- ☐ C. 12 cm
- ☐ D. 6 cm

If $2^{1998} - 2^{1997} - 2^{1996} + 2^{1995} = k * 2^{1995}$ then the value of k is

Please mark (✓) for the correct answer.

- ☐ A. 1
- ☐ B. 2
- ☐ C. 3
- ☐ D. 4

A 15 m long ladder reached a window 12 m high from the ground on placing it against a wall at a distance a. Find the distance of the foot of the ladder from the wall.



Please mark (✓) for the correct answer.

- ☐ A. 10 m
- ☐ B. 9 m
- ☐ C. 8 m
- ☐ D. 4 m

Question: 32 of 200

QID: 11439

Marks: 1

The present age of father is four times the age of his son. After 10 year, age of father will become three times the age of his son. Their present ages, are

Please mark (✓) for the correct answer.

- ☐ A. 20 yr, 80 yr
- ☐ B. 10 yr, 40 yr
- ☐ C. 5 yr, 20 yr
- ☐ D. 1 yr, 20 yr

Question: 33 of 200

QID: 11440

Marks: 1

The value of 103×107 without multiplying directly, is

Please mark (✓) for the correct answer.

- ☐ A. 10121
- ☐ B. 11201
- ☐ C. 11021
- ☐ D. 10112

Question: 34 of 200

QID: 11441

Marks: 1

In a Mathematics test given to 15 students, the following marks (out of 100) are recorded 41, 39, 48, 52, 46, 62, 54, 40, 96, 52, 98, 40, 42, 52, 60, then the mean of this data.

Please mark (✓) for the correct answer.

- ☐ A. 50
- ☐ B. 59.80
- ☐ C. 54
- ☐ D. 54.80

Question: 35 of 200

QID: 11442

Marks: 1

The least number that must be added to 1500, so as to get perfect square, is

Please mark (✓) for the correct answer.

- ☐ A. 19
- ☐ B. 20
- ☐ C. 21
- ☐ D. 22

Question: 36 of 200

QID: 11443

Marks: 1

The value of $\sqrt[3]{27} + \sqrt[3]{0.008} + \sqrt[3]{0.064}$, is

Please mark (✓) for the correct answer.

- ☐ A. 2.6
- ☐ B. 3.6
- ☐ C. 4.6
- ☐ D. 5.6

Question: 37 of 200

QID: 11444

Marks: 1

The probabilities of a student getting A, B, C and D grades are 0.35, 0.25, 0.35 and 0.05. Then, the probability that a student gets at most grade C, is

Please mark (✓) for the correct answer.

- ☐ A. 0.95 ☐ B. 0.70
- ☐ C. 0.65 ☐ D. 0.40

Question: 38 of 200

QID: 11445

Marks: 1

Which of the property works in the following identity? $(8 + 5) + 3 = 8 + (5 + 3)$

Please mark (✓) for the correct answer.

- ☐ A. Distributive ☐ B. Associative
- ☐ C. Commutative ☐ D. Closure

Question: 39 of 200

QID: 11446

Marks: 1

Efficiency of Kanchan is four times to that of Hina. If they will complete the work is 24 days by working together, then in how many days can Hina alone complete the work?

Please mark (✓) for the correct answer.

- ☐ A. 36 days ☐ B. 24 days
- ☐ C. 120 days ☐ D. 96 days

Question: 40 of 200

QID: 11447

Marks: 1

The sum required to earn a monthly interest of ₹1500 at 5% per annum at simple interest.

Please mark (✓) for the correct answer.

- ☐ A. ₹3,60,000 ☐ B. ₹36,000
- ☐ C. ₹1,80,000 ☐ D. ₹18000

Question: 41 of 200

QID: 11398

Marks: 1

The difference in the measures of two complementary angles is 12° , then the measures of the angles, are

Please mark (✓) for the correct answer.

- ☐ A. 51° , 39° ☐ B. 60° , 30°
- ☐ C. 45° , 45° ☐ D. 51° , 51°

Question: 42 of 200

QID: 11399

Marks: 1

The surface area of a sphere of diameter 14 cm, is

Please mark (✓) for the correct answer.

- ☐ A. 166 cm² ☐ B. 196 cm²
☐ C. 661 cm² ☐ D. 616 cm²

Question: 43 of 200

QID: 11400

Marks: 1

The sum of three consecutive even numbers is 138, then the greatest of these numbers is

Please mark (✓) for the correct answer.

- ☐ A. 44 ☐ B. 46
☐ C. 42 ☐ D. 48

Question: 44 of 200

QID: 11401

Marks: 1

The factorization of $84 - 2r - 2r^2$, is

Please mark (✓) for the correct answer.

- ☐ A. $(6-r)(r+7)$ ☐ B. $(7-r)(r+6)$
☐ C. $2(6-r)(r+7)$ ☐ D. $2(7-r)(r+7)$

Question: 45 of 200

QID: 11402

Marks: 1

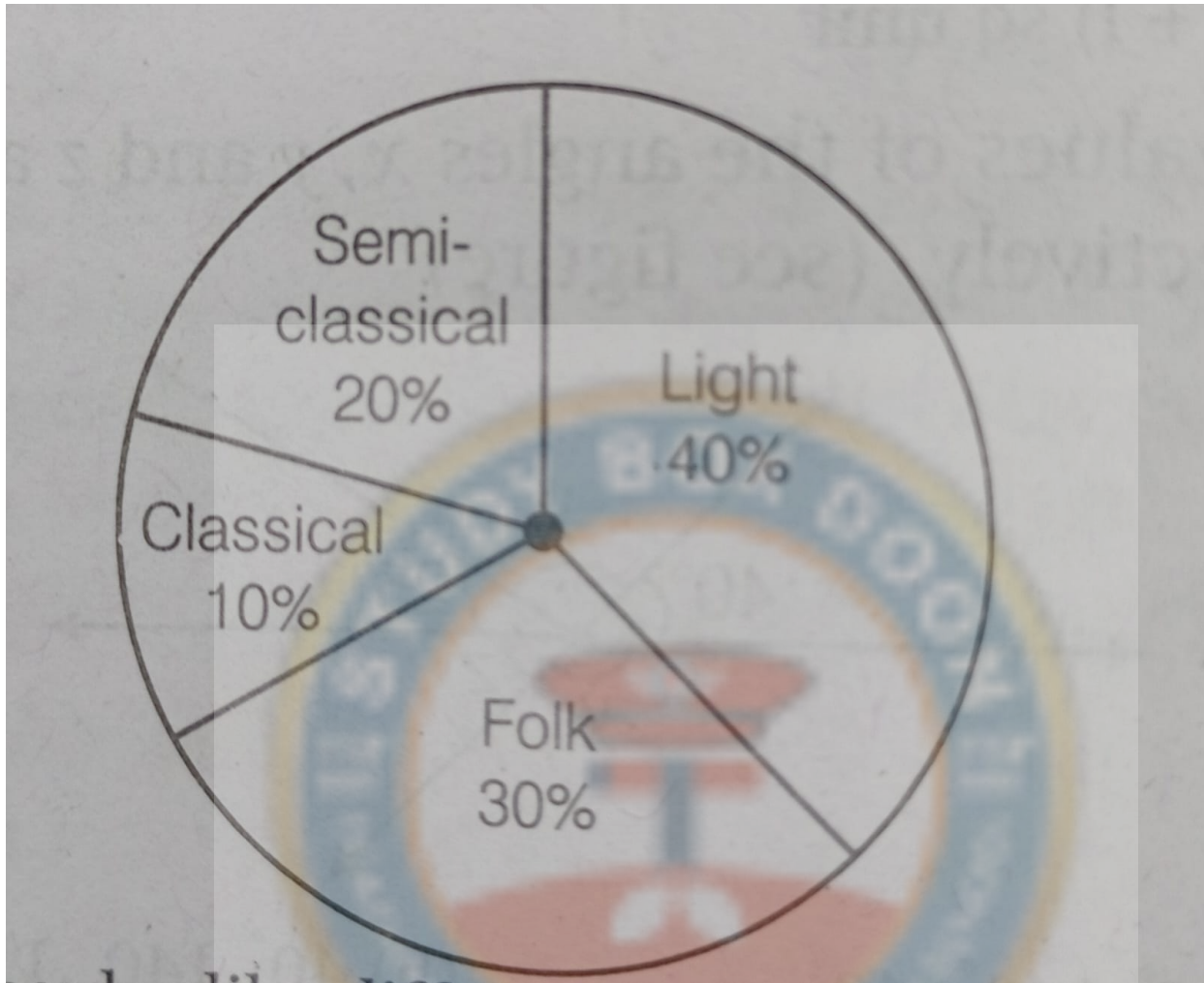
If $x^2 + y^2 / x^2 - y^2 = 17/8$, then the value of $x : y$, is

Please mark (✓) for the correct answer.

- ☐ A. 3:5 ☐ B. 5:3
☐ C. 3:8 ☐ D. 5:8

Directions (Q. Nos. 48 and 49) A pie chart is given below

Pie chart showing the distribution of people who like different types of music:



Which type of music is liked by the maximum number of people ?

Please mark (✓) for the correct answer.

- ☐ A. Semi-Classical ☐ B. Classical
- ☐ C. Light ☐ D. Folk

If a cassette company were to make 1000 CD'S, how many of semi-classical and folk would they make ?

Please mark (✓) for the correct answer.

- ☐ A. 200, 400 ☐ B. 100, 300
- ☐ C. 200, 300 ☐ D. 100, 400

Question: 48 of 200

QID: 11405

Marks: 1

The value of $\sqrt{24} + \sqrt{216} / \sqrt{96}$ is

Please mark (✓) for the correct answer.

- ☐ A. 8 ☐ B. 6
- ☐ C. 4 ☐ D. none

Question: 49 of 200

QID: 11406

Marks: 1

Navin purchased a cellphone for ₹12000 and sold it for ₹ 8000, then his loss per cent, is

Please mark (✓) for the correct answer.

- ☐ A. 30% ☐ B. 33%
- ☐ C. $33\frac{1}{3}\%$ ☐ D. $34\frac{2}{3}\%$

Question: 50 of 200

QID: 11407

Marks: 1

The value of $(3x + 2y)^2 + (3x - 2y)^2$, is

Please mark (✓) for the correct answer.

- ☐ A. $9x^2 + 4y^2$ ☐ B. $18x^2 + 8y^2$
- ☐ C. $12xy$ ☐ D. $24xy$

Question: 51 of 200

QID: 11448

Marks: 1

During dry weather while combing hair, sometimes we experience hair flying apart. The force responsible for this is

Please mark (✓) for the correct answer.

- ☐ A. force of gravity ☐ B. electrostatic force
- ☐ C. force of friction ☐ D. magnetic force

Question: 52 of 200

QID: 11449

Marks: 1

On heating one end of an iron rod, the other end also gets heated. Such materials are called

Please mark (✓) for the correct answer.

- ☐ A. good conductor of heat ☐ B. good insulator of heat
- ☐ C. bad conductor of heat ☐ D. heater

Question: 53 of 200

QID: 11450

Marks: 1

Which one records the distance travelled by a vehicle?

Please mark (✓) for the correct answer.

- | | |
|--------------------------------------|------------------------------------|
| <input type="radio"/> A. Speedometer | <input type="radio"/> B. Manometer |
| <input type="radio"/> C. Motometer | <input type="radio"/> D. Odometer |

Question: 54 of 200

QID: 11451

Marks: 1

The pressure exerted by liquid due to increase in depth

Please mark (✓) for the correct answer.

- | | |
|---------------------------------------|--|
| <input type="radio"/> A. reduces | <input type="radio"/> B. increases |
| <input type="radio"/> C. remains same | <input type="radio"/> D. depends on the nature of liquid |

Question: 55 of 200

QID: 11452

Marks: 1

Which of the following is not always necessary to observe a shadow?

Please mark (✓) for the correct answer.

- | | |
|--|--|
| <input type="radio"/> A. Sun | <input type="radio"/> B. Screen |
| <input type="radio"/> C. Source of light | <input type="radio"/> D. Opaque object |

Question: 56 of 200

QID: 11453

Marks: 1

The objects which partially allow the light to pass through it are called

Please mark (✓) for the correct answer.

- | | |
|--------------------------------------|--------------------------------------|
| <input type="radio"/> A. transparent | <input type="radio"/> B. luminous |
| <input type="radio"/> C. opaque | <input type="radio"/> D. translucent |

Question: 57 of 200

QID: 11454

Marks: 1

Which of the following can never form a circular shadow?

Please mark (✓) for the correct answer.

- | | |
|-------------------------------------|--|
| <input type="radio"/> A. A ball | <input type="radio"/> B. A flat disc |
| <input type="radio"/> C. A shoe box | <input type="radio"/> D. An ice cream cone |

Question: 58 of 200

QID: 11455

Marks: 1

Bouncing back of a ray of light from a shining surface on which it was incident is known as

Please mark (✓) for the correct answer.

- ☐ A. refraction
- ☐ B. bending
- ☐ C. reflection
- ☐ D. dispersion

Question: 59 of 200

QID: 11456

Marks: 1

Circuit breaker device which can be used in place of a fuse in domestic electric wiring is called

Please mark (✓) for the correct answer.

- ☐ A. DCB
- ☐ B. MCD
- ☐ C. MCB
- ☐ D. BCM

Question: 60 of 200

QID: 11457

Marks: 1

If the number of turns in the coil of an electromagnet is more, the strength of the electromagnet will be

Please mark (✓) for the correct answer.

- ☐ A. lesser
- ☐ B. greater
- ☐ C. double
- ☐ D. same

Question: 61 of 200

QID: 11458

Marks: 1

Which of the following characteristics is most suitable material for making the core of an electromagnet?

Please mark (✓) for the correct answer.

- ☐ A. Brass
- ☐ B. Aluminium
- ☐ C. Iron
- ☐ D. Steel

Question: 62 of 200

QID: 11459

Marks: 1

Amount of heat required to warm an object depends on

Please mark (✓) for the correct answer.

- ☐ A. mass of object
- ☐ B. temperature change
- ☐ C. nature of substance
- ☐ D. All of these

Question: 63 of 200

QID: 11460

Marks: 1

At atmospheric pressure, water boils at 100°C. If pressure is reduced, then

Please mark (✓) for the correct answer.

- ☐ A. it still boils at same temperature
- ☐ B. it now boils at a lower temperature
- ☐ C. it now boils at a higher temperature
- ☐ D. it does not boil at all

Question: 64 of 200

QID: 11461

Marks: 1

An iron ball at 40°C is dropped in a mug containing water at 40°C. The heat will

Please mark (✓) for the correct answer.

- ☐ A. flow from iron ball to water
- ☐ B. not flow from iron ball to water or from water to iron ball
- ☐ C. flow from water to iron ball
- ☐ D. increase the temperature of both

Question: 65 of 200

QID: 11462

Marks: 1

Stainless steel pans are usually provided with copper bottoms. The reason for this could be that

Please mark (✓) for the correct answer.

- ☐ A. copper bottom makes the pan more durable
- ☐ B. such pans appear colourful
- ☐ C. copper is a better conductor of heat than the stainless steel
- ☐ D. copper is easier to clean than the stainless steel

Question: 66 of 200

QID: 11463

Marks: 1

The normal range of vocal cords in women is

Please mark (✓) for the correct answer.

- ☐ A. 20 mm
- ☐ B. 10 mm
- ☐ C. 15 mm
- ☐ D. 40 mm

Question: 67 of 200

QID: 11464

Marks: 1

The loudness of sound is determined by its

Please mark (✓) for the correct answer.

- ☐ A. amplitude of vibration
- ☐ B. ratio of amplitude and frequency of vibration
- ☐ C. frequency of vibration
- ☐ D. product of amplitude and frequency of vibration

Question: 68 of 200

QID: 11465

Marks: 1

Galvanisation is a process used to prevent the rusting of which of the following?

Please mark (✓) for the correct answer.

- ☐ A. Iron
- ☐ B. Zinc
- ☐ C. Aluminium
- ☐ D. Copper

Question: 69 of 200

QID: 11466

Marks: 1

Silk fibre is obtained from

Please mark (✓) for the correct answer.

- ☐ A. Fleece of sheep
- ☐ B. Cotton ball
- ☐ C. Cocoon
- ☐ D. Shiny jute stalk

Question: 70 of 200

QID: 11467

Marks: 1

Neutralisation reaction is a

Please mark (✓) for the correct answer.

- ☐ A. physical and reversible change
- ☐ B. physical change that cannot be reversed
- ☐ C. chemical and reversible change
- ☐ D. chemical change that cannot be reversed

Question: 71 of 200

QID: 11468

Marks: 1

Pick the synthetic fibre out of the following.

Please mark (✓) for the correct answer.

- ☐ A. Cotton
- ☐ B. Nylon
- ☐ C. Jute
- ☐ D. Wool

Question: 72 of 200

QID: 11469

Marks: 1

Wool fibre cannot be obtained from which of the following?

Please mark (✓) for the correct answer.

- ☐ A. Goat
- ☐ B. Llama
- ☐ C. Alpaca
- ☐ D. Moth

Question: 73 of 200

QID: 11470

Marks: 1

Phenolphthalein is a synthetic indicator and its colours in acidic and basic solutions respectively are

Please mark (✓) for the correct answer.

- ☐ A. red and blue
- ☐ B. blue and red
- ☐ C. pink and colourless
- ☐ D. colourless and pink

Question: 74 of 200

QID: 11471

Marks: 1

Which of the following is not a common property of plastics?

Please mark (✓) for the correct answer.

- ☐ A. Non-reactive
- ☐ B. Light in weight
- ☐ C. Durable
- ☐ D. Good conductor of electricity

Question: 75 of 200

QID: 11472

Marks: 1

The substance that will be flattened on beating with a hammer is

Please mark (✓) for the correct answer.

- ☐ A. crystal of iodine
- ☐ B. lump of sulphur
- ☐ C. piece of coal
- ☐ D. zinc granule

Question: 76 of 200

QID: 11473

Marks: 1

The most suitable material for the preparation of handles of cooking utensils is

Please mark (✓) for the correct answer.

- ☐ A. polythene
- ☐ B. bakelite
- ☐ C. nylon
- ☐ D. PVC

Question: 77 of 200

QID: 11474

Marks: 1

Which of the following is not an allotrope of carbon?

Please mark (✓) for the correct answer.

- ☐ A. Graphite
- ☐ B. Coal
- ☐ C. Charcoal
- ☐ D. All of these are allotropes of carbon

Question: 78 of 200

QID: 11475

Marks: 1

Metals are generally solid. Which of the following metals is in the liquid state at room temperature?

Please mark (✓) for the correct answer.

- ☐ A. Mercury ☐ B. Silver
- ☐ C. Aluminium ☐ D. Sodium

Question: 79 of 200

QID: 11476

Marks: 1

Coal is processed in industries to get some useful products. Which of the following is not obtained from coal?

Please mark (✓) for the correct answer.

- ☐ A. Coke ☐ B. Coal tar
- ☐ C. Coal gas ☐ D. CNG

Question: 80 of 200

QID: 11477

Marks: 1

Metals generally react with dilute acids to produce hydrogen gas. Which one of the following metals does not react with dilute hydrochloric acid?

Please mark (✓) for the correct answer.

- ☐ A. Magnesium ☐ B. Aluminium
- ☐ C. Iron ☐ D. Copper

Question: 81 of 200

QID: 11478

Marks: 1

Choose the correct statement from the following.

Please mark (✓) for the correct answer.

- ☐ A. It is difficult to transport natural gas through pipes ☐ B. The disadvantage of natural gas is that it cannot be used directly for burning in homes
- ☐ C. Natural gas is stored under high pressure as compressed natural gas ☐ D. Natural gas cannot be used for power generation

Question: 82 of 200

QID: 11479

Marks: 1

If a person's clothes catch fire, the best way to extinguish the fire is to

Please mark (✓) for the correct answer.

- ☐ A. throw water on the clothes ☐ B. use a fire extinguisher
- ☐ C. cover the person with a woollen blanket ☐ D. cover the person with a polythene sheet

Question: 83 of 200

QID: 11480

Marks: 1

Turmeric is a natural indicator. On adding its paste to acid and base separately, which colours would be observed?

Please mark (✓) for the correct answer.

- ☐ A. Yellow in both acid and base
- ☐ B. Yellow in acid and red in base
- ☐ C. Pink in acid and yellow in base
- ☐ D. Red in acid and blue in base

Question: 84 of 200

QID: 11481

Marks: 1

Which of the following is not a plastid?

Please mark (✓) for the correct answer.

- ☐ A. Chloroplast
- ☐ B. Chromoplast
- ☐ C. Leucoplast
- ☐ D. Ribosome

Question: 85 of 200

QID: 11482

Marks: 1

Which of the following cells does not have a nucleus?

Please mark (✓) for the correct answer.

- ☐ A. White blood cell
- ☐ B. Red blood cell
- ☐ C. Nerve cell
- ☐ D. Muscle cell

Question: 86 of 200

QID: 11483

Marks: 1

A suitable term for the various components of cells is

Please mark (✓) for the correct answer.

- ☐ A. tissue
- ☐ B. cell organelles
- ☐ C. chromosomes
- ☐ D. genes

Question: 87 of 200

QID: 11484

Marks: 1

The mode of vegetative reproduction where scion and stock are used is called

Please mark (✓) for the correct answer.

- ☐ A. budding
- ☐ B. grafting
- ☐ C. cutting
- ☐ D. layering

Question: 88 of 200

QID: 11485

Marks: 1

Which among the following have hairs on seed?

Please mark (✓) for the correct answer.

- | | |
|------------------------------------|---------------------------------|
| <input type="radio"/> A. Drumstick | <input type="radio"/> B. Cotton |
| <input type="radio"/> C. Aak | <input type="radio"/> D. Maple |

Question: 89 of 200

QID: 11486

Marks: 1

Biological pollution in water is caused by

Please mark (✓) for the correct answer.

- | | |
|-------------------------------------|---|
| <input type="radio"/> A. coal mines | <input type="radio"/> B. domestic sewage and animal excreta |
| <input type="radio"/> C. oil spills | <input type="radio"/> D. chemicals like paint |

Question: 90 of 200

QID: 11487

Marks: 1

Which of these does not prevent growth of bacteria?

Please mark (✓) for the correct answer.

- | | |
|--------------------------------|--------------------------------|
| <input type="radio"/> A. Salt | <input type="radio"/> B. Oil |
| <input type="radio"/> C. Sugar | <input type="radio"/> D. Water |

Question: 91 of 200

QID: 11488

Marks: 1

Potable water is the water which is

Please mark (✓) for the correct answer.

- | | |
|--|--|
| <input type="radio"/> A. obtained from a river | <input type="radio"/> B. obtained from a lake |
| <input type="radio"/> C. pure and fit for drinking | <input type="radio"/> D. used only for washing clothes |

Question: 92 of 200

QID: 11489

Marks: 1

Scientist who discovered the fermentation

Please mark (✓) for the correct answer.

- | | |
|--|---|
| <input type="radio"/> A. Alexander Fleming | <input type="radio"/> B. Louis Pasteur |
| <input type="radio"/> C. Johann Mendel | <input type="radio"/> D. Charles Darwin |

Question: 93 of 200

QID: 11490

Marks: 1

Given below is a list of edible plants.

(i) **Banana**

(ii) **Pumpkin**

(iii) **Lady finger**

(iv) **Brinjal**

Which pair of plants has two or more edible parts?

Please mark (✓) for the correct answer.

- ☐ **A.** (i) and (ii) ☐ **B.** (ii) and (iii)
- ☐ **C.** (ii) and (iv) ☐ **D.** (i) and (iv)

Question: 94 of 200

QID: 11491

Marks: 1

Read each set of terms and identify the odd set.

Please mark (✓) for the correct answer.

- ☐ **A.** Cow, milk, butter ☐ **B.** Hen, meat, egg
- ☐ **C.** Goat, milk, meat ☐ **D.** Plant, vegetable, butter, milk

Question: 95 of 200

QID: 11492

Marks: 1

Cyanocobalamin is vitamin

Please mark (✓) for the correct answer.

- ☐ **A.** B₁₂ ☐ **B.** B₁
- ☐ **C.** B₂ ☐ **D.** K

Question: 96 of 200

QID: 11493

Marks: 1

Minerals and vitamins present in food are

Please mark (✓) for the correct answer.

- ☐ **A.** protective ☐ **B.** energy giving
- ☐ **C.** body building ☐ **D.** roughage

Question: 97 of 200

QID: 11494

Marks: 1

The most common carrier of communicable diseases is

Please mark (✓) for the correct answer.

- ☐ A. ant ☐ B. housefly
☐ C. dragonfly ☐ D. spider

Question: 98 of 200

QID: 11495

Marks: 1

Which one of the following sources of protein is different from others?

Please mark (✓) for the correct answer.

- ☐ A. Peas ☐ B. Grams
☐ C. Soybeans ☐ D. Cottage cheese (paneer)

Question: 99 of 200

QID: 11496

Marks: 1

The buds at the tip of the stem or its branches are called

Please mark (✓) for the correct answer.

- ☐ A. axillary buds ☐ B. nodal buds
☐ C. apical buds ☐ D. growing buds

Question: 100 of 200

QID: 11497

Marks: 1

Which one of the following plants does not have a tap root?

Please mark (✓) for the correct answer.

- ☐ A. Marigold ☐ B. Mango
☐ C. Maize ☐ D. Turnip

Question: 101 of 200

QID: 11498

Marks: 1

Which type of forests occupies the highest percentage of area in India?

Please mark (✓) for the correct answer.

- ☐ A. Tropical deciduous forest ☐ B. Tropical evergreen forest
☐ C. Thorny forest ☐ D. Tidal forest

Question: 102 of 200

QID: 11499

Marks: 1

River Krishna originates from

Please mark (✓) for the correct answer.

- ☐ A. Eastern Ghats ☐ B. Northern Ghats
☐ C. Western Ghats ☐ D. Southern Ghats

Question: 103 of 200

QID: 11500

Marks: 1

Which of the following is India's largest Salt Producing state?

Please mark (✓) for the correct answer.

- ☐ A. Maharashtra ☐ B. Gujarat
☐ C. Orissa ☐ D. Kerala

Question: 104 of 200

QID: 11501

Marks: 1

Which of the following desert is situated in South Africa?

Please mark (✓) for the correct answer.

- ☐ A. Patagonia desert ☐ B. Sahara desert
☐ C. Kalahari desert ☐ D. Gobi desert

Question: 105 of 200

QID: 11502

Marks: 1

Name the place from which River Narmada originates.

Please mark (✓) for the correct answer.

- ☐ A. Nasik ☐ B. Amarkantak
☐ C. Lake Mansarovar ☐ D. Mahabaleshwar

Question: 106 of 200

QID: 11503

Marks: 1

Who among the following founded the Young Bengal Movement?

Please mark (✓) for the correct answer.

- ☐ A. Ram Krishna Paramhansa ☐ B. S. N. Banerjee
☐ C. Devendra Nath Tagore ☐ D. Henry Vivian Derozio

Question: 107 of 200

QID: 11504

Marks: 1

According to the census 2011 the population density of India is:

Please mark (✓) for the correct answer.

- ☐ A. 385 persons per sq. km. ☐ B. 382 persons per sq. km.
- ☐ C. 390 persons per sq. km. ☐ D. 380 persons per sq. km.

Question: 108 of 200

QID: 11505

Marks: 1

The Bhopal Gas Tragedy occurred in which of the following year?

Please mark (✓) for the correct answer.

- ☐ A. 1984 ☐ B. 1980
- ☐ C. 1986 ☐ D. 1989

Question: 109 of 200

QID: 11506

Marks: 1

Which of the following cities is known as the 'Silicon Plateau'?

Please mark (✓) for the correct answer.

- ☐ A. Mumbai ☐ B. Bengaluru
- ☐ C. Hyderabad ☐ D. Chennai

Question: 110 of 200

QID: 11507

Marks: 1

Who is considered the head of the state in India?

Please mark (✓) for the correct answer.

- ☐ A. Prime Minister ☐ B. President
- ☐ C. Chief Justice ☐ D. Governor

Question: 111 of 200

QID: 11508

Marks: 1

The purpose of the 'Directive Principles of State Policy', is to ensure;

Please mark (✓) for the correct answer.

- ☐ A. Social Reforms ☐ B. Economic Reforms
- ☐ C. Both 'a' and 'b' ☐ D. None of these

Consider the following statements about Rajya Sabha:

- A. It is also called the 'Council of States'
- B. It has 238 elected members.
- C. It has 14 nominated members by the President of India.

Select the correct answer using the code given below:

Please mark (✓) for the correct answer.

- ☐ A. Both A and C
- ☐ B. Both B and C
- ☐ C. Only B
- ☐ D. Both A and B

Which one of the following statements is incorrect about subsistence farming?

Please mark (✓) for the correct answer.

- ☐ A. It is mainly practised to meet the needs of the farmer's family.
- ☐ B. Mechanised harvesting techniques are used in this farming.
- ☐ C. It does not need intensive labour.
- ☐ D. It needs less technology.

In 1922, Gandhiji abruptly called off the Non-cooperation Movement because:

Please mark (✓) for the correct answer.

- ☐ A. a crowd of peasants set fire to a police station in Chauri Chaura.
- ☐ B. Ideological differences emerged between Gandhiji and other leaders.
- ☐ C. Gandhiji was unhappy with the passing of Rowlatt Act.
- ☐ D. None of the above

Which of the following minerals is also known as 'Black gold'?

Please mark (✓) for the correct answer.

- ☐ A. Petroleum
- ☐ B. Diesel
- ☐ C. Coal
- ☐ D. Natural Gas

Question: 116 of 200

QID: 11513

Marks: 1

Which of the following statements is/are correct about the Parliamentary form of Government in India?

Please mark (✓) for the correct answer.

- ☐ A. All citizens of the country, irrespective of their social background, have a direct role in electing their representatives.
- ☐ B. The constitution guarantees universal adult suffrage for all citizens.
- ☐ C. The representative are accountable to the people
- ☐ D. All of the above

Question: 117 of 200

QID: 11514

Marks: 1

TISCO the leading steel producing company in India was established in:

Please mark (✓) for the correct answer.

- ☐ A. 1947
- ☐ B. 1907
- ☐ C. 1917
- ☐ D. 1922

Question: 118 of 200

QID: 11515

Marks: 1

Who among the following was not associated with the Battle of Plassey?

Please mark (✓) for the correct answer.

- ☐ A. Sirajuddaulah
- ☐ B. Robert Clive
- ☐ C. Mir Jafar
- ☐ D. Murshid Quli Khan

Question: 119 of 200

QID: 11516

Marks: 1

In which form of government are decisions taken by single person who has all powers ?

Please mark (✓) for the correct answer.

- ☐ A. Federal
- ☐ B. Dictatorship
- ☐ C. Republic
- ☐ D. Democracy

Question: 120 of 200

QID: 11517

Marks: 1

To ensure that workers are not under paid but are paid fairly, which of the following measures have been taken by the government?

Please mark (✓) for the correct answer.

- ☐ A. Minimum wages for all levels of workers have been set.
- ☐ B. Government gives subsidy to private employees.
- ☐ C. Government gives compensation to the workers
- ☐ D. None of the above

Question: 121 of 200

QID: 11518

Marks: 1

Who among the following led the Revolt of 1857 at Kanpur?

Please mark (✓) for the correct answer.

- ☐ A. Nana Sahab
- ☐ B. Kunwar Singh
- ☐ C. Rani Avantibai Lodhi
- ☐ D. Begum Hazrat Mahal

Question: 122 of 200

QID: 11519

Marks: 1

Which one of the following statements is not correct about the Lok Sabha?

Please mark (✓) for the correct answer.

- ☐ A. It is also known as the house of people
- ☐ B. Its present strength is 545.
- ☐ C. Its maximum strength can be 548.
- ☐ D. It has two nominated members by the President of India from the Anglo-Indian community abolished by 104th amendment 2019.

Question: 123 of 200

QID: 11520

Marks: 1

The dispute relating to sale/purchase of an article is a subject to:

Please mark (✓) for the correct answer.

- ☐ A. Criminal law
- ☐ B. Civil law
- ☐ C. Both 'a' and 'b'
- ☐ D. None of these

Question: 124 of 200

QID: 11521

Marks: 1

What proportion of earth's surface is covered by land?

Please mark (✓) for the correct answer.

- ☐ A. 30%
- ☐ B. 70%
- ☐ C. 35%
- ☐ D. 75%

Question: 125 of 200

QID: 11522

Marks: 1

Which of the following features of soil is/are determined by the parent rocks?

Please mark (✓) for the correct answer.

- ☐ A. Minerals
- ☐ B. Colour
- ☐ C. Texture
- ☐ D. All of these

Question: 126 of 200

QID: 11593

Marks: 1

The Indus Valley Civilization flourished on the banks of which river?

Please mark (✓) for the correct answer.

- ☐ A. Ganga ☐ B. Yamuna
☐ C. Indus ☐ D. Godavari

Question: 127 of 200

QID: 11594

Marks: 1

Ashoka's inscriptions were written in which script?

Please mark (✓) for the correct answer.

- ☐ A. Brahmi ☐ B. Devanagari
☐ C. Urdu ☐ D. Kharoshthi

Question: 128 of 200

QID: 11595

Marks: 1

What is the National Animal of India?

Please mark (✓) for the correct answer.

- ☐ A. Lion ☐ B. Tiger
☐ C. Elephant ☐ D. Rhinoceros

Question: 129 of 200

QID: 11596

Marks: 1

Which is the smallest state of India by area?

Please mark (✓) for the correct answer.

- ☐ A. Punjab ☐ B. Goa
☐ C. Haryana ☐ D. Sikkim

Question: 130 of 200

QID: 11597

Marks: 1

When was the Constitution of India enforced?

Please mark (✓) for the correct answer.

- ☐ A. 15th August 1947 ☐ B. 26th November 1949
☐ C. 26th January 1950 ☐ D. 1st January 1951

Read the passage carefully and choose the best answer to each question out of the four alternatives.

Chameleons can make their skin colour change, but not because they decide to. The colour changes to help the chameleon avoid its enemies. It is a form of camouflage, a disguise that lets it blend in with its surroundings. The changes are actually determined by environmental factors, such as light and temperature.

Bright sunlight causes the skin to get darker. On cool nights, the colour fades to a creamy colour. The colour also changes when chameleons are excited, angry or afraid. The colour change is rapid and increases when the chameleon is handled, injured, or approached by another chameleon.

There are many types of chameleons. Almost half of them are found on the African Island of Madagascar. The others mostly occur in the Sahara desert, with few in Western Asia and Southern Europe. Chameleons live in trees, where they usually eat insects. Very large chameleons may even use their sticky tongues to catch birds.

The colour changes are determined by

Please mark (✓) for the correct answer.

- | | |
|--|---|
| <input type="radio"/> A. light and wind | <input type="radio"/> B. light and pressure |
| <input type="radio"/> C. light and temperature | <input type="radio"/> D. pressure and temperature |

Read the passage carefully and choose the best answer to each question out of the four alternatives.

Chameleons can make their skin colour change, but not because they decide to. The colour changes to help the chameleon avoid its enemies. It is a form of camouflage, a disguise that lets it blend in with its surroundings. The changes are actually determined by environmental factors, such as light and temperature.

Bright sunlight causes the skin to get darker. On cool nights, the colour fades to a creamy colour. The colour also changes when chameleons are excited, angry or afraid. The colour change is rapid and increases when the chameleon is handled, injured, or approached by another chameleon.

There are many types of chameleons. Almost half of them are found on the African Island of Madagascar. The others mostly occur in the Sahara desert, with few in Western Asia and Southern Europe. Chameleons live in trees, where they usually eat insects. Very large chameleons may even use their sticky tongues to catch birds.

Half of the world's chameleons are found

Please mark (✓) for the correct answer.

- | | |
|--|---|
| <input type="radio"/> A. on the Asian Island of Madagascar | <input type="radio"/> B. in the Sahara Desert |
| <input type="radio"/> C. on the African Island of Madagascar | <input type="radio"/> D. in the continent of Asia |

Fill in the blanks with the correct parts of speech from the given alternatives.

How much did you spend roses?

Please mark (✓) for the correct answer.

- | | |
|-----------------------------|-------------------------------|
| <input type="radio"/> A. in | <input type="radio"/> B. on |
| <input type="radio"/> C. of | <input type="radio"/> D. from |

Question: 134 of 200

QID: 11529

Marks: 1

The shirt is not expensive, I bought it

Please mark (✓) for the correct answer.

- | | |
|----------------------------------|--------------------------------|
| <input type="radio"/> A. clearly | <input type="radio"/> B. cheap |
| <input type="radio"/> C. cheaply | <input type="radio"/> D. low |

Question: 135 of 200

QID: 11530

Marks: 1

He does not any fixed principle.

Please mark (✓) for the correct answer.

- | | |
|-------------------------------------|-----------------------------------|
| <input type="radio"/> A. go through | <input type="radio"/> B. go about |
| <input type="radio"/> C. go upon | <input type="radio"/> D. go with |

Question: 136 of 200

QID: 11531

Marks: 1

The principal has given his to the match.

Please mark (✓) for the correct answer.

- | | |
|---------------------------------|---------------------------------|
| <input type="radio"/> A. assent | <input type="radio"/> B. except |
| <input type="radio"/> C. ascent | <input type="radio"/> D. refuse |

Question: 137 of 200

QID: 11532

Marks: 1

..... of people come here to gossip.

Please mark (✓) for the correct answer.

- | | |
|--------------------------------|-------------------------------|
| <input type="radio"/> A. Few | <input type="radio"/> B. Most |
| <input type="radio"/> C. A lot | <input type="radio"/> D. Lot |

Question: 138 of 200

QID: 11533

Marks: 1

Telling a small lie sometimes enables one to avoid another's feelings.

Please mark (✓) for the correct answer.

- | | |
|----------------------------------|-----------------------------------|
| <input type="radio"/> A. hurting | <input type="radio"/> B. nothing |
| <input type="radio"/> C. harming | <input type="radio"/> D. stopping |

I could hardly recognise him I saw him.

Please mark (✓) for the correct answer.

☐ A. after

☐ B. but

☐ C. and

☐ D. when

Our teacher encouraged setting the poem to music.

Please mark (✓) for the correct answer.

☐ A. his

☐ B. him

☐ C. he

☐ D. he's

..... Australian and European are there among the tourists.

Please mark (✓) for the correct answer.

☐ A. An, an

☐ B. The, the

☐ C. An, a

☐ D. A, an

Choose the most appropriate form of the reported speech in the following

Ravi said to me, "where have you been last night?"

Please mark (✓) for the correct answer.

☐ A. Ravi asked me where had I been the previous night.

☐ B. Ravi asked me where I have been the previous night.

☐ C. Ravi asked me where I was the previous night.

☐ D. Ravi asked me where I had been the previous night.

Choose the most appropriate form of the reported speech in the following

"Be careful, the steps are slippery", I warned him.

Please mark (✓) for the correct answer.

☐ A. I warned him to be careful as the steps were slippery.

☐ B. I warned him to be careful as the steps are slippery.

☐ C. I warned him to be careful and the steps were slippery.

☐ D. I told him to be careful and the steps are slippery.

Choose the correct passive form of the given sentences from the following

Don't subject the animals to cruelty.

Please mark (✓) for the correct answer.

- ☐ A. The animals are not to be subjected to cruelty. ☐ B. The animals shall not be subjected to cruelty.
- ☐ C. The animals will not be subjected to cruelty. ☐ D. The animals should not be subjected to cruelty.

Spot the error in the following sentences

The spectators (a)/are requested (b)/to be in (c)/its seats (d).

Please mark (✓) for the correct answer.

- ☐ A. The spectators ☐ B. are requested
- ☐ C. to be in ☐ D. its seats

Spot the error in the following sentences

The film show (a)/began (b)/before we arrived (c)/in the hall (d).

Please mark (✓) for the correct answer.

- ☐ A. The film show ☐ B. began
- ☐ C. before we arrived ☐ D. in the hall

Spot the error in the following sentences

He walked (a)/quick so that (b)/he would not (c)/be late (d).

Please mark (✓) for the correct answer.

- ☐ A. He walked ☐ B. quick so that
- ☐ C. he would not ☐ D. be late

Choose the correct passive form of the given sentences from the following

Who allowed them to watch TV?

Please mark (✓) for the correct answer.

- ☐ A. By who they are allowed to watch TV? ☐ B. By whom they were allowed to watch TV?
- ☐ C. By whom were they allowed to watch TV? ☐ D. By who have they been allowed to watch TV?

Question: 149 of 200

QID: 11552

Marks: 1

No one knows

Please mark (✓) for the correct answer.

- ☐ A. who he is ☐ B. whom he is
- ☐ C. why he is ☐ D. when he is

Question: 150 of 200

QID: 11553

Marks: 1

She will not let you go

Please mark (✓) for the correct answer.

- ☐ A. unless you will bless her. ☐ B. unless you do not bless her.
- ☐ C. unless you bless her. ☐ D. if you bless her.

Question: 151 of 200

QID: 11554

Marks: 1

Rearrange the following words to make meaningful sentences

1. The Indian
2. the English
3. farmers
4. exploited

Please mark (✓) for the correct answer.

- ☐ A. 1234 ☐ B. 3142
- ☐ C. 2413 ☐ D. 1432

Question: 152 of 200

QID: 11555

Marks: 1

Rearrange the following words to make meaningful sentences

1. very high fines
2. the
3. to pay
4. poor farmers had

Please mark (✓) for the correct answer.

- ☐ A. 1234 ☐ B. 4321
- ☐ C. 2431 ☐ D. 1432

Question: 153 of 200

QID: 11556

Marks: 1

Choose the one word which can be substituted for the given words/sentences

That which can be drunk.

Please mark (✓) for the correct answer.

- ☐ A. edible ☐ B. palatable
☐ C. culpable ☐ D. potable

Question: 154 of 200

QID: 11557

Marks: 1

Choose the one word which can be substituted for the given words/sentences

Something that is beyond the power of nature.

Please mark (✓) for the correct answer.

- ☐ A. Supernatural ☐ B. magical
☐ C. preternatural ☐ D. unnatural

Question: 155 of 200

QID: 11558

Marks: 1

Choose the one word which can be substituted for the given words/sentences

A feather in one's cap

Please mark (✓) for the correct answer.

- ☐ A. rewarding ☐ B. an exciting moment
☐ C. an achievement ☐ D. great joy

Question: 156 of 200

QID: 11559

Marks: 1

Find the suitable phrase for the group of words.

Being in the same difficult situation

Please mark (✓) for the correct answer.

- ☐ A. sailing in the same boat ☐ B. run parallel
☐ C. to beat about the bush ☐ D. to face the music

Question: 157 of 200

QID: 11560

Marks: 1

In the following question choose the one which best expresses the meaning of the given word

Humiliation:

Please mark (✓) for the correct answer.

- ☐ A. Elimination ☐ B. Dishonor
☐ C. Irritation ☐ D. Damage

Question: 158 of 200

QID: 11561

Marks: 1

In the following question choose the one which best expresses the meaning of the given word

Valient:

Please mark (✓) for the correct answer.

- ☐ A. courageous ☐ B. Quarrelsome
☐ C. Cheerful ☐ D. Repulsive

Question: 159 of 200

QID: 11562

Marks: 1

In the following question, choose the word opposite in meaning to the given word

Boisterous

Please mark (✓) for the correct answer.

- ☐ A. Naughty ☐ B. Quiet
☐ C. Reserved ☐ D. Bouncy

Question: 160 of 200

QID: 11563

Marks: 1

In the following question, choose the word opposite in meaning to the given word

Veteran

Please mark (✓) for the correct answer.

- ☐ A. Activist ☐ B. Enthusiast
☐ C. Novice ☐ D. Master

Question: 161 of 200

QID: 11564

Marks: 1

find the correctly spelt word

Please mark (✓) for the correct answer.

- ☐ A. Mischievous ☐ B. Mischevious
☐ C. Mischievus ☐ D. Mischeivous

Question: 162 of 200

QID: 11565

Marks: 1

find the correctly spelt word

Please mark (✓) for the correct answer.

- ☐ A. Sparro ☐ B. Sparrow
☐ C. Sperrow ☐ D. Sparow

Find the misspelt word out of the following

Please mark (✓) for the correct answer.

- ☐ A. Centenarian ☐ B. Centegade
- ☐ C. Cellulose ☐ D. Chocolate

Find the misspelt word out of the following

Please mark (✓) for the correct answer.

- ☐ A. Governor ☐ B. Guardian
- ☐ C. Grammer ☐ D. Genuine

Read the passage carefully and choose the best answer to each question out of the four alternatives.

The mighty Himalayas are the youngest mountain range in the world. They stretch across five countries: India, Nepal, Bhutan, China, and Pakistan. These towering peaks act as a natural barrier, protecting the Indian subcontinent from harsh cold winds from Central Asia. The Himalayas also play a crucial role in influencing the monsoon winds, bringing rainfall to northern India.

Mount Everest, the highest peak in the world, is part of this mountain range. Many rivers, including the Ganges, Yamuna, and Brahmaputra, originate from the Himalayan glaciers, providing fresh water to millions of people. The range is home to diverse wildlife, including the snow leopard, red panda, and Himalayan black bear.

Despite its beauty and importance, the Himalayas face many environmental challenges, such as deforestation, melting glaciers, and increasing human activities. Conservation efforts are needed to protect this vital ecosystem for future generations.

The Himalayas act as a natural barrier against

Please mark (✓) for the correct answer.

- ☐ A. monsoon winds ☐ B. cold winds from Central Asia
- ☐ C. hot winds from the Indian Ocean ☐ D. cyclones from the Bay of Bengal

Read the passage carefully and choose the best answer to each question out of the four alternatives.

The mighty Himalayas are the youngest mountain range in the world. They stretch across five countries: India, Nepal, Bhutan, China, and Pakistan. These towering peaks act as a natural barrier, protecting the Indian subcontinent from harsh cold winds from Central Asia. The Himalayas also play a crucial role in influencing the monsoon winds, bringing rainfall to northern India.

Mount Everest, the highest peak in the world, is part of this mountain range. Many rivers, including the Ganges, Yamuna, and Brahmaputra, originate from the Himalayan glaciers, providing fresh water to millions of people. The range is home to diverse wildlife, including the snow leopard, red panda, and Himalayan black bear.

Despite its beauty and importance, the Himalayas face many environmental challenges, such as deforestation, melting glaciers, and increasing human activities. Conservation efforts are needed to protect this vital ecosystem for future generations.

The Himalayas are home to which of the following animals?

Please mark (✓) for the correct answer.

- ☐ A. Snow leopard
- ☐ B. Bengal tiger
- ☐ C. African elephant
- ☐ D. Kangaroo

Read the passage carefully and choose the best answer to each question out of the four alternatives.

The mighty Himalayas are the youngest mountain range in the world. They stretch across five countries: India, Nepal, Bhutan, China, and Pakistan. These towering peaks act as a natural barrier, protecting the Indian subcontinent from harsh cold winds from Central Asia. The Himalayas also play a crucial role in influencing the monsoon winds, bringing rainfall to northern India.

Mount Everest, the highest peak in the world, is part of this mountain range. Many rivers, including the Ganges, Yamuna, and Brahmaputra, originate from the Himalayan glaciers, providing fresh water to millions of people. The range is home to diverse wildlife, including the snow leopard, red panda, and Himalayan black bear.

Despite its beauty and importance, the Himalayas face many environmental challenges, such as deforestation, melting glaciers, and increasing human activities. Conservation efforts are needed to protect this vital ecosystem for future generations.

One of the environmental challenges faced by the Himalayas is

Please mark (✓) for the correct answer.

- ☐ A. overfishing
- ☐ B. desertification
- ☐ C. melting glaciers
- ☐ D. oil spills

Read the passage carefully and choose the best answer to each question out of the four alternatives.

The mighty Himalayas are the youngest mountain range in the world. They stretch across five countries: India, Nepal, Bhutan, China, and Pakistan. These towering peaks act as a natural barrier, protecting the Indian subcontinent from harsh cold winds from Central Asia. The Himalayas also play a crucial role in influencing the monsoon winds, bringing rainfall to northern India.

Mount Everest, the highest peak in the world, is part of this mountain range. Many rivers, including the Ganges, Yamuna, and Brahmaputra, originate from the Himalayan glaciers, providing fresh water to millions of people. The range is home to diverse wildlife, including the snow leopard, red panda, and Himalayan black bear.

Despite its beauty and importance, the Himalayas face many environmental challenges, such as deforestation, melting glaciers, and increasing human activities. Conservation efforts are needed to protect this vital ecosystem for future generations.

The highest peak in the world is

Please mark (✓) for the correct answer.

- ☐ A. Mount Everest
- ☐ B. Mount K2
- ☐ C. Mount Kilimanjaro
- ☐ D. Mount Elbrus

Read the passage carefully and choose the best answer to each question out of the four alternatives.

The mighty Himalayas are the youngest mountain range in the world. They stretch across five countries: India, Nepal, Bhutan, China, and Pakistan. These towering peaks act as a natural barrier, protecting the Indian subcontinent from harsh cold winds from Central Asia. The Himalayas also play a crucial role in influencing the monsoon winds, bringing rainfall to northern India.

Mount Everest, the highest peak in the world, is part of this mountain range. Many rivers, including the Ganges, Yamuna, and Brahmaputra, originate from the Himalayan glaciers, providing fresh water to millions of people. The range is home to diverse wildlife, including the snow leopard, red panda, and Himalayan black bear.

Despite its beauty and importance, the Himalayas face many environmental challenges, such as deforestation, melting glaciers, and increasing human activities. Conservation efforts are needed to protect this vital ecosystem for future generations.

The rivers originating from the Himalayas provide

Please mark (✓) for the correct answer.

- ☐ A. saltwater
- ☐ B. fresh water
- ☐ C. frozen water
- ☐ D. polluted water

Read the passage carefully and choose the best answer to each question out of the four alternatives.

Chameleons can make their skin colour change, but not because they decide to. The colour changes to help the chameleon avoid its enemies. It is a form of camouflage, a disguise that lets it blend in with its surroundings. The changes are actually determined by environmental factors, such as light and temperature.

Bright sunlight causes the skin to get darker. On cool nights, the colour fades to a creamy colour. The colour also changes when chameleons are excited, angry or afraid. The colour change is rapid and increases when the chameleon is handled, injured, or approached by another chameleon.

There are many types of chameleons. Almost half of them are found on the African Island of Madagascar. The others mostly occur in the Sahara desert, with few in Western Asia and Southern Europe. Chameleons live in trees, where they usually eat insects. Very large chameleons may even use their sticky tongues to catch birds.

A chameleon's colour changes to help it

Please mark (✓) for the correct answer.

- | | |
|--|---|
| <input type="radio"/> A. fly away | <input type="radio"/> B. look beautiful |
| <input type="radio"/> C. avoid its enemies | <input type="radio"/> D. attract prey |

Question: 171 of 200

QID: 11537

Marks: 1

I praise honesty of this boy.

Please mark (✓) for the correct answer.

- | | |
|------------------------------|-------------------------------|
| <input type="radio"/> A. the | <input type="radio"/> B. a |
| <input type="radio"/> C. an | <input type="radio"/> D. your |

Question: 172 of 200

QID: 11538

Marks: 1

Spot the error in the following sentences

A sun is (a)/shining brightly (b)/about (c)/the horizon (d).

Please mark (✓) for the correct answer.

- | | |
|-----------------------------------|---|
| <input type="radio"/> A. A sun is | <input type="radio"/> B. shining brightly |
| <input type="radio"/> C. about | <input type="radio"/> D. the horizon |

Question: 173 of 200

QID: 11539

Marks: 1

Spot the error in the following sentences

Swati handed (a)/over (b)/a five rupees note (c)/to the shopkeeper (d).

Please mark (✓) for the correct answer.

- | | |
|---|--|
| <input type="radio"/> A. Swati handed | <input type="radio"/> B. over |
| <input type="radio"/> C. a five rupees note | <input type="radio"/> D. to the shopkeeper |

Spot the error in the following sentences

Kartik who was (a)/junior in most (b)/other employees (c)/has been promoted (d).

Please mark (✓) for the correct answer.

- ☐ A. Kartik who was
- ☐ B. junior in most
- ☐ C. other employees has
- ☐ D. been promoted

Read the passage carefully and choose the best answer to each question out of the four alternatives.

Chameleons can make their skin colour change, but not because they decide to. The colour changes to help the chameleon avoid its enemies. It is a form of camouflage, a disguise that lets it blend in with its surroundings. The changes are actually determined by environmental factors, such as light and temperature.

Bright sunlight causes the skin to get darker. On cool nights, the colour fades to a creamy colour. The colour also changes when chameleons are excited, angry or afraid. The colour change is rapid and increases when the chameleon is handled, injured, or approached by another chameleon.

There are many types of chameleons. Almost half of them are found on the African Island of Madagascar. The others mostly occur in the Sahara desert, with few in Western Asia and Southern Europe. Chameleons live in trees, where they usually eat insects. Very large chameleons may even use their sticky tongues to catch birds.

Chameleons change colour when they are

Please mark (✓) for the correct answer.

- ☐ A. excited, angry or hungry
- ☐ B. afraid, excited or angry
- ☐ C. angry, excited or happy
- ☐ D. afraid, angry or hungry

Read the passage carefully and choose the best answer to each question out of the four alternatives.

Chameleons can make their skin colour change, but not because they decide to. The colour changes to help the chameleon avoid its enemies. It is a form of camouflage, a disguise that lets it blend in with its surroundings. The changes are actually determined by environmental factors, such as light and temperature.

Bright sunlight causes the skin to get darker. On cool nights, the colour fades to a creamy colour. The colour also changes when chameleons are excited, angry or afraid. The colour change is rapid and increases when the chameleon is handled, injured, or approached by another chameleon.

There are many types of chameleons. Almost half of them are found on the African Island of Madagascar. The others mostly occur in the Sahara desert, with few in Western Asia and Southern Europe. Chameleons live in trees, where they usually eat insects. Very large chameleons may even use their sticky tongues to catch birds.

The colour changing ability of a chameleon is a form of camouflage which is

Please mark (✓) for the correct answer.

- ☐ A. colour that fades
- ☐ B. disguise that lets it blend in with its surroundings
- ☐ C. dance done by chameleons
- ☐ D. disease which affects chameleons

Question: 177 of 200

QID: 11541

Marks: 1

Spot the error in the following sentences

No sooner did (a)/she reach (b)/home then (c)/it started raining (d).

Please mark (✓) for the correct answer.

- ☐ A. No sooner did
- ☐ B. She reach
- ☐ C. home then
- ☐ D. it started raining

Question: 178 of 200

QID: 11542

Marks: 1

Spot the error in the following sentences

Unless you gave (a)/your consent (b)/we shall not accept (c)/this project (d).

Please mark (✓) for the correct answer.

- ☐ A. Unless you gave
- ☐ B. your consent
- ☐ C. we shall not accept
- ☐ D. this project

Question: 179 of 200

QID: 11543

Marks: 1

Spot the error in the following sentences

Neha is (a)/the prettiest (b)/of the two (c)/girls (d).

Please mark (✓) for the correct answer.

- ☐ A. Neha is
- ☐ B. the prettiest
- ☐ C. of the two
- ☐ D. girls

Question: 180 of 200

QID: 11544

Marks: 1

Spot the error in the following sentences

Many a student (a)/are (b)/frustrated (c)/because of unemployment (d).

Please mark (✓) for the correct answer.

- ☐ A. Many a student
- ☐ B. are
- ☐ C. frustrated
- ☐ D. because of unemployment

Question: 181 of 200

QID: 11573

Marks: 1

"बालक गेंद खेल रहा है" – इस वाक्य में "गेंद" कौन-सा कारक है?

Please mark (✓) for the correct answer.

- ☐ A. करण
- ☐ B. कर्म
- ☐ C. अपादान
- ☐ D. संबोधन

'जयशंकर प्रसाद' किस काव्यधारा के कवि थे?

Please mark (✓) for the correct answer.

- ☐ A. रहस्यवाद ☐ B. छायावाद
☐ C. रीतिकाल ☐ D. भक्तिकाल

"शिवाजी" किस भाषा के महान योद्धा माने जाते हैं?

Please mark (✓) for the correct answer.

- ☐ A. मराठी ☐ B. गुजराती
☐ C. हिंदी ☐ D. संस्कृत

"सूर्य" का पर्यायवाची कौन-सा है?

Please mark (✓) for the correct answer.

- ☐ A. शशि ☐ B. रवि
☐ C. इंद्र ☐ D. यम

"तालाब में कमल खिला है" – यहाँ 'कमल' किस अलंकार का उदाहरण है?

Please mark (✓) for the correct answer.

- ☐ A. उपमा ☐ B. अनुप्रास
☐ C. रूपक ☐ D. यथार्थ वर्णन

"राम ने लंका जीती" वाक्य का कर्मवाच्य रूप होगा –

Please mark (✓) for the correct answer.

- ☐ A. राम लंका जीते ☐ B. लंका राम से जीती गई
☐ C. लंका राम ने जीता ☐ D. लंका राम द्वारा जीती गई

"मनुष्य अपने कर्मों से महान बनता है" – यह वाक्य किस प्रकार का है?

Please mark (✓) for the correct answer.

- ☐ A. प्रश्नवाचक ☐ B. आज्ञावाचक
- ☐ C. विधानवाचक ☐ D. विस्मयादिबोधक

"राम-सीता" शब्द में कौन-सा समास है?

Please mark (✓) for the correct answer.

- ☐ A. द्वंद्व समास ☐ B. तत्पुरुष समास
- ☐ C. बहुव्रीहि समास ☐ D. कर्मधारय समास

"नाच न जाने आँगन टेढ़ा" किस प्रकार की लोकोक्ति है?

Please mark (✓) for the correct answer.

- ☐ A. परिश्रम का महत्व ☐ B. दोषारोपण
- ☐ C. आलस्य ☐ D. अध्ययन

'सरस्वती' किसकी उपास्य देवी मानी जाती हैं?

Please mark (✓) for the correct answer.

- ☐ A. बुद्धि व ज्ञान की ☐ B. धन की
- ☐ C. शक्ति की ☐ D. युद्ध की

'भारतेंदु हरिश्चंद्र' किस युग के प्रमुख कवि माने जाते हैं?

Please mark (✓) for the correct answer.

- ☐ A. रीतिकाल ☐ B. भक्ति काल
- ☐ C. आधुनिक काल ☐ D. छायावाद

'कबीर' किस प्रकार की भाषा का प्रयोग करते थे?

Please mark (✓) for the correct answer.

- ☐ A. उर्दू ☐ B. खड़ीबोली
- ☐ C. सधुक्की ☐ D. अवधी

"बालक पुस्तक पढ़ता है" – यहाँ 'पढ़ता है' किस प्रकार की क्रिया है?

Please mark (✓) for the correct answer.

- ☐ A. सकर्मक ☐ B. अकर्मक
- ☐ C. मिश्रित ☐ D. सहायक

"मंजिल मिलेगी भटक कर ही सही" – यह किस अलंकार का उदाहरण है?

Please mark (✓) for the correct answer.

- ☐ A. उपमा ☐ B. अनुप्रास
- ☐ C. मानवीकरण ☐ D. रूपक

'रामचरितमानस' किस भाषा में लिखी गई है?

Please mark (✓) for the correct answer.

- ☐ A. संस्कृत ☐ B. ब्रजभाषा
- ☐ C. अवधी ☐ D. खड़ीबोली

"जो घर फूँक रहा है, वही राख बटोरेगा" – यह किस प्रकार की कहावत है?

Please mark (✓) for the correct answer.

- ☐ A. परिश्रम का महत्व ☐ B. दुष्कर्म का फल
- ☐ C. लोभ का परिणाम ☐ D. उदारता का प्रतीक

"खिल" शब्द का विलोम है –

Please mark (✓) for the correct answer.

- ☐ A. मुरझाना
 ☐ B. हँसना
☐ C. खिलखिलाना
 ☐ D. पनपना

'विद्या ददाति विनयम्' का हिंदी भावार्थ है –

Please mark (✓) for the correct answer.

- ☐ A. विद्या से शक्ति मिलती है
 ☐ B. विद्या से विनय प्राप्त होता है
☐ C. विद्या से धन प्राप्त होता है
 ☐ D. विद्या से बल मिलता है

'गोदान' उपन्यास के लेखक कौन हैं?

Please mark (✓) for the correct answer.

- ☐ A. मुंशी प्रेमचंद
 ☐ B. हरिवंश राय बच्चन
☐ C. जयशंकर प्रसाद
 ☐ D. निराला

"पढ़ते-पढ़ते रात हो गई" – यहाँ कौन-सा अव्यय प्रयोग हुआ है?

Please mark (✓) for the correct answer.

- ☐ A. निश्चयवाची
 ☐ B. संबंधवाची
☐ C. क्रियाविशेषणवाची
 ☐ D. संज्ञावाची

— END OF QUESTION PAPER —

Answer Key

No	Question Type	QID	Correct Answer
Question - 1	Multiple Choice (Radiobutton)	11412	D
Question - 2	Multiple Choice (Radiobutton)	11413	B
Question - 3	Multiple Choice (Radiobutton)	11408	A
Question - 4	Multiple Choice (Radiobutton)	11409	C
Question - 5	Multiple Choice (Radiobutton)	11410	C
Question - 6	Multiple Choice (Radiobutton)	11411	C
Question - 7	Multiple Choice (Radiobutton)	11414	C
Question - 8	Multiple Choice (Radiobutton)	11415	C
Question - 9	Multiple Choice (Radiobutton)	11416	D
Question - 10	Multiple Choice (Radiobutton)	11417	C
Question - 11	Multiple Choice (Radiobutton)	11418	A
Question - 12	Multiple Choice (Radiobutton)	11419	C
Question - 13	Multiple Choice (Radiobutton)	11420	D
Question - 14	Multiple Choice (Radiobutton)	11421	B
Question - 15	Multiple Choice (Radiobutton)	11422	D
Question - 16	Multiple Choice (Radiobutton)	11423	D
Question - 17	Multiple Choice (Radiobutton)	11424	C
Question - 18	Multiple Choice (Radiobutton)	11425	C
Question - 19	Multiple Choice (Radiobutton)	11426	C
Question - 20	Multiple Choice (Radiobutton)	11427	A
Question - 21	Multiple Choice (Radiobutton)	11428	D
Question - 22	Multiple Choice (Radiobutton)	11429	C
Question - 23	Multiple Choice (Radiobutton)	11430	C
Question - 24	Multiple Choice (Radiobutton)	11431	A
Question - 25	Multiple Choice (Radiobutton)	11432	D
Question - 26	Multiple Choice (Radiobutton)	11433	A
Question - 27	Multiple Choice (Radiobutton)	11434	B
Question - 28	Multiple Choice (Radiobutton)	11435	B
Question - 29	Multiple Choice (Radiobutton)	11436	B
Question - 30	Multiple Choice (Radiobutton)	11437	C
Question - 31	Multiple Choice (Radiobutton)	11438	B
Question - 32	Multiple Choice (Radiobutton)	11439	A
Question - 33	Multiple Choice (Radiobutton)	11440	C
Question - 34	Multiple Choice (Radiobutton)	11441	D
Question - 35	Multiple Choice (Radiobutton)	11442	C
Question - 36	Multiple Choice (Radiobutton)	11443	B
Question - 37	Multiple Choice (Radiobutton)	11444	A
Question - 38	Multiple Choice (Radiobutton)	11445	B
Question - 39	Multiple Choice (Radiobutton)	11446	C
Question - 40	Multiple Choice (Radiobutton)	11447	A
Question - 41	Multiple Choice (Radiobutton)	11398	A
Question - 42	Multiple Choice (Radiobutton)	11399	D

No	Question Type	QID	Correct Answer
Question - 43	Multiple Choice (Radiobutton)	11400	D
Question - 44	Multiple Choice (Radiobutton)	11401	C
Question - 45	Multiple Choice (Radiobutton)	11402	B
Question - 46	Multiple Choice (Radiobutton)	11403	C
Question - 47	Multiple Choice (Radiobutton)	11404	C
Question - 48	Multiple Choice (Radiobutton)	11405	D
Question - 49	Multiple Choice (Radiobutton)	11406	C
Question - 50	Multiple Choice (Radiobutton)	11407	B
Question - 51	Multiple Choice (Radiobutton)	11448	B
Question - 52	Multiple Choice (Radiobutton)	11449	A
Question - 53	Multiple Choice (Radiobutton)	11450	D
Question - 54	Multiple Choice (Radiobutton)	11451	B
Question - 55	Multiple Choice (Radiobutton)	11452	A
Question - 56	Multiple Choice (Radiobutton)	11453	D
Question - 57	Multiple Choice (Radiobutton)	11454	C
Question - 58	Multiple Choice (Radiobutton)	11455	C
Question - 59	Multiple Choice (Radiobutton)	11456	C
Question - 60	Multiple Choice (Radiobutton)	11457	B
Question - 61	Multiple Choice (Radiobutton)	11458	C
Question - 62	Multiple Choice (Radiobutton)	11459	D
Question - 63	Multiple Choice (Radiobutton)	11460	B
Question - 64	Multiple Choice (Radiobutton)	11461	B
Question - 65	Multiple Choice (Radiobutton)	11462	C
Question - 66	Multiple Choice (Radiobutton)	11463	C
Question - 67	Multiple Choice (Radiobutton)	11464	A
Question - 68	Multiple Choice (Radiobutton)	11465	A
Question - 69	Multiple Choice (Radiobutton)	11466	C
Question - 70	Multiple Choice (Radiobutton)	11467	D
Question - 71	Multiple Choice (Radiobutton)	11468	B
Question - 72	Multiple Choice (Radiobutton)	11469	D
Question - 73	Multiple Choice (Radiobutton)	11470	D
Question - 74	Multiple Choice (Radiobutton)	11471	D
Question - 75	Multiple Choice (Radiobutton)	11472	D
Question - 76	Multiple Choice (Radiobutton)	11473	B
Question - 77	Multiple Choice (Radiobutton)	11474	D
Question - 78	Multiple Choice (Radiobutton)	11475	A
Question - 79	Multiple Choice (Radiobutton)	11476	D
Question - 80	Multiple Choice (Radiobutton)	11477	D
Question - 81	Multiple Choice (Radiobutton)	11478	C
Question - 82	Multiple Choice (Radiobutton)	11479	C
Question - 83	Multiple Choice (Radiobutton)	11480	B
Question - 84	Multiple Choice (Radiobutton)	11481	D
Question - 85	Multiple Choice (Radiobutton)	11482	B
Question - 86	Multiple Choice (Radiobutton)	11483	B
Question - 87	Multiple Choice (Radiobutton)	11484	B
Question - 88	Multiple Choice (Radiobutton)	11485	B

No	Question Type	QID	Correct Answer	
Question - 89	Multiple Choice (Radiobutton)	11486	D	
Question - 90	Multiple Choice (Radiobutton)	11487	D	
Question - 91	Multiple Choice (Radiobutton)	11488	C	
Question - 92	Multiple Choice (Radiobutton)	11489	B	
Question - 93	Multiple Choice (Radiobutton)	11490	C	
Question - 94	Multiple Choice (Radiobutton)	11491	D	
Question - 95	Multiple Choice (Radiobutton)	11492	A	
Question - 96	Multiple Choice (Radiobutton)	11493	A	
Question - 97	Multiple Choice (Radiobutton)	11494	B	
Question - 98	Multiple Choice (Radiobutton)	11495	D	
Question - 99	Multiple Choice (Radiobutton)	11496	C	
Question - 100	Multiple Choice (Radiobutton)	11497	C	
Question - 101	Multiple Choice (Radiobutton)	11498	A	
Question - 102	Multiple Choice (Radiobutton)	11499	C	
Question - 103	Multiple Choice (Radiobutton)	11500	B	
Question - 104	Multiple Choice (Radiobutton)	11501	C	
Question - 105	Multiple Choice (Radiobutton)	11502	B	
Question - 106	Multiple Choice (Radiobutton)	11503	D	
Question - 107	Multiple Choice (Radiobutton)	11504	B	
Question - 108	Multiple Choice (Radiobutton)	11505	A	
Question - 109	Multiple Choice (Radiobutton)	11506	B	
Question - 110	Multiple Choice (Radiobutton)	11507	B	
Question - 111	Multiple Choice (Radiobutton)	11508	C	
Question - 112	Multiple Choice (Radiobutton)	11509	D	
Question - 113	Multiple Choice (Radiobutton)	11510	B	
Question - 114	Multiple Choice (Radiobutton)	11511	A	
Question - 115	Multiple Choice (Radiobutton)	11512	A	
Question - 116	Multiple Choice (Radiobutton)	11513	D	
Question - 117	Multiple Choice (Radiobutton)	11514	B	
Question - 118	Multiple Choice (Radiobutton)	11515	D	
Question - 119	Multiple Choice (Radiobutton)	11516	B	
Question - 120	Multiple Choice (Radiobutton)	11517	A	
Question - 121	Multiple Choice (Radiobutton)	11518	A	
Question - 122	Multiple Choice (Radiobutton)	11519	C	
Question - 123	Multiple Choice (Radiobutton)	11520	B	
Question - 124	Multiple Choice (Radiobutton)	11521	A	
Question - 125	Multiple Choice (Radiobutton)	11522	D	
Question - 126	Multiple Choice (Radiobutton)	11593	C	
Question - 127	Multiple Choice (Radiobutton)	11594	A	
Question - 128	Multiple Choice (Radiobutton)	11595	B	
Question - 129	Multiple Choice (Radiobutton)	11596	B	
Question - 130	Multiple Choice (Radiobutton)	11597	C	
Question - 131	Multiple Choice (Radiobutton)	11526	C	
Question - 132	Multiple Choice (Radiobutton)	11527	C	
Question - 133	Multiple Choice (Radiobutton)	11528	B	
Question - 134	Multiple Choice (Radiobutton)	11529	C	
Question - 135	Multiple Choice (Radiobutton)	11530	D	

No	Question Type	QID	Correct Answer
Question - 136	Multiple Choice (Radiobutton)	11531	A
Question - 137	Multiple Choice (Radiobutton)	11532	C
Question - 138	Multiple Choice (Radiobutton)	11533	A
Question - 139	Multiple Choice (Radiobutton)	11534	D
Question - 140	Multiple Choice (Radiobutton)	11535	B
Question - 141	Multiple Choice (Radiobutton)	11536	C
Question - 142	Multiple Choice (Radiobutton)	11545	D
Question - 143	Multiple Choice (Radiobutton)	11546	A
Question - 144	Multiple Choice (Radiobutton)	11547	D
Question - 145	Multiple Choice (Radiobutton)	11548	D
Question - 146	Multiple Choice (Radiobutton)	11549	B
Question - 147	Multiple Choice (Radiobutton)	11550	B
Question - 148	Multiple Choice (Radiobutton)	11551	C
Question - 149	Multiple Choice (Radiobutton)	11552	A
Question - 150	Multiple Choice (Radiobutton)	11553	C
Question - 151	Multiple Choice (Radiobutton)	11554	C
Question - 152	Multiple Choice (Radiobutton)	11555	C
Question - 153	Multiple Choice (Radiobutton)	11556	D
Question - 154	Multiple Choice (Radiobutton)	11557	A
Question - 155	Multiple Choice (Radiobutton)	11558	C
Question - 156	Multiple Choice (Radiobutton)	11559	A
Question - 157	Multiple Choice (Radiobutton)	11560	B
Question - 158	Multiple Choice (Radiobutton)	11561	A
Question - 159	Multiple Choice (Radiobutton)	11562	B
Question - 160	Multiple Choice (Radiobutton)	11563	C
Question - 161	Multiple Choice (Radiobutton)	11564	A
Question - 162	Multiple Choice (Radiobutton)	11565	B
Question - 163	Multiple Choice (Radiobutton)	11566	B
Question - 164	Multiple Choice (Radiobutton)	11567	C
Question - 165	Multiple Choice (Radiobutton)	11568	B
Question - 166	Multiple Choice (Radiobutton)	11571	A
Question - 167	Multiple Choice (Radiobutton)	11572	C
Question - 168	Multiple Choice (Radiobutton)	11569	A
Question - 169	Multiple Choice (Radiobutton)	11570	B
Question - 170	Multiple Choice (Radiobutton)	11523	C
Question - 171	Multiple Choice (Radiobutton)	11537	A
Question - 172	Multiple Choice (Radiobutton)	11538	A
Question - 173	Multiple Choice (Radiobutton)	11539	C
Question - 174	Multiple Choice (Radiobutton)	11540	B
Question - 175	Multiple Choice (Radiobutton)	11524	B
Question - 176	Multiple Choice (Radiobutton)	11525	B
Question - 177	Multiple Choice (Radiobutton)	11541	C
Question - 178	Multiple Choice (Radiobutton)	11542	A
Question - 179	Multiple Choice (Radiobutton)	11543	B
Question - 180	Multiple Choice (Radiobutton)	11544	B
Question - 181	Multiple Choice (Radiobutton)	11573	B

No	Question Type	QID	Correct Answer
Question - 182	Multiple Choice (Radiobutton)	11574	B
Question - 183	Multiple Choice (Radiobutton)	11575	A
Question - 184	Multiple Choice (Radiobutton)	11576	B
Question - 185	Multiple Choice (Radiobutton)	11577	D
Question - 186	Multiple Choice (Radiobutton)	11578	D
Question - 187	Multiple Choice (Radiobutton)	11579	C
Question - 188	Multiple Choice (Radiobutton)	11580	A
Question - 189	Multiple Choice (Radiobutton)	11581	B
Question - 190	Multiple Choice (Radiobutton)	11582	A
Question - 191	Multiple Choice (Radiobutton)	11583	C
Question - 192	Multiple Choice (Radiobutton)	11584	C
Question - 193	Multiple Choice (Radiobutton)	11585	A
Question - 194	Multiple Choice (Radiobutton)	11586	C
Question - 195	Multiple Choice (Radiobutton)	11587	C
Question - 196	Multiple Choice (Radiobutton)	11588	B
Question - 197	Multiple Choice (Radiobutton)	11589	A
Question - 198	Multiple Choice (Radiobutton)	11590	B
Question - 199	Multiple Choice (Radiobutton)	11591	A
Question - 200	Multiple Choice (Radiobutton)	11592	C

--- END OF ANSWER KEY ---