



# Studybox Doon

RMS Mock Test 2 (6th)

Exam ID: 213

Name: \_\_\_\_\_

Date: \_\_\_\_\_

## Exam Instructions

1. The timer has been set for the exam, and a countdown will display the remaining time. When the timer runs out, the exam will end automatically. No further action will be required after that.
2. You can flag any question that you want.
3. If you don't want to submit any of your provided answers, you can clear them.
4. If you choose to drop this exam, it will not be submitted, and no result will be generated.
5. Once you finish the exam, you cannot resume it.

### Question: 1 of 200

QID: 11198

Marks: 1

Three bells ring at intervals of 15s, 27s, and 36s respectively. They started ringing simultaneously at 9:00 am. What will be the next time when they all ring simultaneously?

Please mark (✓) for the correct answer.

- ☐ A. 9:09 am ☐ B. 9:29 am
- ☐ C. 9:59 am ☐ D. 9:19 am

### Question: 2 of 200

QID: 11199

Marks: 1

20 kg is 4% of how many kgs?

Please mark (✓) for the correct answer.

- ☐ A. 400 kg ☐ B. 500 kg
- ☐ C. 800 kg ☐ D. 200 kg

### Question: 3 of 200

QID: 11200

Marks: 1

Five digits largest number to be formed with the help of 6, 4, 3, 9, and 7 is

Please mark (✓) for the correct answer.

- ☐ A. 97643 ☐ B. 97463
- ☐ C. 97436 ☐ D. 97634

If  $\frac{a}{4} = \frac{b}{5} = \frac{c}{7}$ , then  $\frac{a+b+c}{a} = ?$

Please mark (✓) for the correct answer.

- ☐ A. 2
- ☐ B. 3
- ☐ C. 4
- ☐ D. 7

Question: 5 of 200

QID: 11210

Marks: 1

If ₹750 is divided between A and B in the respective ratio of 13:12, what is A's share?

Please mark (✓) for the correct answer.

- ☐ A. ₹360
- ☐ B. ₹370
- ☐ C. ₹380
- ☐ D. ₹390

Question: 6 of 200

QID: 11201

Marks: 1

Following graph represents the number of insects eaten by a bird in 4 days of a week:

Monday	• • • • •
Tuesday	• • •
Wednesday	• • • •
Thursday	• • • • • •

If a bird ate 60 insects on Monday, then how many insects were eaten by the bird on Thursday?

Please mark (✓) for the correct answer.

- ☐ A. 48
- ☐ B. 60
- ☐ C. 72
- ☐ D. 36

Question: 7 of 200

QID: 11202

Marks: 1

Next term of the sequence 4, 12, 8, 9, 12, 6, ..... is

Please mark (✓) for the correct answer.

- ☐ A. 15
- ☐ B. 6
- ☐ C. 16
- ☐ D. 18

**Question: 8 of 200**

QID: 11203

Marks: 1

40% of one number is equal to three-fourths of another number. What is the ratio between the first number and second number?

Please mark (✓) for the correct answer.

- ☐ A. 15 : 16
- ☐ B. 15 : 8
- ☐ C. 9 : 15
- ☐ D. 8 : 17

**Question: 9 of 200**

QID: 11204

Marks: 1

Find the prime numbers between 1 and 15:

Please mark (✓) for the correct answer.

- ☐ A. 5
- ☐ B. 6
- ☐ C. 7
- ☐ D. 8

**Question: 10 of 200**

QID: 11205

Marks: 1

Find the average of the following set of scores:  
345, 231, 777, 560, 892, 443, and 546.

Please mark (✓) for the correct answer.

- ☐ A. 545
- ☐ B. 540
- ☐ C. 542
- ☐ D. 548

**Question: 11 of 200**

QID: 11206

Marks: 1

What is  $786 \times 964$ ?

Please mark (✓) for the correct answer.

- ☐ A. 759276
- ☐ B. 749844
- ☐ C. 75416
- ☐ D. 757704.

**Question: 12 of 200**

QID: 11207

Marks: 1

If  $(46)^2$  is subtracted from the square of a number, the answer so obtained is 485. What is the number?

Please mark (✓) for the correct answer.

- ☐ A. 49
- ☐ B. 51
- ☐ C. 56
- ☐ D. 53

**Question: 13 of 200**

QID: 11208

Marks: 1

If  $0.75:x::5:8$ , the value of  $x$  is

Please mark (✓) for the correct answer.

- ☐ A. 2                      ☐ B. 1.2
- ☐ C. 1.25                  ☐ D. 1.4

**Question: 14 of 200**

QID: 11212

Marks: 1

$\frac{21}{5}$  of an ordinary year = ..... weeks

Please mark (✓) for the correct answer.

- ☐ A. 119                      ☐ B. 219
- ☐ C. 125                      ☐ D. 220

**Question: 15 of 200**

QID: 11213

Marks: 1

A car is running at the speed of 108 km/h. What distance will it cover in 20 seconds?

Please mark (✓) for the correct answer.

- ☐ A. 600 m                      ☐ B. 625 m
- ☐ C. 6 km                        ☐ D. 800 m

**Question: 16 of 200**

QID: 11214

Marks: 1

The middle terms of proportion are called:

Please mark (✓) for the correct answer.

- ☐ A. means                      ☐ B. extremes
- ☐ C. antecedents              ☐ D. consequents

**Question: 17 of 200**

QID: 11215

Marks: 1

A bus travels 105 km in 5 hours. The distance that can be travelled by the bus in 10 hours is:

Please mark (✓) for the correct answer.

- ☐ A. 220 km                      ☐ B. 210 km
- ☐ C. 201 km                      ☐ D. 200 km

**Question: 18 of 200**

QID: 11216

Marks: 1

In  $8(4b-2)+0=16$ , the value of b is:

Please mark (✓) for the correct answer.

- ☐ A. 0 ☐ B. 2
- ☐ C.  $\frac{1}{2}$  ☐ D. 1

**Question: 19 of 200**

QID: 11217

Marks: 1

$\frac{2}{3}x + 4 = 14$   
In  $\frac{2}{3}x + 4 = 14$  the value of 'x' is

Please mark (✓) for the correct answer.

- ☐ A. -15 ☐ B. -30
- ☐ C. +15 ☐ D. +30

**Question: 20 of 200**

QID: 11218

Marks: 1

$169^\circ$  is an example of

Please mark (✓) for the correct answer.

- ☐ A. right ☐ B. obtuse
- ☐ C. acute ☐ D. straight

**Question: 21 of 200**

QID: 11219

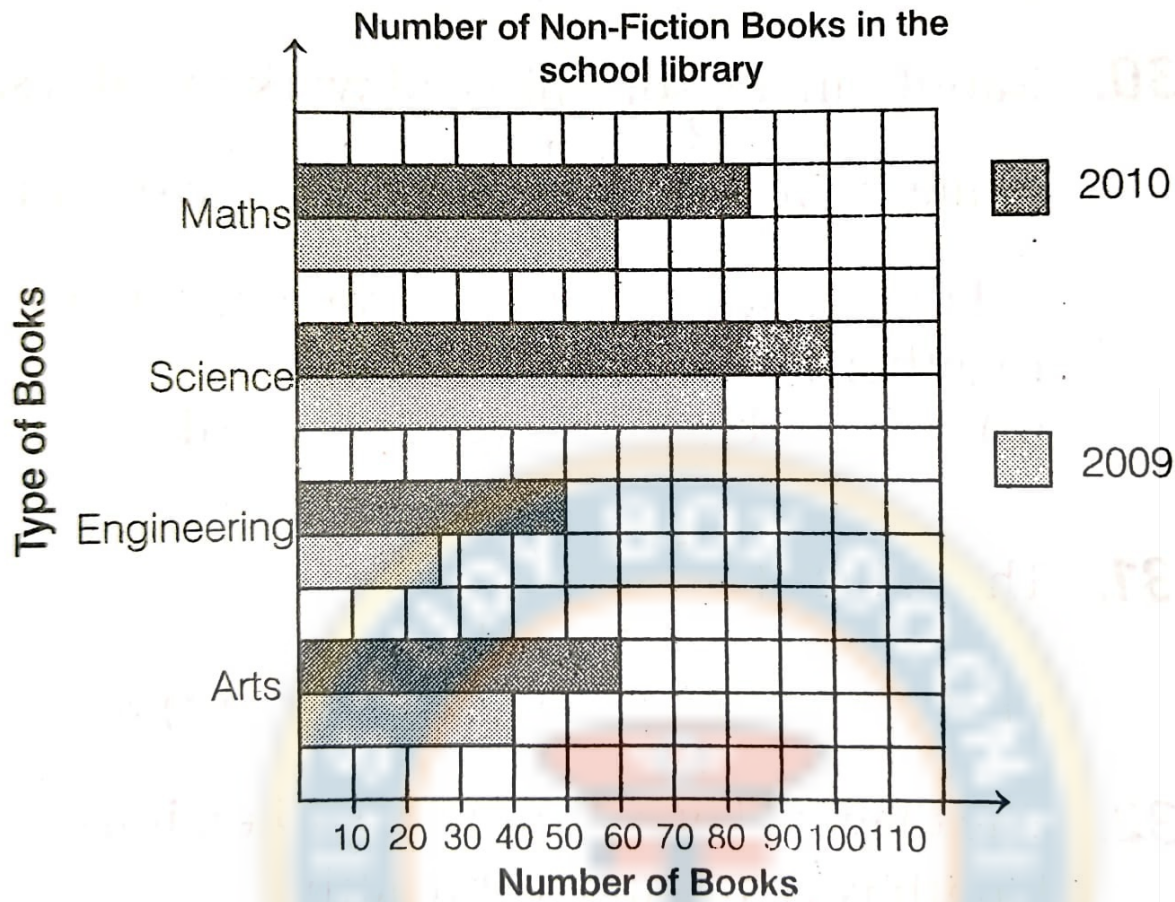
Marks: 1

A number is always divisible by 25 only if

Please mark (✓) for the correct answer.

- ☐ A. The last digit of the number is 0. ☐ B. The last digit of the number is 5.
- ☐ C. The last two digits of the number is divisible by 5. ☐ D. The last two digits of the number is divisible by 25.

The bar chart given shows the number of non-fiction books in a school library for the year 2009 and 2010.



What was the total number of non-fiction books in the year 2009 and 2010?

Please mark (✓) for the correct answer.

- ☐ A. 500
 ☐ B. 205
 ☐ C. 295
 ☐ D. 495

The sum of two numbers is 12 and their product is 36. What is the sum of the reciprocals of these numbers?

Please mark (✓) for the correct answer.

- ☐ A.  $\frac{1}{4}$ 
☐ B.  $\frac{1}{3}$ 
☐ C.  $\frac{1}{6}$ 
☐ D.  $\frac{1}{2}$



**Question: 24 of 200**

QID: 11222

Marks: 1

Find the least number which is exactly divisible by 2,3,5,7 and 11?

Please mark (✓) for the correct answer.

☐ A. 2210☐ B. 2301☐ C. 2310☐ D. 2510**Question: 25 of 200**

QID: 11223

Marks: 1

The LCM of  $\frac{1}{3}$ ,  $\frac{5}{6}$ ,  $\frac{2}{9}$ , and  $\frac{4}{27}$  is

Please mark (✓) for the correct answer.

☐ A.  $\frac{1}{27}$ ☐ B.  $\frac{10}{27}$ ☐ C.  $\frac{10}{3}$ ☐ D.  $\frac{20}{3}$ **Question: 26 of 200**

QID: 11224

Marks: 1

What will come in place of question mark (?) in the following question?  
 $54.\text{?}3 + 543 + 5.43 = 603.26$

Please mark (✓) for the correct answer.

☐ A. 8☐ B. 6☐ C. 7☐ D. 9**Question: 27 of 200**

QID: 11237

Marks: 1

How many cubes of 2 cm long can be made from cuboid 10 cm long, 8 cm wide and 5 cm high?

Please mark (✓) for the correct answer.

☐ A. 40☐ B. 30☐ C. 50☐ D. 80**Question: 28 of 200**

QID: 11238

Marks: 1

Population of a city is 80000, there are 80% males in the city, calculate the number of females in the city.

Please mark (✓) for the correct answer.

☐ A. 17000☐ B. 15000☐ C. 14000☐ D. 16000

## Question: 29 of 200

QID: 11239

Marks: 1

What is the difference between  $60\frac{10}{4}\%$  of 440 and 55% of 400?

Please mark (✓) for the correct answer.

- ☐ A. 55 ☐ B. 45  
☐ C. 44 ☐ D. 42

## Question: 30 of 200

QID: 11225

Marks: 1

Simplify  $\left[ \frac{13}{24} \div \left\{ 1\frac{1}{4} - \frac{1}{2} \left( 2\frac{1}{2} - \frac{1}{4} - \frac{1}{6} \right) \right\} \right]$

Please mark (✓) for the correct answer.

- ☐ A. 2 ☐ B. 1  
☐ C. 13 ☐ D.  $\frac{5}{13}$

## Question: 31 of 200

QID: 11226

Marks: 1

A shopkeeper buys 5 chairs for ₹2890 and later sells them for ₹3805. How much profit does the shopkeeper make per chair?

Please mark (✓) for the correct answer.

- ☐ A. ₹183 ☐ B. ₹228  
☐ C. ₹215 ☐ D. ₹222

## Question: 32 of 200

QID: 11227

Marks: 1

Rahul can do  $\frac{1}{2}$  of a piece of work in 6 days, while Rohit can do  $\frac{1}{4}$  of the same work in 3 days. In how many days can both do it together?

Please mark (✓) for the correct answer.

- ☐ A. 6 ☐ B. 5  
☐ C. 4 ☐ D. 7

## Question: 33 of 200

QID: 11228

Marks: 1

The value of  $\frac{\sqrt{81} + \sqrt{729}}{\sqrt{144} - \sqrt{36}}$

Please mark (✓) for the correct answer.

- ☐ A. 4 ☐ B. 5  
☐ C. 8 ☐ D. 6



## Question: 34 of 200

QID: 11229

Marks: 1

The diagonal of a rectangle is 15 m, if its length is 12 m, find its breadth.

Please mark (✓) for the correct answer.

- ☐ A. 9 m ☐ B. 10 m
- ☐ C. 11 m ☐ D. 8 m

## Question: 35 of 200

QID: 11230

Marks: 1

How many bottles filled with a capacity of 200 mL can be filled from a pot which contains  $3m^3$  oil?

Please mark (✓) for the correct answer.

- ☐ A. 1500 ☐ B. 150000
- ☐ C. 15000 ☐ D. 150

## Question: 36 of 200

QID: 11231

Marks: 1

A train is running at a uniform speed of 60 km/h. How much time does it take to cover a distance of 300 km?

Please mark (✓) for the correct answer.

- ☐ A. 5 h ☐ B. 4.5 h
- ☐ C. 6 h ☐ D. 7 h

## Question: 37 of 200

QID: 11232

Marks: 1

For a shirt, cloth required must be 2 m 35 cm. Then, how much cloth would be taken to have such 9 shirts?

Please mark (✓) for the correct answer.

- ☐ A. 21m 65cm ☐ B. 20m 85cm
- ☐ C. 21m 15cm ☐ D. 22m 25cm

## Question: 38 of 200

QID: 11233

Marks: 1

Simplify:  $125 \times \frac{3}{5} + 756 \div 14 - 128 \times 3 + 15$

Please mark (✓) for the correct answer.

- ☐ A. 240 ☐ B. -240
- ☐ C. 210 ☐ D. -210

## Question: 39 of 200

QID: 11234

Marks: 1

If  $a:b=3:4$ , and  $b:c=7:5$ , then find  $a:b:c$

Please mark (✓) for the correct answer.

- ☐ A. 7:9:11 ☐ B. 21:13:8
- ☐ C. 12:15:20 ☐ D. 21:28:20

## Question: 40 of 200

QID: 11235

Marks: 1

The sum of the greatest and smallest number of five digits is

Please mark (✓) for the correct answer.

- ☐ A. 100999 ☐ B. 109999
- ☐ C. 109099 ☐ D. 199909

## Question: 41 of 200

QID: 11236

Marks: 1

Circumference of a circle is 44 cm. Find its diameter.

Please mark (✓) for the correct answer.

- ☐ A. 7 cm ☐ B. 3.5 cm
- ☐ C. 14 cm ☐ D. 21 cm

## Question: 42 of 200

QID: 11240

Marks: 1

A bag contains  $68\frac{4}{7}$  kg of salt. How much salt do such 20 bags contain?

Please mark (✓) for the correct answer.

- ☐ A.  $1371\frac{3}{7}kg$  ☐ B.  $1171\frac{2}{7}kg$
- ☐ C.  $1559\frac{5}{9}kg$  ☐ D.  $111\frac{2}{3}kg$

## Question: 43 of 200

QID: 11241

Marks: 1

A tank is 7 m long, 5 m wide and 2 m high. How much water can it hold?

Please mark (✓) for the correct answer.

- ☐ A. 80 m<sup>3</sup> ☐ B. 11 m<sup>3</sup>
- ☐ C. 70 m<sup>3</sup> ☐ D. 79 m<sup>3</sup>

**Question: 44 of 200**

QID: 11242

Marks: 1

Find the simple interest on an amount of ₹1500 for 6 yr, at 8% p.a.

Please mark (✓) for the correct answer.

☐ A. ₹720☐ B. ₹820☐ C. ₹620☐ D. ₹520**Question: 45 of 200**

QID: 11243

Marks: 1

Simplify  $0.099 \div 9 - 0.007 + 7$ .

Please mark (✓) for the correct answer.

☐ A. 0.001☐ B. 0.09☐ C. 0.03☐ D. 0.01**Question: 46 of 200**

QID: 11244

Marks: 1

10 men and 8 women together can do a certain work in 45 days. In how many days will 15 men and 12 women together do the same work?

Please mark (✓) for the correct answer.

☐ A. 25☐ B. 30☐ C. 35☐ D. 28**Question: 47 of 200**

QID: 11245

Marks: 1

The sum which becomes ₹3200 at the rate of 15% p.a. simple interest in 4 yr, is

Please mark (✓) for the correct answer.

☐ A. ₹2500☐ B. ₹2700☐ C. ₹2000☐ D. ₹2200**Question: 48 of 200**

QID: 11246

Marks: 1

$3795 \times 37.3 + 3795 \times 112.5 - 3795 \times 49.8 = ?$

Please mark (✓) for the correct answer.

☐ A. 397500☐ B. 397585☐ C. 3795.49☐ D. 379500

**Question: 49 of 200**

QID: 11247

Marks: 1

The largest 5-digit number exactly divisible by 91 is

Please mark (✓) for the correct answer.

- ☐ A. 99918 ☐ B. 99981  
☐ C. 99928 ☐ D. 99982

**Question: 50 of 200**

QID: 11211

Marks: 1

Ram can do a certain work in 20 days while Ram and Mohan together can do it in 12 days. In how many days will Mohan alone do the same work?

Please mark (✓) for the correct answer.

- ☐ A. 30 ☐ B. 25  
☐ C. 20 ☐ D. 18

**Question: 51 of 200**

QID: 11264

Marks: 1

Mark the option with the correct spelling of the given words.

Please mark (✓) for the correct answer.

- ☐ A. Maegistrate ☐ B. Magistrate  
☐ C. Magastrate ☐ D. Magistrite

**Question: 52 of 200**

QID: 11265

Marks: 1

Rearrange the following words/group of words to make meaningful sentences. Choose the correct sequence given in the options.

information on (A)/ internet is (B)/ any topic (C)/ a source of (D).

Please mark (✓) for the correct answer.

- ☐ A. ABCD ☐ B. DCBA  
☐ C. BDAC ☐ D. CBDA

**Question: 53 of 200**

QID: 11269

Marks: 1

A fleet of ships or .....

Please mark (✓) for the correct answer.

- ☐ A. Vehicles ☐ B. Lions  
☐ C. Monkeys ☐ D. Aeroplanes

His friend ..... his food.

Please mark (✓) for the correct answer.

- ☐ A. could eat
- ☐ B. eating
- ☐ C. eaten
- ☐ D. eat

Read the following passage and answer the questions that follow.

Martin the monkey lives in an oak tree at Cragmore Park in Bananaville. He works for the banana telephone company. He is the best employee they have because he can climb the telephone poles twice as fast as everyone else. On Saturdays, Martin pitches for the Cragmore Craters Baseball team. The Craters are a semiprofessional team. Martin has become extremely famous for what he calls his "Primate Pitch". The "Primate Pitch" is thrown straight up. The pitch then comes straight down and travels directly over home plate. The pitch travels at over one hundred miles per hour. On Wednesday nights, Martin takes painting lessons with Sarah Able. She is a famous oil painter who lives in the same town as Martin. Martin is one of the only artists in the area that paints with his tail.

Where does Martin work?

Please mark (✓) for the correct answer.

- ☐ A. The banana factory
- ☐ B. The paint factory
- ☐ C. The telephone company
- ☐ D. The oil company

Read the following passage and answer the questions that follow.

Martin the monkey lives in an oak tree at Cragmore Park in Bananaville. He works for the banana telephone company. He is the best employee they have because he can climb the telephone poles twice as fast as everyone else. On Saturdays, Martin pitches for the Cragmore Craters Baseball team. The Craters are a semiprofessional team. Martin has become extremely famous for what he calls his "Primate Pitch". The "Primate Pitch" is thrown straight up. The pitch then comes straight down and travels directly over home plate. The pitch travels at over one hundred miles per hour. On Wednesday nights, Martin takes painting lessons with Sarah Able. She is a famous oil painter who lives in the same town as Martin. Martin is one of the only artists in the area that paints with his tail.

What semiprofessional baseball team does Martin play for?

Please mark (✓) for the correct answer.

- ☐ A. Craters
- ☐ B. Cardinals
- ☐ C. Drains
- ☐ D. Drabs

Read the following passage and answer the questions that follow.

Martin the monkey lives in an oak tree at Cragmore Park in Bananaville. He works for the banana telephone company. He is the best employee they have because he can climb the telephone poles twice as fast as everyone else. On Saturdays, Martin pitches for the Cragmore Craters Baseball team. The Craters are a semiprofessional team. Martin has become extremely famous for what he calls his "Primate Pitch". The "Primate Pitch" is thrown straight up. The pitch then comes straight down and travels directly over home plate. The pitch travels at over one hundred miles per hour. On Wednesday nights, Martin takes painting lessons with Sarah Able. She is a famous oil painter who lives in the same town as Martin. Martin is one of the only artists in the area that paints with his tail.

What position does Martin play on his baseball team?

Please mark (✓) for the correct answer.

- ☐ A. Catcher ☐ B. Outfield  
☐ C. Second base ☐ D. Pitcher

## Question: 58 of 200

QID: 11283

Marks: 1

He is ..... brother.

Please mark (✓) for the correct answer.

- ☐ A. she ☐ B. it  
☐ C. they ☐ D. her

## Question: 59 of 200

QID: 11284

Marks: 1

She ..... my wife.

Please mark (✓) for the correct answer.

- ☐ A. were ☐ B. is  
☐ C. has ☐ D. had

## Question: 60 of 200

QID: 11285

Marks: 1

The queen ..... on the floor.

Please mark (✓) for the correct answer.

- ☐ A. sit ☐ B. sat  
☐ C. sitting ☐ D. sits



He is the captain of ..... team.

Please mark (✓) for the correct answer.

- ☐ A. you ☐ B. our  
☐ C. they ☐ D. we

The price of this car is ..... high.

Please mark (✓) for the correct answer.

- ☐ A. very ☐ B. too  
☐ C. to ☐ D. any

Sita always ..... school late.

Please mark (✓) for the correct answer.

- ☐ A. come ☐ B. came  
☐ C. comes ☐ D. coming

This house is very .....

Please mark (✓) for the correct answer.

- ☐ A. beautiful ☐ B. more beautiful  
☐ C. most beautiful ☐ D. None of these

..... boys like cricket.

Please mark (✓) for the correct answer.

- ☐ A. Much ☐ B. More  
☐ C. Most ☐ D. Any

Shankar is a ..... student.

Please mark (✓) for the correct answer.

- ☐ A. bright ☐ B. brighter  
☐ C. brightest ☐ D. more bright

The teacher called his name but he ..... silent.

Please mark (✓) for the correct answer.

- ☐ A. keep ☐ B. kept  
☐ C. keeps ☐ D. keeping

My brother has ..... me a gift.

Please mark (✓) for the correct answer.

- ☐ A. send ☐ B. sends  
☐ C. sent ☐ D. sending

He was ..... honest king.

Please mark (✓) for the correct answer.

- ☐ A. a ☐ B. an  
☐ C. the ☐ D. No article

The sound was ..... loud.

Please mark (✓) for the correct answer.

- ☐ A. very ☐ B. many  
☐ C. more ☐ D. None of these

**Question: 71 of 200**

QID: 11296

Marks: 1

..... Sun has set.

Please mark (✓) for the correct answer.

- |                              |                                     |
|------------------------------|-------------------------------------|
| <input type="radio"/> A. A   | <input type="radio"/> B. An         |
| <input type="radio"/> C. The | <input type="radio"/> D. No article |

**Question: 72 of 200**

QID: 11297

Marks: 1

..... Mahesh read the book?

Please mark (✓) for the correct answer.

- |                              |                                       |
|------------------------------|---------------------------------------|
| <input type="radio"/> A. Did | <input type="radio"/> B. Will         |
| <input type="radio"/> C. Has | <input type="radio"/> D. All of these |

**Question: 73 of 200**

QID: 11266

Marks: 1

Rearrange the following words/group of words to make meaningful sentences. Choose the correct sequence given in the options.

English (A)/ Rashmi (B)/ fluently (C)/ speaks (D).

Please mark (✓) for the correct answer.

- |                               |                               |
|-------------------------------|-------------------------------|
| <input type="radio"/> A. BDAC | <input type="radio"/> B. ACBD |
| <input type="radio"/> C. ABCD | <input type="radio"/> D. ADCB |

**Question: 74 of 200**

QID: 11267

Marks: 1

Select the word from the options for the given definition.

One who eats everything

Please mark (✓) for the correct answer.

- |                                     |                                      |
|-------------------------------------|--------------------------------------|
| <input type="radio"/> A. Cannibal   | <input type="radio"/> B. Herbivorous |
| <input type="radio"/> C. Omnivorous | <input type="radio"/> D. Carnivorous |

**Question: 75 of 200**

QID: 11268

Marks: 1

Select the word from the options for the given definition.

One who hates marriage

Please mark (✓) for the correct answer.

- |                                      |                                     |
|--------------------------------------|-------------------------------------|
| <input type="radio"/> A. Misogamist  | <input type="radio"/> B. Misogynist |
| <input type="radio"/> C. Misanthrope | <input type="radio"/> D. Priest     |

**Read the passage and answer the questions that follow.**

Savannah and Charlotte worked real hard all summer to prepare for the end of summer picnic. Savannah grew tomatoes and green peppers in her garden. Charlotte lives on a farm and since the spring has been growing corn, lettuce, and grapes. A week before the picnic both girls harvested and packed their produce. They decided that all of their hard work deserved a reward. They charged others for their produce. Savannah charged one dollar for one tomato or green pepper. Charlotte charged one dollar for a head of lettuce, fifty cents for an ear of corn, and five cents for a grape.

**Savannah grew ..... for the end of summer picnic.**

Please mark (✓) for the correct answer.

- ☐ A. tomatoes ☐ B. corn  
☐ C. lettuce ☐ D. apples

**Question: 77 of 200**

QID: 11249

Marks: 1

**Read the passage and answer the questions that follow.**

Savannah and Charlotte worked real hard all summer to prepare for the end of summer picnic. Savannah grew tomatoes and green peppers in her garden. Charlotte lives on a farm and since the spring has been growing corn, lettuce, and grapes. A week before the picnic both girls harvested and packed their produce. They decided that all of their hard work deserved a reward. They charged others for their produce. Savannah charged one dollar for one tomato or green pepper. Charlotte charged one dollar for a head of lettuce, fifty cents for an ear of corn, and five cents for a grape.

**Charlotte grew ..... for the end of summer picnic.**

Please mark (✓) for the correct answer.

- ☐ A. tomatoes ☐ B. corn  
☐ C. lettuce ☐ D. Both 'b' and 'c'

**Question: 78 of 200**

QID: 11250

Marks: 1

**Read the passage and answer the questions that follow.**

Savannah and Charlotte worked real hard all summer to prepare for the end of summer picnic. Savannah grew tomatoes and green peppers in her garden. Charlotte lives on a farm and since the spring has been growing corn, lettuce, and grapes. A week before the picnic both girls harvested and packed their produce. They decided that all of their hard work deserved a reward. They charged others for their produce. Savannah charged one dollar for one tomato or green pepper. Charlotte charged one dollar for a head of lettuce, fifty cents for an ear of corn, and five cents for a grape.

**Where does Charlotte live?**

Please mark (✓) for the correct answer.

- ☐ A. Mattydale ☐ B. On a farm  
☐ C. In the circus ☐ D. On a boat

**Read the passage and answer the questions that follow.**

Savannah and Charlotte worked real hard all summer to prepare for the end of summer picnic. Savannah grew tomatoes and green peppers in her garden. Charlotte lives on a farm and since the spring has been growing corn, lettuce, and grapes. A week before the picnic both girls harvested and packed their produce. They decided that all of their hard work deserved a reward. They charged others for their produce. Savannah charged one dollar for one tomato or green pepper. Charlotte charged one dollar for a head of lettuce, fifty cents for an ear of corn, and five cents for a grape.

**If you were to go to a picnic and purchase 3 tomatoes and 3 ears of corn from the girls, how much would it cost?**

Please mark (✓) for the correct answer.

- ☐ A. \$1.50 ☐ B. \$3.50  
☐ C. \$4.00 ☐ D. \$4.50

## Question: 80 of 200

QID: 11271

Marks: 1

Neither you nor he ..... to blame.

Please mark (✓) for the correct answer.

- ☐ A. are ☐ B. were  
☐ C. have ☐ D. is

## Question: 81 of 200

QID: 11272

Marks: 1

Radha is ..... than Sonal.

Please mark (✓) for the correct answer.

- ☐ A. beautiful ☐ B. more beautiful  
☐ C. very beautiful ☐ D. most beautiful

## Question: 82 of 200

QID: 11252

Marks: 1

**Read the passage and answer the questions that follow.**

Savannah and Charlotte worked real hard all summer to prepare for the end of summer picnic. Savannah grew tomatoes and green peppers in her garden. Charlotte lives on a farm and since the spring has been growing corn, lettuce, and grapes. A week before the picnic both girls harvested and packed their produce. They decided that all of their hard work deserved a reward. They charged others for their produce. Savannah charged one dollar for one tomato or green pepper. Charlotte charged one dollar for a head of lettuce, fifty cents for an ear of corn, and five cents for a grape.

**If you were to go to the picnic and purchase 1 tomato, 1 pepper, 2 ears of corn and 4 grapes from the girls, how much would it cost?**

Please mark (✓) for the correct answer.

- ☐ A. \$2.20 ☐ B. \$2.50  
☐ C. \$3.20 ☐ D. \$3.50

**Question: 83 of 200**

QID: 11253

Marks: 1

**Select the correct meaning of the following sentences.****One who sees the bright side of things**

Please mark (✓) for the correct answer.

- ☐ A. Optimist
- ☐ B. Brightest
- ☐ C. Clonist
- ☐ D. None of these

**Question: 84 of 200**

QID: 11254

Marks: 1

**Select the correct meaning of the following sentences.****One who is hard to please**

Please mark (✓) for the correct answer.

- ☐ A. Hardist
- ☐ B. Fastidious
- ☐ C. Arrogant
- ☐ D. Sober

**Question: 85 of 200**

QID: 11255

Marks: 1

**Select the correct meaning of the following sentences.****Writing about one's own life**

Please mark (✓) for the correct answer.

- ☐ A. Biography
- ☐ B. Drama
- ☐ C. Autobiography
- ☐ D. Memoir

**Question: 86 of 200**

QID: 11256

Marks: 1

**Select the correct meaning of the following sentences.****One who is not married**

Please mark (✓) for the correct answer.

- ☐ A. Boyfriend
- ☐ B. Girlfriend
- ☐ C. Bachelor
- ☐ D. Masculine

**Question: 87 of 200**

QID: 11257

Marks: 1

**Select the correct meaning of the following sentences.****One who sells things door to door**

Please mark (✓) for the correct answer.

- ☐ A. Seller
- ☐ B. Vendor
- ☐ C. Shopkeeper
- ☐ D. Miser



**Question: 88 of 200**

QID: 11258

Marks: 1

Choose the correct tense of the following sentences.  
Why are you crying?

Please mark (✓) for the correct answer.

- ☐ A. Simple Present ☐ B. Present Continuous  
☐ C. Past Continuous ☐ D. Future Continuous

**Question: 89 of 200**

QID: 11259

Marks: 1

Choose the correct tense of the following sentences.  
Hitesh is a good cook.

Please mark (✓) for the correct answer.

- ☐ A. Simple Present ☐ B. Simple Past  
☐ C. Simple Future ☐ D. Present Continuous

**Question: 90 of 200**

QID: 11260

Marks: 1

Choose the correct tense of the following sentences.  
Mayank does not return money to anybody.

Please mark (✓) for the correct answer.

- ☐ A. Past Continuous ☐ B. Simple Future  
☐ C. Present Perfect ☐ D. Simple Present

**Question: 91 of 200**

QID: 11261

Marks: 1

Choose the correct tense of the following sentences.  
The farmer had paid his taxes.

Please mark (✓) for the correct answer.

- ☐ A. Present Perfect ☐ B. Simple Past  
☐ C. Past Perfect ☐ D. Past Perfect Continuous

**Question: 92 of 200**

QID: 11262

Marks: 1

Choose the correct tense of the following sentences.  
Vidya will go to a party.

Please mark (✓) for the correct answer.

- ☐ A. Present Perfect ☐ B. Present Continuous  
☐ C. Future Continuous ☐ D. Simple Future

Mark the option with the correct spelling of the given words.

Please mark (✓) for the correct answer.

- |                                     |                                     |
|-------------------------------------|-------------------------------------|
| <input type="radio"/> A. Centigrede | <input type="radio"/> B. Centregade |
| <input type="radio"/> C. Centigrate | <input type="radio"/> D. Centigrade |

Telep...

Please mark (✓) for the correct answer.

- |                               |                                |
|-------------------------------|--------------------------------|
| <input type="radio"/> A. hone | <input type="radio"/> B. fone  |
| <input type="radio"/> C. hoen | <input type="radio"/> D. honee |

Emplo...

Please mark (✓) for the correct answer.

- |                              |                               |
|------------------------------|-------------------------------|
| <input type="radio"/> A. yie | <input type="radio"/> B. yei  |
| <input type="radio"/> C. yee | <input type="radio"/> D. yeei |

Extre...

Please mark (✓) for the correct answer.

- |                                |                                |
|--------------------------------|--------------------------------|
| <input type="radio"/> A. meley | <input type="radio"/> B. mely  |
| <input type="radio"/> C. mealy | <input type="radio"/> D. meily |

Strai...

Please mark (✓) for the correct answer.

- |                               |                                |
|-------------------------------|--------------------------------|
| <input type="radio"/> A. ght  | <input type="radio"/> B. ghit  |
| <input type="radio"/> C. eght | <input type="radio"/> D. aeght |

Famo...

Please mark (✓) for the correct answer.

- ☐ A. ues ☐ B. uas
- ☐ C. uovs ☐ D. us

Read the following passage and answer the questions that follow.

Martin the monkey lives in an oak tree at Cragmore Park in Bananaville. He works for the banana telephone company. He is the best employee they have because he can climb the telephone poles twice as fast as everyone else. On Saturdays, Martin pitches for the Cragmore Craters Baseball team. The Craters are a semiprofessional team. Martin has become extremely famous for what he calls his "Primate Pitch". The "Primate Pitch" is thrown straight up. The pitch then comes straight down and travels directly over home plate. The pitch travels at over one hundred miles per hour. On Wednesday nights, Martin takes painting lessons with Sarah Able. She is a famous oil painter who lives in the same town as Martin. Martin is one of the only artists in the area that paints with his tail.

In what town does Martin live in?

Please mark (✓) for the correct answer.

- ☐ A. Cragmore ☐ B. Bananaville
- ☐ C. Primate ☐ D. Able

Read the following passage and answer the questions that follow.

Martin the monkey lives in an oak tree at Cragmore Park in Bananaville. He works for the banana telephone company. He is the best employee they have because he can climb the telephone poles twice as fast as everyone else. On Saturdays, Martin pitches for the Cragmore Craters Baseball team. The Craters are a semiprofessional team. Martin has become extremely famous for what he calls his "Primate Pitch". The "Primate Pitch" is thrown straight up. The pitch then comes straight down and travels directly over home plate. The pitch travels at over one hundred miles per hour. On Wednesday nights, Martin takes painting lessons with Sarah Able. She is a famous oil painter who lives in the same town as Martin. Martin is one of the only artists in the area that paints with his tail.

In what town does Sarah Able live in?

Please mark (✓) for the correct answer.

- ☐ A. Cragmore ☐ B. Able
- ☐ C. Bananaville ☐ D. none of the above

Which manmade structure on Earth is visible from the moon?

Please mark (✓) for the correct answer.

- ☐ A. Burj Khalifa building, Dubai ☐ B. Eiffel Tower, Paris
- ☐ C. The Great Wall of China ☐ D. The Great Pyramid of Giza

Match the currency with the country.

Currency	Country
A. Euro	1. Russia
B. Ringgit	2. Brazil
C. Rouble	3. Malaysia
D. Mark	4. Germany

Select correct answer using the code given below:

Please mark (✓) for the correct answer.

- ☐ A. A-2, B-3, C-1, D-4
- ☐ B. A-1, B-2, C-3, D-4
- ☐ C. A-4, B-3, C-1, D-2
- ☐ D. A-1, B-4, C-2, D-3

## Question: 103 of 200

QID: 11300

Marks: 1

Which armies fought the Battle of Hydaspes?

Please mark (✓) for the correct answer.

- ☐ A. Armies of India and Pakistan
- ☐ B. Armies of Alexander the Great and Porus
- ☐ C. Armies of USA and Japan
- ☐ D. Armies of Prithviraj Chauhan and Mohammed Ghori

## Question: 104 of 200

QID: 11301

Marks: 1

Which one of the following tourist places is not found in Jaipur?

Please mark (✓) for the correct answer.

- ☐ A. Jama Masjid
- ☐ B. Rambagh Palace
- ☐ C. Hawa Mahal
- ☐ D. Amer Palace

## Question: 105 of 200

QID: 11302

Marks: 1

..... is not a Fundamental Right.

Please mark (✓) for the correct answer.

- ☐ A. Right to Life
- ☐ B. Right to Equality
- ☐ C. Right against Exploitation
- ☐ D. Right to Property

**Question: 106 of 200**

QID: 11303

Marks: 1

Which is the coldest planet in our solar system?

Please mark (✓) for the correct answer.

- ☐ A. Saturn ☐ B. Uranus
- ☐ C. Neptune ☐ D. Pluto

**Question: 107 of 200**

QID: 11304

Marks: 1

Followers of which of the following religions constituted less than 1% of India's population in 2011?

Please mark (✓) for the correct answer.

- ☐ A. Christianity ☐ B. Sikhism
- ☐ C. Jainism ☐ D. All of these

**Question: 108 of 200**

QID: 11305

Marks: 1

Which woman was known as "The nightingale of India"?

Please mark (✓) for the correct answer.

- ☐ A. Lata Mangeskar ☐ B. Aruna Asaf Ali
- ☐ C. Sarojini Naidu ☐ D. Bhikaji Cama

**Question: 109 of 200**

QID: 11306

Marks: 1

Who was the inventor of the telescope?

Please mark (✓) for the correct answer.

- ☐ A. Galileo Galilei ☐ B. Copernicus
- ☐ C. Hans Lippershey ☐ D. Kepler

**Question: 110 of 200**

QID: 11307

Marks: 1

Which of the following is a use of wind energy?

Please mark (✓) for the correct answer.

- ☐ A. Providing heating for homes in winter ☐ B. Running motorcycles
- ☐ C. Cooking food ☐ D. Operating water pumps for irrigation

**Question: 111 of 200**

QID: 11308

Marks: 1

What does an independent Judiciary guard?

Please mark (✓) for the correct answer.

- ☐ A. The spirit of inquiry and reform
- ☐ B. The liberties and fundamental rights of the citizens
- ☐ C. The rich heritage of our composite culture
- ☐ D. All of these

**Question: 112 of 200**

QID: 11309

Marks: 1

Which of the following persons threw a bomb in the Central Legislative Assembly in India in 1929?

Please mark (✓) for the correct answer.

- ☐ A. Vinoba Bhave
- ☐ B. Sukhdev
- ☐ C. Bhagat Singh
- ☐ D. None of these

**Question: 113 of 200**

QID: 11310

Marks: 1

The explorer Ibn Battuta belonged to which country?

Please mark (✓) for the correct answer.

- ☐ A. India
- ☐ B. China
- ☐ C. Morocco
- ☐ D. Saudi Arabia

**Question: 114 of 200**

QID: 11311

Marks: 1

Who was declared as the leader of the Revolt of 1857?

Please mark (✓) for the correct answer.

- ☐ A. Bahadur Shah Zafar
- ☐ B. Kunwar Singh
- ☐ C. Lakshmi Bai
- ☐ D. Tantya Tope



Which of the following pairs are correctly matched?

Name of River	Information about it
A. Mekong	1. Longest River in Asia
B. Amazon	2. Largest river in the world
C. Amazon	3. Longest river in Africa
D. Parana	4. Flows in South America

Select the correct answer using the code given below

Please mark (✓) for the correct answer.

- ☐ A. Only C ☐ B. Both B and D
- ☐ C. Both A and C ☐ D. A, C and D

## Question: 116 of 200

QID: 11313

Marks: 1

Bhagat Singh gave the slogan "....."

Please mark (✓) for the correct answer.

- ☐ A. Dilli Chalo ☐ B. Sarfaroshi ki tammana ab hamare dil mein hai
- ☐ C. Inqilaab Zindabad ☐ D. Swaraj hamara hak hai

## Question: 117 of 200

QID: 11314

Marks: 1

Which chemical is commonly known as 'Battery acid'?

Please mark (✓) for the correct answer.

- ☐ A. Sulphuric acid ☐ B. Sulphur dioxide
- ☐ C. Hydrochloric acid ☐ D. Acetic acid

## Question: 118 of 200

QID: 11315

Marks: 1

Which Mughal King lost his kingdom for a few years and regained it later on?

Please mark (✓) for the correct answer.

- ☐ A. Aurangzeb ☐ B. Jahangir
- ☐ C. Humayun ☐ D. Akbar

**Question: 119 of 200**

QID: 11316

Marks: 1

A maximum of how many players of the fielding side can be on the field at any time in an official game of Cricket?

Please mark (✓) for the correct answer.

- ☐ A. 12
- ☐ B. 11
- ☐ C. 13
- ☐ D. As allowed by the umpires

**Question: 120 of 200**

QID: 11317

Marks: 1

For what maximum period can the Vice-President of India act as the President if that post becomes vacant for any reason?

Please mark (✓) for the correct answer.

- ☐ A. Fifteen days
- ☐ B. Three months
- ☐ C. Six months
- ☐ D. Indefinitely

**Question: 121 of 200**

QID: 11318

Marks: 1

What is the term used for increase of Earth's average surface temperature and its oceans due to greenhouse gases?

Please mark (✓) for the correct answer.

- ☐ A. Pollution
- ☐ B. Global warming
- ☐ C. Climate change
- ☐ D. Atmospheric contamination

**Question: 122 of 200**

QID: 11319

Marks: 1

Who became the first person to go into space?

Please mark (✓) for the correct answer.

- ☐ A. Neil Armstrong
- ☐ B. Kalpana Chawla
- ☐ C. John Glenn
- ☐ D. Yuri Gagarin

**Question: 123 of 200**

QID: 11320

Marks: 1

The 8th of March is celebrated every year as .....

Please mark (✓) for the correct answer.

- ☐ A. International Literacy Day
- ☐ B. International Young Women's Day
- ☐ C. International Girl Child Day
- ☐ D. International Women's Day

**Question: 124 of 200**

QID: 11321

Marks: 1

Who lost the Battle of Haldighati?

Please mark (✓) for the correct answer.

- ☐ A. Man Singh ☐ B. Akbar  
☐ C. Sher Shah Suri ☐ D. Maharana Pratap

**Question: 125 of 200**

QID: 11322

Marks: 1

Name the biggest cricket venue in the world.

Please mark (✓) for the correct answer.

- ☐ A. Eden Gardens ☐ B. Sydney Cricket Ground  
☐ C. Cape Town ☐ D. Narendra Modi Stadium

**Question: 126 of 200**

QID: 11323

Marks: 1

Which of the following awards is given for acts of bravery on the battlefield during war in India?

Please mark (✓) for the correct answer.

- ☐ A. Param Vir Chakra ☐ B. Ashok Chakra  
☐ C. Vir Chakra ☐ D. Padma Shri

**Question: 127 of 200**

QID: 11324

Marks: 1

Which is the highest mountain peak in Japan?

Please mark (✓) for the correct answer.

- ☐ A. Fujiyama ☐ B. Kilimanjaro  
☐ C. Elbruz ☐ D. Mount K2

**Question: 128 of 200**

QID: 11325

Marks: 1

What is the lowest ranked Indian Air Force officer called?

Please mark (✓) for the correct answer.

- ☐ A. Wing Commander ☐ B. Flying Officer  
☐ C. Pilot Officer ☐ D. Test Pilot

**Question: 129 of 200**

QID: 11326

Marks: 1

What is the work of a Meteorologist?

Please mark (✓) for the correct answer.

- ☐ A. Solving problems related to healthy nutrition
- ☐ B. Ensuring the proper measurement of physical quantities
- ☐ C. Forecasting the weather
- ☐ D. Forecasting earthquakes

**Question: 130 of 200**

QID: 11327

Marks: 1

Tuberculosis is caused by .....

Please mark (✓) for the correct answer.

- ☐ A. Sputum of an infected person
- ☐ B. Coughing and sneezing of an infected person
- ☐ C. Bacteria coming through the air we breathe
- ☐ D. All of the above

**Question: 131 of 200**

QID: 11328

Marks: 1

Who was the President of the Constituent Assembly?

Please mark (✓) for the correct answer.

- ☐ A. Sarojini Naidu
- ☐ B. Dr. BR Ambedkar
- ☐ C. Chakravarthi Rajagopalachari
- ☐ D. Dr. Rajendra Prasad

**Question: 132 of 200**

QID: 11329

Marks: 1

'The Guide' novel, on which a successful film was based, has been written by .....

Please mark (✓) for the correct answer.

- ☐ A. Oscar Wilde
- ☐ B. RK Narayan
- ☐ C. Munshi Premchand
- ☐ D. Rabindranath Tagore

**Question: 133 of 200**

QID: 11330

Marks: 1

For which country is the Lion its national symbol?

Please mark (✓) for the correct answer.

- ☐ A. Sri Lanka
- ☐ B. Norway
- ☐ C. Belgium
- ☐ D. All of these

**Question: 134 of 200**

QID: 11331

Marks: 1

Which is the highest extinct volcano in the world?

Please mark (✓) for the correct answer.

- |  |                                      |
|--|--------------------------------------|
| <input type="radio"/> A. Nevados Ojos del Salado | <input type="radio"/> B. Fujiyama    |
| <input type="radio"/> C. Kanchenjunga            | <input type="radio"/> D. Kilimanjaro |

**Question: 135 of 200**

QID: 11332

Marks: 1

Which award is the India's first highest Civilian Award?

Please mark (✓) for the correct answer.

- |  |                                     |
|--|-------------------------------------|
| <input type="radio"/> A. Bharat Ratna    | <input type="radio"/> B. Padma Shri |
| <input type="radio"/> C. Padma Vibhushan | <input type="radio"/> D. Vir Chakra |

**Question: 136 of 200**

QID: 11333

Marks: 1

What did Gandhiji do on 15th August 1947?

Please mark (✓) for the correct answer.

- |   |  |
|---|--|
| <input type="radio"/> A. He addressed a gathering at the Red Fort | <input type="radio"/> B. He spent the day in fasting and prayer                |
| <input type="radio"/> C. He broadcast a speech on All India Radio | <input type="radio"/> D. He was touring the country to stop the communal riots |

**Question: 137 of 200**

QID: 11334

Marks: 1

Pongal is the harvest festival of which state?

Please mark (✓) for the correct answer.

- |                                 |                                     |
|---------------------------------|-------------------------------------|
| <input type="radio"/> A. Odisha | <input type="radio"/> B. Assam      |
| <input type="radio"/> C. Kerala | <input type="radio"/> D. Tamil Nadu |

**Question: 138 of 200**

QID: 11335

Marks: 1

In which country were books printed for the first time?

Please mark (✓) for the correct answer.

- |                                |                                  |
|--------------------------------|----------------------------------|
| <input type="radio"/> A. China | <input type="radio"/> B. Germany |
| <input type="radio"/> C. India | <input type="radio"/> D. Japan   |

Which of the following cities is the winter capital of Jammu & Kashmir?

Please mark (✓) for the correct answer.

- ☐ A. Jammu ☐ B. Srinagar  
☐ C. Shimla ☐ D. Dehradun

How many spokes does the wheel in our National Flag have?

Please mark (✓) for the correct answer.

- ☐ A. 12 ☐ B. 16  
☐ C. 24 ☐ D. Not defined

Kabaddi is the national game of which country?

Please mark (✓) for the correct answer.

- ☐ A. Nepal ☐ B. Bangladesh  
☐ C. India ☐ D. Turkey

..... is the only Indian Para-Military force which allows women in combat roles.

Please mark (✓) for the correct answer.

- ☐ A. BSF ☐ B. ITPB  
☐ C. SSB ☐ D. ICG



Which of the following pairs are incorrectly matched?

Nickname	Actual Name
A. Gulzar	Sampooran Singh Kalra
B. Iron man of India	Vallabhbhai Patel
C. Loknayak	Jayaprakash Narayan
D. O Henry	William Sydney Porter

Select the correct answer using the code given below:

Please mark (✓) for the correct answer.

- ☐ A. Only C ☐ B. Both A and C
- ☐ C. Both A and D ☐ D. None of these

## Question: 144 of 200

QID: 11341

Marks: 1

Jhumar is the folk dance popular in which state of India?

Please mark (✓) for the correct answer.

- ☐ A. Punjab ☐ B. Rajasthan
- ☐ C. Bihar ☐ D. Haryana

## Question: 145 of 200

QID: 11342

Marks: 1

Where is the Salt Lake Stadium?

Please mark (✓) for the correct answer.

- ☐ A. Salt Flats, Utah, USA ☐ B. New York, USA
- ☐ C. Kolkata, India ☐ D. London, England

## Question: 146 of 200

QID: 11343

Marks: 1

What is the full form of the abbreviation EVM?

Please mark (✓) for the correct answer.

- ☐ A. Election Voting Machine ☐ B. Electronic Voting Machine
- ☐ C. Election Voter Method ☐ D. Electronic Voting Mechanism

**Question: 147 of 200**

QID: 11344

Marks: 1

The McMahon Line marks which border of India?

Please mark (✓) for the correct answer.

- ☐ A. India – Pakistan border in the North-West
- ☐ B. India's border with Bangladesh
- ☐ C. India – China border in the North-East
- ☐ D. India's border with Myanmar

**Question: 148 of 200**

QID: 11345

Marks: 1

The Sunderbans is well-known for the protection of which wild animal?

Please mark (✓) for the correct answer.

- ☐ A. Royal Bengal Tiger
- ☐ B. Asiatic Lion
- ☐ C. Wild Elephant
- ☐ D. One-horned Rhinoceros

**Question: 149 of 200**

QID: 11346

Marks: 1

Who was known by the nickname 'Bapu'?

Please mark (✓) for the correct answer.

- ☐ A. Rabindranath Tagore
- ☐ B. MK Gandhi
- ☐ C. Chittaranjan Das
- ☐ D. Dadabhai Naoroji

**Question: 150 of 200**

QID: 11347

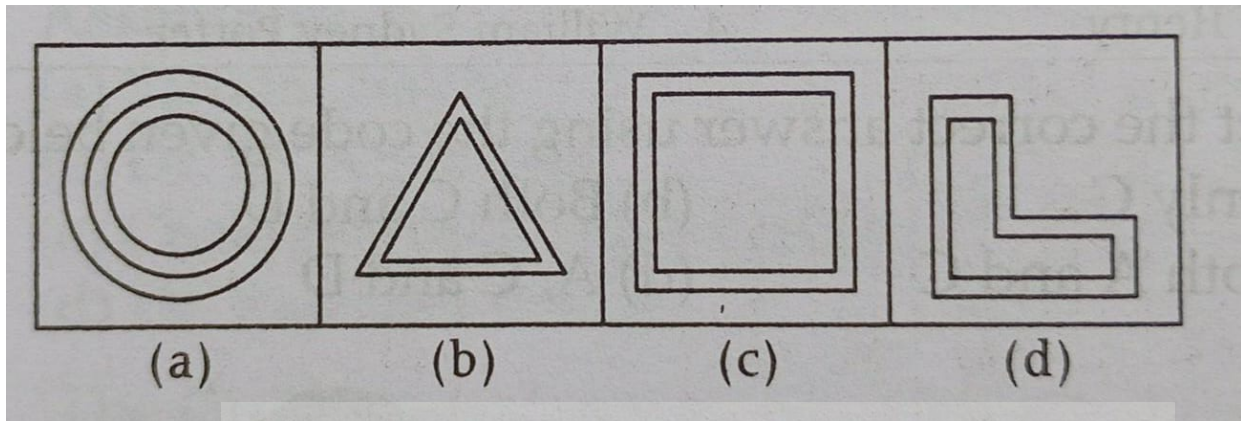
Marks: 1

Where is the Grand Canyon?

Please mark (✓) for the correct answer.

- ☐ A. On the border between Zimbabwe and Zambia in Africa
- ☐ B. Colorado, USA
- ☐ C. Mexico
- ☐ D. Pakistan

Look carefully at the sequence of symbols to find the odd pattern.



Please mark (✓) for the correct answer.

- ☐ A. a  
☐ C. c

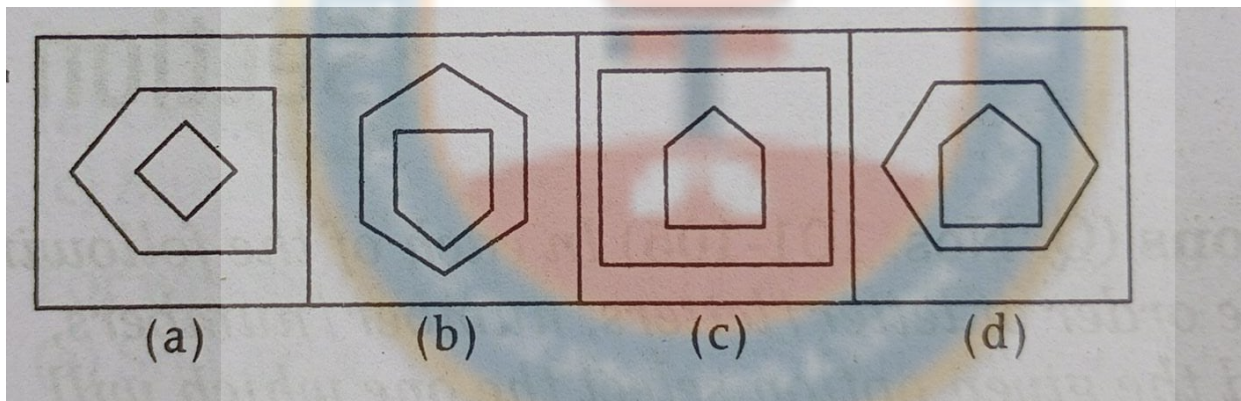
- ☐ B. b  
☐ D. d

## Question: 152 of 200

QID: 11382

Marks: 1

Look carefully at the sequence of symbols to find the odd pattern.



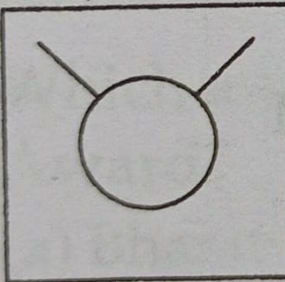
Please mark (✓) for the correct answer.

- ☐ A. a  
☐ C. c

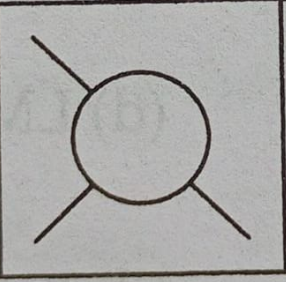
- ☐ B. b  
☐ D. d

Look carefully at the sequence of symbols to find the odd pattern.

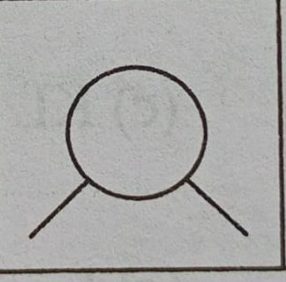
Problem Figures



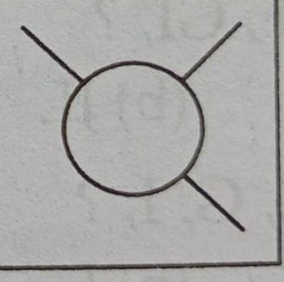
(1)



(2)




(3)

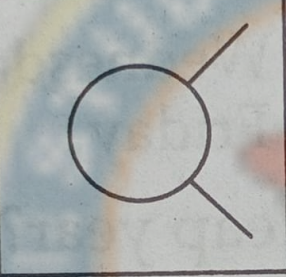


(4)

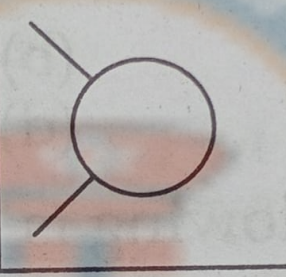
Answer Figures



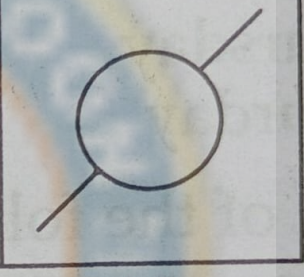
(a)



(b)



(c)



(d)

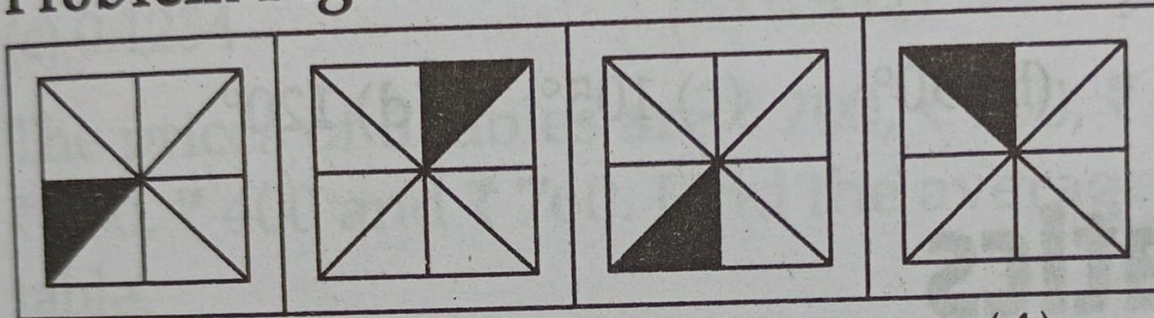
Please mark (✓) for the correct answer.

- ☐ A. a
- ☐ B. b
- ☐ C. c
- ☐ D. d



Look carefully at the sequence of symbols to find the odd pattern.

## Problem Figures



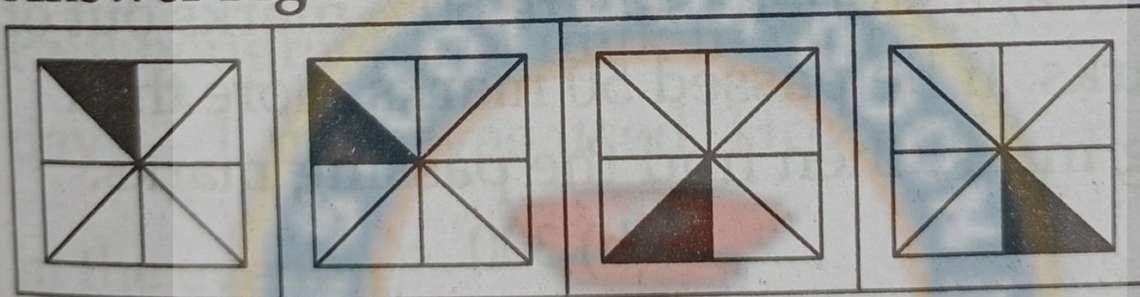
(1)

(2)

(3)

(4)

## Answer Figures



(a)

(b)

(c)



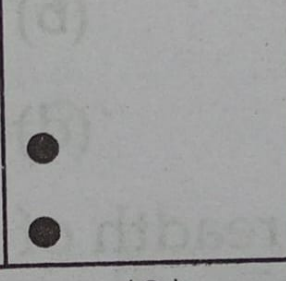
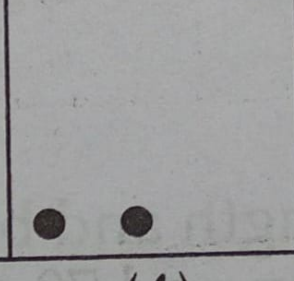
(d)

Please mark (✓) for the correct answer.



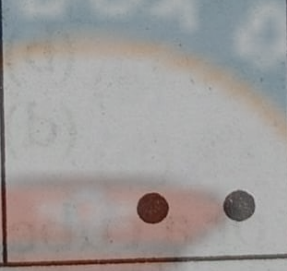

☐ A. a☐ C. c☐ B. b☐ D. d

Look carefully at the sequence of symbols to find the odd pattern.

### Problem Figures

			
(1)	(2)	(3)	(4)

### Answer Figures

			
(a)	(b)	(c)	(d)

Please mark (✓) for the correct answer.

- ☐ A. a
- ☐ B. b
- ☐ C. c
- ☐ D. d



Pick up the appropriate figure from the answer figure which can replace the question mark (?) in problem figure.

Problem Figures

				?
(1)	(2)	(3)	(4)	(5)

Answer Figures

(a)	(b)	(c)	(d)

Please mark (✓) for the correct answer.

- ☐ A. a
- ☐ B. b
- ☐ C. c
- ☐ D. d

Pick up the appropriate figure from the answer figure which can replace the question mark (?) in problem figure.

### Problem Figures

				?
(1)	(2)	(3)	(4)	(5)

### Answer Figures





(a)	(b)	(c)	(d)

Please mark (✓) for the correct answer.





- ☐ A. a
- ☐ B. b
- ☐ C. c
- ☐ D. d

Pick up the appropriate figure from the answer figure which can replace the question mark (?) in problem figure.

### Problem Figures

			?	
(1)	(2)	(3)	(4)	(5)

### Answer Figures

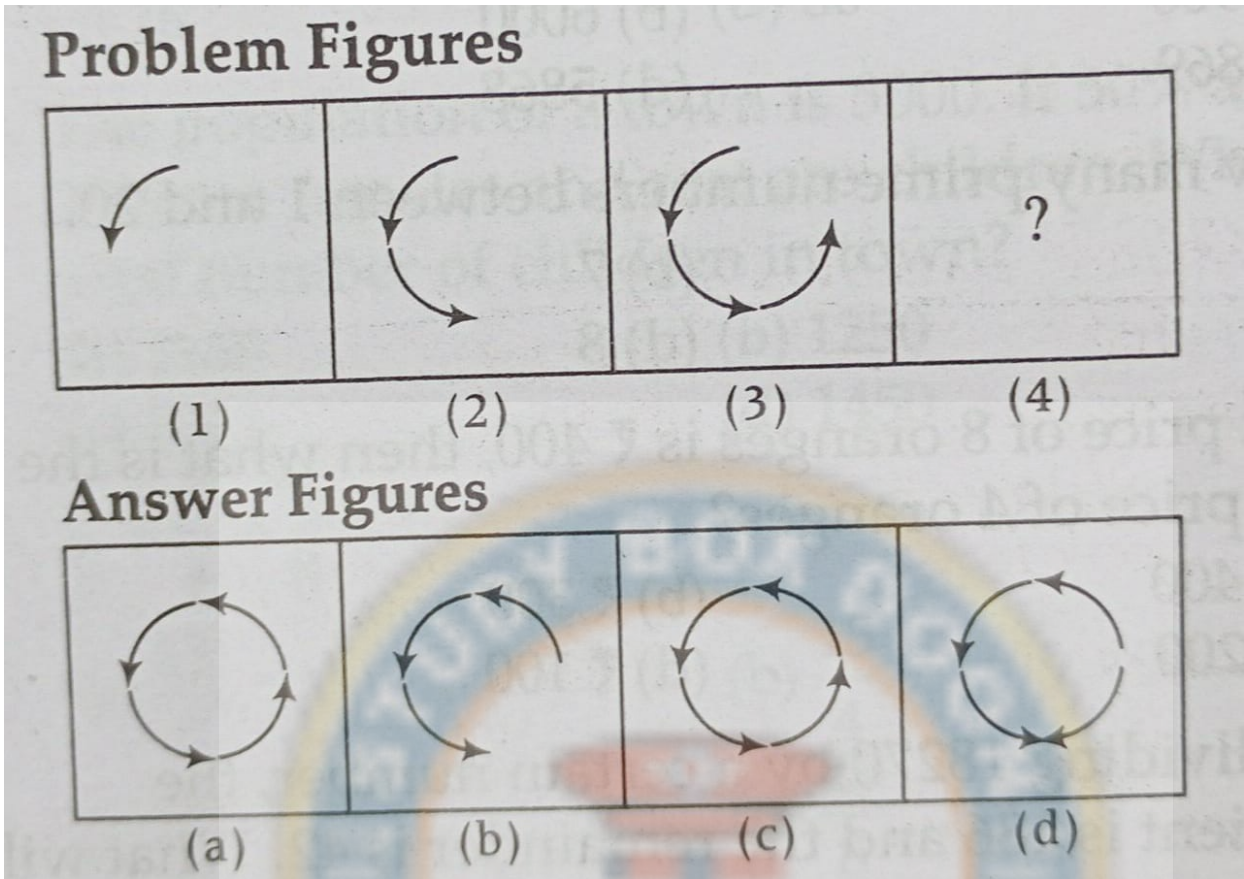
			
(a)	(b)	(c)	(d)

Please mark (✓) for the correct answer.

- ☐ A. a
- ☐ B. b
- ☐ C. c
- ☐ D. d



Pick up the appropriate figure from the answer figure which can replace the question mark (?) in problem figure.



Please mark (✓) for the correct answer.

- ☐ A. a
- ☐ B. b
- ☐ C. c
- ☐ D. d

In a class, Sandeep is 25th from top and 32nd from bottom, then total number of students in the class is

Please mark (✓) for the correct answer.

- ☐ A. 56
- ☐ B. 57
- ☐ C. 58
- ☐ D. 60

Radha remembers that her father's birthday is after 16th March but before 21st March, while her brother Mahesh remembers that his father's birthday is before 22nd but after 19th of March. On which date is the birthday of their father?

Please mark (✓) for the correct answer.

- ☐ A. 19th
- ☐ B. 20th
- ☐ C. 21th
- ☐ D. 17th

Each of A, B, C, D, and E has different amounts of money. C has more money than E, B, and A. Who has the maximum amount of money?

Please mark (✓) for the correct answer.

☐ A. A

☐ B. B

☐ C. C

☐ D. D

## Question: 163 of 200

QID: 11393

Marks: 1

A is sister of B. B is father of C. C is only brother of D. Then, how A is related to D?

Please mark (✓) for the correct answer.

☐ A. Aunt

☐ B. Sister-in-law

☐ C. Mother

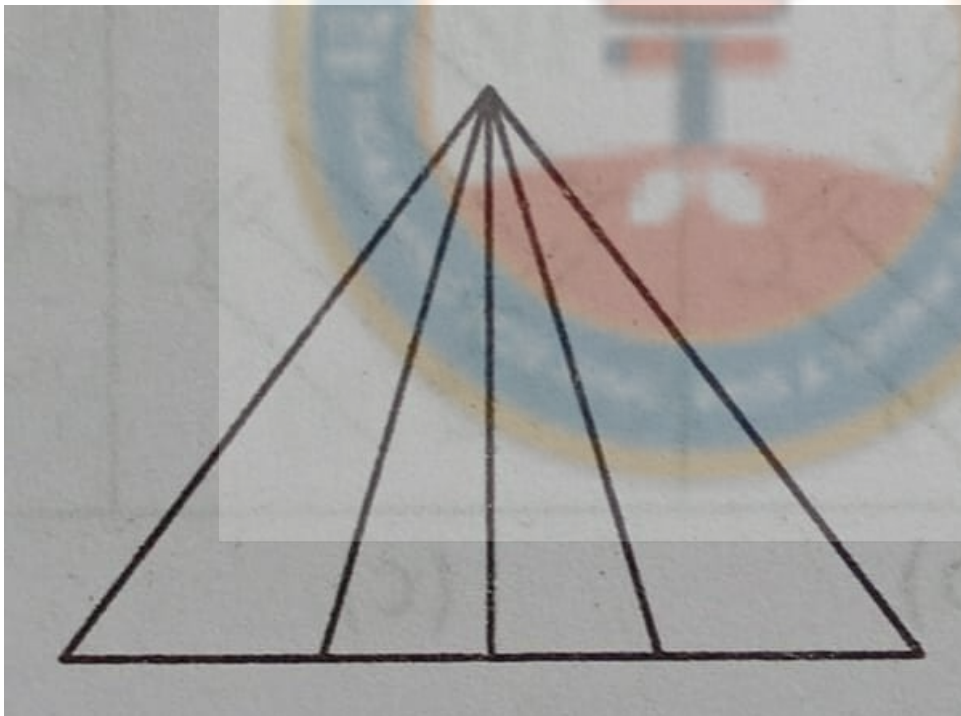
☐ D. Sister

## Question: 164 of 200

QID: 11394

Marks: 1

How many triangles are there in the following figure?



Please mark (✓) for the correct answer.

☐ A. 5

☐ B. 9

☐ C. 12

☐ D. 10

If today is Sunday, then what day of the week will be 3 days after tomorrow?

Please mark (✓) for the correct answer.

- ☐ A. Thursday
- ☐ B. Wednesday
- ☐ C. Saturday
- ☐ D. Friday

Which of the following is a leap year?

Please mark (✓) for the correct answer.

- ☐ A. 2010
- ☐ B. 2006
- ☐ C. 2016
- ☐ D. 2009

What will be the angle between the hands of a clock at 9:00?

Please mark (✓) for the correct answer.

- ☐ A. 75°
- ☐ B. 90°
- ☐ C. 105°
- ☐ D. 120°

ST39, UV43, WX47, ?

Please mark (✓) for the correct answer.

- ☐ A. YZ47
- ☐ B. YZ52
- ☐ C. YZ51
- ☐ D. YX50

AC, DF, GI, ?

Please mark (✓) for the correct answer.

- ☐ A. LJ
- ☐ B. JL
- ☐ C. KL
- ☐ D. LM



A, C, E, G, I, ?

Please mark (✓) for the correct answer.

☐ A. M

☐ B. L

☐ C. K

☐ D. J

A, Z, C, X, E, ?

Please mark (✓) for the correct answer.

☐ A. U

☐ B. W

☐ C. V

☐ D. Y

3, 5, 7, ?, 13, 17, 19, 23

Please mark (✓) for the correct answer.

☐ A. 11

☐ B. 9

☐ C. 8

☐ D. 10

MN : OP :: QR : ?

Please mark (✓) for the correct answer.

☐ A. ST

☐ B. TS

☐ C. RS

☐ D. SR

ACE : BDF :: MOQ : ?

Please mark (✓) for the correct answer.

☐ A. BMW

☐ B. NQP

☐ C. NPR

☐ D. BEF

**Question: 175 of 200**

QID: 11355

Marks: 1

**BFG : EIJ :: RVW : ?**

Please mark (✓) for the correct answer.

☐ A. UWZ☐ B. UYZ☐ C. SWX☐ D. QUV**Question: 176 of 200**

QID: 11356

Marks: 1

**17 : 34 :: ? : 10**

Please mark (✓) for the correct answer.

☐ A. 11☐ B. 8☐ C. 15☐ D. 5**Question: 177 of 200**

QID: 11357

Marks: 1

**11 × 21 : 25 ?**

Please mark (✓) for the correct answer.

☐ A. 625☐ B. 576☐ C. 529☐ D. 484**Question: 178 of 200**

QID: 11358

Marks: 1

**Find out the letter/word which are different from the group.**

Please mark (✓) for the correct answer.

☐ A. DW☐ B. LJ☐ C. JQ☐ D. HS**Question: 179 of 200**

QID: 11359

Marks: 1

**Find out the letter/word which are different from the group.**

Please mark (✓) for the correct answer.

☐ A. Father☐ B. Mother☐ C. Sister☐ D. Children

**Question: 180 of 200**

QID: 11360

Marks: 1

Find out the letter/word which are different from the group.

Please mark (✓) for the correct answer.

☐ A. GK☐ B. MQ☐ C. PU☐ D. SW**Question: 181 of 200**

QID: 11361

Marks: 1

Find out the letter/word which are different from the group.

Please mark (✓) for the correct answer.

☐ A. Lotus☐ B. Jasmine☐ C. Rose☐ D. Sandal**Question: 182 of 200**

QID: 11362

Marks: 1

Find out the letter/word which are different from the group.

Please mark (✓) for the correct answer.

☐ A. Carrot☐ B. Apple☐ C. Brinjal☐ D. Cabbage**Question: 183 of 200**

QID: 11363

Marks: 1

Find out the relationship between two words.

Jharkhand : Ranchi :: Manipur : ?

Please mark (✓) for the correct answer.

☐ A. Imphal☐ B. Panaji☐ C. Dispur☐ D. Aizawl**Question: 184 of 200**

QID: 11364

Marks: 1

Find out the relationship between two words.

Menu : Food :: Catalogue : ?

Please mark (✓) for the correct answer.

☐ A. Rack☐ B. Newspaper☐ C. Library☐ D. Books

Question: 185 of 200

QID: 11365

Marks: 1

HCM : FAK :: SGD : ?

Please mark (✓) for the correct answer.

- ☐ A. QIB ☐ B. QEB  
☐ C. ESQ ☐ D. GES

Question: 186 of 200

QID: 11366

Marks: 1

42 : 56 :: 110 : ?

Please mark (✓) for the correct answer.

- ☐ A. 130 ☐ B. 136  
☐ C. 124 ☐ D. 148

Question: 187 of 200

QID: 11367

Marks: 1

G × 1 : 7 × 9 :: S × T : ?

Please mark (✓) for the correct answer.

- ☐ A. 19 × 20 ☐ B. 18 × 20  
☐ C. 17 × 19 ☐ D. 20 × 21

Question: 188 of 200

QID: 11368

Marks: 1

If 'BRI' means 'CSJ', then 'TER' means

Please mark (✓) for the correct answer.

- ☐ A. SUF ☐ B. FSU  
☐ C. SFU ☐ D. UFS

Question: 189 of 200

QID: 11369

Marks: 1

If 'MARS' means 'ZNEF' then 'ARMS' means

Please mark (✓) for the correct answer.

- ☐ A. FZNE ☐ B. NEZF  
☐ C. EZNF ☐ D. ZEFN

If 'RATS' means 'ENGF', then 'STAR' means

Please mark (✓) for the correct answer.

- ☐ A. FENG
- ☐ B. GFNE
- ☐ C. FGNE
- ☐ D. EFNG

If 'TER' means 'QBO', then 'MAL' means

Please mark (✓) for the correct answer.

- ☐ A. JXI
- ☐ B. XJI
- ☐ C. XJI
- ☐ D. JIX

If 'ABC' means 'DEF', then 'MNO' means

Please mark (✓) for the correct answer.

- ☐ A. QRS
- ☐ B. ORS
- ☐ C. RQP
- ☐ D. PQR

If '+' is 'x', 'x' is '-', '-' is '÷' and '÷' is '+', then answer the following questions based on this information.

$24 - 6 \div 3 = ?$

Please mark (✓) for the correct answer.

- ☐ A. 15
- ☐ B. 10
- ☐ C. 12
- ☐ D. 13

If '+' is 'x', 'x' is '-', '-' is '÷' and '÷' is '+', then answer the following questions based on this information.

$12 \div 3 \times 4 = ?$

Please mark (✓) for the correct answer.

- ☐ A. 12
- ☐ B. 13
- ☐ C. 14
- ☐ D. 15

If '+' is 'x', 'x' is '-', '-' is '÷' and '÷' is '+', then answer the following questions based on this information.

$10 \div 3 \times 4 + 3 = ?$

Please mark (✓) for the correct answer.

- ☐ A. 19
- ☐ B. 20
- ☐ C. 17
- ☐ D. 21

If '+' is 'x', 'x' is '-', '-' is '÷' and '÷' is '+', then answer the following questions based on this information.

$30 - 6 \div 5 \times 4 + 2 = ?$

Please mark (✓) for the correct answer.

- ☐ A. 3
- ☐ B. 9
- ☐ C. 27
- ☐ D. 30

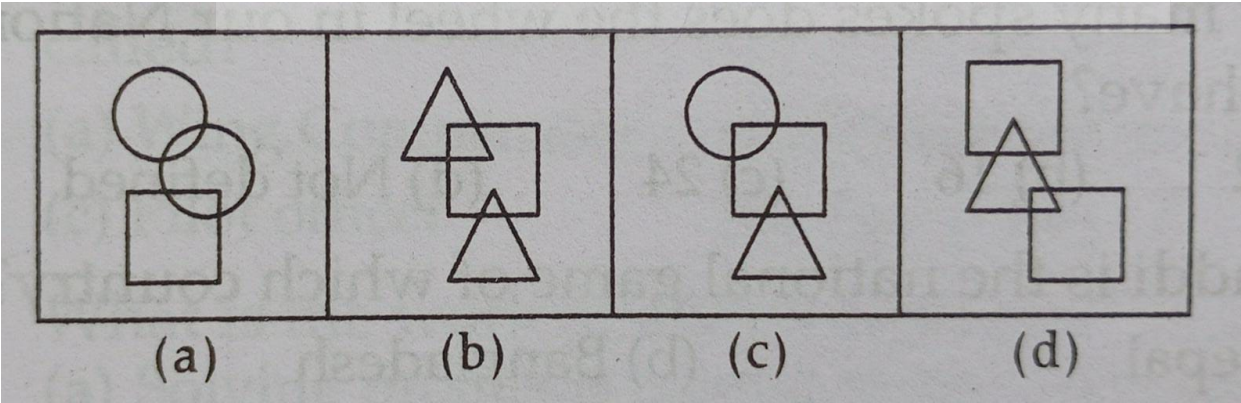
If '+' is 'x', 'x' is '-', '-' is '÷' and '÷' is '+', then answer the following questions based on this information.

$20 \times 60 \div 40 - 20 + 10 = ?$

Please mark (✓) for the correct answer.

- ☐ A. 45
- ☐ B. 50
- ☐ C. 20
- ☐ D. 60

Look carefully at the sequence of symbols to find the odd pattern.

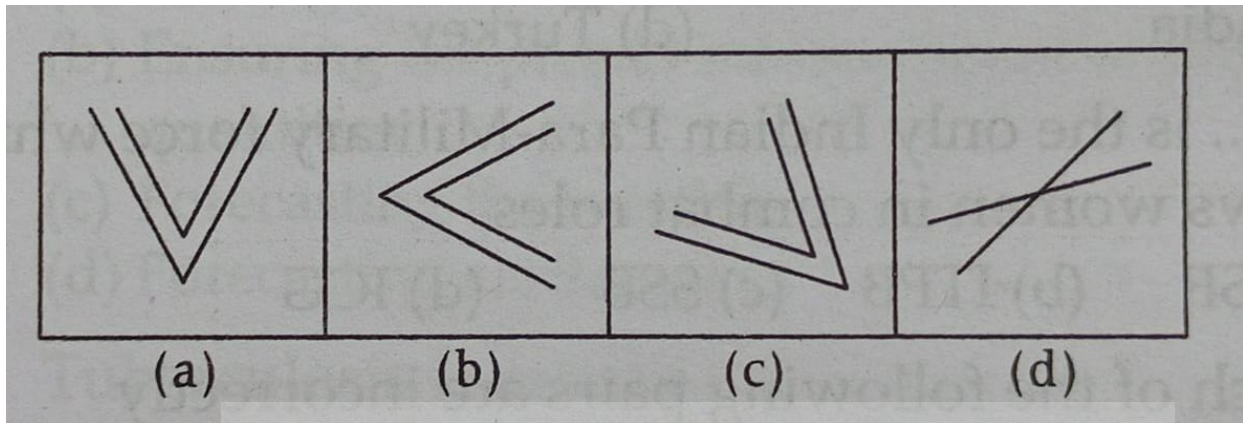


Please mark (✓) for the correct answer.

- ☐ A. a
- ☐ B. b
- ☐ C. c
- ☐ D. d



Look carefully at the sequence of symbols to find the odd pattern.



Please mark (✓) for the correct answer.

- ☐ A. a
- ☐ C. c

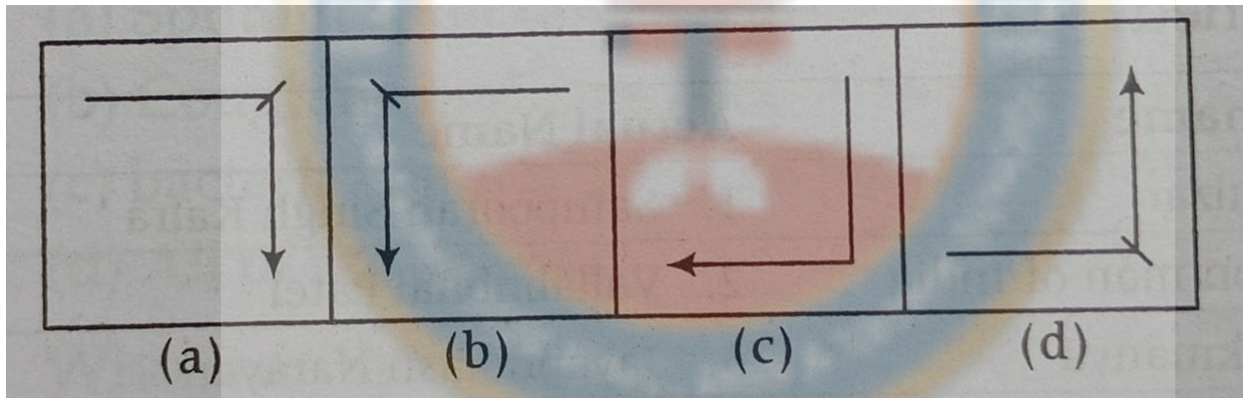
- ☐ B. b
- ☐ D. d

## Question: 200 of 200

QID: 11380

Marks: 1

Look carefully at the sequence of symbols to find the odd pattern.



Please mark (✓) for the correct answer.

- ☐ A. a
- ☐ C. c

- ☐ B. b
- ☐ D. d

— END OF QUESTION PAPER —

Answer Key

No	Question Type	QID	Correct Answer
Question - 1	Multiple Choice (Radiobutton)	11198	A
Question - 2	Multiple Choice (Radiobutton)	11199	B
Question - 3	Multiple Choice (Radiobutton)	11200	A
Question - 4	Multiple Choice (Radiobutton)	11209	C
Question - 5	Multiple Choice (Radiobutton)	11210	D
Question - 6	Multiple Choice (Radiobutton)	11201	C
Question - 7	Multiple Choice (Radiobutton)	11202	C
Question - 8	Multiple Choice (Radiobutton)	11203	B
Question - 9	Multiple Choice (Radiobutton)	11204	B
Question - 10	Multiple Choice (Radiobutton)	11205	C
Question - 11	Multiple Choice (Radiobutton)	11206	D
Question - 12	Multiple Choice (Radiobutton)	11207	B
Question - 13	Multiple Choice (Radiobutton)	11208	B
Question - 14	Multiple Choice (Radiobutton)	11212	B
Question - 15	Multiple Choice (Radiobutton)	11213	A
Question - 16	Multiple Choice (Radiobutton)	11214	A
Question - 17	Multiple Choice (Radiobutton)	11215	B
Question - 18	Multiple Choice (Radiobutton)	11216	D
Question - 19	Multiple Choice (Radiobutton)	11217	C
Question - 20	Multiple Choice (Radiobutton)	11218	B
Question - 21	Multiple Choice (Radiobutton)	11219	D
Question - 22	Multiple Choice (Radiobutton)	11220	A
Question - 23	Multiple Choice (Radiobutton)	11221	B
Question - 24	Multiple Choice (Radiobutton)	11222	C
Question - 25	Multiple Choice (Radiobutton)	11223	D
Question - 26	Multiple Choice (Radiobutton)	11224	A
Question - 27	Multiple Choice (Radiobutton)	11237	C
Question - 28	Multiple Choice (Radiobutton)	11238	D
Question - 29	Multiple Choice (Radiobutton)	11239	A
Question - 30	Multiple Choice (Radiobutton)	11225	B
Question - 31	Multiple Choice (Radiobutton)	11226	A
Question - 32	Multiple Choice (Radiobutton)	11227	A
Question - 33	Multiple Choice (Radiobutton)	11228	D
Question - 34	Multiple Choice (Radiobutton)	11229	A
Question - 35	Multiple Choice (Radiobutton)	11230	C
Question - 36	Multiple Choice (Radiobutton)	11231	A
Question - 37	Multiple Choice (Radiobutton)	11232	C
Question - 38	Multiple Choice (Radiobutton)	11233	B
Question - 39	Multiple Choice (Radiobutton)	11234	D
Question - 40	Multiple Choice (Radiobutton)	11235	B
Question - 41	Multiple Choice (Radiobutton)	11236	C
Question - 42	Multiple Choice (Radiobutton)	11240	A

No	Question Type	QID	Correct Answer
Question - 43	Multiple Choice (Radiobutton)	11241	C
Question - 44	Multiple Choice (Radiobutton)	11242	A
Question - 45	Multiple Choice (Radiobutton)	11243	D
Question - 46	Multiple Choice (Radiobutton)	11244	B
Question - 47	Multiple Choice (Radiobutton)	11245	C
Question - 48	Multiple Choice (Radiobutton)	11246	D
Question - 49	Multiple Choice (Radiobutton)	11247	A
Question - 50	Multiple Choice (Radiobutton)	11211	A
Question - 51	Multiple Choice (Radiobutton)	11264	B
Question - 52	Multiple Choice (Radiobutton)	11265	C
Question - 53	Multiple Choice (Radiobutton)	11269	A
Question - 54	Multiple Choice (Radiobutton)	11270	D
Question - 55	Multiple Choice (Radiobutton)	11280	C
Question - 56	Multiple Choice (Radiobutton)	11281	A
Question - 57	Multiple Choice (Radiobutton)	11282	D
Question - 58	Multiple Choice (Radiobutton)	11283	D
Question - 59	Multiple Choice (Radiobutton)	11284	B
Question - 60	Multiple Choice (Radiobutton)	11285	D
Question - 61	Multiple Choice (Radiobutton)	11286	B
Question - 62	Multiple Choice (Radiobutton)	11287	A
Question - 63	Multiple Choice (Radiobutton)	11288	C
Question - 64	Multiple Choice (Radiobutton)	11289	A
Question - 65	Multiple Choice (Radiobutton)	11290	C
Question - 66	Multiple Choice (Radiobutton)	11291	A
Question - 67	Multiple Choice (Radiobutton)	11292	B
Question - 68	Multiple Choice (Radiobutton)	11293	C
Question - 69	Multiple Choice (Radiobutton)	11294	B
Question - 70	Multiple Choice (Radiobutton)	11295	A
Question - 71	Multiple Choice (Radiobutton)	11296	C
Question - 72	Multiple Choice (Radiobutton)	11297	D
Question - 73	Multiple Choice (Radiobutton)	11266	A
Question - 74	Multiple Choice (Radiobutton)	11267	C
Question - 75	Multiple Choice (Radiobutton)	11268	A
Question - 76	Multiple Choice (Radiobutton)	11248	A
Question - 77	Multiple Choice (Radiobutton)	11249	D
Question - 78	Multiple Choice (Radiobutton)	11250	B
Question - 79	Multiple Choice (Radiobutton)	11251	D
Question - 80	Multiple Choice (Radiobutton)	11271	D
Question - 81	Multiple Choice (Radiobutton)	11272	B
Question - 82	Multiple Choice (Radiobutton)	11252	C
Question - 83	Multiple Choice (Radiobutton)	11253	A
Question - 84	Multiple Choice (Radiobutton)	11254	B
Question - 85	Multiple Choice (Radiobutton)	11255	C
Question - 86	Multiple Choice (Radiobutton)	11256	C
Question - 87	Multiple Choice (Radiobutton)	11257	B
Question - 88	Multiple Choice (Radiobutton)	11258	B

No	Question Type	QID	Correct Answer	
Question - 89	Multiple Choice (Radiobutton)	11259	A	
Question - 90	Multiple Choice (Radiobutton)	11260	D	
Question - 91	Multiple Choice (Radiobutton)	11261	C	
Question - 92	Multiple Choice (Radiobutton)	11262	D	
Question - 93	Multiple Choice (Radiobutton)	11263	D	
Question - 94	Multiple Choice (Radiobutton)	11273	A	
Question - 95	Multiple Choice (Radiobutton)	11274	C	
Question - 96	Multiple Choice (Radiobutton)	11275	B	
Question - 97	Multiple Choice (Radiobutton)	11276	A	
Question - 98	Multiple Choice (Radiobutton)	11277	D	
Question - 99	Multiple Choice (Radiobutton)	11278	B	
Question - 100	Multiple Choice (Radiobutton)	11279	C	
Question - 101	Multiple Choice (Radiobutton)	11298	C	
Question - 102	Multiple Choice (Radiobutton)	11299	C	
Question - 103	Multiple Choice (Radiobutton)	11300	B	
Question - 104	Multiple Choice (Radiobutton)	11301	A	
Question - 105	Multiple Choice (Radiobutton)	11302	D	
Question - 106	Multiple Choice (Radiobutton)	11303	B	
Question - 107	Multiple Choice (Radiobutton)	11304	C	
Question - 108	Multiple Choice (Radiobutton)	11305	C	
Question - 109	Multiple Choice (Radiobutton)	11306	C	
Question - 110	Multiple Choice (Radiobutton)	11307	D	
Question - 111	Multiple Choice (Radiobutton)	11308	B	
Question - 112	Multiple Choice (Radiobutton)	11309	C	
Question - 113	Multiple Choice (Radiobutton)	11310	C	
Question - 114	Multiple Choice (Radiobutton)	11311	A	
Question - 115	Multiple Choice (Radiobutton)	11312	B	
Question - 116	Multiple Choice (Radiobutton)	11313	C	
Question - 117	Multiple Choice (Radiobutton)	11314	A	
Question - 118	Multiple Choice (Radiobutton)	11315	C	
Question - 119	Multiple Choice (Radiobutton)	11316	B	
Question - 120	Multiple Choice (Radiobutton)	11317	C	
Question - 121	Multiple Choice (Radiobutton)	11318	B	
Question - 122	Multiple Choice (Radiobutton)	11319	D	
Question - 123	Multiple Choice (Radiobutton)	11320	D	
Question - 124	Multiple Choice (Radiobutton)	11321	D	
Question - 125	Multiple Choice (Radiobutton)	11322	D	
Question - 126	Multiple Choice (Radiobutton)	11323	A	
Question - 127	Multiple Choice (Radiobutton)	11324	A	
Question - 128	Multiple Choice (Radiobutton)	11325	B	
Question - 129	Multiple Choice (Radiobutton)	11326	C	
Question - 130	Multiple Choice (Radiobutton)	11327	D	
Question - 131	Multiple Choice (Radiobutton)	11328	D	
Question - 132	Multiple Choice (Radiobutton)	11329	B	
Question - 133	Multiple Choice (Radiobutton)	11330	D	
Question - 134	Multiple Choice (Radiobutton)	11331	A	
Question - 135	Multiple Choice (Radiobutton)	11332	A	



No	Question Type	QID	Correct Answer
Question - 136	Multiple Choice (Radiobutton)	11333	B
Question - 137	Multiple Choice (Radiobutton)	11334	D
Question - 138	Multiple Choice (Radiobutton)	11335	A
Question - 139	Multiple Choice (Radiobutton)	11336	A
Question - 140	Multiple Choice (Radiobutton)	11337	C
Question - 141	Multiple Choice (Radiobutton)	11338	B
Question - 142	Multiple Choice (Radiobutton)	11339	C
Question - 143	Multiple Choice (Radiobutton)	11340	D
Question - 144	Multiple Choice (Radiobutton)	11341	D
Question - 145	Multiple Choice (Radiobutton)	11342	C
Question - 146	Multiple Choice (Radiobutton)	11343	B
Question - 147	Multiple Choice (Radiobutton)	11344	C
Question - 148	Multiple Choice (Radiobutton)	11345	A
Question - 149	Multiple Choice (Radiobutton)	11346	B
Question - 150	Multiple Choice (Radiobutton)	11347	B
Question - 151	Multiple Choice (Radiobutton)	11381	A
Question - 152	Multiple Choice (Radiobutton)	11382	C
Question - 153	Multiple Choice (Radiobutton)	11383	A
Question - 154	Multiple Choice (Radiobutton)	11384	D
Question - 155	Multiple Choice (Radiobutton)	11385	C
Question - 156	Multiple Choice (Radiobutton)	11386	B
Question - 157	Multiple Choice (Radiobutton)	11387	A
Question - 158	Multiple Choice (Radiobutton)	11388	D
Question - 159	Multiple Choice (Radiobutton)	11389	C
Question - 160	Multiple Choice (Radiobutton)	11390	A
Question - 161	Multiple Choice (Radiobutton)	11391	B
Question - 162	Multiple Choice (Radiobutton)	11392	D
Question - 163	Multiple Choice (Radiobutton)	11393	A
Question - 164	Multiple Choice (Radiobutton)	11394	D
Question - 165	Multiple Choice (Radiobutton)	11395	A
Question - 166	Multiple Choice (Radiobutton)	11396	C
Question - 167	Multiple Choice (Radiobutton)	11397	B
Question - 168	Multiple Choice (Radiobutton)	11348	C
Question - 169	Multiple Choice (Radiobutton)	11349	B
Question - 170	Multiple Choice (Radiobutton)	11350	D
Question - 171	Multiple Choice (Radiobutton)	11351	C
Question - 172	Multiple Choice (Radiobutton)	11352	A
Question - 173	Multiple Choice (Radiobutton)	11353	A
Question - 174	Multiple Choice (Radiobutton)	11354	C
Question - 175	Multiple Choice (Radiobutton)	11355	B
Question - 176	Multiple Choice (Radiobutton)	11356	D
Question - 177	Multiple Choice (Radiobutton)	11357	A
Question - 178	Multiple Choice (Radiobutton)	11358	B
Question - 179	Multiple Choice (Radiobutton)	11359	D
Question - 180	Multiple Choice (Radiobutton)	11360	C
Question - 181	Multiple Choice (Radiobutton)	11361	D

No	Question Type	QID	Correct Answer
Question - 182	Multiple Choice (Radiobutton)	11362	B
Question - 183	Multiple Choice (Radiobutton)	11363	A
Question - 184	Multiple Choice (Radiobutton)	11364	D
Question - 185	Multiple Choice (Radiobutton)	11365	B
Question - 186	Multiple Choice (Radiobutton)	11366	C
Question - 187	Multiple Choice (Radiobutton)	11367	A
Question - 188	Multiple Choice (Radiobutton)	11368	D
Question - 189	Multiple Choice (Radiobutton)	11369	B
Question - 190	Multiple Choice (Radiobutton)	11370	C
Question - 191	Multiple Choice (Radiobutton)	11371	A
Question - 192	Multiple Choice (Radiobutton)	11372	D
Question - 193	Multiple Choice (Radiobutton)	11373	C
Question - 194	Multiple Choice (Radiobutton)	11374	B
Question - 195	Multiple Choice (Radiobutton)	11375	A
Question - 196	Multiple Choice (Radiobutton)	11376	C
Question - 197	Multiple Choice (Radiobutton)	11377	D
Question - 198	Multiple Choice (Radiobutton)	11378	C
Question - 199	Multiple Choice (Radiobutton)	11379	D
Question - 200	Multiple Choice (Radiobutton)	11380	C

--- END OF ANSWER KEY ---