

All questions are taken from the Previous year questions papers of Sainik schools segregated chapter wise for students' benefits only.


Subject : Geography

www.studyboxdoon.com



Chapter 1 - Resources

www.studyboxdoon.com



Sustainable development seeks to prevent _____.

- (a) Wastage of resources (b) Pollution (c) Loss of biodiversity (d) All of these

www.studyboxdoon.in



Resource which can be renewed or reproduced is known as _____

- (a) Exhaustible (b) Non-renewable (c) Renewable (d) Useful

www.studyboxdoon.com



118. What makes an object a substance or a resource ?


(1) Utility

(2) Quantity

(3) Usability

(4) Both (1) and (3)

www.studyboxdoon.com



Q.Which of the following is a human made resource?


1. Technology 2. Water 3. Copper 4. Natural gas

www.studyboxdoon.com



Chapter 2 - Land, Soil, Water, Natural Vegetation and Wildlife Resources


www.studyboxdoon.com



These are made to protect our natural vegetation and wild life

- (a) National Park
- (b) Wildlife sanctuaries
- (c) Biosphere reserves
- (d) All of these

www.studyboxdoon.com



Of the earth's total water resources, the fresh water easily accessible for our use is

- (a) More than 90% (b) 50% (c) 1% (d) Less than 1%

www.studyboxdoon.in




Forests help in maintaining a balance of _____.

- | | |
|---------------------------------|-------------------------------|
| (1) Nitrogen and Carbon dioxide | (2) Oxygen and Carbon dioxide |
| (3) Argon and Carbon dioxide | (4) Nitrogen and Oxygen |



Which of the following is not an example of ground water ?


- (1) Water flowing in rivers
- (2) Water through hand pumps
- (3) Water through submersible pumps
- (4) Water through wells



Q. The source of fresh water available for human use is –

- a) Rivers b) Rain c) Drains d) Water vapour

www.studyboxdoon.com



Q. Which of the following is NOT a natural ecosystem?

1. Forest 2. Sea 3. Aquarium 4. Desert

www.studyboxdoon.com



3_Mineral and Power Resources


www.studyboxdoon.com



Which one of the following is a leading producer of Copper in the world?

- (a) Bolivia (b) Chile (c) Ghana (d) Zimbabwe

www.studyboxdoon.com



103. Give an example of shaft mining.

(1) Surface mining

(2) Deep bores

(3) Off-shore drilling

(4) None of these

www.studyboxdoon.com



Name of the first country in the world to develop hydroelectricity.

- (a) Norway (b) Pakistan (c) India (d) Switzerland

www.studyboxdoon.com



The largest producer and exporter of mica in the world is


(a) Australia

(b) India

(c) USA


(d) Russia

www.studyboxdoon.in



The method used to extract oil from the earth is called _____.


- (1) Shaft Mining
- (2) Drilling
- (3) Open-cast mining
- (4) Quarrying



Minerals that lie at shallow depths are taken out by removing the surface layer, this is known as:-

- (a) Open – cast mining (b) Shaft mining (c) Drilling (d) All of the above

www.studyboxdoon.com



Which of the following is a conventional source of energy?


1. Biogas
2. Firewood
3. Solar energy
4. Wind energy

www.studyboxdoon.com



Chapter 4 - Agriculture

www.studyboxdoon.com



102. Growing vegetables, flowers, fruits and decorative plants for commercial use is known as :

- (1) Viticulture (2) Sericulture (3) Horticulture (4) Pisciculture


www.studyboxdoon.in



Q. Identify the crop which is not classified as a plantation crop?

a) Rice b) Tea c) Sugarcane d) Cashew

www.studyboxdoon.com



Q Arrange the following steps of terrace farming in chronological order:

A. The sides of each plot are raised to retain water.

B. They cultivate rice on it.

C. The land on a hill slope is made into flat plots.

D. Plots are carved out in steps.

1. A, B, C, D 2. B, C, D, A 3. D, B, C, A 4. C, D, A, B




Breeding of fish in specially constructed tanks and ponds is known as:-

- (a) Agriculture (b) Sericulture (c) Pisciculture (d) Viticulture

Which state of India is the highest producer of Jute?

- (a) Assam (b) West Bengal (c) Bihar (d) Odisha



Chapter 5 - Industries

www.studyboxdoon.com




Which of the following gas was released in Bhopal Gas Tragedy?

- (a) Methyl Isocyanite
- (c) Methyl Alchohol

- (b) Ethyl Isocyanate
- (d) Ethyl Alchohol

105. Rourkela steel plant is located in which state of India ?

- (1) Jharkhand
- (2) West Bengal
- (3) Odisha
- (4) Bihar



101. Ahmedabad is referred as the _____ of India.

- (a) Ruhr (b) Manchester (c) Boston (d) Chicago


www.studyboxdoon.com



Many of India's most important mining and industrial centre are located in

- (a) Jamshedpur (b) Rourkela (c) Bokaro (d) All of these

www.studyboxdoon.com



Industry which processes raw material obtained from ocean is called -

- | | |
|----------------------------|---------------------------|
| (1) Agro-based industry | (2) Marine-based industry |
| (3) Mineral-based industry | (4) Forest-based industry |



Which one of the following is not a characteristic of minerals ?


- (1) They are created by natural processes
- (2) They have definite chemical composition
- (3) They are inexhaustible
- (4) Their distribution is even



The first successful modern textile mill in India was established in :

- (1) Mumbai (2) Chennai (3) Ahmedabad (4) Kanpur


www.studyboxdoon.com



Q.Iron made from iron ore is the product of _____.

- a) Marine industry
- b) Mineral based industry
- c) Agro based industry
- d) Forest based industry


www.studyboxdoon.com



Q. Where is The Tata Iron and Steel Company situated?


1. On the banks of Hooghly River
2. On the banks of Son River
3. On the banks of Ganges
4. On the banks of Subarnarekha

www.studyboxdoon.com



Chapter 6 - Human Resources


www.studyboxdoon.com



The difference between the birth rate and the death rate is called the:-

- (a) Natural growth rate
- (b) Normal growth rate
- (c) Actual growth rate
- (d) None of the above

www.studyboxdoon.com



What is a population pyramid?


- (a) A graphical presentation of the age, sex composition of a population.
- (b) When the population density of an area is so high that people live in tall buildings.
- (c) Pattern of population distribution in large urban areas.
- (d) Pattern of population distribution in rural areas.



Q . Choose the correct definition of 'Birth rate' from the following options:


- a) The number of births per year
- b) The change in total population during a specific time
- c) The number of live births per 1,000 people
- d) The number of live births per year, per 10,000 people`

www.studyboxdoon.com



6_NCERT


www.studyboxdoon.com



Q.Which of the following is NOT a component of maps?

1. Distance 2. Direction 3. Plan 4. Scale


www.studyboxdoon.com



Q.Which one of the following may be called a 'dwarf' planet?

1. Pluto
2. Saturn
3. Mercury
4. Venus

www.studyboxdoon.com



7_1_Environment

www.studyboxdoon.com




Q.Match List I with List II List I List ii

- | | |
|----------------|-----------------------------------|
| A. Biotic | I. Rivers, Lakes, Seas, Oceans |
| B. Hydrosphere | II. Thin layer of air |
| C. Atmosphere | III. Hard top layer of the earth |
| D. Lithosphere | IV. The world of living organisms |


Choose the correct option from the answers given below

1. A-I, B-II, C-III, D-IV 2. A-II, B-III, C-I, D-IV 3. A-III, B-I, C-II, D-IV 4. A-IV, B-I, C-II, D-III



7_2_Inside Our Earth


www.studyboxdoon.com



Q. Sandstone is an example of _____ rock.

- a) Igneous
- b) Metamorphic
- c) Sedimentary
- d) Extrusive Igneous rock


www.studyboxdoon.com




Q.Choose the meaning of the word Metamorphic from the following:-

- a) Fire
- b) Settle down
- c) Change of form
- d) Air

www.studyboxdoon.com




7_3_Our Changing Earth



Q. Where are mushroom rocks found?

1. Valleys
2. Glaciers
3. Hills
4. Deserts

www.studyboxdoon.com



Q.Choose the landform, which is not formed by the river?


- a) Ox-bow
- b) Levees
- c) Meanders
- d) Loess

www.studyboxdoon.com



Q. 'Which of the following is formed by the material carried by glaciers?

1. Flood plains
2. Moraines
3. Beach
4. Loess



Q.Ox bow lakes are found in:

1. Mountains
2. Deserts
3. Glaciers
4. River valleys

www.studyboxdoon.com



7_6 Natural Vegetation and Wild Life

Q.From the following, choose the region that is known as 'Orchards of the World'.

- a) Coniferous region
- b) Tropical region
- c) Mediterranean region
- d) Temperate region



7_8


Q. 'What is the place "where a river flows into another water body called?"

1. River's mouth
2. Delta
3. Basin
4. Tributary




7_10 Life in the Deserts

www.studyboxdoon.com



Q.The Ladakh desert is mainly inhabited by —

- a) Christians and Muslims
- b) Buddhists and Muslims
- c) Christians and Buddhists
- d) Only Buddhists



Q. Where is Gangri glacier?

1. Assam
2. Mizoram
3. Ladakh
4. Uttarakhand

7_9


Land covered with grass shrubs on which animals can graze freely is known as:-

- (a) Fallow land (b) Overgrazing (c) Pasture (d) Agricultural land




9_NCERT

www.studyboxdoon.com




www.studyboxdoon.com



10_NCERT


www.studyboxdoon.com



The monazite sands of Kerala are rich in :

- (1) Uranium (2) Thorium (3) Platinum (4) Coal

www.studyboxdoon.com



In which state of India is the “Jim Corbett National Park” situated?


(a) Uttarakhand

(b) Gujarat

(c) Assam

(d) Uttar Pradesh

www.studyboxdoon.com



www.studyboxdoon.com

